



JK Chrome

JK Chrome | Employment Portal



Rated No.1 Job Application of India

Sarkari Naukri
Private Jobs
Employment News
Study Material
Notifications



JOBS



NOTIFICATIONS



G.K



STUDY MATERIAL



JK Chrome

jk chrome
Contains ads



www.jkchrome.com | Email : contact@jkchrome.com

Recruitment of Sub-Inspector in Delhi Police, CAPFs and Assistant Sub-Inspector in CISF Examination CPO

Section : SI CPO

Q.1 Select the option that is related to the third term in the same way as the second term is related to the first term.

RY : QZ :: HK : _____

- Ans
- 1. GL
 - 2. IM
 - 3. GJ
 - 4. IL

Question ID : 98958012121
Status : Answered
Chosen Option : 1

Q.2 Which letter-cluster will replace the question mark (?) in the following series?

XCA, WDZ, UFX, RIU, NMQ, ?

- Ans
- 1. JFU
 - 2. IKJ
 - 3. JKO
 - 4. IRL

Question ID : 98958012109
Status : Answered
Chosen Option : 4

Q.3 Three of the following four number-pairs are alike in a certain way and one is different. Identify the different one.

- Ans
- 1. 5 : 29
 - 2. 3 : 7
 - 3. 8 : 62
 - 4. 6 : 34

Question ID : 98958012136
Status : Answered
Chosen Option : 3

Q.4

Select the figure that will come next in the following series.



Ans



Question ID : 98958012144

Status : Answered

Chosen Option : 4

Q.5 If TEMPLE is coded as ELPMET, then how will CHURCH be coded as?

Ans 1. HCURHC

2. HCRUHC

3. HCURCH

4. HCRUCH

Question ID : 98958012122

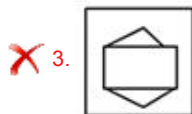
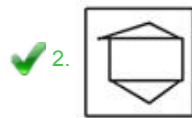
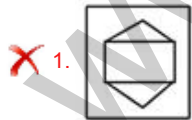
Status : Answered

Chosen Option : 2

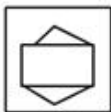
Q.6 Select the option in which the given figure is embedded.



Ans



✗ 4.



Question ID : 98958012149
Status : Answered
Chosen Option : 2

Q.7 Select the option in which the words share the same relationship as that shared by the given set of words
(in the same order).

Hand : Finger : Ring

- Ans
- ✓ 1. Face : Nose : Nose pin
 - ✗ 2. Earring : Ear : Jewel
 - ✗ 3. Cap : Head : Hair
 - ✗ 4. Anklet : Foot : Ankle

Question ID : 98958012118
Status : Answered
Chosen Option : 1

Q.8 In a certain code language, 'mee muk pic' means 'roses are yellow', 'nil dic' means 'white flowers' and 'pic muk dic' means 'flowers are fruits'. What is the code for 'white' in that language?

- Ans
- ✓ 1. nil
 - ✗ 2. pic
 - ✗ 3. dic
 - ✗ 4. muk

Question ID : 98958012123
Status : Answered
Chosen Option : 1

Q.9 Three of the following four options are similar in a certain way and one is different. Find the one that is different.

- Ans
- ✗ 1. 5 – 25 – 125
 - ✗ 2. 10 – 100 – 1000
 - ✗ 3. 6 – 36 – 216
 - ✓ 4. 3 – 6 – 27

Question ID : 98958012135
Status : Answered
Chosen Option : 4

Q.1 Select the option that is related to the third number in the same way as the second number is related to the first number.

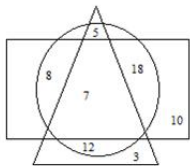
0
25 : 15625 :: 30 : _____

- Ans
- ✗ 1. 2500
 - ✗ 2. 900
 - ✗ 3. 2700
 - ✓ 4. 27000

Question ID : **98958012133**
Status : **Not Answered**
Chosen Option : --

Q.1 In the following diagram, the rectangle represents doctors, the triangle represents players and the circle represents philosophers.

The numbers in different segments show the number of persons.



According to the given diagram, How many players are philosophers but not Doctors?

- Ans
- 1. 12
 - 2. 17
 - 3. 5
 - 4. 7

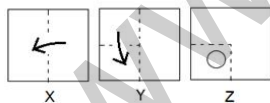
Question ID : **98958012155**
Status : **Answered**
Chosen Option : 2

Q.1 Three of the following four words are alike in a certain way and one is different. Find the odd one out.

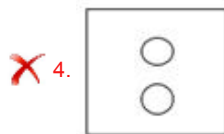
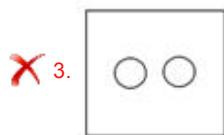
- Ans
- 1. Ottawa
 - 2. Paris
 - 3. Cairo
 - 4. Kyat

Question ID : **98958012115**
Status : **Not Answered**
Chosen Option : --

Q.1 Given is a set of three figures, X, Y and Z, showing the folding sequence of a piece of paper. Fig Z shows the manner in which the folded paper has been cut. Study these figures carefully and select the option that would most closely resemble this piece of paper when unfolded.



- Ans
- 1.
 - 2.



Question ID : 98958012152
Status : Answered
Chosen Option : 2

Q.1 In the following number series, two numbers have been put within brackets. Select the most appropriate option for these 4 numbers in relation to their inclusion in the series.

1, 9, 25, 49, (81), 121, 169, (215), 289

Ans 1. Both the bracketed numbers are incorrect.

2. Both the bracketed numbers are correct.

3.

The first bracketed number is correct and the second is incorrect.

4.


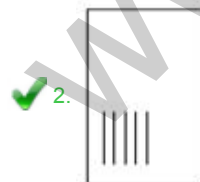
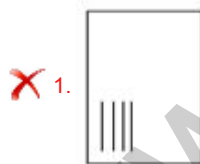
The first bracketed number is incorrect and the second is correct.

Question ID : 98958012139
Status : Answered
Chosen Option : 3

Q.1 Select the figure that will come next in the following series.



Ans



✗ 4.



Question ID : 98958012145
Status : Answered
Chosen Option : 2

Q.1 Select the word-pair in which the two words are related in the same way as are the two words in the given word-pair.

6

Boy : Girl

- Ans
- ✗ 1. Horse : Doe
 - ✓ 2. Cock : Hen
 - ✗ 3. Cat : Kitten
 - ✗ 4. Donkey : Bray

Question ID : 98958012119
Status : Answered
Chosen Option : 2

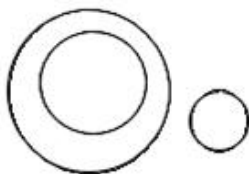
Q.1 Select the Venn diagram that best illustrates the relationship between the following three classes.

7

Hospital, Doctor, Patient

Ans

✗ 1.



✓ 2.



✗ 3.



✗ 4.



Question ID : 98958012156
Status : Answered
Chosen Option : 2

Q.1 Which number will come next in the following series?

8

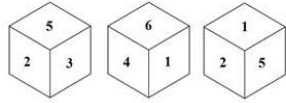
1, 3, 7, 15, 31, 63, _____

- Ans
- ✗ 1. 126

- 2. 127
- 3. 125
- 4. 139

Question ID : 98958012128
Status : Answered
Chosen Option : 2

Q.1 Three different positions of the same dice are shown below. Which number is on the face opposite the face showing 4?



- Ans
- 1. 5
 - 2. 3
 - 3. 2
 - 4. 6

Question ID : 98958012147
Status : Answered
Chosen Option : 3

Q.2 If 'ARUN' is coded as 54, then how will 'VARUN' be coded as?

- Ans
- 1. 87
 - 2. 67
 - 3. 76
 - 4. 78

Question ID : 98958012124
Status : Answered
Chosen Option : 3

Q.2 Select the option that is related to the third term in the same way as the second term is related to the first term.

1
Apple : Fruit :: Spinach : _____

- Ans
- 1. Flower
 - 2. Root
 - 3. Food
 - 4. Vegetable

Question ID : 98958012116
Status : Answered
Chosen Option : 4

Q.2 Identify the number that does NOT belong in the given series.

1, 8, 27, 64, 125, 216, 344, 512, 729

- Ans
- 1. 344
 - 2. 729

3. 64

4. 512

Question ID : 98958012129
Status : Answered
Chosen Option : 1

Q.2 Two statements are given, followed by two conclusions I and II. Assuming these statements to be true, even if they seem to be at variance with commonly known facts, decide which of the given conclusions logically follow(s) from the statements.

Statements:

All plants are flowers.

No flower is blue.

Conclusions:

I. Some plants are blue.

II. Those plants that are not flowers are blue.

- Ans**
- 1. Only conclusion II follows.
 - 2. Only conclusion I follows.
 - 3. Both conclusions I and II follow.
 - 4. Neither conclusion I nor II follows.

Question ID : 98958012126
Status : Answered
Chosen Option : 4

Q.2 Three of the following four letter-clusters are alike in a certain way and one is different. Find the odd one out.

- Ans**
- 1. FEDC
 - 2. NMKL
 - 3. LKIJ
 - 4. YXVW

Question ID : 98958012112
Status : Answered
Chosen Option : 1

Q.2 A Nurse moved 90 m in the East in a hospital to look for her duty Doctor, then she turned right and went 20 m. After this she turned right and after going 30 m she reached I.C.U. but the Doctor was not there. From there she went 100 m to her north and met her doctor. What distance did she moved to meet her duty doctor from the starting point.

- Ans**
- 1. 80 m
 - 2. 100 m
 - 3. 140 m
 - 4. 120 m

Question ID : 98958012153
Status : Not Answered
Chosen Option : --

Q.2 Three of the following four word-pairs are alike in a certain way and one is different. Find the odd one out.

6

- Ans
- 1. Warrior : Sword
 - 2. Mason : Knife
 - 3. Author : Pen
 - 4. Carpenter : Saw

Question ID : 98958012114
Status : Answered
Chosen Option : 2

Q.2 Select the option that is related to the third number in the same way as the second number is related to the first number.

7

13 : 84.5 :: 20 : _____

- Ans
- 1. 150
 - 2. 100
 - 3. 120
 - 4. 200

Question ID : 98958012132
Status : Answered
Chosen Option : 3

Q.2 Three of the following four letter-clusters are alike in a certain way and one is different. Find the odd one out.

8

- Ans
- 1. IJkLLMM
 - 2. BCdEFFF
 - 3. PQrSSTT
 - 4. UVwXXYY

Question ID : 98958012113
Status : Answered
Chosen Option : 2

Q.2 Which of the following interchanges of signs and numbers would make the given equation correct?

9

$$18 - 3 \div 6 + 24 \times 12 = 48$$

- Ans
- 1. \times and $+$, 3 and 6
 - 2. \div and $-$, 12 and 6
 - 3. \div and \times , 3 and 12
 - 4. \times and $-$, 3 and 6

Question ID : 98958012141
Status : Answered
Chosen Option : 4

Q.3 Which number will replace the question mark (?) in the following series?

0

2, 5, 10, 17, 26, 37, ?, 65, 82, 101

- Ans
- 1. 48
 - 2. 42
 - 3. 50
 - 4. 49

Question ID : 98958012130
Status : Answered
Chosen Option : 3

Q.3 Select the correct mirror image of the given figure when the mirror is placed on the right of the figure .
1



- Ans
- 1.
 - 2.
 - 3.
 - 4.

Question ID : 98958012151
Status : Answered
Chosen Option : 1

Q.3 Three of the following four number-pairs are alike in a certain way and one is different. Identify the different one.
2

- Ans
- 1. 4 : 16
 - 2. 10 : 100
 - 3. 7 : 49
 - 4. 64 : 6

Question ID : 98958012134
Status : Answered
Chosen Option : 4

Q.3 Select the option that is related to the third number in the same way as the second number is related to the first number.
3

4 : 20 :: 8 : _____

- Ans
- 1. 56
 - 2. 64
 - 3. 40

✗ 4. 32

Question ID : 98958012131
Status : Answered
Chosen Option : 3

Q.3 In the following number series, two numbers have been put within brackets. Select the most appropriate option for these numbers in relation to their inclusion in the series.

2, 4, 6, 8, 10, (12), 14, 16, (18), 20

Ans ✗ 1.

The first bracketed number is correct and the second is incorrect.

✗ 2.

The first bracketed number is incorrect and the second is correct.

✓ 3. Both the bracketed numbers are correct.

✗ 4. Both the bracketed numbers are incorrect.

Question ID : 98958012138
Status : Answered
Chosen Option : 3

Q.3 Select the option in which the given figure is embedded. (Rotation is not allowed)



Ans

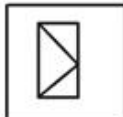
✗ 1.



✓ 2.



✗ 3.



✗ 4.



Question ID : 98958012148
Status : Answered
Chosen Option : 2

Q.3
6

Two statements are given, followed by four conclusions I, II, III and IV. Assuming these statements to be true, even if they seem to be at variance with commonly known facts, decide which of the given conclusions logically follow(s) from the statements.

Statements:

Some boxes are dolls.

All dolls are pens.

Conclusions:

I. Some boxes are pens.

II. Some pens are boxes.

III. Some pens are dolls.

IV. All pens are dolls.

- Ans**
- 1. Only conclusions II, III and IV follow.
 - 2. Only conclusions I, II and III follow.
 - 3. Only conclusions I, II and IV follow.
 - 4. All the conclusions follow.

Question ID : 98958012127
Status : Answered
Chosen Option : 2

Q.3 If 'A' denotes '+', 'B' denotes '×', 'C' denotes '+' and 'D' denotes '-', then what will be the value of the following expression?

7

12 B 12 A 4 C 5 D 1

- Ans**
- 1. 50
 - 2. 40
 - 3. 39
 - 4. 59

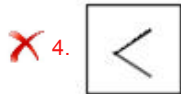
Question ID : 98958012142
Status : Answered
Chosen Option : 2

Q.3 Select the option that will come next in the given series.

8

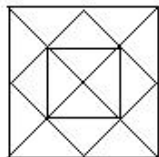


- Ans**
- 1.
 - 2.
 - 3.



Question ID : 98958012143
Status : Answered
Chosen Option : 1

Q.3 Find the number of squares in the following figure.



- Ans
- 1. 9
 - 2. 4
 - 3. 6
 - 4. 7

Question ID : 98958012146
Status : Answered
Chosen Option : 4

Q.4 Select the correct alternative to indicate the arrangement of the following words in a logical and meaningful order.

- 0
1. Gateway of India
 2. World
 3. Mumbai
 4. India
 5. Maharashtra

- Ans
- 1. 2, 4, 5, 1, 3
 - 2. 4, 2, 5, 3, 1
 - 3. 2, 4, 5, 3, 1
 - 4. 4, 2, 5, 1, 3

Question ID : 98958012111
Status : Answered
Chosen Option : 3

Q.4 In a code language, 54831 is coded as 63922. What will be the code for 86274 in that language?

- 1
- Ans
- 1. 95365
 - 2. 95185
 - 3. 77185
 - 4. 75365

Question ID : 98958012125
Status : Answered
Chosen Option : 1

Q.4 Rama walks from his university campus 4 km towards north and then turns to the right to reach his department. After

2 walking 2.5 km from the department he turns to the left and walks 4 km and reached Conference hall. Now in which direction is he from the starting place?

- Ans
- 1. South
 - 2. West
 - 3. South-West
 - 4. North-East

Question ID : 98958012154
Status : Answered
Chosen Option : 4

Q.4 'Cardiology' is related to 'Heart' in the same way as 'Pathology' is related to '_____'.
3

- Ans
- 1. Body
 - 2. Soil
 - 3. Man
 - 4. Diseases

Question ID : 98958012117
Status : Answered
Chosen Option : 2

Q.4 Which of the following two signs need to be interchanged to make the given equation correct?
4


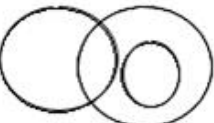
$$6 \div 5 - 5 \times 5 + 6 = 35$$

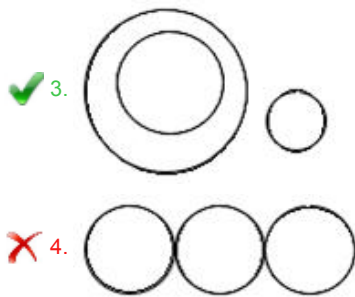
- Ans
- 1. \times and $-$
 - 2. $+$ and $-$
 - 3. \div and \times
 - 4. $+$ and \div

Question ID : 98958012140
Status : Answered
Chosen Option : 3

Q.4 Select the Venn diagram that best illustrates the relationship between the following three classes.
5

Stationery, Pencil, Apple

- Ans
- 1. 
 - 2. 



Question ID : 98958012157
Status : Answered
Chosen Option : 3

Q.4 Select the correct alternative to indicate the arrangement of the following words in a logical and meaningful order.
6

- 1) Alarm Set
- 2) Office
- 3) Car
- 4) Wake up
- 5) Alarm Rang
- 6) Get Ready

- Ans
- 1. 1, 5, 4, 3, 6, 2
 - 2. 1, 2, 3, 4, 5, 6
 - 3. 1, 5, 4, 6, 3, 2
 - 4. 1, 4, 5, 6, 3, 2

Question ID : 98958012110
Status : Answered
Chosen Option : 3

Q.4 Which letter will come next in the following series?
7

Z, U, Q, N, L, _____

- Ans
- 1. K
 - 2. H
 - 3. G
 - 4. M

Question ID : 98958012108
Status : Answered
Chosen Option : 1

Q.4 Select the option that gives the correct explanation for the following group of words.
8

Bridge, Link, Chain

- Ans
- 1. They are suits of cards.
 - 2. They are types of medals.

- 3. They are jewels.
- 4. They join two parts.

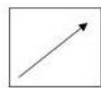
Question ID : 98958012120
Status : Answered
Chosen Option : 4

Q.4 Three of the following four numbers are alike in a certain way and one is different. Identify the different one.
9

- Ans
- 1. 215
 - 2. 144
 - 3. 169
 - 4. 196

Question ID : 98958012137
Status : Answered
Chosen Option : 1

Q.5 Select the correct mirror image of the given figure when the mirror is placed at the right side.
0



- Ans
- 1.
 - 2.
 - 3.
 - 4.

Question ID : 98958012150
Status : Answered
Chosen Option : 1

Q.5 _____ is situated at the confluence of Alaknanda and Mandakini rivers.
1

- Ans
- 1. Nandaprayag
 - 2. Vishnuprayag
 - 3. Rudraprayag
 - 4. Karnaprayag

Question ID : 98958011932

Status : **Not Answered**
Chosen Option : --

Q.5
2 Which of the following is false as per Vedic theory?

Ans 1.

The Kshatriyas, or warrior rulers, came from Purusha's arms

2.

The Vaishyas, or the commoners, came from Purusha's thighs

3. The Brahmins, or priests, came from Purusha's ears

4.

The Shudras, or labourers and servants, came from Purusha's feet

Question ID : **98958011936**
Status : **Not Answered**
Chosen Option : --

Q.5
3 Eid ul-Fitr is celebrated on the first day of Shawwal, which falls in the _____ month of the Islamic calendar.

Ans 1. eighth

2. sixth

3. tenth

4. twelfth

Question ID : **98958011911**
Status : **Answered**
Chosen Option : 2

Q.5
4 Gir National Park is known for its _____.

Ans 1. Orangutan

2. Cherry blossom

3. Red silk cotton

4. Asiatic Lions

Question ID : **98958011934**
Status : **Answered**
Chosen Option : 2

Q.5
5 _____ city tops the list of top 10 richest cities in India, with a GDP of \$ 209 billion.

Ans 1. New Delhi

2. Mumbai

3. Bengaluru

4. Kolkata

Question ID : **98958011915**
Status : **Answered**

Chosen Option : 2

Q.5
6 Which of the following flowers is botanically known as Dianthus?

- Ans
- 1. Rose
 - 2. Daffodil
 - 3. Lily
 - 4. Carnation

Question ID : 98958011918
Status : Answered
Chosen Option : 2

Q.5
7 _____ was affectionately called 'Ba'.

- Ans
- 1. Indira Gandhi
 - 2. Kasturba Gandhi
 - 3. Vijayalaxmi Pandit
 - 4. Sarojini Naidu

Question ID : 98958011953
Status : Answered
Chosen Option : 4

Q.5
8 Which of the following is the first port in India to become a public company?

- Ans
- 1. Kandla
 - 2. Mangalore
 - 3. Ennore
 - 4. Mormugao

Question ID : 98958011913
Status : Answered
Chosen Option : 2

Q.5
9 _____ was born to the Chauhan King Someshvara and his queen Karpuradevi in 1166 CE.

- Ans
- 1. Maharaja Man Singh
 - 2. Maharana Pratap
 - 3. Maharaja Suraj Mal
 - 4. Prithviraj Chauhan

Question ID : 98958011938
Status : Not Answered
Chosen Option : --

Q.6
0 Which of the following is NOT a mint of the Security Printing and Minting Corporation of India Limited (SPMCIL)?

Ans

- 1. India Government Mint, Kolkata
- 2. India Government Mint, Mumbai
- 3. India Government Mint, Hyderabad
- 4. India Government Mint, Gorakhpur

Question ID : 98958011917
Status : Answered
Chosen Option : 1

Q.6
1 Prince Khurram grew up to be known as:

- Ans
- 1. Akbar
 - 2. Humayun
 - 3. Shah Jahan
 - 4. Jahangir

Question ID : 98958011941
Status : Answered
Chosen Option : 4

Q.6
2 ONGC discovered the country's first shale gas reserve at:

- Ans
- 1. Jamnagar
 - 2. Durgapur
 - 3. Chandikhol
 - 4. Padur

Question ID : 98958011933
Status : Not Answered
Chosen Option

Q.6
3 _____ founded the 'Bal Charkha Sangh', where children were taught to spin & weave.

- Ans
- 1. Sarojini Naidu
 - 2. Vinoba Bhave
 - 3. Indira Gandhi
 - 4. Mahatma Gandhi

Question ID : 98958011952
Status : Answered
Chosen Option : 4

Q.6
4 Who is the founder of the biotech Indian company called 'Biocon'?

- Ans
- 1. Indu Jain
 - 2. Kiran Majumdar Shaw
 - 3. Ratan Tata

4. Mukesh Ambani

Question ID : 98958011946
Status : Answered
Chosen Option : 2

Q.6
5 Excessive amount of _____ in the body causes gout.

- Ans 1. uric acid
 2. lactic acid
 3. nitric acid
 4. acetic acid

Question ID : 98958011928
Status : Answered
Chosen Option : 4

Q.6
6 Which of the following was NOT a part of the 'Navratna' at Vikramaditya's court?

- Ans 1. Surdas
 2. Vararuchi
 3. Kshapanaka
 4. Kalidasa

Question ID : 98958011940
Status : Not Answered
Chosen Option : --

Q.6
7 The festival of _____ is dedicated to Goddess Durga and her nine avatars.

- Ans 1. Holi
 2. Navratri
 3. Diwali
 4. Sankranti

Question ID : 98958011910
Status : Answered
Chosen Option : 2

Q.6
8 Who was the Chairperson of the NITI Aayog as of January 2019?

- Ans 1. Narendra Modi
 2. Amit Shah
 3. Ram Nath Kovind
 4. Sushma Swaraj

Question ID : 98958011914
Status : Answered
Chosen Option : 1

Q.6
9 Which of the following flowers is botanically known as Narcissus?

- Ans
- 1. Rose
 - 2. Carnation
 - 3. Lily
 - 4. Daffodil

Question ID : 98958011919
Status : Answered
Chosen Option : 1

Q.7
0 Vedic civilisation flourished along the river _____.

- Ans
- 1. Indus
 - 2. Yamuna
 - 3. Saraswati
 - 4. Ganga

Question ID : 98958011930
Status : Answered
Chosen Option : 1

Q.7
1 Photophobia means:

- Ans
- 1. Dislike towards taking photos
 - 2. Addiction to light
 - 3. Addiction to taking photos
 - 4. Sensitivity to light

Question ID : 98958011927
Status : Answered
Chosen Option : 1

Q.7
2 Tata Iron And Steel company (TISCO) was incorporated in:

- Ans
- 1. 1915
 - 2. 1907
 - 3. 1911
 - 4. 1913

Question ID : 98958011916
Status : Not Answered
Chosen Option : --

Q.7
3 Tennis player Somdev Kishore Devvarman was awarded the _____ in 2018.

- Ans
- 1. Padma Shree
 - 2. Padma Bhushan

- 3. Bharat Ratna
- 4. Padma Vibhushan

Question ID : 98958011954
Status : Answered
Chosen Option : 4

Q.7
4 _____ is a textile art from Gujarat / Rajasthan.

- Ans
- 1. Ikat
 - 2. Chanderi
 - 3. Bandhani
 - 4. Paithani

Question ID : 98958011935
Status : Answered
Chosen Option : 3

Q.7
5 The 11th President of India, _____, was also known as the 'Missile Man'.

- Ans
- 1. APJ Abdul Kalam
 - 2. Zakir Hussein
 - 3. Fakhruddin Ali Ahmed
 - 4. K R Narayanan

Question ID : 98958011951
Status : Answered
Chosen Option : 1

Q.7
6 The Hindi film 'Kai Po Che' is based on the book titled _____ by Chetan Bhagat.

- Ans
- 1. Two States
 - 2. Five Point Someone
 - 3. One Night At The Call Centre
 - 4. Three Mistakes Of My Life

Question ID : 98958011947
Status : Answered
Chosen Option : 4

Q.7
7 Nyctophobia is the fear of:

- Ans
- 1. Birds
 - 2. Darkness
 - 3. Animals
 - 4. Light

Question ID : 98958011925
Status : Answered

Chosen Option : 4

Q.7
8 The Indian Olympic Association has expressed interest to host the _____ summer Olympics.

- Ans
- 1. 2028
 - 2. 2024
 - 3. 2020
 - 4. 2032

Question ID : 98958011956
Status : Answered
Chosen Option : 3

Q.7
9 India was divided into India and Pakistan by the _____ Act.

- Ans
- 1. Government of India
 - 2. Division of India
 - 3. Partition of India
 - 4. India Independence

Question ID : 98958011950
Status : Answered
Chosen Option : 1

Q.8
0 The last Nizam of Hyderabad:

- Ans
- 1. Muzafar Jung
 - 2. Mir Osman Ali Khan
 - 3. Nasir Jung
 - 4. Qulich Khan

Question ID : 98958011937
Status : Not Answered
Chosen Option : --

Q.8
1 Arundhati Roy won Man Booker Prize in 1997 for her book:

- Ans
- 1. History of Wolves
 - 2. The God of Small Things
 - 3. 2 States
 - 4. The Ministry of Utmost Happiness

Question ID : 98958011945
Status : Answered
Chosen Option : 2

Q.8
2 Which of the following clubs, founded in 1889, is the oldest Indian club still in operation as on January 2019?

- Ans
- 1. North Imphal Sporting Association

- 2. Indian Bank Recreational Club
- 3. Calcutta Cricket & Football Club
- 4. Mohun Bagan Athletic Club

Question ID : 98958011955
Status : Not Answered
Chosen Option : --

Q.8
3 Malus pumila is the botanical name of the _____ tree.

- Ans
- 1. Banana
 - 2. Apple
 - 3. Orange
 - 4. Water melon

Question ID : 98958011920
Status : Answered
Chosen Option : 1

Q.8 The Purna Kumbh Mela takes place every _____ years at one of the four places by rotation, Prayag, Haridwar, Ujjain
4 and Nashik.

- Ans
- 1. twelve
 - 2. two
 - 3. six
 - 4. three

Question ID : 98958011912
Status : Answered
Chosen Option : 1

Q.8
5 Which of the below mentioned human organs can regrow after damage in adults?

- Ans
- 1. Kidney
 - 2. Liver
 - 3. Gall bladder
 - 4. Lung

Question ID : 98958011926
Status : Answered
Chosen Option : 2

Q.8
6 The ancient name of the river Tungabhadra was:

- Ans
- 1. Sindhu
 - 2. Kubha
 - 3. Pampa
 - 4. Vitasta

Question ID : 98958011931
Status : Answered
Chosen Option : 1

Q.8 Name the recipient of the Padma Bhushan Award, 2019 for Trade and Industry (Food Processing).

7

- Ans
- 1. Narsingh Dev Jamwal
 - 2. Vallabhbhai Vasrambhai Marvaniya
 - 3. Harvinder Singh Phoolka
 - 4. Mahashay Dharam Pal Gulati

Question ID : 98958011942
Status : Not Answered
Chosen Option : --

Q.8 Citrullus lanatus is the botanical name for _____.

8

- Ans
- 1. Apple
 - 2. Watermelon
 - 3. Orange
 - 4. Banana

Question ID : 98958011921
Status : Not Answered
Chosen Option : --

Q.8 The fear of foreigners is called:

9

- Ans
- 1. Toxiphobia
 - 2. Xenophobia
 - 3. Theophobia
 - 4. Sitophobia

Question ID : 98958011924
Status : Answered
Chosen Option : 3

Q.9 Natural pearls contain more than 80% _____.

0

- Ans
- 1. silica
 - 2. calcium carbonate
 - 3. sodium carbonate
 - 4. quartz

Question ID : 98958011923
Status : Answered
Chosen Option : 4

Q.9
1 The festival of _____ is also known as Phagwa.

- Ans
- 1. Sankranti
 - 2. Holi
 - 3. Diwali
 - 4. Ganesh Chaturthi

Question ID : 98958011908
Status : Not Answered
Chosen Option : --

Q.9
2 _____ was a professor of political science and economics at the University of Taxila.

- Ans
- 1. Samudragupta
 - 2. Kautilya
 - 3. Ajatshatru
 - 4. Bindusara

Question ID : 98958011939
Status : Not Answered
Chosen Option : --

Q.9
3 Which of the following is the unit of Magnetic field strength?

- Ans
- 1. Gauss
 - 2. Ohm
 - 3. Tesla
 - 4. Weber

Question ID : 98958011922
Status : Answered
Chosen Option : 1

Q.9
4 The BHIM app was launched by Prime Minister Narendra Modi on:

- Ans
- 1. 15th August, 2016
 - 2. 31st October, 2016
 - 3. 26th January, 2016
 - 4. 30th December, 2016

Question ID : 98958011949
Status : Answered
Chosen Option : 4

Q.9
5 Bos mutus is the scientific name for:

- Ans
- 1. Wild yak

- 2. Horse
- 3. Ox
- 4. Buffalo

Question ID : 98958011929
Status : Not Answered
Chosen Option : --

Q.9
6 The Panchayat Raj System was first adopted by the state of _____.

- Ans
- 1. Rajasthan
 - 2. Andhra Pradesh
 - 3. Tamil Nadu
 - 4. West Bengal

Question ID : 98958011948
Status : Answered
Chosen Option : 1

Q.9
7 Padma Vibhushan is the _____ civilian award of India.

- Ans
- 1. highest
 - 2. fourth highest
 - 3. third highest
 - 4. second highest

Question ID : 98958011944
Status : Not Answered
Chosen Option : --

Q.9
8 Who is the only foreigner to receive the Padma Vibhushan Award in 2019?

- Ans
- 1. Ismail Omar Guelleh
 - 2. Anilkumar Manibhai Naik
 - 3. Teejan Bai
 - 4. Balwant Moreshwar Purandare

Question ID : 98958011943
Status : Not Answered
Chosen Option : --

Q.9
9 Pung Cholam is a folk dance of which state?

- Ans
- 1. Kerala
 - 2. Manipur
 - 3. Madhya Pradesh
 - 4. Karnataka

Question ID : 98958011909
Status : Not Answered
Chosen Option : --

Q.1 00 _____ is the world's richest cricket board as of year 2018.

- Ans
- 1. Board of Control for Cricket in India
 - 2. Pakistan Cricket Board
 - 3. England and Wales Cricket Board
 - 4. Cricket South Africa

Question ID : 98958011957
Status : Answered
Chosen Option : 1

Q.1 01 A can do a work in 20 days, while B can do the same work in 25 days. They started the work jointly. Few days later C also joined them and thus all of them completed the whole work in 10 days. All of them were paid total of ₹700. What is the share of C?

- Ans
- 1. ₹55
 - 2. ₹65
 - 3. ₹75
 - 4. ₹70

Question ID : 98958012328
Status : Answered
Chosen Option : 2

Q.1 02 From a point P on a level ground, the angle of elevation of the top of a tower is 30° . If the tower is 270 m high, the distance of point P from the foot of the tower is:

- Ans
- 1. 467.65 m
 - 2. 476.65 m
 - 3. 376.65 m
 - 4. 367.65 m

Question ID : 98958012348
Status : Answered
Chosen Option : 1

Q.1 03 The unequal side of an isosceles triangle is 2 cm. The medians drawn to the equal sides are perpendicular. The area of the triangle is:

- Ans
- 1. 2 cm^2
 - 2. 3 cm^2
 - 3. 5 cm^2
 - 4. 1 cm^2

Question ID : 98958012344
Status : Answered
Chosen Option : 1

Q.1 A sells a car to B at 10% loss. If B sells it for ₹5,40,000 and gains 20%, the cost price of the car for A was:

04

- Ans
- 1. ₹5,00,000
 - 2. ₹5,40,000
 - 3. ₹5,10,000
 - 4. ₹5,20,000

Question ID : 98958012322

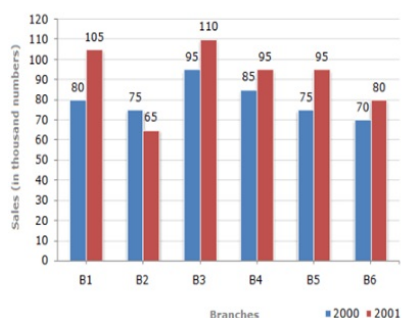
Status : Not Answered

Chosen Option : --

Q.1 The given bar chart, shows the sales of books (in thousand number) from six branches of a publishing company during two consecutive years 2000 and 2001.

05

Sales of Books (in thousand numbers) from Six Branches - B1, B2, B3, B4, B5 and B6 of a publishing Company in 2000 and 2001.



In the given bar-chart, total sales of branches B1, B3 and B5 taken together for both the years (in thousand numbers) is:

- Ans
- 1. 310
 - 2. 560
 - 3. 240
 - 4. 650

Question ID : 98958012349

Status : Answered

Chosen Option : 2

Q.1 If a sum becomes ₹1,460 in two years and ₹1,606 in three years due to the compound interest, then annual rate of interest is:

06

- Ans
- 1. 10%
 - 2. 9%
 - 3. 8%
 - 4. 11%

Question ID : 98958012326

Status : Answered

Chosen Option : 3

Q.1 What will be total cost of polishing curved surface of a wooden cylinder at rate of ₹20 per m², if its diameter is 40 cm and height is 7m?

07

- Ans
- 1. ₹176
 - 2. ₹184

3. ₹175

4. ₹186

Question ID : 98958012337
Status : Not Answered
Chosen Option : --

Q.1 When the sun's angle of depression changes from 30° to 60° , the length of the shadow of a tower decreases by 70 m.
08 What is the height of the tower?

Ans 1. 36.55 m

2. 65.55 m

3. 45.65 m

4. 60.55 m

Question ID : 8958012 47
Sta s : An wered
Chosen Optio : 3

Q.1 The average weight of 16 boys in a class is 60.25 kg and that of the remaining 10 boys is 45.75 kg. The average weight
09 of all boys in the class is:

Ans 1. 56.27

2. 55.37

3. 54.67

4. 53.76

Question ID : 98958012316
Status : Answered
Chosen Option : 3

Q.1 $3 \times 7 + 4 - 6 \div 3 - 7 + 45 \div 5 \times 4 + 49$ is equal to:
10

Ans 1. 99

2. 101

3. 103

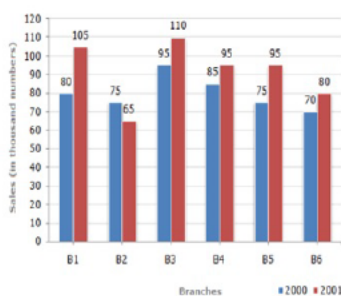
4. 67

Question ID : 98958012312
Status : Answered
Chosen Option : 2

Q.1
11

The given bar chart, shows the sales of books (in thousand number) from six branches of a publishing company during two consecutive years 2000 and 2001.

Sales of Books (in thousand numbers) from Six Branches - B1, B2, B3, B4, B5 and B6 of a publishing Company in 2000 and 2001.



In the given bar-chart, the ratio of total sales of branches B1, B3 and B5 to total sales of branches B2, B4 and B6 taken together for both the years (in thousand numbers) is:

- Ans
- 1. 23 : 45
 - 2. 45 : 23
 - 3. 56 : 47
 - 4. 47 : 56

Question ID : 98958012351
Status : Answered
Chosen Option : 4

- Q.1 Seema purchased mobile and got 20% discount on it. Had she got 25% discount, she would have saved ₹1,000 more.
12 How much did she pay for the mobile?

- Ans
- 1. ₹25,000
 - 2. ₹22,000
 - 3. ₹24,000
 - 4. ₹20,000

Question ID : 98958012317
Status : Not Answered
Chosen Option : --

- Q.1
13 $(8 + 4 - 2) \times (17 - 12) \times 10 - 89$ is equal to:

- Ans
- 1. 413
 - 2. 411
 - 3. 4120
 - 4. 4150

Question ID : 98958012313
Status : Not Answered
Chosen Option : --

- Q.1
14 If $a + b - c = 7$, $ab - bc - ca = 21$, then $a^3 + b^3 - c^3 + 3abc =$

- Ans
- 1. 117
 - 2. 98
 - 3. 124

✓ 4. -98

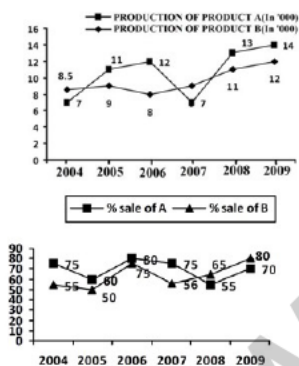
Question ID : 98958012339
Status : Not Answered
Chosen Option : --

Q.1 $\frac{4}{15} \tan^2 60^\circ + 3 \cos^2 30^\circ - 2 \sec^2 30^\circ - \frac{3}{4} \cot^2 60^\circ$ is equal to:

- Ans
- ✗ 1. $\frac{8}{3}$
 - ✗ 2. $\frac{5}{4}$
 - ✓ 3. $\frac{10}{3}$
 - ✗ 4. $\frac{7}{3}$

Question ID : 98958012346
Status : Not Answered
Chosen Option : --

Q.1 The line graph shows the production of product A and B (in thousands) during the period 2004 to 2009 and the second line graph shows the percentage sale of these products.



In the given line graph, what is the total sale of Products A and B in the year 2007?

- Ans
- ✓ 1. 10290
 - ✗ 2. 13460
 - ✗ 3. 11500
 - ✗ 4. 12490

Question ID : 98958012357
Status : Not Answered
Chosen Option : --

Q.1 Side AB of a triangle ABC is 80 cm long, whose perimeter is 170 cm. If angle ABC = 60°, the shortest side of triangle

17 ABC measures _____ cm.

- Ans
- ✓ 1. 17
 - ✗ 2. 15
 - ✗ 3. 25

4. 21

Question ID : 98958012343
Status : Not Answered
Chosen Option : --

Q.1 18 A man could not decide between discount of 30% or two successive discounts of 25% and 5%, both given on a shopping of ₹2,000. What is the difference between both the discounts?

- Ans
- 1. ₹20
 - 2. ₹15
 - 3. No difference
 - 4. ₹25

Question ID : 98958012318
Status : Not Answered
Chosen Option : --

Q.1 19 If $a+b = 8$, $ab = -12$, then $a^3+b^3 =$

- Ans
- 1. 833
 - 2. -244
 - 3. 800
 - 4. -833

Question ID : 98958012340
Status : Not Answered
Chosen Option : --

Q.1 20 ₹15,000 was invested by A and B together to start a small business. They got a profit of ₹2,000 at the end of the year. B took his profit share of ₹600. How much did A invest?

- Ans
- 1. ₹9,000
 - 2. ₹2,000
 - 3. ₹10,500
 - 4. ₹10,000

Question ID : 98958012324
Status : Answered
Chosen Option : 3

Q.1 21 A number is first decreased by 10% and then increased by 10%. The number so obtained is 100 less than the original number. The original number is:

- Ans
- 1. 100000
 - 2. 100
 - 3. 1000
 - 4. 10000

Question ID : 98958012319
Status : Answered
Chosen Option : 4

Q.1 A cube of side 1 m length is cut into small cubes of side 10 cm each. How many such small cubes can be obtained?

22

- Ans
- 1. 1000
 - 2. 10000
 - 3. 10
 - 4. 100

Question ID : 98958012335

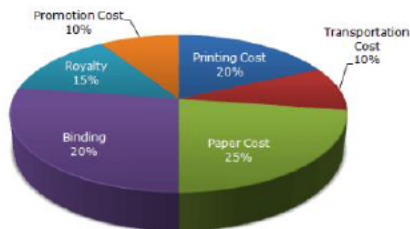
Status : Answered

Chosen Option : 3

Q.1 The given pie-chart, shows the percentage distribution of the expenditure incurred in publishing a book. Study the pie-chart and the answer the questions based on it.

23

Various Expenditures (in percentage) Incurred in Publishing a Book



In the given pie-chart, by what percentage the Royalty on the book is less than the Printing cost?

- Ans
- 1. 15
 - 2. 25
 - 3. 20
 - 4. 10

Question ID : 98958012352

Status : Answered

Chosen Option : 4

Q.1 A steel vessel has a base of length 60 cm and breadth 30 cm. Water is poured in the vessel. A cubical steel box having edge of 30 cm is immersed completely in the vessel. By how much will the water rise?

24

- Ans
- 1. 12 cm
 - 2. 15 cm
 - 3. 10 cm
 - 4. 9 cm

Question ID : 98958012334

Status : Answered

Chosen Option : 2

Q.1 If roots of $x^2 - 4x + a = 0$ are equal, then a =

25

- Ans
- 1. -4
 - 2. 4
 - 3. 8
 - 4. -8

Question ID : 98958012308

Status : **Answered**
Chosen Option : **2**

Q.1 Fresh fruit contains 68% water and dry fruit contains 20% water. How much dry fruit can be obtained from 100 kg of fresh fruits?

- Ans**
- 1. 80
 - 2. 60
 - 3. 40
 - 4. 20

Question ID : **98958012321**
Status : **Answered**
Chosen Option : **3**

Q.1 Pipe A can fill a tank in 16 minutes and pipe B empties it in 24 minutes. If both the pipes are opened together, after how many minutes should B be closed, so that the tank is filled in 30 minutes?

- Ans**
- 1. 21 minutes
 - 2. 20 minutes
 - 3. 18 minutes
 - 4. 15 minutes

Question ID : **98958012330**
Status : **Answered**
Chosen Option : **3**

Q.1 The speed of a car increases by 2 km/h after every one hour. If the distance travelled in the first one hour was 35 km, what was the total distance travelled in 12 hours?

- Ans**
- 1. 560 km
 - 2. 650 km
 - 3. 558 km
 - 4. 552 km

Question ID : **98958012331**
Status : **Not Answered**
Chosen Option : **--**

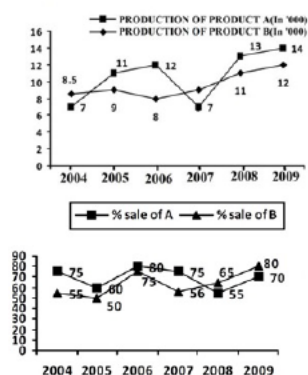
Q.1 The perimeter of a square is equal to the perimeter of a rectangle of length 16 cm and breadth 14 cm. Find the circumference of a semicircle whose diameter is equal to the side of the square.

- Ans**
- 1. 31.57 cm
 - 2. 21.57 cm
 - 3. 23.57 cm
 - 4. 25.57 cm

Question ID : **98958012333**
Status : **Answered**
Chosen Option : **3**

Q.1
30

The line graph shows the production of product A and B (in thousands) during the period 2004 to 2009 and the second line Graph shows the percentage sale of these products.



In the given line graph, what is the total sale of Product B in the year 2004 and 2008 together?

- Ans
- 1. 11950
 - 2. 12500
 - 3. 14600
 - 4. 11825

Question ID : 98958012356
Status : Not Answered
Chosen Option : --

Q.1 3 men, 4 women and 6 children can complete a work in 7 days. A woman does double the work a man does and a child does half the work a man does. How many women alone can complete this work in 7 days?

- Ans
- 1. 6
 - 2. 7
 - 3. 9
 - 4. 8

Question ID : 98958012327
Status : Answered
Chosen Option : 2

Q.1 The LCM of two numbers is 168 and their HCF is 12. If the difference between the numbers is 60, what is the sum of the numbers?

- Ans
- 1. 112
 - 2. 164
 - 3. 108
 - 4. 122

Question ID : 98958012310
Status : Answered
Chosen Option : 3

Q.1 $(\operatorname{cosec}A - \sin A)^2 + (\sec A - \cos A)^2 - (\cot A - \tan A)^2$ is equal to:

- Ans
- 1. 2
 - 2. 0
 - 3. 1

4. - 1

Question ID : 98958012345
Status : Answered
Chosen Option : 3

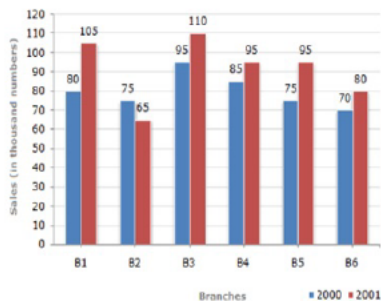
Q.1 When the integer n is divided by 7, the remainder is 3. What is the remainder if $5n$ is divided by 7?
34

- Ans
- 1. 3
 - 2. 0
 - 3. 1
 - 4. 2

Question ID : 9895801 309
Status : A swered
Chosen Optio :

Q.1 The given bar chart, shows the sales of books (in thousand number) from six branches of a publishing company during two consecutive years 2000 and 2001.
35

Sales of Books (in thousand numbers) from Six Branches - B1, B2, B3, B4, B5 and B6 of a publishing Company in 2000 and 2001.



In the given bar-chart, the ratio of total sales of all branches (in thousand numbers) for the year 2000 to 2001 is:

- Ans
- 1. 45 : 58
 - 2. 55 : 48
 - 3. 7 : 11
 - 4. 48 : 55

Question ID : 98958012350
Status : Answered
Chosen Option : 4

Q.1 A unique circle can always be drawn through x number of given non-collinear points, then x must be:
36

- Ans
- 1. 2
 - 2. 3
 - 3. 4
 - 4. 1

Question ID : 98958012341
Status : Answered
Chosen Option : 4

Q.1
37

$\frac{0.72 \times 0.72 \times 0.72 - 0.39 \times 0.39 \times 0.39}{0.72 \times 0.72 + 0.72 \times 0.39 + 0.39 \times 0.39}$ is equal to:

- Ans
- 1. 0.39
 - 2. 0.36
 - 3. 0.33
 - 4. 0.45

Question ID : 98958012314
Status : Answered
Chosen Option : 3

Q.1 38 At what rate percent per annum with simple interest will a sum of money double in 12.5 years?

- Ans
- 1. 8
 - 2. 12.5
 - 3. 10
 - 4. 6

Question ID : 98958012325
Status : Answered
Chosen Option : 1

Q.1 39 The average of 26 numbers is zero. Of them, how many may be greater than zero, at the most?

- Ans
- 1. 25
 - 2. 20
 - 3. 0
 - 4. 15

Question ID : 98958012315
Status : Answered
Chosen Option : 3

Q.1 40 If $x + x^{-1} = 2$, then the value of $x^3 + x^{-3}$ is:

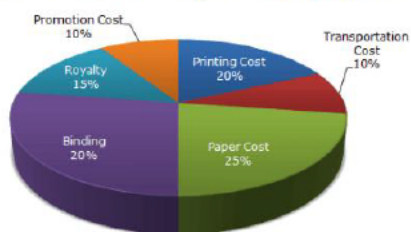
- Ans
- 1. 1
 - 2. $\frac{1}{2}$
 - 3. 2
 - 4. 3

Question ID : 98958012338
Status : Answered
Chosen Option : 3

Q.1
41

The given pie-chart, shows the percentage distribution of the expenditure incurred in publishing a book. Study the pie-chart and the answer the questions based on it.

Various Expenditures (in percentage) Incurred in Publishing a Book



In the given pie-chart, by what percentage the Promotion cost on the book is less than the Paper cost?

- Ans
- 1. 50
 - 2. 75
 - 3. 60
 - 4. 25

Question ID : 98958012353
Status : Answered
Chosen Option : 2

Q.1 Original breadth of a rectangular box is 20 cm. The box was then remade in such a way that its length increased by 30% but the breadth decreased by 20% and the area increased by 100 cm². What is the new area of the box?

- Ans
- 1. 2500 cm²
 - 2. 2200 cm²
 - 3. 2600 cm²
 - 4. 2400 cm²

Question ID : 98958012336
Status : Answered
Chosen Option : 4

Q.1 A earns ₹40 per hour and works for 12 hours. B earns ₹60 per hour and works for 10 hours. Find the ratio of their per day wages.

- Ans
- 1. 15 : 4
 - 2. 6 : 5
 - 3. 4 : 5
 - 4. 5 : 4

Question ID : 98958012323
Status : Answered
Chosen Option : 3

Q.1 A boy increases his speed to $\frac{9}{5}$ times of his original speed. By this he reaches his school 30 minutes before the usual time. How much time does he takes usually?

- Ans
- 1. 67.75 minutes
 - 2. 67.50 minutes
 - 3. 67.25 minutes
 - 4. 67.10 minutes

Question ID : 98958012332

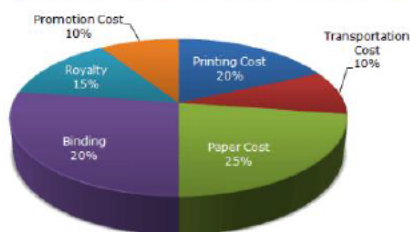
Status : Answered

Chosen Option : 3

Q.1 The given pie-chart, shows the percentage distribution of the expenditure incurred in publishing a book. Study the pie-chart and the answer the questions based on it.

45

Various Expenditures (in percentage) Incurred in Publishing a Book



In the given pie-chart, by what percentage Printing and Binding cost on the book is less than the other costs?

Ans

1. $\frac{47}{3}$

2. $\frac{20}{3}$

3. $\frac{50}{3}$

4. $\frac{100}{3}$

Question ID : 98958012354

Status : Answered

Chosen Option : 2

Q.1 12 buckets of water fill a tank when the capacity of each bucket is 13.5 litres. How many buckets will be needed to fill the same tank, if the capacity of each bucket is 9 litres?

46

Ans

1. 15

2. 16

3. 18

4. 17

Question ID : 98958012329

Status : Answered

Chosen Option : 2

Q.1 The product of two numbers is 6760 and their HCF is 13. How many such pair of numbers can be formed?

47

Ans

1. 2

2. 3

3. 1

4. 4

Question ID : 98958012311

Status : Answered

Chosen Option : 1

Q.1 If two equal circles whose centres are O and O' intersect each other at the point A and B, $OO' = 12$ cm and $AB = 16$ cm,

48 then radius of the circle is:

- Ans
- 1. 15 cm
 - 2. 10 cm
 - 3. 14 cm
 - 4. 12 cm

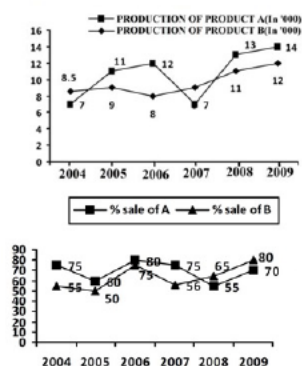
Question ID : 98958012342

Status : Answered

Chosen Option : 2

Q.1 The line graph shows the production of product A and B (in thousands) during the period 2004 to 2009 and the second

49 line Graph shows the percentage sale of these products.



In the given line graph, what is the total sale of Product A in the year 2005 and 2009 taken together?

- Ans
- 1. 16400
 - 2. 14600
 - 3. 17500
 - 4. 18500

Question ID : 98958012355

Status : Answered

Chosen Option : 3

Q.1 If 20% of $a = b$, then $b\%$ of 20 is equal to:

50

- Ans
- 1. 4% of a
 - 2. 16% of a
 - 3. 8% of a
 - 4. 2% of a

Question ID : 98958012320

Status : Answered

Chosen Option : 1

Q.1 Select the wrongly spelt word.

51

- Ans
- 1. fastidious
 - 2. facsimile
 - 3. fasinated

4. fashion

Question ID : 98958011698
Status : Answered
Chosen Option : 3

Q.1 Identify the segment in the sentence, which contains the grammatical error.

52

When Alexander the Great died in Babylon in 323 B.C., his body didn't begin to show signs of decomposition for a full six day, according to historical accounts.

Ans

- 1. according to historical accounts
- 2. signs of decomposition for a full six day
- 3. When Alexander the Great died
- 4. his body didn't begin to show

Question ID : 98958011656
Status : Answered
Chosen Option : 2

Comprehension:

www.jkchrome.com

Read the following passage and answer the questions given after it.

By the 1920s the improvements in street lighting, domestic lighting and a surge in coffee houses - which were sometimes open all night - was complete. As the night became a place for legitimate activity, the length of time people could dedicate to rest dwindled." Evening's Empire puts forward an account of how this happened. "Associations with night before the 17th Century were not good," it says. "The night was a place populated by people of disrepute - criminals, prostitutes and drunks. Even the wealthy, who could afford candlelight, had better things to spend their money on. There was no prestige or social value associated with staying up all night."

That changed in the wake of the Reformation and the counter-Reformation. Protestants and Catholics became accustomed to holding secret services at night. If earlier the night had belonged to reprobates, now respectable people became accustomed to exploiting the hours of darkness. This trend migrated to the social sphere too, but only for those who could afford to live by candlelight. With the advent of street lighting, however, socializing at night began to filter down through the classes.

In 1667, Paris became the first city in the world to light its streets, using wax candles in glass lamps. It was followed by Lille in the same year and Amsterdam two years later, where a much more efficient oil-powered lamp was developed. A small city like Leipzig in central Germany employed 100 men to tend to 700 lamps. London didn't join their ranks until 1684 but by the end of the century, more than 50 of Europe's major towns and cities were lit at night. Night became fashionable and spending hours lying in bed was considered a waste of time.

"People were becoming increasingly time-conscious and sensitive to efficiency, certainly before the 19th Century," says Roger Ekirch. "But the industrial revolution intensified that attitude by leaps and bounds." Strong evidence of this shifting attitude is contained in a medical journal from 1829 which urged parents to force their children out of a pattern of first and second sleep. "If no disease or accident there intervene, they will need no further repose than that obtained in their first sleep."

Today, most people seem to have adapted quite well to the eight-hour sleep, but Ekirch believes many sleeping problems may have roots in the human body's natural preference for segmented sleep as well as the ubiquity of artificial light. This could be the root of a condition called sleep maintenance insomnia, where people wake during the night and have trouble getting back to sleep, he suggests. The condition first appears in literature at the end of the 19th Century, at the same time as accounts of segmented sleep disappear.

SubQuestion No : 153

Q.1
53 Which of the following is NOT true regarding the nights in 1920s in Europe?

Ans 1. Nights became a time for legitimate activity

- 2. Socializing at night became common among all classes.
- 3. Protestants and Catholics started holding secret services at night.
- 4. Mostly people of disrepute haunted the streets at night.

Question ID : 98958011703
Status : Answered
Chosen Option : 4

Comprehension:



Read the following passage and answer the questions given after it.

By the 1920s the improvements in street lighting, domestic lighting and a surge in coffee houses - which were sometimes open all night - was complete. As the night became a place for legitimate activity, the length of time people could dedicate to rest dwindled." Evening's Empire puts forward an account of how this happened. "Associations with night before the 17th Century were not good," it says. "The night was a place populated by people of disrepute - criminals, prostitutes and drunks. Even the wealthy, who could afford candlelight, had better things to spend their money on. There was no prestige or social value associated with staying up all night."

That changed in the wake of the Reformation and the counter-Reformation. Protestants and Catholics became accustomed to holding secret services at night. If earlier the night had belonged to reprobates, now respectable people became accustomed to exploiting the hours of darkness. This trend migrated to the social sphere too, but only for those who could afford to live by candlelight. With the advent of street lighting, however, socializing at night began to filter down through the classes.

In 1667, Paris became the first city in the world to light its streets, using wax candles in glass lamps. It was followed by Lille in the same year and Amsterdam two years later, where a much more efficient oil-powered lamp was developed. A small city like Leipzig in central Germany employed 100 men to tend to 700 lamps. London didn't join their ranks until 1684 but by the end of the century, more than 50 of Europe's major towns and cities were lit at night. Night became fashionable and spending hours lying in bed was considered a waste of time.



"People were becoming increasingly time-conscious and sensitive to efficiency, certainly before the 19th Century," says Roger Ekirch. "But the industrial revolution intensified that attitude by leaps and bounds." Strong evidence of this shifting attitude is contained in a medical journal from 1829 which urged parents to force their children out of a pattern of first and second sleep. "If no disease or accident there intervene, they will need no further repose than that obtained in their first sleep."

Today, most people seem to have adapted quite well to the eight-hour sleep, but Ekirch believes many sleeping problems may have roots in the human body's natural preference for segmented sleep as well as the ubiquity of artificial light. This could be the root of a condition called sleep maintenance insomnia, where people wake during the night and have trouble getting back to sleep, he suggests. The condition first appears in literature at the end of the 19th Century, at the same time as accounts of segmented sleep disappear.

SubQuestion No : 154

Q.1
54 Which of the following phenomena helped class-division vanish vis-à-vis nightlife?

Ans 1. Reformation
 2. Cheaper candles

-  3. Counter-reformation
-  4. Streetlights

Question ID : **98958011704**
Status : **Answered**
Chosen Option : 1

Comprehension:

www.jkchrome.com

Read the following passage and answer the questions given after it.

By the 1920s the improvements in street lighting, domestic lighting and a surge in coffee houses - which were sometimes open all night - was complete. As the night became a place for legitimate activity, the length of time people could dedicate to rest dwindled." Evening's Empire puts forward an account of how this happened. "Associations with night before the 17th Century were not good," it says. "The night was a place populated by people of disrepute - criminals, prostitutes and drunks. Even the wealthy, who could afford candlelight, had better things to spend their money on. There was no prestige or social value associated with staying up all night."

That changed in the wake of the Reformation and the counter-Reformation. Protestants and Catholics became accustomed to holding secret services at night. If earlier the night had belonged to reprobates, now respectable people became accustomed to exploiting the hours of darkness. This trend migrated to the social sphere too, but only for those who could afford to live by candlelight. With the advent of street lighting, however, socializing at night began to filter down through the classes.

In 1667, Paris became the first city in the world to light its streets, using wax candles in glass lamps. It was followed by Lille in the same year and Amsterdam two years later, where a much more efficient oil-powered lamp was developed. A small city like Leipzig in central Germany employed 100 men to tend to 700 lamps. London didn't join their ranks until 1684 but by the end of the century, more than 50 of Europe's major towns and cities were lit at night. Night became fashionable and spending hours lying in bed was considered a waste of time.

"People were becoming increasingly time-conscious and sensitive to efficiency, certainly before the 19th Century," says Roger Ekirch. "But the industrial revolution intensified that attitude by leaps and bounds." Strong evidence of this shifting attitude is contained in a medical journal from 1829 which urged parents to force their children out of a pattern of first and second sleep. "If no disease or accident there intervene, they will need no further repose than that obtained in their first sleep."

Today, most people seem to have adapted quite well to the eight-hour sleep, but Ekirch believes many sleeping problems may have roots in the human body's natural preference for segmented sleep as well as the ubiquity of artificial light. This could be the root of a condition called sleep maintenance insomnia, where people wake during the night and have trouble getting back to sleep, he suggests. The condition first appears in literature at the end of the 19th Century, at the same time as accounts of segmented sleep disappear.

SubQuestion No : 155

Q.1
55 The author observes, "by the end of the century, more than 50 of Europe's major towns and cities were lit at night." Which century was he referring to?

Ans 1. 19th century

2. 20th century

3. 16th century

4. 17th century

Question ID : 98958011705
Status : Answered
Chosen Option : 1

Comprehension:

www.jkchrome.com

Read the following passage and answer the questions given after it.

By the 1920s the improvements in street lighting, domestic lighting and a surge in coffee houses - which were sometimes open all night - was complete. As the night became a place for legitimate activity, the length of time people could dedicate to rest dwindled." Evening's Empire puts forward an account of how this happened. "Associations with night before the 17th Century were not good," it says. "The night was a place populated by people of disrepute - criminals, prostitutes and drunks. Even the wealthy, who could afford candlelight, had better things to spend their money on. There was no prestige or social value associated with staying up all night."

That changed in the wake of the Reformation and the counter-Reformation. Protestants and Catholics became accustomed to holding secret services at night. If earlier the night had belonged to reprobates, now respectable people became accustomed to exploiting the hours of darkness. This trend migrated to the social sphere too, but only for those who could afford to live by candlelight. With the advent of street lighting, however, socializing at night began to filter down through the classes.

In 1667, Paris became the first city in the world to light its streets, using wax candles in glass lamps. It was followed by Lille in the same year and Amsterdam two years later, where a much more efficient oil-powered lamp was developed. A small city like Leipzig in central Germany employed 100 men to tend to 700 lamps. London didn't join their ranks until 1684 but by the end of the century, more than 50 of Europe's major towns and cities were lit at night. Night became fashionable and spending hours lying in bed was considered a waste of time.


"People were becoming increasingly time-conscious and sensitive to efficiency, certainly before the 19th Century," says Roger Ekirch. "But the industrial revolution intensified that attitude by leaps and bounds." Strong evidence of this shifting attitude is contained in a medical journal from 1829 which urged parents to force their children out of a pattern of first and second sleep. "If no disease or accident there intervene, they will need no further repose than that obtained in their first sleep."


Today, most people seem to have adapted quite well to the eight-hour sleep, but Ekirch believes many sleeping problems may have roots in the human body's natural preference for segmented sleep as well as the ubiquity of artificial light. This could be the root of a condition called sleep maintenance insomnia, where people wake during the night and have trouble getting back to sleep, he suggests. The condition first appears in literature at the end of the 19th Century, at the same time as accounts of segmented sleep disappear.

SubQuestion No : 156

Q.1
56 In which city were 100 men employed to tend to 700 lamps?

Ans 1. London
 2. Lille

 3. Amsterdam

 4. Leipzig

Question ID : **98958011706**
Status : **Answered**
Chosen Option : **4**

Comprehension:

www.jkchrome.com

Read the following passage and answer the questions given after it.

By the 1920s the improvements in street lighting, domestic lighting and a surge in coffee houses - which were sometimes open all night - was complete. As the night became a place for legitimate activity, the length of time people could dedicate to rest dwindled." Evening's Empire puts forward an account of how this happened. "Associations with night before the 17th Century were not good," it says. "The night was a place populated by people of disrepute - criminals, prostitutes and drunks. Even the wealthy, who could afford candlelight, had better things to spend their money on. There was no prestige or social value associated with staying up all night."

That changed in the wake of the Reformation and the counter-Reformation. Protestants and Catholics became accustomed to holding secret services at night. If earlier the night had belonged to reprobates, now respectable people became accustomed to exploiting the hours of darkness. This trend migrated to the social sphere too, but only for those who could afford to live by candlelight. With the advent of street lighting, however, socializing at night began to filter down through the classes.

In 1667, Paris became the first city in the world to light its streets, using wax candles in glass lamps. It was followed by Lille in the same year and Amsterdam two years later, where a much more efficient oil-powered lamp was developed. A small city like Leipzig in central Germany employed 100 men to tend to 700 lamps. London didn't join their ranks until 1684 but by the end of the century, more than 50 of Europe's major towns and cities were lit at night. Night became fashionable and spending hours lying in bed was considered a waste of time.

"People were becoming increasingly time-conscious and sensitive to efficiency, certainly before the 19th Century," says Roger Ekirch. "But the industrial revolution intensified that attitude by leaps and bounds." Strong evidence of this shifting attitude is contained in a medical journal from 1829 which urged parents to force their children out of a pattern of first and second sleep. "If no disease or accident there intervene, they will need no further repose than that obtained in their first sleep."

Today, most people seem to have adapted quite well to the eight-hour sleep, but Ekirch believes many sleeping problems may have roots in the human body's natural preference for segmented sleep as well as the ubiquity of artificial light. This could be the root of a condition called sleep maintenance insomnia, where people wake during the night and have trouble getting back to sleep, he suggests. The condition first appears in literature at the end of the 19th Century, at the same time as accounts of segmented sleep disappear.

SubQuestion No : 157

Q.1
57 Which is the most significant cause of sleep maintenance insomnia?

Ans 1. ubiquity of artificial light

- 2. ignoring the human body's natural preference for segmented sleep
- 3. a growing belief in eight-hour-sleep blocs
- 4. waking up during the night

Question ID : 98958011707
Status : Answered
Chosen Option : 2

Q.1 58 Select the wrongly spelt word.

- Ans
- 1. indicate
 - 2. innovate
 - 3. invite
 - 4. inundate

Question ID : 98958011697
Status : Answered
Chosen Option : 4

Q.1 59 Select the most appropriate word for the given group of words.

excessive bureaucratic fuss

- Ans
- 1. footnotes
 - 2. officious
 - 3. fastidious
 - 4. red-tape

Question ID : 98958011694
Status : Answered
Chosen Option : 3

Q.1 60 Select the most appropriate word to fill in the blank.

Scientists and politicians are _____ becoming aware of another factor that could seriously threaten the _____ balance between production and consumption of food and climate change.

- Ans
- 1. both; tenuous
 - 2. duo; questionable
 - 3. alike; feeble
 - 4. alike; shaky

Question ID : 98958011668
Status : Answered
Chosen Option : 4

Q.1 61 Select the most appropriate option to substitute the underlined segment in the given sentence. If there is no need to substitute it, Select No improvement.

Eighteenth-century machines typically used water power, hence the early factories was located on the fast-flowing rivers.

- Ans
- 1. were located on the fast-flowing rivers.
 - 2. No improvement
 - 3. was located near the fast-flowing rivers.
 - 4. were located near the fast-flowing rivers.

Question ID : 98958011663
Status : Answered
Chosen Option : 4

Q.1 Identify the segment in the sentence, which contains the grammatical error.

62

The problem of world hunger arises because of the economic inequality that distort food distribution.

- Ans
- 1. The problem of
 - 2. that distort food distribution.
 - 3. world hunger arises
 - 4. because of the economic inequality

Question ID : 98958011660
Status : Answered
Chosen Option : 2

Q.1 Select the antonym of the given word.

63

PROVINCIAL

- Ans
- 1. public
 - 2. rustic
 - 3. metropolitan
 - 4. pastoral

Question ID : 98958011683
Status : Answered
Chosen Option : 4

Q.1 Select the most appropriate word for the given group of words.

64

power of reading thoughts of others

- Ans
- 1. medium
 - 2. telepathy
 - 3. instinct
 - 4. astrology

Question ID : 98958011693
Status : Answered
Chosen Option : 2

Q.1 Identify the segment in the sentence, which contains the grammatical error.

65

Hemophilia, a blood clotting disorder, can be passed about the maternal line within families; men are more likely to develop it, while women are usually carriers.

- Ans
- 1. a blood clotting disorder
 - 2. can be passed about
 - 3. the maternal line
 - 4. likely to develop it

Question ID : 98958011658

Status : Answered

Chosen Option : 4

Q.1 Select the most appropriate word to fill in the blank.

66

Moisture created _____ multitudes of visitors over the years has damaged King Tut's tomb more than any vandalism and so conservators are working to _____ the historic monument _____ the impact of heavy-breathing, heavy-sweating tourists.

- Ans
- 1. by; dry; off
 - 2. from; guard; from
 - 3. from; dry; against
 - 4. by; guard; against

Question ID : 98958011666

Status : Answered

Chosen Option : 1

Q.1 Select the most appropriate option to substitute the underlined segment in the given sentence. If there is no need to substitute it, Select No improvement.

67

As a result of various inventions during Victoria's reign, travel and communication became better and improved sanitation techniques turn filthy streets in clean roads.

- Ans
- 1. turn filthy streets into clean roads.
 - 2. turned filthy streets into clean roads.
 - 3. turning filthy streets in clean roads.
 - 4. No improvement

Question ID : 98958011664

Status : Answered

Chosen Option : 2

Q.1 Select the most appropriate meaning of the idiom.

68

Go against the grain.

- Ans
- 1. Something that we can accept with difficulty
 - 2. Something done deliberately
 - 3. Something that is ugly and unpopular
 - 4. Something in conflict with one's value system

Question ID : 98958011687
Status : Answered
Chosen Option : 4

Q.1 Select the most appropriate option to substitute the underlined segment in the given sentence. If there is no need to substitute it, Select No improvement.
69

With Mumbai's mad rush and heavy traffic, it becomes extremely difficult for people to reach their destination on time.

- Ans
- 1. reached their destination on time.
 - 2. to reach their destination at time.
 - 3. to reaching their destination on time.
 - 4. No improvement

Question ID : 98 58011 65
Status : An wered
Chosen Opt n : 4

Q.1 Select the antonym of the given word.
70

SUBDUED

- Ans
- 1. excited
 - 2. motivated
 - 3. subtle
 - 4. hushed

Question ID : 98958011682
Status : Answered
Chosen Option : 3

Q.1 Select the most appropriate word to fill in the blank.
71

Trachoma is a debilitating and painful _____ which can cause the eyelashes to turn inwards and stab the eye.

- Ans
- 1. factor
 - 2. contagion
 - 3. taint
 - 4. infection

Question ID : 98958011670
Status : Answered
Chosen Option : 4

Q.1 Select the synonym of the given word
72

PLEDGED

- Ans
- 1. honored
 - 2. promised
 - 3. respected

4. fulfilled

Question ID : 98958011680
Status : Answered
Chosen Option : 2

Q.1 73 Select the most appropriate meaning of the given idiom.

Always a bridesmaid never a bride

- Ans
- 1. Someone who fulfills his or her potential
 - 2. Someone who does not deserve to win
 - 3. Someone who always comes second
 - 4. Someone who is born unlucky

Question ID : 98958011691
Status : Answered
Chosen Option : 3

Q.1 74 Select the antonym of the given word.

PROVISIONAL

- Ans
- 1. permanent
 - 2. planned
 - 3. insured
 - 4. supplied

Question ID : 98958011684
Status : Answered
Chosen Option : 1

Q.1 75 Select the most appropriate words to fill in the blanks.

It is known that _____, extreme weather, and diseases are the factors responsible for crop failure.

- Ans
- 1. daft
 - 2. drought
 - 3. draft
 - 4. draught

Question ID : 98958011669
Status : Not Answered
Chosen Option : --

Q.1 76 Select the most appropriate word to fill in the blank.

During the Great Depression, America's dance marathon craze was more of a _____ strategy than a form of _____.

- Ans
- 1. fundamental; celebration
 - 2. basic; entertainment

3. survival; entertainment

4. survival; education

Question ID : 98958011667
Status : Answered
Chosen Option : 1

Q.1
77 Select the wrongly spelt word.

Ans 1. pupeteer

2. puppies

3. parapet

4. parakeets

Question ID : 98958011700
Status : Answered
Chosen Option : 3

Q.1
78 Select the most appropriate word for the given group of words.

a place for the collection of dried plants

Ans 1. aquarium

2. museum

3. herbarium

4. flora

Question ID : 98958011692
Status : Answered
Chosen Option : 3

Q.1
79 Select the most appropriate option to substitute the underlined segment in the given sentence. If there is no need to substitute it, Select No improvement.

With cloth in demand both at home, where the population was increasing, and abroad, where British colonies were a captive market, improving spinning methods were essential to meet the demand.

Ans 1. No improvement

2. improved spinning methods were essential

3. improved spinning methods was essential

4. improve spinning methods were essential

Question ID : 98958011661
Status : Answered
Chosen Option : 1

Q.1
80 Select the most appropriate word for the given group of words.

a book that contains information on various subjects

Ans

- 1. omnibus
- 2. encyclopedia
- 3. magazine
- 4. guide

Question ID : 98958011695
Status : Answered
Chosen Option : 2

Q.1
81 Select the synonym of the given word.

DISPROPORTIONATELY

- Ans
- 1. unvaryingly
 - 2. unreasonably
 - 3. unknowingly
 - 4. unscientifically

Question ID : 98958011679
Status : Answered
Chosen Option : 1

Q.1
82 Select the most appropriate meaning of the given idiom.

To beat a dead horse

- Ans
- 1. A deliberate effort
 - 2. A futile effort
 - 3. A joint effort
 - 4. A significant effort

Question ID : 98958011688
Status : Answered
Chosen Option : 2

Q.1
83 Select the most appropriate option to substitute the underlined segment in the given sentence. If there is no need to substitute it, Select No improvement.

The growing demand for cotton spurred the Industrial Revolution in Britain and inducing Southern planters in America to grows more cotton.

- Ans
- 1. inducing Southern planters in America grew more cotton
 - 2. induced Southern planters in America to grow more cotton
 - 3. No improvement
 - 4. induce Southern planters in America to grow more cotton

Question ID : 98958011662
Status : Not Answered
Chosen Option : --

Q.1
84 Select the synonym of the given word

PREVENTIVE

- Ans
- 1. predicted
 - 2. prophetic
 - 3. protective
 - 4. prepared

Question ID : 98958011681
Status : Answered
Chosen Option : 3

Q.1
85 Select the most appropriate meaning of the given idiom.

Caught red-handed

- Ans
- 1. To try to arrest someone without any evidence
 - 2. To catch a thief who steals red paints
 - 3. To catch someone doing something illegal
 - 4. To discover a murderer using the clues

Question ID : 98958011689
Status : Answered
Chosen Option : 3

Q.1
86 Identify the segment in the sentence, which contains the grammatical error.

That his body did not decompose confirmed what the Greeks thought about him and what Alexander use to believe about himself—that he was not an ordinary man, but a god.

- Ans
- 1. his body did not decompose
 - 2. use to believe about himself
 - 3. thought about him
 - 4. he was not an ordinary man

Question ID : 98958011657
Status : Not Answered
Chosen Option : --

Q.1
87 Select the synonym of the given word.

NEGLECTED

- Ans
- 1. negated
 - 2. superfluous
 - 3. unknown
 - 4. ignored

Question ID : 98958011678
Status : Answered
Chosen Option : 4

Q.1
88 Select the synonym of the given word.

BENEFICIARIES

- Ans 1. recipients
 2. donors
 3. addressers
 4. profiteers

Question ID : 98958011677
Status : Answered
Chosen Option : 4

Comprehension:

In the following passage some words have been deleted. Fill in the blanks with the help of the alternatives given. Select the most appropriate option for each number.

Eating white bread and ready meals could be killing us, according to the first major study linking “ultra-processed” food with (1) _____ death. The study of 45,000 middle-aged people found that every 10 per cent increase in (2) _____ of “ultra-processed food” was linked to a 14 per cent (3) _____ risk of death within the next eight years. Previous research has linked consumption (4) _____ foods like white bread, ready meals, sausages, sugary cereals, fizzy drinks to a higher risk of high blood (5) _____ and cancer.

SubQuestion No : 189

Q.1
89 Select the most appropriate option to fill in blank
No.1.

- Ans 1. quiet
 2. easy
 3. early
 4. late

Question ID : 98958011672
Status : Answered
Chosen Option : 1

Comprehension:

In the following passage some words have been deleted. Fill in the blanks with the help of the alternatives given. Select the most appropriate option for each number.

Eating white bread and ready meals could be killing us, according to the first major study linking “ultra-processed” food with (1) _____ death. The study of 45,000 middle-aged people found that every 10 per cent increase in (2) _____ of “ultra-processed food” was linked to a 14 per cent (3) _____ risk of death within the next eight years. Previous research has linked consumption (4) _____ foods like white bread, ready meals, sausages, sugary cereals, fizzy drinks to a higher risk of high blood (5) _____ and cancer.

SubQuestion No : 190

Q.1
90 Select the most appropriate option to fill in blank
No.2.

- Ans
- 1. input
 - 2. digestion
 - 3. intake
 - 4. making

Question ID : 98958011673
Status : Answered
Chosen Option : 3

Comprehension:

In the following passage some words have been deleted. Fill in the blanks with the help of the alternatives given. Select the most appropriate option for each number.

Eating white bread and ready meals could be killing us, according to the first major study linking “ultra-processed” food with (1) _____ death. The study of 45,000 middle-aged people found that every 10 per cent increase in (2) _____ of “ultra-processed food” was linked to a 14 per cent (3) _____ risk of death within the next eight years. Previous research has linked consumption (4) _____ foods like white bread, ready meals, sausages, sugary cereals, fizzy drinks to a higher risk of high blood (5) _____ and cancer.

SubQuestion No : 191

Q.1
91 Select the most appropriate option to fill in blank
No.3.

- Ans
- 1. increased
 - 2. declined
 - 3. decreased
 - 4. improved

Question ID : 98958011674
Status : Answered

Comprehension:

In the following passage some words have been deleted. Fill in the blanks with the help of the alternatives given. Select the most appropriate option for each number.

Eating white bread and ready meals could be killing us, according to the first major study linking “ultra-processed” food with (1) _____ death. The study of 45,000 middle-aged people found that every 10 per cent increase in (2) _____ of “ultra-processed food” was linked to a 14 per cent (3) _____ risk of death within the next eight years. Previous research has linked consumption (4) _____ foods like white bread, ready meals, sausages, sugary cereals, fizzy drinks to a higher risk of high blood (5) _____ and cancer.

SubQuestion No : 192

Q.1
92 Select the most appropriate option to fill in blank

No.4.

- Ans
- 1. of
 - 2. on
 - 3. in
 - 4. from

Question ID : 98958011675

Status : Answered

Chosen Option : 1

Comprehension:

In the following passage some words have been deleted. Fill in the blanks with the help of the alternatives given. Select the most appropriate option for each number.

Eating white bread and ready meals could be killing us, according to the first major study linking “ultra-processed” food with (1) _____ death. The study of 45,000 middle-aged people found that every 10 per cent increase in (2) _____ of “ultra-processed food” was linked to a 14 per cent (3) _____ risk of death within the next eight years. Previous research has linked consumption (4) _____ foods like white bread, ready meals, sausages, sugary cereals, fizzy drinks to a higher risk of high blood (5) _____ and cancer.

SubQuestion No : 193

Q.1
93 Select the most appropriate option to fill in blank

No.5.

- Ans
- 1. pressure
 - 2. infection
 - 3. clotting
 - 4. coagulation

Question ID : 98958011676
Status : Answered
Chosen Option : 4

Q.1
94 Select the antonym of the given word.

ASSAULT

- Ans
- 1. retreat
 - 2. affront
 - 3. attack
 - 4. pacify

Question ID : 98958011686
Status : Answered
Chosen Option : 4

Q.1
95 Identify the segment in the sentence, which contains the grammatical error.

Economic growth is sustainable only if all countries has food security.

- Ans
- 1. Economic growth is
 - 2. sustainable only if
 - 3. all countries
 - 4. has food security.

Question ID : 98958011659
Status : Answered
Chosen Option : 4

Q.1
96 Select the most appropriate meaning of the given idiom.

Bite the bullet

- Ans
- 1. to amuse yourself by doing something unpleasant
 - 2. to dislike yourself for having done something unpleasant
 - 3. to force yourself to do something unpleasant
 - 4. to restrain yourself from doing something unpleasant

Question ID : 98958011690
Status : Answered
Chosen Option : 1

Q.1
97 Select the wrongly spelt word.

- Ans
- 1. election
 - 2. alleviasion
 - 3. elementary

4. olfactory

Question ID : 98958011701
Status : Answered
Chosen Option : 4

Q.1
98 Select the most appropriate word for the given group of words.

constitutional right to cast vote

- Ans
- 1. duty
 - 2. franking
 - 3. franchise
 - 4. licensed

Question ID : 98958011696
Status : Answered
Chosen Option : 1

Q.1
99 Select the wrongly spelt word.

- Ans
- 1. miniature
 - 2. municipality
 - 3. manpulates
 - 4. monopoly

Question ID : 98958011699
Status : Answered
Chosen Option : 3

Q.2
00 Select the antonym of the given word.

INDICTED

- Ans
- 1. examined
 - 2. imprisoned
 - 3. hanged
 - 4. released

Question ID : 98958011685
Status : Answered
Chosen Option : 3



JK Chrome

JK Chrome | Employment Portal



Rated No.1 Job Application of India

Sarkari Naukri
Private Jobs
Employment News
Study Material
Notifications



JOBS



NOTIFICATIONS



G.K



STUDY MATERIAL



JK Chrome

jk chrome
Contains ads



www.jkchrome.com | Email : contact@jkchrome.com