



JK Chrome

JK Chrome | Employment Portal



Rated No.1 Job Application of India

Sarkari Naukri
Private Jobs
Employment News
Study Material
Notifications



JOBS



NOTIFICATIONS



G.K



STUDY MATERIAL



JK Chrome

jk chrome
Contains ads



www.jkchrome.com | Email : contact@jkchrome.com

Recruitment of Sub-Inspector in Delhi Police, CAPFs and Assistant Sub-Inspector in CISF CPO

Sect on SI CPO

Q.1 Which two numbers should be interchanged to make the given equation correct?

$$4 \times 2 - 8 + 9 \div 3 = 9 \div 3 + 4 \times 2 - 8$$

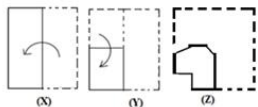
- Ans
- 1 3 and 4
 - 2 3 and 2
 - 3 8 and 3
 - 4 8 and 4

Quest on D 98958010627

Status Not Answered

Chosen Opt on --

Q.2 The sequence of folding a piece of square paper and the manner in which the folded paper has been cut is shown in figures X, Y and Z. How would this paper look when unfolded?



Ans

- 1
- 2
- 3
- 4

Quest on D **98958010638**
 Status **Answered**
 Chosen Opt on **1**

Q.3 Which letter-cluster will replace the question mark (?) in the following series?

CGE, HJI, LPN, SUT, ?

- Ans
- 1 XBZ
 - 2 YAZ
 - 3 YCA
 - 4 XZY

Quest on D **98958010595**
 Status **Answered**
 Chosen Opt on **3**

Q.4 Three of the following four number-pairs are alike in a certain way and one is different. Find the odd one out.

- Ans
- 1 865 : 722
 - 2 378 : 255
 - 3 756 : 633
 - 4 967 : 844

Quest on D **98958010623**
 Status **Not Answered**
 Chosen Opt on **--**

Q.5 Three of the following four words are alike in a certain way and one is different. Find the odd one out.

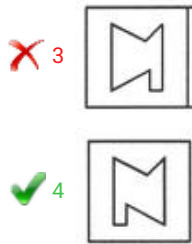
- Ans
- 1 Potato
 - 2 Carrot
 - 3 Cabbage
 - 4 Turnip

Quest on D **98958010601**
 Status **Answered**
 Chosen Opt on **4**

Q.6 Select the correct mirror image of the given figure when the mirror is placed on the right of the figure.



- Ans
- 1
 - 2



Quest on D **98958010637**
 Status **Answered**
 Chosen Opt on **4**

Q.7 Three of the following four letter-clusters are alike in a certain way and one is different. Find the odd one out.

- Ans 1 CHEL
 2 ZVXT
 3 VSUP
 4 MROV

Quest on D **98958010599**
 Status **Not Answered**
 Chosen Opt on --

Q.8 Which letter will replace the question mark (?) in the following series?

Y, X, V, S, ?, J

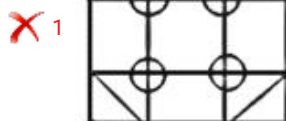
- Ans 1 O
 2 N
 3 Q
 4 P

Quest on D **98958010594**
 Status **Answered**
 Chosen Opt on **1**

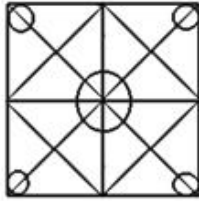
Q.9 Select the option in which the given figure is embedded.



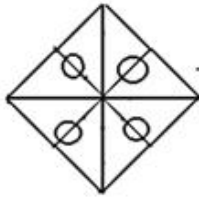
Ans



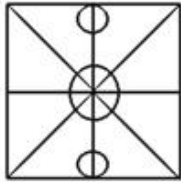
✓ 2



✗ 3



✗ 4



Quest on D **98958010634**
 Status **Answered**
 Chosen Opt on **2**

Q.1 Two statements are given, followed by three conclusions numbered I, II and III. Assuming the statements to be true, even if they seem to be at variance with commonly known facts, decide which of the conclusions logically follow(s) from the statements.

Statements:

Some men are players.
 All players are athletes.

Conclusions:

- I. No athlete is a man.
- II. All men are athletes.
- III. Some athletes are men.

- Ans** ✗ 1 Only conclusion I follows.
 ✗ 2 Only conclusions II and III follow.
 ✗ 3 Only conclusion II follows.
 ✓ 4 Only conclusion III follows.

Quest on D **98958010612**
 Status **Answered**
 Chosen Opt on **4**

Q.1 If DIG = 41 and GOAD = 55, then FACT = _____.

- Ans** ✗ 1 45
 ✓ 2 61
 ✗ 3 53
 ✗ 4 63

Quest on D **98958010610**
 Status **Not Answered**

Chosen Opt on --

Q.1 Three of the following four number-pairs are alike in a certain way and one is different. Find the odd one out.

2

- Ans
- 1 8 : 80
 - 2 6 : 48
 - 3 4 : 26
 - 4 10 : 120

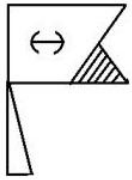
Quest on D 98958010622

Status Answered

Chosen Opt on 3

Q.1 Select the correct mirror image of the given figure when the mirror is placed on the right of the figure.

3



Ans

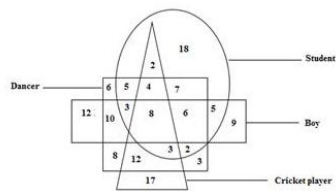
- 1
- 2
- 3
- 4

Quest on D 98958010636

Status Answered

Chosen Opt on 2

Q.1 In the following diagram, the triangle represents 'cricket players', the circle represents 'students', the rectangle represents 'boys' and the square represents 'dancers'. The numbers in different segments show the number of persons.



How many students are dancers and cricket players but not boys?

- Ans 1 7
 2 12
 3 4
 4 16

Quest on D 98958010643
 Status Answered
 Chosen Opt on 4

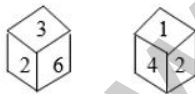
Q.1 Select the set of numbers that is similar to the following set.

{9, 15, 24}

- Ans 1 {21, 33, 55}
 2 {12, 20, 30}
 3 {6, 10, 16}
 4 {15, 25, 35}

Quest on D 98958010625
 Status Answered
 Chosen Opt on 3

Q.1 Two positions of the same dice are given. Which number will be at the top if '3' is at the bottom?



- Ans 1 4
 2 6
 3 5
 4 1

Quest on D 98958010633
 Status Answered
 Chosen Opt on 4

Q.1 Which number will replace the question mark (?) in the following series?

3, 7, 13, 27, ?, 107, 213

- Ans 1 63
 2 53
 3 58
 4 49

Quest on D **98958010616**
 Status **Answered**
 Chosen Opt on **2**

Q.1 Which number will replace the question mark (?) in the following series?
 8

1, 3, 4, 7, ?, 18, 29

- Ans 1 10
 2 13
 3 15
 4 11

Quest on D **98958010615**
 Status **Answered**
 Chosen Opt on **4**

Q.1 In a code language, CONCERT is written as CNEROCT. How will SMARTER be written in that language?
 9

- Ans 1 RATESMR
 2 RATEMSR
 3 RATMESR
 4 RETRAMS

Quest on D **98958010609**
 Status **Answered**
 Chosen Opt on **1**

Q.2 Select the option that is related to the third number in the same way as the second number is related to the first number.
 0

12 : 145 : 8 :: _____

- Ans 1 60
 2 85
 3 65
 4 73

Quest on D **98958010618**
 Status **Answered**
 Chosen Opt on **3**

Q.2 Three of the following four number-pairs are alike in a certain way and one is different. Find the odd one out.
 1

- Ans 1 56 : 11
 2 78 : 13
 3 12 : 3

X 4 34 : 7

Quest on D **98958010621**
Status **Not Attempted and Marked For Review**
Chosen Opt on --

Q.2 Select the option that is related to the third number in the same way as the second number is related to the first number.

2

4 : 8 :: 25 : _____

- Ans **X** 1 100
X 2 75
X 3 625
✓ 4 125

Quest on D **98958010617**
Status **Answered**
Chosen Opt on **4**

Q.2 Select the word-pair in which the two words are related in the same way as are the two words in the given word-pair.

3

Wish : Desire

- Ans **X** 1 Run : Ride
X 2 Drive : Speed
X 3 Morning : Evening
✓ 4 Cool : Cold

Quest on D **98958010605**
Status **Answered**
Chosen Opt on **4**

Q.2 Three of the following four letter-clusters are alike in a certain way and one is different. Find the odd one out.

4

- Ans **X** 1 DFIM
✓ 2 FHKM
X 3 MORV
X 4 QSVZ

Quest on D **98958010598**
Status **Answered**
Chosen Opt on **2**

Q.2 Three of the following four number-pairs are alike in a certain way and one is different. Find the odd one out.

5

- Ans **X** 1 49 : 94
✓ 2 56 : 67
X 3 15 : 51
X 4 38 : 83

Quest on D **98958010620**
Status **Answered**

Chosen Opt on 2

Q.2 Starting from Anand's house, the school bus takes a right turn and covers 3 km. Then, it takes a left turn and covers 2 km. Finally, it takes a right turn again and covers 4 km to reach the school. On reaching the school, the bus faces south-east. In which direction was the bus facing when it left Anand's house?

- Ans
- 1 South-west
 - 2 South-east
 - 3 North-east
 - 4 North

Quest on D **98958010639**
 Status **Marked For Review**
 Chosen Opt on 2

Q.2 Select the set of numbers that is similar to the following set.

{9, 54, 6}

- Ans
- 1 {3, 15, 6}
 - 2 {8, 64, 9}
 - 3 {7, 74, 12}
 - 4 {5, 35, 7}

Quest on D **98958010624**
 Status **Answered**
 Chosen Opt on 4

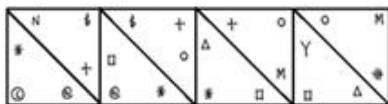
Q.2 Which of the following interchanges of signs and numbers would make the given equation correct?

$$12 \times 18 \div 3 - 6 + 4 = 5$$

- Ans
- 1 \div and \times , 6 and 3
 - 2 \div and \times , 4 and 3
 - 3 \div and $+$, 3 and 4
 - 4 \times and $+$, 3 and 6

Quest on D **98958010628**
 Status **Answered**
 Chosen Opt on 4

Q.2 Select the figure that will come next in the following series.



Ans

✗ 1

✗ 2

✗ 3

✓ 4

Quest on D **98958010631**
 Status **Not Attempted and Marked For Review**
 Chosen Opt on --

Q.3 Which number will replace the question mark (?) in the following series?

1, 2, 6, 12, ?, 72, 216

- Ans
- ✗ 1 24
 - ✗ 2 32
 - ✓ 3 36
 - ✗ 4 48

Quest on D **98958010614**
 Status **Answered**
 Chosen Opt on **3**

Q.3 Select the correct alternative to indicate the arrangement of the following words in a logical and meaningful order.

1. Treatment
2. Diagnosis
3. Doctor
4. Discharge
5. Bill

- Ans
- ✓ 1 3, 2, 1, 5, 4
 - ✗ 2 4, 5, 3, 2, 1
 - ✗ 3 3, 2, 5, 1, 4
 - ✗ 4 2, 3, 1, 4, 5

Quest on D **98958010596**
 Status **Answered**

Chosen Opt on 1

Q.3 If MADE is coded as 12236 and BAD is coded as 123, then how will DECK be coded as?

2

- Ans
- 1 36212
 - 2 34312
 - 3 36201
 - 4 44412

Quest on D 98958010611

Status Answered

Chosen Opt on 1

Q.3 Select the option in which the given figure is embedded. (Rotation is not allowed)

3



Ans

- 1
- 2
- 3
- 4

Quest on D 98958010635

Status Answered

Chosen Opt on 3

Q.3 Select the word-pair in which the two words are related in the same way as are the two words in the given word-pair.

4

Weigh : Balance

- Ans
- 1 Volume : Liquid
 - 2 Pour : Water
 - 3 Swim : River
 - 4 Detect : Radar

Quest on D 98958010604

Status Not Answered

Chosen Opt on --

Q.3 In a code language, MONKEY is written as LPMLDZ. How will STROKE be written as in that language?

5

- Ans
- 1 TSSNLD

- 2 RUQFJP
- 3 RUQNLD
- 4 RUQPJF

Quest on D **98958010608**
 Status **Answered**
 Chosen Opt on **4**

Q.3 Two statements are given, followed by three conclusions numbered I, II and III. Assuming the statements to be true, even if they seem to be at variance with commonly known facts, decide which of the conclusions logically follow(s) from the statements.

6

Statements:

All teachers are researchers.
 No researcher is unemployed.

Conclusions:

- I. Some unemployed are teachers.
 II. No teacher is unemployed.
 III. Some teachers are unemployed.

Ans 1 Only conclusion II follows.

- 2 Only conclusion I follows.
- 3 Only conclusions II and III follow.
- 4 Only conclusions I and III follow.

Quest on D **98958010613**
 Status **Answered**
 Chosen Opt on **3**

Q.3 Select the option that is related to the third term in the same way as the first term is related to the second term.

7

DFIM : WURN :: CMHV : _____

- Ans** 1 XNSE
- 2 XVTR
- 3 XNTE
- 4 YNSE

Quest on D **98958010607**
 Status **Answered**
 Chosen Opt on **3**

Q.3 'Star' is related to 'Galaxy' in the same way as 'Flower' is related to '_____':

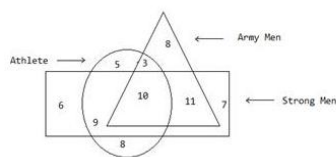
8

- Ans** 1 Jasmine
- 2 Blossom
- 3 Bouquet
- 4 Petal

Quest on D **98958010602**
 Status **Answered**

Chosen Opt on 3

Q.3 In the following diagram, the triangle represents 'army men', the circle represents 'athletes' and the rectangle represents 'strong men'. The numbers in different segments show the number of persons.

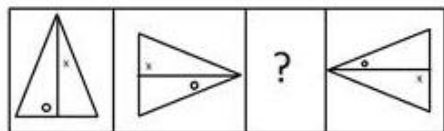


How many strong army men are not athletes?

- Ans
- 1 13
 - 2 19
 - 3 11
 - 4 10

Quest on D **98958010641**
 Status **Answered**
 Chosen Opt on **3**

Q.4 Identify the missing figure in the following series.

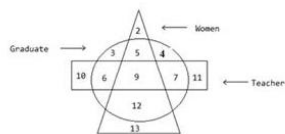


Ans

- 1
- 2
- 3
- 4

Quest on D **98958010629**
 Status **Answered**
 Chosen Opt on **1**

Q.4 In the following diagram, the triangle represents 'women', the circle represents 'graduates' and the rectangle represents 'teachers'. The numbers in different segments show the number of persons.



How many women graduates are not teachers?

- Ans
- 1 9
 - 2 12
 - 3 17
 - 4 5

Quest on D **98958010642**
 Status **Answered**
 Chosen Opt on **2**

Q.4 Select the number-pair in which the two numbers are related in the same way as are the two numbers of the given pair.

2
 16 : 26

- Ans
- 1 25 : 37
 - 2 4 : 11
 - 3 36 : 56
 - 4 15 : 27

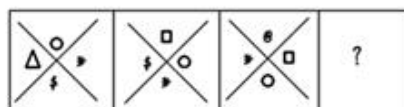
Quest on D **98958010619**
 Status **Answered**
 Chosen Opt on **3**

Q.4 Riya walked 90 m towards the north from her house, and then took a right turn and walked 60 m to reach the market. Then, she took a left turn and walked a few meters from the market to reach the post office, from where she took a left turn again and walked 160 m to reach the school. If the air distance between Riya's house and the school is 260 m, what is the air distance between the market and the post office?

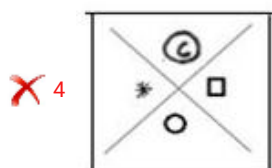
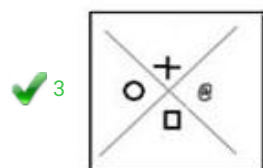
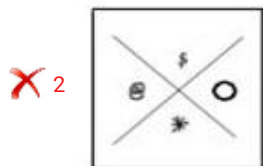
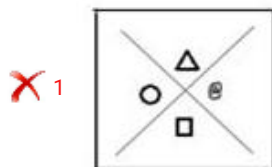
- Ans
- 1 180 m
 - 2 120 m
 - 3 150 m
 - 4 100 m

Quest on D **98958010640**
 Status **Not Attempted and Marked For Review**
 Chosen Opt on --

Q.4 Identify the missing figure in the following series.



Ans



Quest on D **98958010630**
 Status **Answered**
 Chosen Opt on **1**

Q.4
5 'Picture' is related to 'Coloured' in the same way as 'Letter' is related to '_____'.
 Ans

- 1 Bold
 2 Alphabet
 3 Word
 4 Language

Quest on D **98958010603**
 Status **Answered**
 Chosen Opt on **3**

Q.4
6 Which two signs should be interchanged to make the following equation correct?

$$10 - 15 \times 9 + 6 \div 3 = 9$$

- Ans 1 - and ÷
 2 ÷ and +
 3 + and -
 4 × and -

Quest on D **98958010626**
 Status **Answered**
 Chosen Opt on **1**

Q.4
7

Select the option that is related to the third term in the same way as the second term is related to the first term.

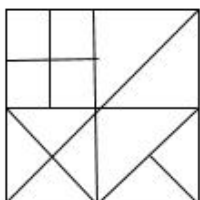
HKNQ : IJPO :: DFHJ : _____

- Ans
- 1 EGJH
 - 2 CGLJ
 - 3 EEJH
 - 4 EEII

Quest on D **98958010606**
 Status **Answered**
 Chosen Opt on **3**

Q.4 How many triangles are there in the following figure?

8



- Ans
- 1 20
 - 2 17
 - 3 16
 - 4 14

Quest on D **98958010632**
 Status **Answered**
 Chosen Opt on **3**

Q.4 Three of the following four words are alike in a certain way and one is different. Find the odd one out.

9

- Ans
- 1 Pan
 - 2 Jug
 - 3 Mug
 - 4 Cup

Quest on D **98958010600**
 Status **Answered**
 Chosen Opt on **4**

Q.5 Select the correct alternative to indicate the arrangement of the following words in a logical and meaningful order.

0

1. Cloud
2. Shelter
3. Monsoon
4. Rain
5. Flood
6. Relief

- Ans
- 1 4, 1, 2, 5, 2, 6
 - 2 3, 1, 4, 5, 2, 6

3 1, 3, 4, 5, 6, 2

4 3, 1, 4, 2, 5, 6

Quest on D **98958010597**
Status **Answered**
Chosen Opt on **2**

Q.5
1 Which of the following is NOT a tributary of the Indus River?

Ans 1 Zaskar

2 Nubra

3 Shyok

4 Lohit

Quest on D **98958010775**
Status **Not Answered**
Chosen Opt on **--**

Q.5
2 NASA's _____ spacecraft has been studying Jupiter for almost two years since the year 2016.

Ans 1 Muno

2 Bruno

3 Juno

4 Luno

Quest on D **98958010790**
Status **Not Answered**
Chosen Opt on **--**

Q.5
3 There are three types of heterotrophs. Which of the following is NOT one of them?

Ans 1 Consumers

2 Carnivores

3 Omnivores

4 Herbivores

Quest on D **98958010782**
Status **Not Answered**
Chosen Opt on **--**

Q.5
4 Which among the following is a dance form from the state of Arunachal Pradesh?

Ans 1 Popir

2 Bhavai

3 Sattriya

4 Purbi

Quest on D **98958010781**
Status **Not Answered**

Chosen Opt on --

Q.5
5 Who was the first Vice President of independent India?

- Ans
- 1 Sarvepalli Radhakrishnan
 - 2 Kishan Kant
 - 3 Gopal Pathak
 - 4 KR Narayanan

Quest on D **98958010785**
Status **Answered**
Chosen Opt on **1**

Q.5
6 Renowned writer Namita Gokhale was awarded _____ for her work 'Things to Leave Behind' under the 'Best Book of Fiction written by a Woman Author' category at the inaugural edition of Bhopal Literature and Art Festival.

- Ans
- 1 Sushila Devi Literature Award
 - 2 Jnanpith Award
 - 3 Sahitya Academy Award
 - 4 Yuva Puraskar Award

Quest on D **98958010751**
Status **Answered**
Chosen Opt on **3**

Q.5
7 _____ is the study of fungi.

- Ans
- 1 Geobiology
 - 2 Mycology
 - 3 Chronobiology
 - 4 Geronotology

Quest on D **98958010749**
Status **Not Answered**
Chosen Opt on --

Q.5
8 Which of the following is NOT one of the great paradigms of biology?

- Ans
- 1 Mendel's laws of inheritance
 - 2 Archimedes' principle
 - 3 Establishment of comparative biochemistry
 - 4 Darwin's theory of evolution

Quest on D **98958010777**
Status **Not Answered**
Chosen Opt on --

Q.5
9 Tripura Chief Minister _____ launched the Sustainable Catchment Forest Management (SCATFORM) project.

- Ans 1 Bhupesh Baghel
 2 Nitish Kumar
 3 Biplab Kumar Deb
 4 Pema Khandu

Quest on D **98958010769**
Status **Answered**
Chosen Opt on **4**

Q.6 In January 2019, the Finance Ministry asked the Public Sector banks to gradually reduce the Government's equity to 0 ____ per cent.

- Ans 1 37
 2 45
 3 52
 4 63

Quest on D **98958010789**
Status **Not Answered**
Chosen Opt on **--**

Q.6 The Supreme Court has issued a notice to the Central Government on ____ questioning the centre's notification 1 authorising 10 central agencies to intercept monitor and decrypt any computer system.

- Ans 1 IPL
 2 LPI
 3 PIL
 4 LIP

Quest on D **98958010778**
Status **Not Answered**
Chosen Opt on **--**

Q.6 ____ became the fourth Indian wicket-keeper to take five catches on Test debut. 2

- Ans 1 Dinesh Karthik
 2 Parthiv Patel
 3 Naman Ojha
 4 Rishabh Pant

Quest on D **98958010765**
Status **Not Answered**
Chosen Opt on **--**

Q.6 Union Minister of State for ____ Shri Shripad Yesso Naik, inaugurated the 2nd World Integrated Medicine Forum 3 2019.

- Ans 1 Human Resource Development
 2 Chemicals and Fertilizers
 3 AYUSH
 4 Health

Quest on D **98958010771**
Status **Answered**
Chosen Opt on **3**

Q.6 Nagaland became a part of the Union of India in the year 1963 by the _____ Amendment to the Constitution of India.

4

- Ans
- 1 17th
 - 2 13th
 - 3 16th
 - 4 14th

Quest on D **98958010784**
Status **Not Answered**
Chosen Opt on --

Q.6 _____ is one of the most important technique for the separation of a mixture by passing it in solution or suspension through a medium in which the components move at different rates.

5

- Ans
- 1 Filtration
 - 2 Distillation
 - 3 Evaporation
 - 4 Chromatography

Quest on D **98958010746**
Status **Not Answered**
Chosen Opt on --

Q.6 The Union Minister for Civil Aviation _____ released the Vision 2040 document in the Global Aviation Summit 2019.

6

- Ans
- 1 Suresh Prabhu
 - 2 Prakash Javadekar
 - 3 Piyush Goyal
 - 4 Nirmala Sitharaman

Quest on D **98958010744**
Status **Answered**
Chosen Opt on **1**

Q.6 It is believed that Lord Shiva assumed the form of _____ and married Parvati at the site of the Meenakshi Temple in South India.

7

- Ans
- 1 Pashupati
 - 2 Harihara
 - 3 Nataraja
 - 4 Sundareshwarar

Quest on D **98958010755**
Status **Not Answered**
Chosen Opt on --

Q.6 The Battle of _____ was fought in 326 BC by Alexander, the Great against King Porus.

8

- Ans
- 1 Hydaspes
 - 2 Tarain
 - 3 Panipat
 - 4 Plassey

Quest on D **98958010779**
Status **Answered**
Chosen Opt on **2**

Q.6 The _____ dynasty which ruled North India from 1206 to 1290 was established by Qutbuddin Aibak.

9

- Ans
- 1 Lodi
 - 2 Tughlaq
 - 3 Khilji
 - 4 Slave

Quest on D **98958010763**
Status **Answered**
Chosen Opt on **2**

Q.7 _____ is a New Year Celebration of Sikkimese Bhutia which falls in the 10th month of the Sikkimese Lunar calendar.

0

- Ans
- 1 Ashura
 - 2 Sonam Losoong
 - 3 Vesak
 - 4 Thai Pongal

Quest on D **98958010780**
Status **Not Answered**
Chosen Opt on **--**

Q.7 Molecular mass of Sulphurous acid is:

1

- Ans
- 1 96.04
 - 2 98.07
 - 3 87.06
 - 4 82.07

Quest on D **98958010787**
Status **Not Answered**
Chosen Opt on **--**

Q.7 The Traffic Police Department of _____ is looking at a futuristic model to maintain traffic flow and spread awareness about the traffic rules by introducing a robot named 'Roadeo'.

2

- Ans
- 1 Ahmedabad

- 2 Mumbai
- 3 Pune
- 4 Delhi

Quest on D **98958010747**
Status **Answered**
Chosen Opt on **1**

Q.7 India's ace sprinter and Asian Games gold-medalist, _____ was appointed as first ever youth ambassador of United Nations Children's Fund (UNICEF) India.

- Ans
- 1 Jisna Mathew
 - 2 Hima Das
 - 3 Mandeep Kaur
 - 4 Manjeet Kaur

Quest on D **98958010759**
Status **Answered**
Chosen Opt on **2**

Q.7 Andaman and Nicobar Islands is a group of _____ islands/islets.

- Ans
- 1 275
 - 2 450
 - 3 780
 - 4 572

Quest on D **98958010788**
Status **Answered**
Chosen Opt on **4**

Q.7 An Indian team of scientists led by _____ of Physical Research Laboratory (PRL), have discovered a sub-Saturn or super-Neptune size planet around a Sun-like star.

- Ans
- 1 Professor Abhijit Chakraborty
 - 2 K Radha Krishnan
 - 3 Padmanaban
 - 4 Abhas Mitra

Quest on D **98958010792**
Status **Not Answered**
Chosen Opt on **--**

Q.7 Post the Anglo-Mysore wars, whom did the East India Company appoint as the Governor of Bengal?

- Ans
- 1 Robert Clive
 - 2 Sir Charles Metcalfe
 - 3 Lord Hardinge
 - 4 Warren Hastings

Quest on D **98958010757**
Status **Not Answered**
Chosen Opt on --

Q.7
7 Where is the Duncan Pass located?

- Ans
- 1 Goa
 - 2 Telangana
 - 3 Andhra Pradesh
 - 4 The Andaman and Nicobar Islands

Quest on D **98958010791**
Status **Not Answered**
Chosen Opt on --

Q.7
8 'Angry Akku' by _____ received The Hindu Young World-Goodbooks Award for Best Picture Book: Story in The Hindu Literary Prize 2018 which was awarded during The Hindu Lit for Life 2019.

- Ans
- 1 Rajiv Eipe
 - 2 Mamta Nainy
 - 3 Neelum Saran Gour
 - 4 Vinayak Varma

Quest on D **98958010748**
Status **Not Answered**
Chosen Opt on --

Q.7
9 The Union Cabinet chaired by Prime Minister Narendra Modi has approved the Agriculture Export Policy, 2018, with an aim to increase farmer's income by _____ % by 2022.

- Ans
- 1 50%
 - 2 100%
 - 3 25 %
 - 4 75 %

Quest on D **98958010793**
Status **Answered**
Chosen Opt on 2

Q.8
0 The Committee headed by Deputy Election Commissioner _____ has submitted the report on revisiting the Section 126 of the Representation of the People Act.

- Ans
- 1 Chandra Bhushan Kumar
 - 2 Nasim Zaidi
 - 3 Umesh Sinha
 - 4 Achal Kumar Jyoti

Quest on D **98958010754**
Status **Answered**
Chosen Opt on 4

Q.8

1 The _____ was awarded the International Gandhi Peace Prize 2017 for its work in the field of education for rural and tribal children, rural empowerment and gender and social equality.

- Ans
- 1 Akshaya Patra Foundation
 - 2 Ekal Abhiyan Trust
 - 3 Vivekananda Kendra
 - 4 Sulabh International

Quest on D **98958010753**
Status **Answered**
Chosen Opt on **4**

Q.8
2 Persea Americana is commonly known as _____.

- Ans
- 1 Avocado
 - 2 Watermelon
 - 3 Orange
 - 4 Grapes

Quest on D **98958010770**
Status **Not Answered**
Chosen Opt on **--**

Q.8
3 Kalhana penned the book named _____ in 12th century which is a metrical historical chronicle of the kings of Kashmir.

- Ans
- 1 Tarikh-i-Firuz Shahi
 - 2 Nuh Sipihir
 - 3 Rajatarangini
 - 4 Padmavat

Quest on D **98958010762**
Status **Not Answered**
Chosen Opt on **--**

Q.8
4 The Delhi High Court has allowed the release of the movie '72 Hours – Martyr who never died', based on the life of the 1962 war hero Rifleman _____ who was posthumously awarded the Maha Vir Chakra for gallantry.

- Ans
- 1 Jaswant Singh Rawat
 - 2 Harbans Singh Virk
 - 3 Man Mohan Khanna
 - 4 Rajendra Singh

Quest on D **98958010760**
Status **Answered**
Chosen Opt on **1**

Q.8
5 The Hindu Literary Prize 2018 for non-fiction was awarded to Activist _____, author of 'Interrogating my Chandal Life: An Autobiography of a Dalit' during The Hindu Lit for Life 2019.

- Ans
- 1 Venita Coelho

- 2 Mamta Nainy
- 3 Manoranjan Byapari
- 4 Vinayak Varma

Quest on D **98958010745**
Status **Not Answered**
Chosen Opt on --

Q.8 The Tropic of Cancer passes through 8 Indian states. Which of the following is NOT one of them?

6

- Ans
- 1 Rajasthan
 - 2 Assam
 - 3 West Bengal
 - 4 Chhattisgarh

Quest on D **98958010776**
Status **Answered**
Chosen Opt on 4

Q.8 Who is the Railway Minister of India as on January 2019?

7

- Ans
- 1 Arun Jaitley
 - 2 Piyush Goyal
 - 3 Suresh Prabhu
 - 4 Nitin Gadkari

Quest on D **98958010768**
Status **Answered**
Chosen Opt on 2

Q.8 India celebrates Army Day on _____ to salute the valiant soldiers who sacrificed their lives to protect the country.

8

- Ans
- 1 February 15
 - 2 March 10
 - 3 January 15
 - 4 August 17

Quest on D **98958010750**
Status **Answered**
Chosen Opt on 3

Q.8 The 18th Asian Games were held in the cities of _____ and _____ in Indonesia from August 18 to September 2, 2018.

9

- Ans
- 1 Medan and Makassar
 - 2 Bandung and Surabaya
 - 3 Malang and Padang

✓ 4 Jakarta and Palembang

Quest on D **98958010774**
Status **Answered**
Chosen Opt on **4**

Q.9
0 Panthi is a dance form from which of the following states?

- Ans
- ✗ 1 Odisha
 - ✗ 2 Rajasthan
 - ✓ 3 Chhattisgarh
 - ✗ 4 Bihar

Quest on D **98958010766**
Status **Not Answered**
Chosen Opt on --

Q.9
1 Who was appointed as the first Chief Justice of independent India?

- Ans
- ✗ 1 Bijan Mukherjee
 - ✗ 2 A R Sarkar
 - ✓ 3 Harilal Kania
 - ✗ 4 Y V Chandrachud

Quest on D **98958010758**
Status **Answered**
Chosen Opt on **4**

Q.9
2 Shaktikanta Das took over as the _____ Governor of Reserve Bank of India after the resignation of Urjit Patel.

- Ans
- ✗ 1 26th
 - ✗ 2 27th
 - ✗ 3 24th
 - ✓ 4 25th

Quest on D **98958010764**
Status **Answered**
Chosen Opt on **1**

Q.9
3 The High Court of Kerala had disqualified an independent MLA _____ from the Kodusvally Assembly constituency for his defamatory campaign against the rival candidate during the 2016 Assembly polls.

- Ans
- ✗ 1 Kamal Nath
 - ✗ 2 Himanta Biswa Sarma
 - ✓ 3 Karat Razack
 - ✗ 4 Ahmed Patel

Quest on D **98958010756**
Status **Answered**
Chosen Opt on **3**

Q.9 India-Myanmar bilateral army exercise, IMBEX 2018-19, has begun at _____ Military Station which houses the
4 headquarters of the Western Command.

- Ans
- 1 Tandur
 - 2 Chandi mandir
 - 3 Pasan
 - 4 Ramgarh

Quest on D **98958010772**
Status **Answered**
Chosen Opt on **4**

Q.9 Vesak commemorates the birth of _____.
5

- Ans
- 1 Christ
 - 2 Mahavir
 - 3 Judas
 - 4 Buddha

Quest on D **98958010767**
Status **Not Answered**
Chosen Opt on --

Q.9 Indian athlete _____ won gold medal in women's Heptathlon Athletics event at 18th edition of Asian Games held in
6 Jakarta-Palembang in Indonesia.

- Ans
- 1 Anju Bobby
 - 2 Swapna Barman
 - 3 Anjali Bhagwat
 - 4 Sakshi Malik

Quest on D **98958010761**
Status **Not Answered**
Chosen Opt on --

Q.9 Which amongst the following is NOT one of the four main factors of production?
7

- Ans
- 1 Land
 - 2 Labour
 - 3 Expenditure
 - 4 Entrepreneurship

Quest on D **98958010783**
Status **Answered**
Chosen Opt on **3**

Q.9 _____ is the first institute in the country to launch a full-fledged bachelor's programme in Artificial Intelligence (AI)
8 technology.

- Ans
- 1 IIT Hyderabad

- 2 IIT Kanpur
- 3 IIT Delhi
- 4 IIT Bombay

Quest on D **98958010752**
 Status **Answered**
 Chosen Opt on **2**

Q.9 By whom was the play 'Caesar and Cleopatra' written?

- Ans
- 1 Joy Adamson
 - 2 Thomas Powers
 - 3 George Bernard Shaw
 - 4 Ernest Hemingway

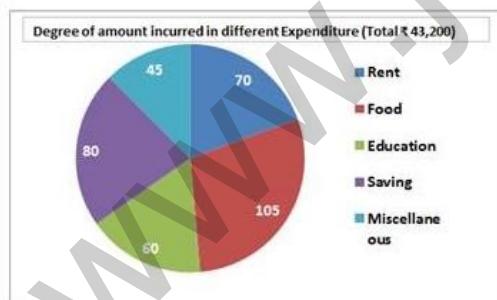
Quest on D **98958010786**
 Status **Not Answered**
 Chosen Opt on **--**

Q.1 Eminent economist and columnist _____ has resigned as part-time member of Economic Advisory Council to the Prime Minister (EAC-PM) in December 2018.

- Ans
- 1 Surjit Bhalla
 - 2 Arvind Subramanian
 - 3 Shivshankar Menon
 - 4 Urijit Patel

Quest on D **98958010773**
 Status **Answered**
 Chosen Opt on **2**

Q.1
01



In the given pie-chart, the amount spend on education is what percent of the savings?

- Ans
- 1 80%
 - 2 60%
 - 3 70%
 - 4 75%

Quest on D **98958010889**
 Status **Answered**
 Chosen Opt on **4**

Q.1 Two numbers are in the ratio 5 : 11. If their HCF is 24, then the sum of two these numbers is:

02

- Ans
- 1 384
 - 2 408
 - 3 120
 - 4 264

Quest on D **98958010846**
Status **Not Attempted and Marked For Review**
Chosen Opt on --

Q.1 One side of a rhombus is 26 cm and one of the diagonal is 48 cm. What is the area of the rhombus?

03

- Ans
- 1 624 cm²
 - 2 580 cm²
 - 3 520 cm²
 - 4 480 cm²

Quest on D **98958010869**
Status **Not Answered**
Chosen Opt on --

Q.1 If the seven digit number $56x34y4$ is divisible by 72, then what is the least value of $(x + y)$?

04

- Ans
- 1 8
 - 2 12
 - 3 5
 - 4 14

Quest on D **98958010845**
Status **Not Attempted and Marked For Review**
Chosen Opt on --

Q.1 ABCD is a cyclic quadrilateral such that AB is the diameter of the circle circumscribing it and $\angle ADC = 155^\circ$, then what

05 is the measure of $\angle BAC$?

- Ans
- 1 35°
 - 2 55°
 - 3 65°
 - 4 45°

Quest on D **98958010877**
Status **Not Answered**
Chosen Opt on --

Q.1 In a class of 70 students, 40% are girls and remaining are boys. The average marks of the boys are 63 and that of the

06 girls are 70. What is the average marks of the whole class?

- Ans
- 1 65.4
 - 2 65.8

3 65.2

4 64.8

Quest on D **98958010851**

Status **Not Attempted and Marked For Review**

Chosen Opt on --

Q.1 The sides of a triangle are 16 cm, 30 cm and 34 cm respectively. At each vertices, circles of radius 7 cm are drawn.

07 What is the area of the triangle, excluding the portion covered by the sectors of the triangle? ($\pi = \frac{22}{7}$)

Ans 1 172 cm²

2 163 cm²

3 196 cm²

4 86 cm²

Quest on D **98958010870**

Status **Not Answered**

Chosen Opt on --

Q.1 If $a^3 - b^3 = 1603$ and $(a - b) = 7$, then $(a + b)^2 - ab$ is equal to:

08 Ans 1 458

2 338

3 229

4 648

Quest on D **98958010875**

Status **Not Attempted and Marked For Review**

Chosen Opt on --

Q.1 If a train runs with the speed of 36 km/h, it reaches its destination 15 minutes late. However, if its speed is 45 km/h, it is late by only 4 minutes. The correct time to cover its journey in minutes is:

09 Ans 1 22

2 27

3 25

4 40

Quest on D **98958010867**

Status **Not Attempted and Marked For Review**

Chosen Opt on --

Q.1 From a point P outside the circle with centre O, two tangents PA and PB are drawn to meet the circle at A and B respectively. If $\angle APB = 70^\circ$, then $\angle OAB$ is equal to:

10 Ans 1 35°

2 65°

3 45°

4 55°

Quest on D **98958010878**

Status **Not Answered**

Chosen Opt on --

Q.1 The price sugar has increased by 18%. By what percentage can a person decrease the consumption so that, there is no change in the expenditure? (correct to one decimal place)

- Ans**
- 1 15.9%
 - 2 15.7%
 - 3 15.5%
 - 4 15.3%

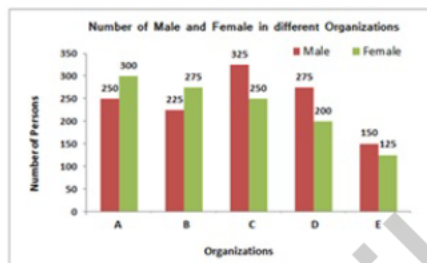
Quest on D 98958010856
Status Not Answered
Chosen Opt on --

Q.1 18 persons working 8 hours a day can complete 3 units of works in 10 days. How many persons are required to complete 5 units of that work in 16 days working 6 hours a day?

- Ans**
- 1 25
 - 2 15
 - 3 20
 - 4 9

Quest on D 98958010863
Status Answered
Chosen Opt on 4

Q.1
13



In the given bar graph, what is the average number of females in all five organisations?

- Ans**
- 1 245
 - 2 235
 - 3 230
 - 4 225

Quest on D 98958010887
Status Answered
Chosen Opt on 3

Q.1 A boat can go 20 km downstream and 30 km upstream in 2 hours 20 minutes. Also, it can go 10 km downstream and 8 km upstream in 49 minutes. What is the speed of boat downstream in km/h?

- Ans**
- 1 18
 - 2 20
 - 3 16
 - 4 24

Quest on D 98958010868
Status Not Attempted and Marked For Review

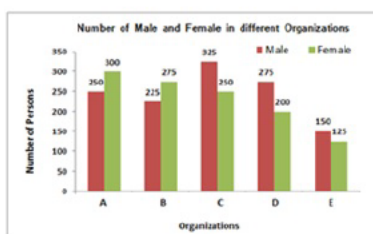
Chosen Opt on --

Q.1
15 The value of $\sin^2 30^\circ \cdot \cos^2 45^\circ + 2 \tan^2 30^\circ - \sec^2 60^\circ$ is equal to:

- Ans
- 1 $-\frac{13}{12}$
- 2 $-\frac{77}{24}$
- 3 $-\frac{25}{12}$
- 4 $-\frac{1}{12}$

Quest on D 98958010 82
Status No Answered
Chosen Opt on --

Q.1
16



In the given bar graph, what is the ratio of the total males and females working in all organisations?

- Ans
- 1 49 : 46
- 2 35 : 46
- 3 46 : 40
- 4 46 : 35

Quest on D 98958010885
Status Answered
Chosen Opt on 1

Q.1
17 The average of 22 numbers is 52. The average of the first 8 numbers is 48 and the average of next 11 numbers is 54. The 20th number is 7 less than the 21st number and 21st number is 4 more than 22nd number. What is the average of the 20th and 22nd numbers?

- Ans
- 1 52
- 2 52.5
- 3 53
- 4 53.5

Quest on D 98958010852
Status Not Attempted and Marked For Review
Chosen Opt on --

Q.1
18 From the top of 75 m high tower, the angle of depression of two points P and Q on opposite side of the base of the tower on level ground is θ and ϕ , such that $\tan \theta = \frac{3}{4}$ and $\tan \phi = \frac{5}{6}$. What is the distance between the points P and Q?

- Ans
- 1 190 m
- 2 200 m
- 3 180 m

✓ 4 220 m

Quest on D 98958010884
Status Not Answered
Chosen Opt on --

Q.1 The radius of a cylinder is increased by 150% and its height is increased by 50%. What is the percentage increase in its volume?

19

- Ans
- ✗ 1 375%
 - ✗ 2 625.5%
 - ✗ 3 775.75%
 - ✓ 4 837.5%

Quest on D 989580 0873
Status Not Answered
Chosen Opt on --

Q.1 A, B and C started a business by investing ₹ 27,500, ₹ 32,500 and ₹ 37,500 respectively. A is a working partner and gets 20% of profit as working allowance and the remaining is distributed in proportion of their investments. If the money received by C is ₹ 13,500, What is total profit?

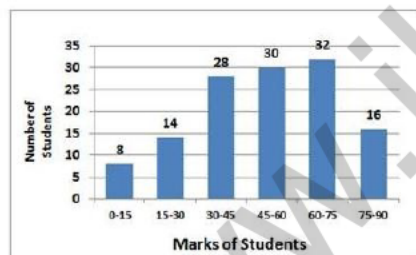
20

- Ans
- ✗ 1 ₹ 35,100
 - ✗ 2 ₹ 38,425
 - ✗ 3 ₹ 42,750
 - ✓ 4 ₹ 43,875

Quest on D 98958010860
Status Not Attempted and Marked For Review
Chosen Opt on --

Q.1

21



In the given histogram, what percentage of students got marks less than 45? (Correct to one decimal place)

- Ans
- ✗ 1 39.4%
 - ✓ 2 39.1%
 - ✗ 3 39.6%
 - ✗ 4 38.8%

Quest on D 98958010891
Status Answered
Chosen Opt on 2

Q.1 The Square root of which of the following is a rational number?

22

- Ans
- ✓ 1 2361.96

2 2758.28

3 72568.4

4 62504.9

Quest on D 98958010844

Status Not Attempted and Marked For Review

Chosen Opt on --

Q.1 What is the sum of the digits of the least number, which when divided by 15, 15 and 27 leaves the same remainder 9 in each case and is also completely divisible by 11?

Ans 1 20

2 17

3 18

4 19

Quest on D 9895801 847

Status Not Attempted and Marked For Review

Chosen Opt on --

Q.1 $\frac{6.75 \times 6.75 \times 6.75 - 4.25 \times 4.25 \times 4.25}{67.5 \times 67.5 + 42.5 \times 42.5 + 67.5 \times 42.5}$ is equal to:

Ans 1 2.5

2 0.25

3 0.0025

4 0.025

Quest on D 98958010850

Status Not Attempted and Marked For Review

Chosen Opt on --

Q.1 A shopkeeper marks an article at a price such that after giving a discount of 25%, the gains $x\%$. If the cost price and the marked price of the article are ₹ 460 and ₹ 736 respectively, what is the value of x ?

Ans 1 20%

2 18%

3 24%

4 16%

Quest on D 98958010853

Status Not Attempted and Marked For Review

Chosen Opt on --

Q.1 Let $\Delta ABC \sim \Delta RPQ$ and $\frac{ar(\Delta ABC)}{ar(\Delta PQR)} = \frac{1}{4}$. If $PQ = 4$ cm, $QR = 6$ cm and $PR = 7$ cm, then AC is equal to:

Ans 1 2 cm

2 4 cm

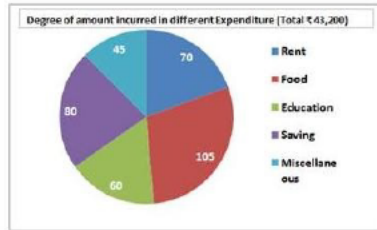
3 3 cm

4 3.5 cm

Quest on D 98958010880

Status Not Answered

Chosen Opt on --

Q.1
27

In the given pie-chart, total expenditure together on rent and education is what percent less than total expenditure of food and miscellaneous items?

- Ans
- 1 26%
- 2 30%
- 3 $\frac{200}{13}$ %
- 4 $\frac{40}{3}$ %

Q est on D 98958010890
Status Answered
Chosen Opt on 4

Q.1
28 $5\frac{1}{5} - \left[3\frac{1}{2} - \left\{ \frac{5}{6} - \left(\frac{3}{5} + \frac{1}{10} - \frac{4}{15} \right) \right\} \right]$ is equal to:

- Ans
- 1 $\frac{21}{10}$
- 2 $\frac{7}{5}$
- 3 $\frac{7}{3}$
- 4 $\frac{8}{3}$

Quest on D 98958010849
Status Not Attempted and Marked For Review
Chosen Opt on --

Q.1
29 The efficiencies of A, B and C are in the ratio 2 : 5 : 7 working together, they can complete a work in 10 days. In how many days will, A alone be able to complete 30% of that work?

- Ans
- 1 20
- 2 28
- 3 30
- 4 21

Quest on D 98958010864
Status Not Attempted and Marked For Review
Chosen Opt on --

Q.1
30 In an examination, 53% of the candidates failed in science and 48% failed in mathematics. If 40% failed in both subjects, what percentage passed in both subjects?

- Ans
- 1 51%
- 2 39%

3 49%

4 43%

Quest on D 98958010857
Status Answered
Chosen Opt on 2

Q.1 31 Two pipes A and B can fill an empty tank in 10 hours and 16 hours respectively. They are opened alternately for 1 hour each, starting with pipe A first. In how many hours, the empty tank will be filled?

Ans 1 $12\frac{1}{3}$

2 $12\frac{1}{8}$

3 $12\frac{1}{4}$

4 $12\frac{1}{6}$

Quest on D 98958010866
Status Not Attempted and Marked For Review
Chosen Opt on -

Q.1 32 The successive discounts of 20%, 10% and 8% is equivalent to a single discount of:

Ans 1 66.24%

2 32.84%

3 38%

4 33.76%

Quest on D 98958010854
Status Answered
Chosen Opt on 1

Q.1 33 If $\sin(A + B) = \frac{\sqrt{3}}{2}$ and $\tan(A - B) = \frac{1}{\sqrt{3}}$, then $(2A + 3B)$ is equal to:

Ans 1 120°

2 135°

3 130°

4 125°

Quest on D 98958010881
Status Not Answered
Chosen Opt on --

Q.1 34 A sum of ₹ 12,000 is invested for 15 months at 10% per annum compounded half yearly. What is the percentage gain, at the end of 15 months, correct to one decimal place?

Ans 1 13.0%

2 13.1%

3 12.8%

4 12.9%

Quest on D 98958010862
 Status Not Attempted and Marked For Review
 Chosen Opt on --

Q.1 What is the ratio of mean proportional between 1.8 and 3.2 and the third proportional of 5 and 3?

35

- Ans
- 1 3 : 5
 - 2 4 : 3
 - 3 3 : 4
 - 4 5 : 3

Quest on D 98958010859
 Status Not Attempted and Marked For Review
 Chosen Opt on --

Q.1 In ΔABC , $\angle A = 40^\circ$. If the bisectors of the $\angle B$ and $\angle C$, meet at a point O, then $\angle BOC$ is equal to:

36

- Ans
- 1 130°
 - 2 90°
 - 3 70°
 - 4 110°

Quest on D 98958010879
 Status Not Answered
 Chosen Opt on --

Q.1 Pipes A and B can fill a tank in 12 hours and 16 hours respectively and pipe C can empty the full tank in 24 hours. All three pipes are opened together, but after 4 hours pipe A is closed. In how many hours from the beginning the tank be filled?

37

- Ans
- 1 24
 - 2 28
 - 3 30
 - 4 32

Quest on D 98958010865
 Status Not Attempted and Marked For Review
 Chosen Opt on --

Q.1 8 cubes, each of edge 5 cm, are joined end to end. What is the total surface area of the resulting cuboid?

38

- Ans
- 1 850 cm^2
 - 2 825 cm^2
 - 3 1200 cm^2
 - 4 800 cm^2

Quest on D 98958010871
 Status Not Attempted and Marked For Review
 Chosen Opt on --

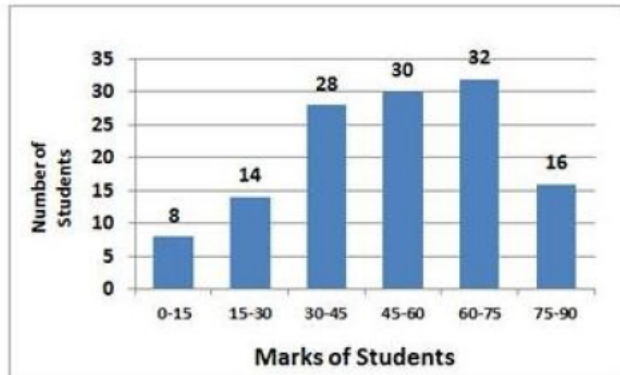
Q.1 A shopkeeper sold two articles for ₹ 9639 each. On one, he gained 19% and on the other, he lost 19%. What is the overall percentage gain or loss?

39

- Ans
- 1 3.81% loss
 - 2 3.61% gain
 - 3 3.81% gain
 - 4 3.61% loss

Quest on D 98958010858
 Status Answered
 Chosen Opt on 4

Q.1
40



In the given histogram, in which class interval, the median marks lies?

- Ans
- 1 30-45
 - 2 45-60
 - 3 60-75
 - 4 15-30

Quest on D 98958010892
 Status Answered
 Chosen Opt on 4

Q.1 If $(x + 4)^3 + (2x + 1)^3 + (2x + 5)^3 = (3x + 12)(2x + 1)(2x + 5)$, then what is the value of x ?

41

- Ans
- 1 -3
 - 2 -2
 - 3 2
 - 4 3

Quest on D 98958010876
 Status Not Attempted and Marked For Review
 Chosen Opt on --

Q.1 The value of $3\frac{5}{6} + \left[3\frac{2}{3} - \left\{\frac{15}{4}\left(5\frac{4}{5} \div 14\frac{1}{2}\right)\right\}\right]$ is equal to:

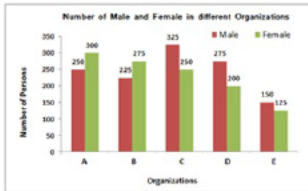
42

- Ans
- 1 $\frac{37}{6}$
 - 2 $\frac{35}{6}$
 - 3 6

4 $\frac{19}{3}$

Quest on D 98958010848
Status Answered
Chosen Opt on 2

Q.1
43



In the given bar graph, in which organisation, the percentage difference between the males and females is maximum, by considering total persons in that organisation as base?

- Ans 1 D
 2 E
 3 B
 4 C

Quest on D 98958010886
Status Answered
Chosen Opt on 1

Q.1 The angle of elevation of top of a tower from a point P, on the ground is θ such that $\tan \theta = \frac{12}{5}$. If distance of the point P, from the base of the tower is 75 m, what is the height of the tower?
44

- Ans 1 160 m
 2 200 m
 3 190 m
 4 180 m

Quest on D 98958010883
Status Not Answered
Chosen Opt on --

Q.1 If the income of A is 40% more than the income of B, then by what percentage is B's income less than that income of A?
45

- Ans 1 $\frac{230}{7}\%$
 2 56%
 3 25%
 4 $\frac{200}{7}\%$

Quest on D 98958010855
Status Answered
Chosen Opt on 1

Q.1 If $x + \frac{1}{x} = 8$, then $x^2 + \frac{1}{x^2}$ is equal to:
46

- Ans 1 62
 2 68

3 64

4 66

Quest on D 98958010874

Status Answered

Chosen Opt on 4

Q.1 A sum of ₹ 15,600 is invested partly at 7% per annum and the remaining at 9% per annum simple interest. If the total interest at the end of 3 years is ₹ 3,738, how much money was invested at 7% per annum?

Ans 1 ₹ 7,800

2 ₹ 7,900

3 ₹ 7,600

4 ₹ 7,700

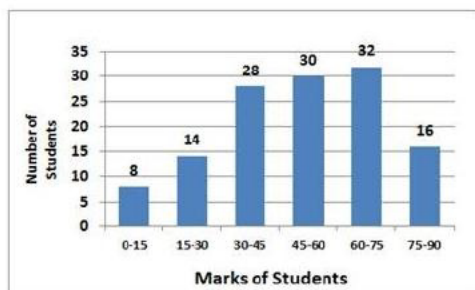
Quest on D 9895801 861

Status Not Attempted and Marked For Review

Chosen Opt on --

Q.1

48



In the given histogram, what is the mean marks of the students, correct to one decimal place?

Ans 1 51.2

2 53.5

3 52.7

4 50.6

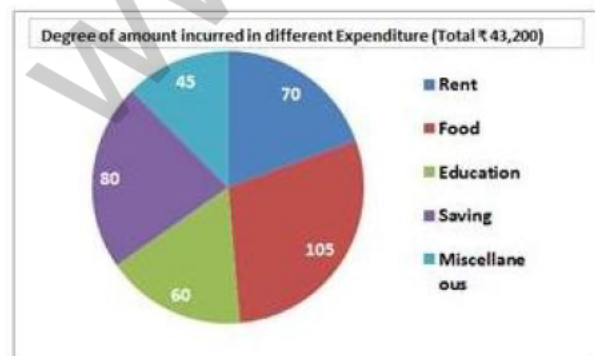
Quest on D 98958010893

Status Not Attempted and Marked For Review

Chosen Opt on --

Q.1

49



In the given pie-chart, what is the total expenditure on rent?

Ans

1 ₹ 8,400

2 ₹ 8,600

3 ₹ 8,800

4 ₹ 8,900

Quest on D 98958010888
Status Answered
Chosen Opt on 1

Q.1 A sphere of radius 7 cm is melted and recast into small spheres of radius 2 cm each. How many such spheres can be made?

50

Ans 1 40

2 42

3 41

4 43

Quest on D 98958010872
Status Not Answered
Chosen Opt on --

Q.1 Select the wrongly spelt word.

51

Ans 1 devilish

2 device

3 deviation

4 deveous

Quest on D 98958010531
Status Not Answered
Chosen Opt on --

Q.1 Select the wrongly spelt word.

52

Ans 1 evaporation

2 establish

3 essential

4 evaluation

Quest on D 98958010532
Status Answered
Chosen Opt on 4

Q.1 Select the most appropriate words to fill in the blanks.

53

I expect to return _____ Mumbai _____ March 15.

Ans 1 from; on

- 2 to; at
- 3 from; in
- 4 at; in

Quest on D 98958010501
 Status Answered
 Chosen Opt on 1

Q.1
54 Select the most appropriate word to fill in the blank.

After three months of practice, I _____ now swim quite fast.

- Ans
- 1 cannot
 - 2 should
 - 3 can
 - 4 could

Quest on D 98958010500
 Status Answered
 Chosen Opt on 3

Q.1
55 Select the antonym of the given word.

STINGY

- Ans
- 1 kind
 - 2 generous
 - 3 mean
 - 4 miserly

Quest on D 98958010519
 Status Not Answered
 Chosen Opt on --

Q.1
56 In the sentence identify the segment which contains the grammatical error.

Either Avika or Nikunj are going to win the prize in the handwriting competition.

- Ans
- 1 Either Avika
 - 2 or Nikunj
 - 3 in the
 - 4 are going to

Quest on D 98958010493
 Status Answered
 Chosen Opt on 4

Q.1
57 Select the most appropriate meaning of the given idiom.

get out of hand

- Ans
- 1 to act irresponsibly
 - 2 to become uncontrollable
 - 3 to be indecisive
 - 4 to lose courage

Quest on D 989580105 2
Status Answered
Chosen Opt on 2

Q.1
58 In the sentence identify the segment which contains the grammatical error.

Neither I nor my sisters was interested in learning music.

- Ans
- 1 nor my sisters
 - 2 in learning music.
 - 3 was interested
 - 4 Neither I

Quest on D 98958010491
Status Answered
Chosen Opt on 3

Comprehension:

Read the following passage and answer the questions given after it.

The much-awaited expansion of Delhi's Indira Gandhi International Airport is expected to begin by March-end as the airport operator has received three bids for the R 9,000-crore project, two officials familiar with the matter said.

Two bids are from foreign companies while one is from an Indian firm. The airport operator, the GMR Group-led Delhi International Airport Ltd (DIAL), is expected to finalise the bidder this week. After the announcement, the successful bidder is expected to take around two months to mobilise the workforce and begin expansion work.

The bid document says the selected company has to complete work in 42 months. All the three bidders are reported to have quoted 39 months, the sources said.

The expansion is aimed to meet the rapid traffic growth that has already made IGI Asia's seventh busiest airport. The selected company will work on the expansion of Terminal 1 and Terminal 3 and the construction of a new runway and taxiways. Roads leading to the airport will be widened and new approach roads will be built.

The operator expects the expansion, which will start with Terminal 1, to be completed by 2021 — taking the overall handling capacity of the airport to 85 million passengers per year from the current 70 million. It will be followed by Phase 2 of the expansion, which includes construction of another brand new terminal.

Data released last year by Airports Council International showed that the passenger traffic at the Delhi Airport grew 14.1% year on year to 63.45 million in 2017. It was the first time it breached the 60-million passenger mark. In 2018, it was just below 70-million mark.

The new air traffic control (ATC) tower, which will open in 2019, and the fourth runway, to be launched in 2021, would help it reduce air congestion and handle more flights.

“Terminal 1 handles domestic traffic for low-cost carriers. These have registered a phenomenal growth in the last few years, calling for an expansion of the terminal. Delhi Metro under its Phase 3 programme is connecting this terminal to catchment areas of central and south Delhi. Since T1 is operating beyond its capacity, the expansion will begin from there and cover the airside, terminal building and city side,” said a DIAL official.

According to the Master Plan, T1's capacity will increase from 20 million to 40 million and that of Terminal 3 from 34 million to 45 million.

Inter-terminal connectivity through the Airport Metro between T1 and T3 is also part of the expansion plan.

DIAL has appointed AECOM, a design and development consultant for infrastructure projects, to complete the preliminary design for the expansion work.

SubQuestion No : 159

Q.1
59 From the reading of the paragraph it can be inferred that it is:

- Ans
- 1 a news item
 - 2 a survey report
 - 3 an airport novel
 - 4 a promotional article

Quest on D 98958010537
Status Not Answered
Chosen Opt on --

Comprehension:

www.jkchrome.com

Read the following passage and answer the questions given after it.

The much-awaited expansion of Delhi's Indira Gandhi International Airport is expected to begin by March-end as the airport operator has received three bids for the R 9,000-crore project, two officials familiar with the matter said.

Two bids are from foreign companies while one is from an Indian firm. The airport operator, the GMR Group-led Delhi International Airport Ltd (DIAL), is expected to finalise the bidder this week. After the announcement, the successful bidder is expected to take around two months to mobilise the workforce and begin expansion work.

The bid document says the selected company has to complete work in 42 months. All the three bidders are reported to have quoted 39 months, the sources said.

The expansion is aimed to meet the rapid traffic growth that has already made IGI Asia's seventh busiest airport. The selected company will work on the expansion of Terminal 1 and Terminal 3 and the construction of a new runway and taxiways. Roads leading to the airport will be widened and new approach roads will be built.

The operator expects the expansion, which will start with Terminal 1, to be completed by 2021 — taking the overall handling capacity of the airport to 85 million passengers per year from the current 70 million. It will be followed by Phase 2 of the expansion, which includes construction of another brand new terminal.

Data released last year by Airports Council International showed that the passenger traffic at the Delhi Airport grew 14.1% year on year to 63.45 million in 2017. It was the first time it breached the 60-million passenger mark. In 2018, it was just below 70-million mark.

The new air traffic control (ATC) tower, which will open in 2019, and the fourth runway, to be launched in 2021, would help it reduce air congestion and handle more flights.

“Terminal 1 handles domestic traffic for low-cost carriers. These have registered a phenomenal growth in the last few years, calling for an expansion of the terminal. Delhi Metro under its Phase 3 programme is connecting this terminal to catchment areas of central and south Delhi. Since T1 is operating beyond its capacity, the expansion will begin from there and cover the airside, terminal building and city side,” said a DIAL official.

According to the Master Plan, T1's capacity will increase from 20 million to 40 million and that of Terminal 3 from 34 million to 45 million.

Inter-terminal connectivity through the Airport Metro between T1 and T3 is also part of the expansion plan.

DIAL has appointed AECOM, a design and development consultant for infrastructure projects, to complete the preliminary design for the expansion work.

SubQuestion No : 160

Q.1
60 The expansion of the airport will begin from:

- Ans
- 1 Construction of a new terminal to handle the increasing load.
 - 2 Terminal 3 which handles international traffic.
 - 3 Construction of a new runway and taxiways.
 - 4 Terminal 1 which handles fast growing domestic traffic.

Quest on D 98958010538

Status Not Answered

Chosen Opt on --

Comprehension:

www.jkchrome.com

Read the following passage and answer the questions given after it.

The much-awaited expansion of Delhi's Indira Gandhi International Airport is expected to begin by March-end as the airport operator has received three bids for the R 9,000-crore project, two officials familiar with the matter said.

Two bids are from foreign companies while one is from an Indian firm. The airport operator, the GMR Group-led Delhi International Airport Ltd (DIAL), is expected to finalise the bidder this week. After the announcement, the successful bidder is expected to take around two months to mobilise the workforce and begin expansion work.

The bid document says the selected company has to complete work in 42 months. All the three bidders are reported to have quoted 39 months, the sources said.

The expansion is aimed to meet the rapid traffic growth that has already made IGI Asia's seventh busiest airport. The selected company will work on the expansion of Terminal 1 and Terminal 3 and the construction of a new runway and taxiways. Roads leading to the airport will be widened and new approach roads will be built.

The operator expects the expansion, which will start with Terminal 1, to be completed by 2021 — taking the overall handling capacity of the airport to 85 million passengers per year from the current 70 million. It will be followed by Phase 2 of the expansion, which includes construction of another brand new terminal.

Data released last year by Airports Council International showed that the passenger traffic at the Delhi Airport grew 14.1% year on year to 63.45 million in 2017. It was the first time it breached the 60-million passenger mark. In 2018, it was just below 70-million mark.

The new air traffic control (ATC) tower, which will open in 2019, and the fourth runway, to be launched in 2021, would help it reduce air congestion and handle more flights.

“Terminal 1 handles domestic traffic for low-cost carriers. These have registered a phenomenal growth in the last few years, calling for an expansion of the terminal. Delhi Metro under its Phase 3 programme is connecting this terminal to catchment areas of central and south Delhi. Since T1 is operating beyond its capacity, the expansion will begin from there and cover the airside, terminal building and city side,” said a DIAL official.

According to the Master Plan, T1's capacity will increase from 20 million to 40 million and that of Terminal 3 from 34 million to 45 million.

Inter-terminal connectivity through the Airport Metro between T1 and T3 is also part of the expansion plan.

DIAL has appointed AECOM, a design and development consultant for infrastructure projects, to complete the preliminary design for the expansion work.

SubQuestion No : 161

Q.1
61 In 2018, the number of passengers that the Delhi Airport handled was:

- Ans
- 1 63.45 million
 - 2 40 million
 - 3 just below 70 million
 - 4 45 million

Quest on D 98958010539
Status Not Answered
Chosen Opt on --

Comprehension:

www.jkchrome.com

Read the following passage and answer the questions given after it.

The much-awaited expansion of Delhi's Indira Gandhi International Airport is expected to begin by March-end as the airport operator has received three bids for the R 9,000-crore project, two officials familiar with the matter said.

Two bids are from foreign companies while one is from an Indian firm. The airport operator, the GMR Group-led Delhi International Airport Ltd (DIAL), is expected to finalise the bidder this week. After the announcement, the successful bidder is expected to take around two months to mobilise the workforce and begin expansion work.

The bid document says the selected company has to complete work in 42 months. All the three bidders are reported to have quoted 39 months, the sources said.

The expansion is aimed to meet the rapid traffic growth that has already made IGI Asia's seventh busiest airport. The selected company will work on the expansion of Terminal 1 and Terminal 3 and the construction of a new runway and taxiways. Roads leading to the airport will be widened and new approach roads will be built.

The operator expects the expansion, which will start with Terminal 1, to be completed by 2021 — taking the overall handling capacity of the airport to 85 million passengers per year from the current 70 million. It will be followed by Phase 2 of the expansion, which includes construction of another brand new terminal.

Data released last year by Airports Council International showed that the passenger traffic at the Delhi Airport grew 14.1% year on year to 63.45 million in 2017. It was the first time it breached the 60-million passenger mark. In 2018, it was just below 70-million mark.

The new air traffic control (ATC) tower, which will open in 2019, and the fourth runway, to be launched in 2021, would help it reduce air congestion and handle more flights.

“Terminal 1 handles domestic traffic for low-cost carriers. These have registered a phenomenal growth in the last few years, calling for an expansion of the terminal. Delhi Metro under its Phase 3 programme is connecting this terminal to catchment areas of central and south Delhi. Since T1 is operating beyond its capacity, the expansion will begin from there and cover the airside, terminal building and city side,” said a DIAL official.

According to the Master Plan, T1's capacity will increase from 20 million to 40 million and that of Terminal 3 from 34 million to 45 million.

Inter-terminal connectivity through the Airport Metro between T1 and T3 is also part of the expansion plan.

DIAL has appointed AECOM, a design and development consultant for infrastructure projects, to complete the preliminary design for the expansion work.

SubQuestion No : 162

Q.1
62 Which of the following measures will help the airport reduce air congestion and handle more flights for the time being?

- Ans
- 1 building Inter-terminal connectivity between T1 and T3
 - 2 construction of air control tower and a new runway
 - 3 construction of taxiways and widening of approach roads
 - 4 construction of a brand new terminal

Quest on D 989580105 0
Status Not Answered
Chosen Opt on --

Comprehension:

www.jkchrome.com

Read the following passage and answer the questions given after it.

The much-awaited expansion of Delhi's Indira Gandhi International Airport is expected to begin by March-end as the airport operator has received three bids for the R 9,000-crore project, two officials familiar with the matter said.

Two bids are from foreign companies while one is from an Indian firm. The airport operator, the GMR Group-led Delhi International Airport Ltd (DIAL), is expected to finalise the bidder this week. After the announcement, the successful bidder is expected to take around two months to mobilise the workforce and begin expansion work.

The bid document says the selected company has to complete work in 42 months. All the three bidders are reported to have quoted 39 months, the sources said.

The expansion is aimed to meet the rapid traffic growth that has already made IGI Asia's seventh busiest airport. The selected company will work on the expansion of Terminal 1 and Terminal 3 and the construction of a new runway and taxiways. Roads leading to the airport will be widened and new approach roads will be built.

The operator expects the expansion, which will start with Terminal 1, to be completed by 2021 — taking the overall handling capacity of the airport to 85 million passengers per year from the current 70 million. It will be followed by Phase 2 of the expansion, which includes construction of another brand new terminal.

Data released last year by Airports Council International showed that the passenger traffic at the Delhi Airport grew 14.1% year on year to 63.45 million in 2017. It was the first time it breached the 60-million passenger mark. In 2018, it was just below 70-million mark.

The new air traffic control (ATC) tower, which will open in 2019, and the fourth runway, to be launched in 2021, would help it reduce air congestion and handle more flights.

“Terminal 1 handles domestic traffic for low-cost carriers. These have registered a phenomenal growth in the last few years, calling for an expansion of the terminal. Delhi Metro under its Phase 3 programme is connecting this terminal to catchment areas of central and south Delhi. Since T1 is operating beyond its capacity, the expansion will begin from there and cover the airside, terminal building and city side,” said a DIAL official.

According to the Master Plan, T1's capacity will increase from 20 million to 40 million and that of Terminal 3 from 34 million to 45 million.

Inter-terminal connectivity through the Airport Metro between T1 and T3 is also part of the expansion plan.

DIAL has appointed AECOM, a design and development consultant for infrastructure projects, to complete the preliminary design for the expansion work.

SubQuestion No : 163

Q.1
63 Which agency has been appointed to prepare the design for the expansion of the Delhi airport?

- Ans
- 1 Airports Council International
 - 2 G M R group
 - 3 AECOM
 - 4 DIAL

Quest on D 98958010541
Status Not Answered
Chosen Opt on --

Q.1
64 Select the antonym of the given word.

IMPECCABLE

- Ans
- 1 faultless
 - 2 unsullied
 - 3 imperfect
 - 4 methodical

Quest on D 98958010520
Status Answered
Chosen Opt on 1

Q.1
65 Select the most appropriate meaning of the given idiom.

to drive someone up the wall

- Ans
- 1 to help someone in difficulty
 - 2 to keep at a distance
 - 3 to irritate someone very much
 - 4 to frighten someone

Quest on D 98958010525
Status Answered
Chosen Opt on 1

Q.1
66 Select the synonym of the given word.

VELOCITY

- Ans
- 1 flight
 - 2 race

3 speed

4 hurry

Quest on D 98958010511
Status Answered
Chosen Opt on 3

Q.1 67 Select the most appropriate option to substitute the underlined segment in the given sentence. If there is no need to substitute it, Select No improvement.

People arrive from all parts of the country and had walked miles to take a dip at the confluence of the Rivers Ganga and Yamuna.

Ans 1 are walking miles to take a dip

2 walk for miles to take a dip

3 had walked miles taking a dip

4 No improvement

Quest on D 98958010498
Status Answered
Chosen Opt on 2

Q.1 68 Select the wrongly spelt word.

Ans 1 releive

2 recruit

3 receipt

4 realm

Quest on D 98958010533
Status Not Answered
Chosen Opt on --

Q.1 69 Select the most appropriate option to substitute the underlined segment in the given sentence. If there is no need to substitute it, Select No improvement.

He has not taken any coaching in the game but he plays good than many professional players.

Ans 1 He is playing good than

2 he plays the best than

3 he plays better than

4 No improvement

Quest on D 98958010496
Status Answered
Chosen Opt on 3

Q.1
70

Select the antonym of the given word.

AMIABLE

- Ans
- 1 comfortable
 - 2 friendly
 - 3 hostile
 - 4 cordial

Quest on D 989580105 8
Status Answered
Chosen Opt on 3

Q.1 Select the most appropriate option to substitute the underlined segment in the given sentence. If there is no need to substitute it, Select No improvement.
71

Not only she objected to his proposal but also condemned it in strong terms.

- Ans
- 1 Not only did she object
 - 2 Not only did she objected
 - 3 Not only she had objected
 - 4 No improvement

Quest on D 98958010497
Status Answered
Chosen Opt on 1

Q.1 Select the wrongly spelt word.
72

- Ans
- 1 violin
 - 2 visionary
 - 3 vecious
 - 4 voyage

Quest on D 98958010534
Status Not Answered
Chosen Opt on --

Q.1 Select the synonym of the given word.
73

ACCURATE

- Ans
- 1 precise
 - 2 truthful
 - 3 condensed
 - 4 pacify

Quest on D 98958010512
Status Answered
Chosen Opt on 4

Q.1
74 Select the most appropriate word to fill in the blank.

There was a lot of rubbish on the floor so I asked Sangeeta to sweep _____ away.

- Ans
- 1 them
 - 2 this
 - 3 it
 - 4 its

Quest on D 98 58010 03
Sta us Answered
Chosen Opt n 3

Q.1
75 Select the antonym of the given word.

COHERENT

- Ans
- 1 constant
 - 2 illegible
 - 3 consistent
 - 4 illogical

Quest on D 98958010517
Status Not Answered
Chosen Opt on --

Q.1
76 Select the antonym of the given word.

WEARY

- Ans
- 1 quick
 - 2 alert
 - 3 tired
 - 4 refreshed

Quest on D 98958010516
Status Answered
Chosen Opt on 3

Q.1
77

Select the most appropriate word for the given group of words.

a large bound bundle of paper, hay or cotton

- Ans
- 1 barrel
 - 2 bale
 - 3 gale
 - 4 cache

Quest on D 98958010526
Status Not Answered
Chosen Option --

Q.1
78 Select the most appropriate word to fill in the blank.

I felt something hard _____ my cheek.

- Ans
- 1 hit
 - 2 to hitting
 - 3 to be hitting
 - 4 to hit

Quest on D 98958010504
Status Answered
Chosen Option 4

Q.1
79 Select the wrongly spelt word.

- Ans
- 1 competition
 - 2 explanation
 - 3 acquisition
 - 4 illumination

Quest on D 98958010535
Status Answered
Chosen Option 1

Q.1
80 Select the most appropriate option to substitute the underlined segment in the given sentence. If there is no need to substitute it, Select No improvement.

The Kumbh Mela has been held at Allahabad, since centuries now because in the past two decades it has grown into a mega event.

- Ans
- 1 for centuries now but in the past
 - 2 No improvement
 - 3 since centuries now but in the past

4 for centuries now moreover in the past

Quest on D 98958010499
Status Answered
Chosen Opt on 4

Q.1
81 In the sentence identify the segment which contains the grammatical error.

She is always finding fault with the food I cook.

- Ans
- 1 I cook.
 - 2 fault with
 - 3 the food
 - 4 is always finding

Quest on D 98 58010494
Status Answered
Chosen Opt on 2

Q.1
82 In the sentence identify the segment which contains the grammatical error.

This test comprises of grammar, vocabulary and reading comprehension.

- Ans
- 1 grammar, vocabulary
 - 2 This test
 - 3 and reading comprehension
 - 4 comprises of

Quest on D 98958010492
Status Not Answered
Chosen Opt on --

Q.1
83 Select the most appropriate word for the given group of words.

instrument used for coding and decoding messages

- Ans
- 1 chronometer
 - 2 cryptograph
 - 3 cardiograph
 - 4 crescograph

Quest on D 98958010530
Status Answered
Chosen Opt on 2

Q.1

84 Select the most appropriate meaning of the given idiom.

to give the slip

- Ans 1 to keep low
 2 to escape
 3 to hit someone
 4 to hide

Quest on D 98958010521
Status Not Answered
Chosen Opt on --

Q.1
85 Select the synonym of the given word.

IMMERSE

- Ans 1 drown
 2 bathe
 3 shower
 4 submerge

Quest on D 98958010513
Status Answered
Chosen Opt on 4

Q.1
86 Select the synonym of the given word.

AWKWARD

- Ans 1 skillful
 2 clumsy
 3 pleasant
 4 graceful

Quest on D 98958010514
Status Answered
Chosen Opt on 1

Q.1
87 Select the most appropriate word for the given group of words.

the base frame of a car or other wheeled vehicle

- Ans 1 fuselage
 2 bonnet

3 chassis

4 cockpit

Quest on D 98958010527
Status Not Answered
Chosen Opt on --

Q.1
88 Select the synonym of the given word.

RADICAL

Ans 1 trivial

2 absolute

3 minor

4 moderate

Quest on D 98958010515
Status Answered
Chosen Opt on 4

Q.1
89 Select the most appropriate word to fill in the blank.

The offer is good. You will regret _____ you decline it.

Ans 1 unless

2 whether

3 if

4 therefore

Quest on D 98958010502
Status Answered
Chosen Opt on 1

Q.1
90 Select the most appropriate meaning of the given idiom.

the whole nine yards

Ans 1 an act of kindness

2 the entirety of something

3 an essential part

4 an enjoyable situation

Quest on D 98958010524
Status Answered
Chosen Opt on 2

Q.1
91 Select the most appropriate word for the given group of words.

things or people of the same kind

- Ans
- 1 contemporaries
 - 2 homogeneous
 - 3 fellows
 - 4 colleagues

Quest on D 98958010 28
Status An wered
Chosen Opt on 2

Q.1
92 In the sentence identify the segment which contains the grammatical error.

The village, with all its houses, were flooded by the river.

- Ans
- 1 by the river
 - 2 were flooded
 - 3 its houses
 - 4 with all

Quest on D 98958010490
Status Not Answered
Chosen Opt on --

Q.1
93 Select the most appropriate option to substitute the underlined segment in the given sentence. If there is no need to substitute it, Select No improvement.

It is difficult to distinguish in the two brothers.

- Ans
- 1 No improvement
 - 2 in both the two brothers.
 - 3 among the two brothers.
 - 4 between the two brothers.

Quest on D 98958010495
Status Answered
Chosen Opt on 4

Q.1
94 Select the most appropriate meaning of the given idiom.

hit the nail on the head

- Ans
- 1 to make the precisely correct point

- 2 to hit someone on the head
- 3 to assess the situation immediately
- 4 to handle a difficult situation

Quest on D 98958010523
 Status Answered
 Chosen Opt on 4

Q.1
95 Select the most appropriate word for the given group of words.

a small group of people having control of a country

- Ans
- 1 oligarchy
 - 2 plutocracy
 - 3 aristocracy
 - 4 theocracy

Quest on D 98958010529
 Status Not Answered
 Chosen Opt on --

Comprehension:

In the following passage some words have been deleted. Fill in the blanks with the help of the alternatives given. Select the most appropriate option for each number.

Wild monkeys are a problem for farmers in many areas in Japan. _____ (1) often come out of the woods to _____ (2) the tasty vegetables and fruit on farms. _____ (3) year, they cause heavy damage to crops. _____ (4) the farmers are fighting back. In 2005, a small village in Nagano _____ (5) a program to protect crops with the help of dogs. They are known as monkey dogs, and they are trained to scare monkeys away.

SubQuestion No : 19

Q.1
96 Select the most appropriate option to fill in blank No.1.

- Ans
- 1 It
 - 2 They
 - 3 Those
 - 4 Them

Quest on D 98958010506
 Status Answered
 Chosen Opt on 2

Comprehension:

In the following passage some words have been deleted. Fill in the blanks with the help of the alternatives given. Select the most appropriate option for each number.

Wild monkeys are a problem for farmers in many areas in Japan. _____
 (1) often come out of the woods to _____ (2)the tasty vegetables and
 fruit on farms. _____ (3)year, they cause heavy damage to crops.
 _____ (4) the farmers are fighting back. In 2005, a small village in
 Nagano _____ (5) a program to protect crops with the help of dogs.
 They are known as monkey dogs, and they are trained to scare monkeys
 away.

SubQuestion No : 197

Q.1
97 Select the most appropriate option to fill in blank No.2.

- Ans
- 1 get
 - 2 cut
 - 3 eat
 - 4 waste

Quest on D 98958010507
 Status Answered
 Chosen Opt on 3

Comprehension:

In the following passage some words have been deleted. Fill in the blanks with the help of the alternatives given. Select the most appropriate option for each number.

Wild monkeys are a problem for farmers in many areas in Japan. _____
 (1) often come out of the woods to _____ (2)the tasty vegetables and
 fruit on farms. _____ (3)year, they cause heavy damage to crops.
 _____ (4) the farmers are fighting back. In 2005, a small village in
 Nagano _____ (5) a program to protect crops with the help of dogs.
 They are known as monkey dogs, and they are trained to scare monkeys
 away.

SubQuestion No 198

Q.1
98 Select the most appropriate option to fill in blank No.3.

- Ans
- 1 All
 - 2 Whole
 - 3 This
 - 4 Every

Quest on D 98958010508
 Status Answered
 Chosen Opt on 4

Comprehension:

In the following passage some words have been deleted. Fill in the blanks with the help of the alternatives given. Select the most appropriate option for each number.

Wild monkeys are a problem for farmers in many areas in Japan. _____ (1) often come out of the woods to _____ (2) the tasty vegetables and fruit on farms. _____ (3) year, they cause heavy damage to crops. _____ (4) the farmers are fighting back. In 2005, a small village in Nagano _____ (5) a program to protect crops with the help of dogs. They are known as monkey dogs, and they are trained to scare monkeys away.

SubQuestion No : 199

Q.1
99 Select the most appropriate option to fill in blank No.4.

- Ans
- 1 Because
 - 2 However
 - 3 Moreover
 - 4 Though

Quest on D 98958010509
Status Answered
Chosen Opt on 2

Comprehension:

In the following passage some words have been deleted. Fill in the blanks with the help of the alternatives given. Select the most appropriate option for each number.

Wild monkeys are a problem for farmers in many areas in Japan. _____ (1) often come out of the woods to _____ (2) the tasty vegetables and fruit on farms. _____ (3) year, they cause heavy damage to crops. _____ (4) the farmers are fighting back. In 2005, a small village in Nagano _____ (5) a program to protect crops with the help of dogs. They are known as monkey dogs, and they are trained to scare monkeys away.

SubQuestion No 200

Q.2
00 Select the most appropriate option to fill in blank No.5.

- Ans
- 1 continued
 - 2 started
 - 3 embarked
 - 4 instigated

Quest on D 98958010510
Status Answered
Chosen Opt on 2



JK Chrome

JK Chrome | Employment Portal



Rated No.1 Job Application of India

Sarkari Naukri
Private Jobs
Employment News
Study Material
Notifications



JOBS



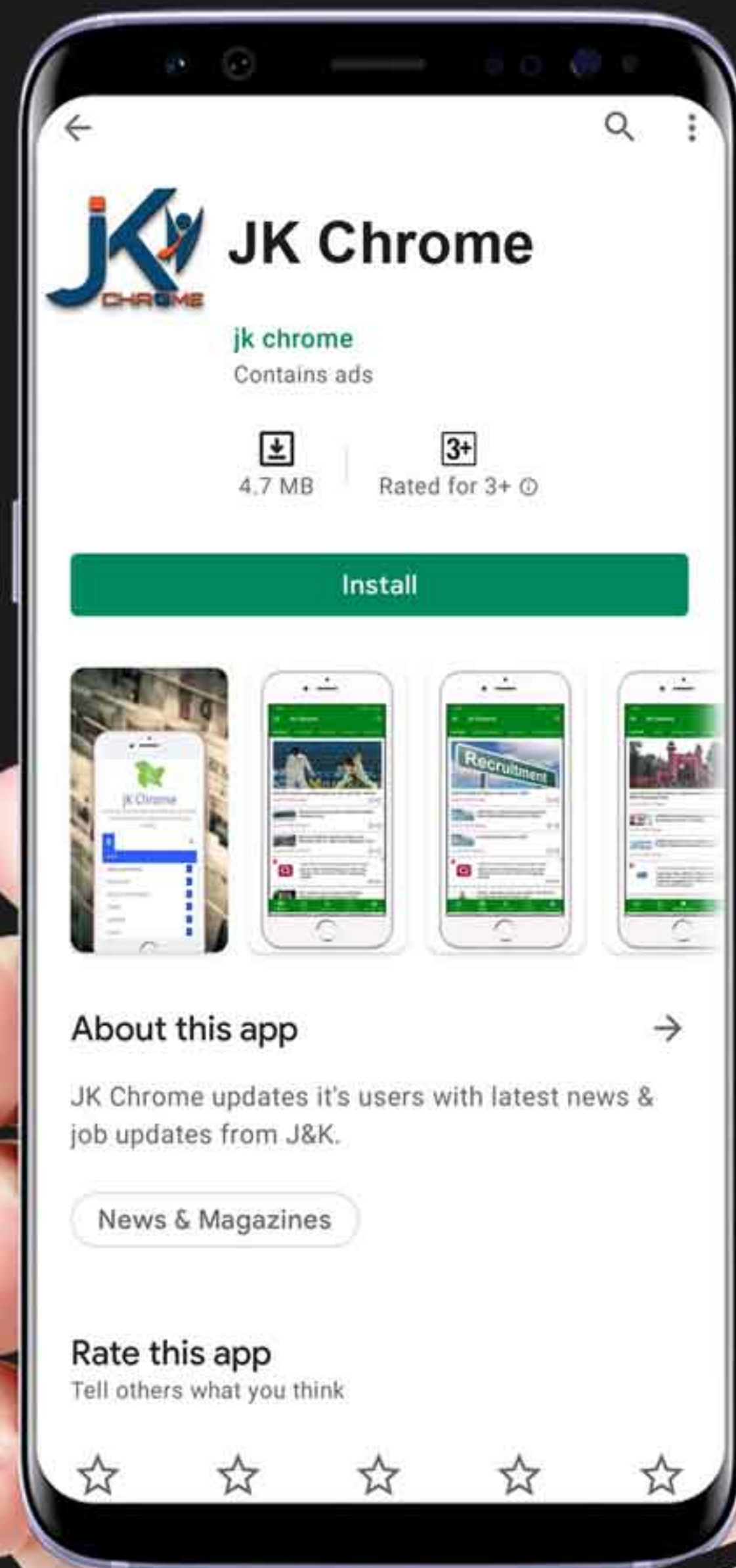
NOTIFICATIONS



G.K



STUDY MATERIAL



JK Chrome

jk chrome
Contains ads



www.jkchrome.com | Email : contact@jkchrome.com