



# JK Chrome

JK Chrome | Employment Portal



## Rated No.1 Job Application of India

Sarkari Naukri  
Private Jobs  
Employment News  
Study Material  
Notifications



JOBS



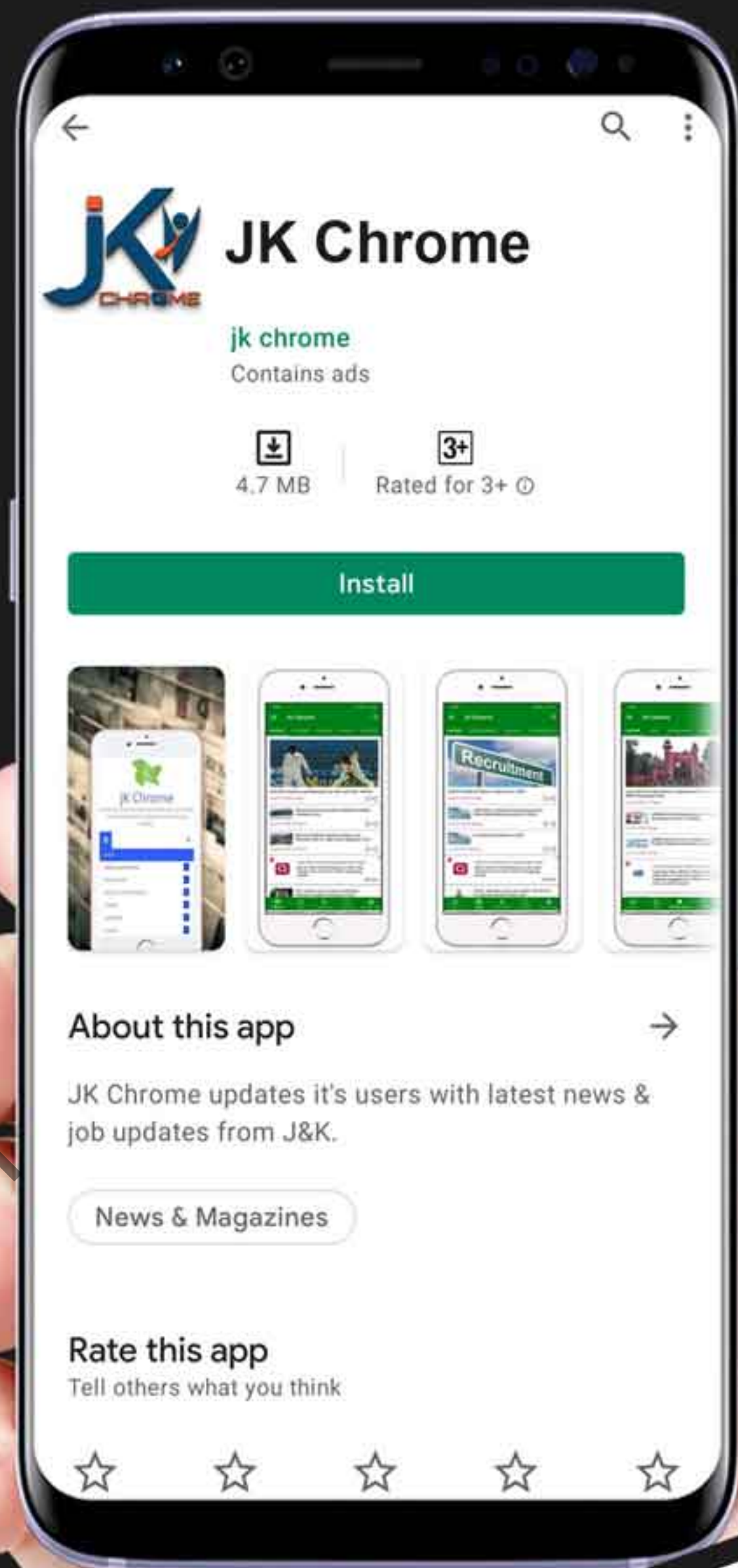
NOTIFICATIONS



G.K



STUDY MATERIAL



JK Chrome

jk chrome  
Contains ads



www.jkchrome.com | Email : contact@jkchrome.com

# Incomplete Figure

## COMPLETION OF INCOMPLETE PATTERN :

In such problems, a figure following a particular sequence or pattern is given, in which a part, usually one-fourth, is left blank. This problem figure is followed by four alternative figures. One is required to choose the one which best fits into the blank space of problem figure so as to complete the original pattern.

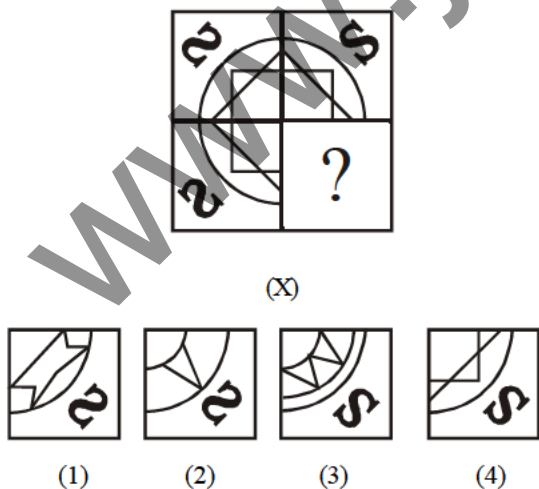
## COMPLETION OF A SQUARE

Each problem in this topic contains five different parts numbered 1, 2, 3, 4 and 5. A square is to be constructed by selecting three parts out of five parts. The steps given below can help the candidate to do the needful:

- (i) Select a piece which contains a right angle between two adjacent outer edges.
- (ii) Try to fit another piece in its vacant spaces. If it does not fit, try another piece.
- (iii) Repeat this system with different sets of such pieces till you are sure that the two pieces fit in each other.
- (iv) Find the third piece out of the remaining three pieces to get the square complete.

## ILLUSTRATION 1 :

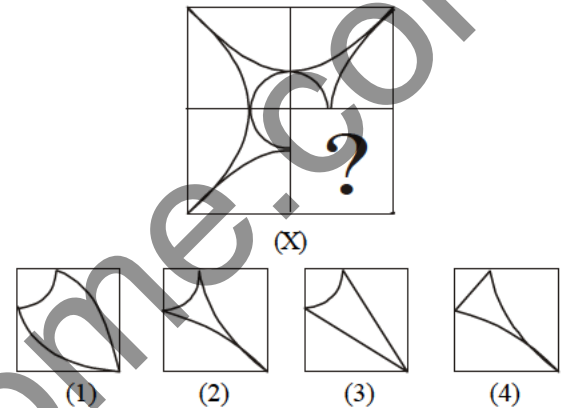
Select a figure from the four alternatives, which when placed in the blank space of figure (X) would complete the pattern.



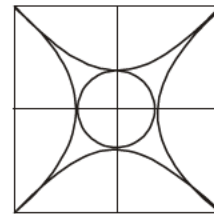
**Sol. (4)** Clearly, figure (4) will complete the pattern when placed in the blank space of figure (X) as shown below. Hence, the answer is (4).

## ILLUSTRATION 2 :

Select a figure from amongst four alternatives, which when placed in the blank space of fig. (X) would complete the pattern.

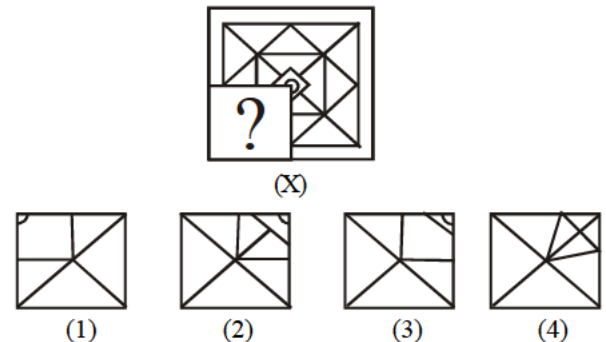


**Sol. (2)** Clearly, fig.(2) will complete the pattern when placed in the blank space of fig. (X) as shown below :




## ILLUSTRATION 3 :

Complete the pattern in fig. (X) by selecting one of the figures from the four alternatives :



**Sol.** Clearly fig. (2) when placed in the blank in fig. (X) will complete the pattern, as shown below :

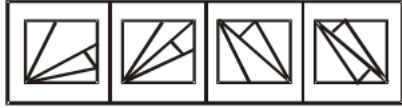


**ILLUSTRATION 4:**

Find out which of the figures (1), (2), (3) and (4) can be formed from the pieces given in figure (X)



(X)

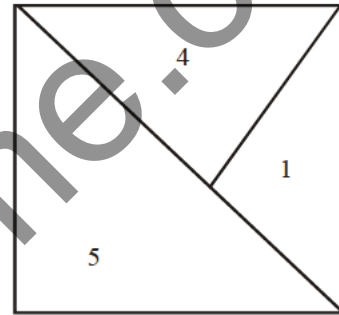
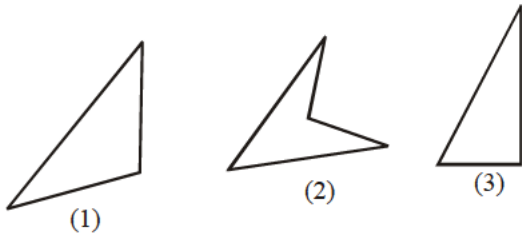


(1) (2) (3) (4)

**Sol. (3)** Clearly the pieces in the figure (X) are in the figure (3). The answer is therefore (3).

**ILLUSTRATION 5:**

Find three figures out of the following five figures 1, 2, 3, 4 and 5 which when fitted into each other would form a complete square.



- (1) 1,3,4                      (2) 1,4,5  
 (3) 1,2,5                    (4) 1,2,4


**Sol. (2)** We begin with choosing a figure having a right angle. Out of the five figures (5) seems to be having two equal sides including a right angle. Fitting along (4) with it, we have a figure as now. Looking into a vacant space, we find that out of the remaining three figures (1), (2) and (3) only fig. (1) will fit, hence the answer is (2).

**Exercise**

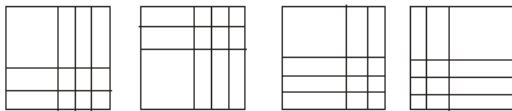
**1**

**DIRECTIONS (Qs. 1-13) :** In each of the following questions, select a figure from the four alternatives, which when placed in the space where the question mark is shown in figure (X) would complete the figure.

1.




(X)



(1) (2) (3) (4)

2.

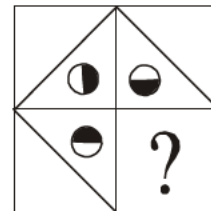


(X)

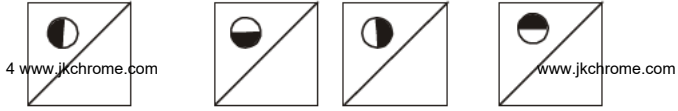


(1) (2) (3) (4)

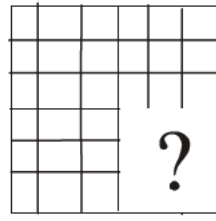
3.



(X)

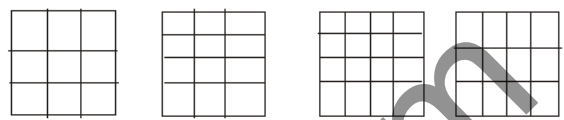


(1) (2) (3) (4)

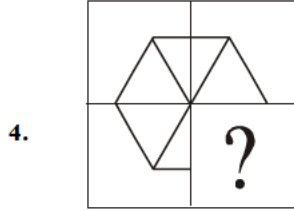


7.

(X)

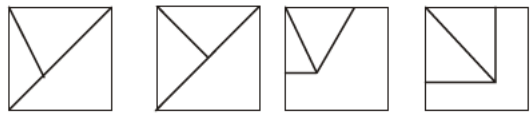


(1) (2) (3) (4)




4.

(X)

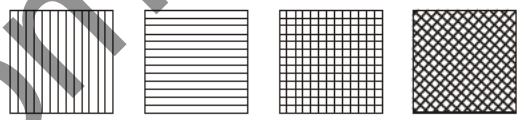


(1) (2) (3) (4)

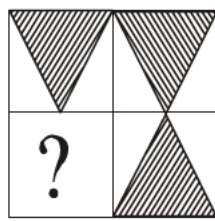


8.

(X)

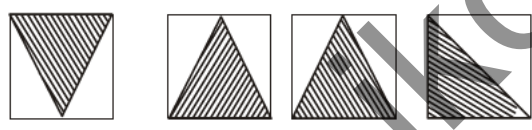


(1) (2) (3) (4)

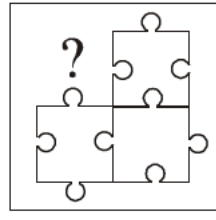


5.

(X)

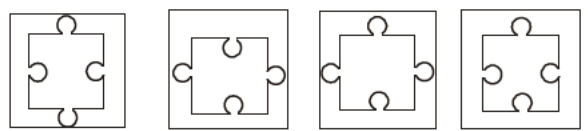


(1) (2) (3) (4)

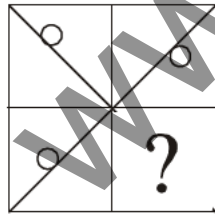


9.

(X)

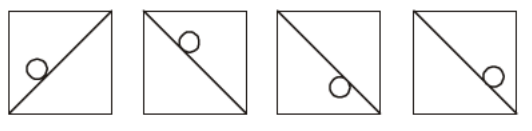


(1) (2) (3) (4)

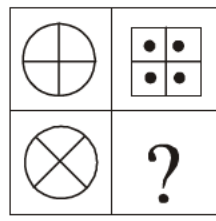


6.

(X)

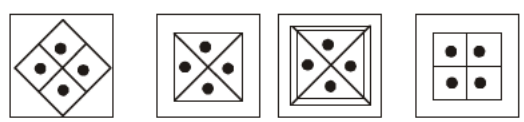


(1) (2) (3) (4)



10.

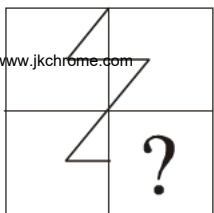
(X)



(1) (2) (3) (4)

**DIRECTIONS (Qs. 14-22) :** In each of the following questions, select a figure from amongst the four alternatives, which when placed in the blank space of fig. (X) would complete the pattern.

11.




(X)

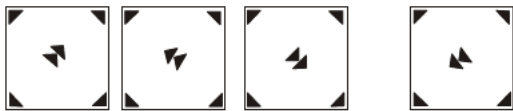


(1) (2) (3) (4)

12.

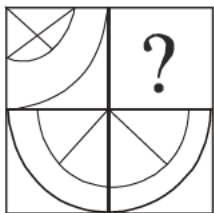


(X)

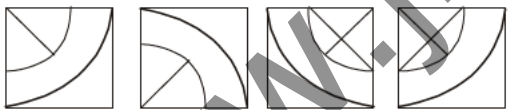


(1) (2) (3) (4)

13.

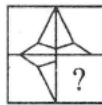


(X)



(1) (2) (3) (4)

14.

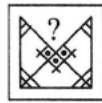


(X)

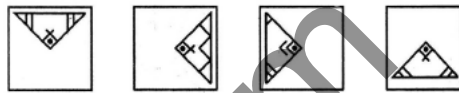


(1) (2) (3) (4)

15.

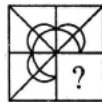


(X)



(1) (2) (3) (4)

16.

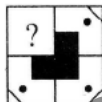


(X)



(1) (2) (3) (4)

17.

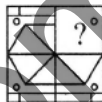


(X)



(1) (2) (3) (4)

18.



(X)



(1) (2) (3) (4)

19.

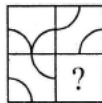


(X)



(1) (2) (3) (4)

20.

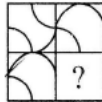


(X)



(1) (2) (3) (4)

21.

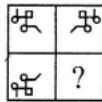


(X)



(1) (2) (3) (4)

22.



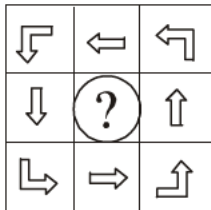
(X)



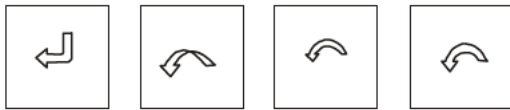
(1) (2) (3) (4)

**DIRECTIONS (Qs. 1-2) :** In each of the following questions, a figure series is given out of which the last figure is missing. Find which of the given alternatives (1), (2), (3) or (4) would complete the series.

1.

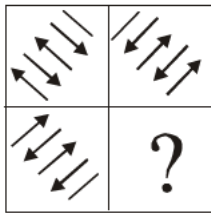


(X)

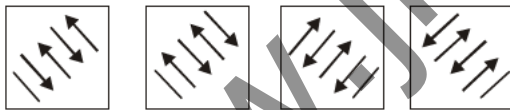


(1)      (2)      (3)      (4)

2.



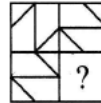
(X)



(1)      (2)      (3)      (4)

**DIRECTIONS (Qs. 3-10) :** In each of the following questions, select a figure from amongst the four alternatives, which when placed in the blank space of fig. (X) would complete the pattern.

3.



(X)



(1)



(2)

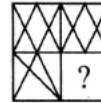


(3)



(4)

4.



(X)



(1)



(2)

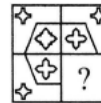


(3)



(4)

5.



(X)



(1)



(2)

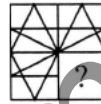


(3)



(4)

6.



(X)



(1)



(2)



(3)



(4)

7.



(X)



(1)



(2)



(3)



(4)

8.



(X)



(1)



(2)

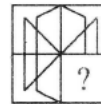


(3)



(4)

9.



(X)



(1)



(2)

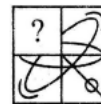


(3)



(4)

10.



(X)



(1)



(2)



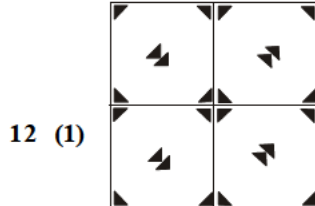
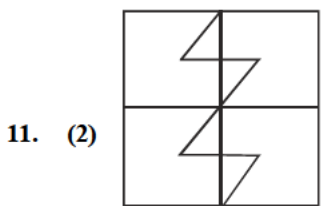
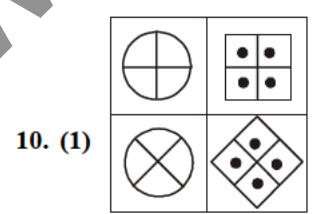
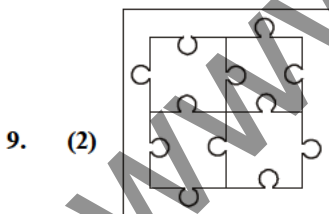
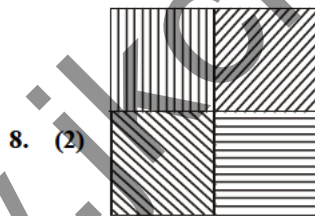
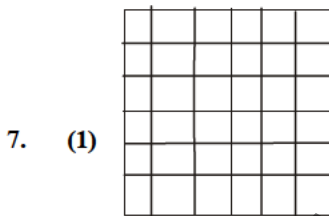
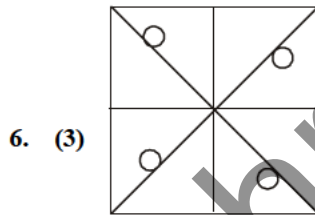
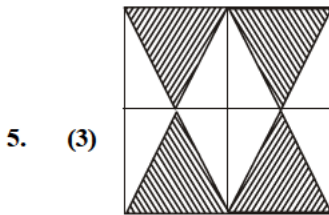
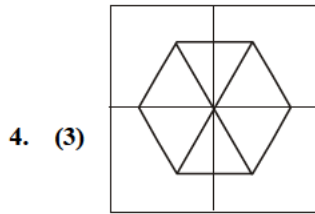
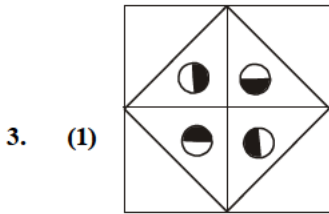
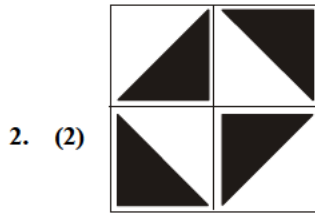
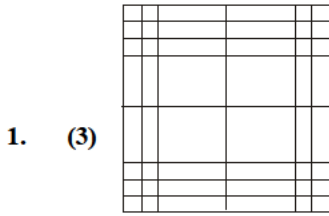
(3)



(4)

# Hints & SOLUTIONS

## Exercise 1



13. (3)



15. (4)



17. (4)



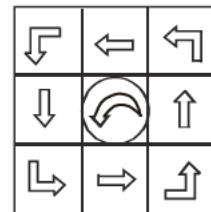
19. (3)



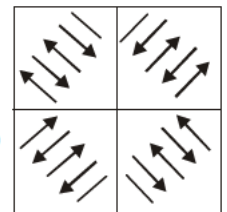
21. (2)

## Exercise 2

1. (4)



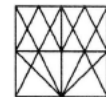
2. (1)



3. (1)



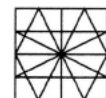
4. (3)



5. (2)



6. (3)



7. (3)



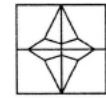
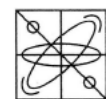
8. (3)



9. (3)



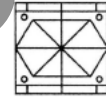
10. (1)



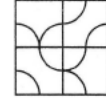
14. (4)



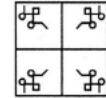
16. (3)



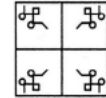
18. (2)



20. (1)



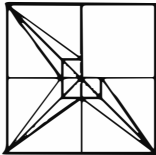
22. (2)



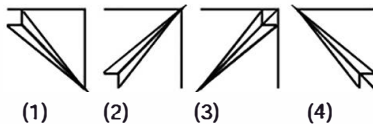
# COMPLETION OF FIGURE

**Directions (1-2) :** Which answer figure will complete the question figure?  
(SSC Combined Graduate Level Prelim Exam. 04.07.1999 (First Sitting))

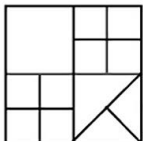
**1. Question Figure :**



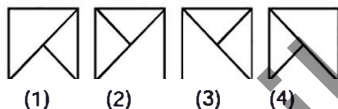
**Answer Figures :**



**2. Question Figure :**

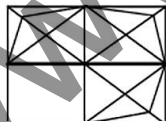


**Answer Figures :**

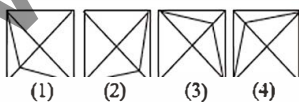


**Directions (3-4) :** Which answer figure will complete the question figure?  
(SSC Combined Graduate Level Prelim Exam. 04.07.1999 (IInd Sitting))

**3. Question Figure :**



**Answer Figures :**

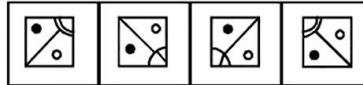


**4. Which answer figure will complete the question figure ?**

**Question Figure :**

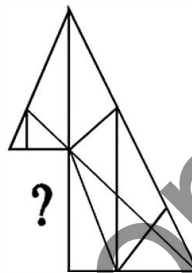


**Answer Figures :**

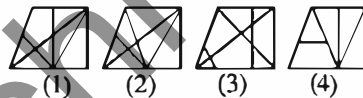


**5. Which answer figure will complete the question figure ?**

**Question Figure :**



**Answer Figures :**



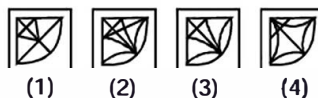
(SSC Combined Graduate Level Prelim Exam. 04.07.1999 (IInd Sitting))

**6. Select the answer figure which completes the question figure.**

**Question Figure :**



**Answer Figures :**

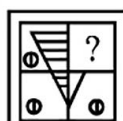


(SSC Combined Graduate Level Prelim Exam. 27.02.2002 (IInd Sitting))

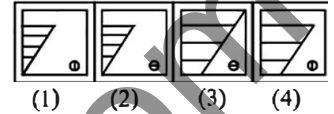
**7. Direction (7) :** Which one of the answer figures shall complete the given question figure ?

(SSC Combined Graduate Level Prelim Exam. 24.02.2002 (Middle Zone))

**Question Figure :**

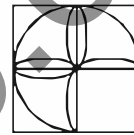


**Answer Figures :**

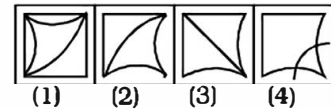


**8. Which one of the answer figures shall complete the given question figure ?**

**Question Figure :**



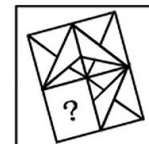
**Answer Figures :**



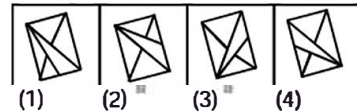
(SSC CPO Sub-Inspector Exam.12.01.2003)

**9. Which one of the answer figures shall complete the given question figure ?**

**Question Figure :**



**Answer Figures :**



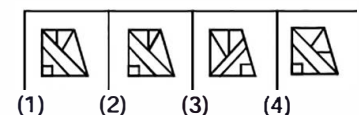
(SSC Combined Graduate Level Prelim Exam. 11.05.2003 (First Sitting))

**10. Which one of the answer figures shall complete the given question figure ?**

**Question Figure :**



**Answer Figure :**



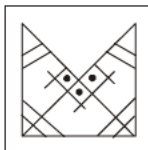
(SSC Combined Graduate Level Prelim Exam.11.05.2003 (Second Sitting))



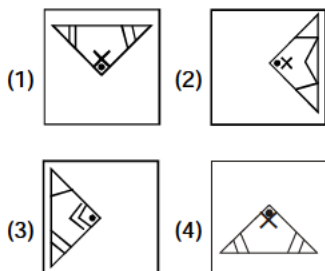
**COMPLETION OF FIGURE**

11. Which answer figure will complete the question figure ?

**Question Figure :**



**Answer Figures :**

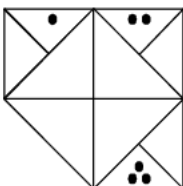


(SSC Combined Graduate Level Prelim Exam. 08.02.2004 (Second Sitting))

**Direction (12) :** In question which answer figure will complete the question figure ?

(SSC CPO Sub-Inspector Exam. 26.05.2005)

12. **Question Figure :**



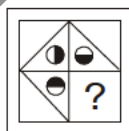
**Answer Figures :**



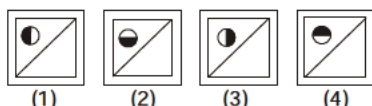
**Directions (13-14) :** Which answer figure will complete the given figure ?

(SSC Statistical Investigators Grade-IV Exam. 31.07.2005)

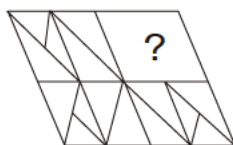
13. **Given Figure :**



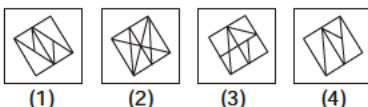
**Answer Figures :**



14. **Given Figure :**

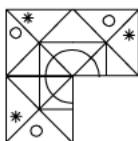


**Answer Figures :**

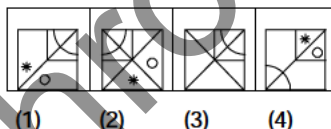


15. Which one of the answer figures shall complete the given question figure ?

**Question Figure :**



**Answer Figures :**



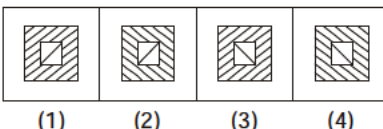
(SSC Combined Graduate Level Prelim Exam. 13.11.2005 (First Sitting))

16. Which one of the answer figures shall complete the given question figure ?

**Question Figure :**



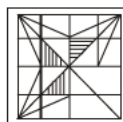
**Answer Figures :**



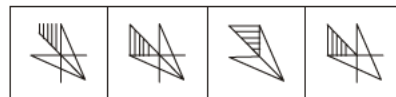
(SSC Combined Graduate Level Prelim Exam. 13.11.2005 (Second Sitting))

17. Which answer figure is the part of the following question figure?

**Question Figure :**



**Answer Figures :**

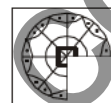


(1) (2) (3) (4)

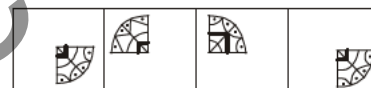
(SSC CPO Sub-Inspector Exam. 03.09.2006)

18. Which one of the answer figures shall complete the given question figure ?

**Question Figure :**



**Answer Figures :**

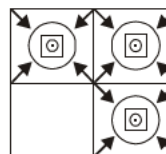


(1) (2) (3) (4)

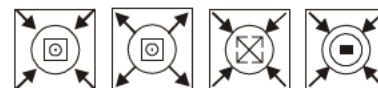
(SSC Combined Graduate Level Prelim Exam. 04.02.2007 (First Sitting))

19. Which one of the answer figures shall complete the given question figure ?

**Question figure :**



**Answer figures :**



(1) (2) (3) (4)

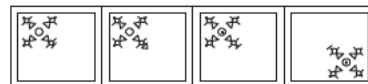
(SSC Combined Graduate Level Prelim Exam. 04.02.2007 (Second Sitting))

20. Which one of the answer figures shall complete the given question figure ?

**Question Figure :**



**Answer Figures :**

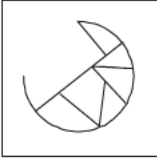


(1) (2) (3) (4)

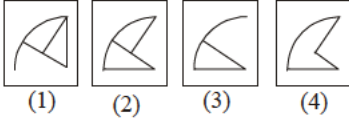
(SSC CPO Sub-Inspector Exam. 16.12.2007)

**COMPLETION OF FIGURE**

21. Which Answer figure will complete the Question figure?  
Question Figure :



Answer Figures :

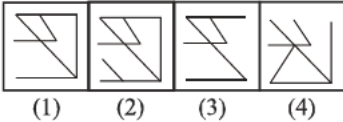


(SSC Combined Graduate Level Prelim Exam. 27.07.2008 (First Sitting))

22. Which answer figure will complete the question figure?  
Question Figure :



Answer Figures :



(SSC Combined Graduate Level Prelim Exam. 27.07.2008 (Second Sitting))

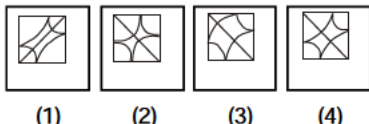
Direction (23) : In the following question, which answer figures will complete the pattern in the question figure?

(SSC CPO Sub-Inspector Exam. 09.11.2008)

23. Question Figure :



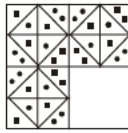
Answer Figures :



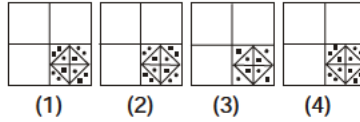
Direction (24) : In the following question, which one of the answer figures shall complete the given question figure?

(SSC CPO Sub-Inspector Exam. 06.09.2009)

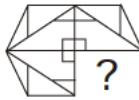
24. Problem Figure :



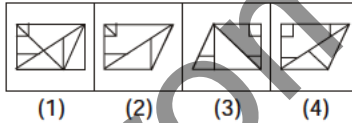
Answer Figures :



25. Which answer figure will complete the pattern in the question figure?  
Question Figure :



Answer Figures :

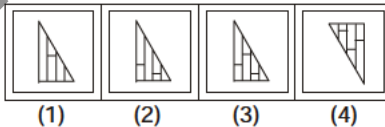


(SSC SAS Exam. 26.06.2010 (Paper-I))

26. Which answer figure will complete the question figure?  
Question figure :

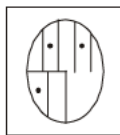


Answer figures :

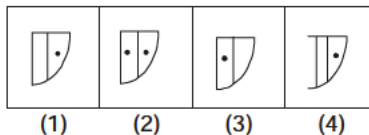


(SSC CISF ASI Exam. 29.08.2010 (Paper-I))

27. Which answer figure will complete the question figure?  
Question Figure :

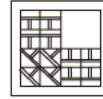


Answer Figures :

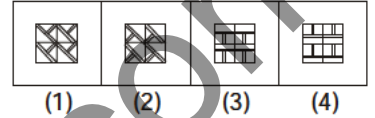


(SSC CPO Sub-Inspector Exam. 12.12.2010 (Paper-I))

28. Which answer figure will complete the pattern in the question figure?  
Question Figure :



Answer Figures :



(SSC CPO (SI, ASI & Intelligence Officer) Exam. 28.08.2011 (Paper-I))

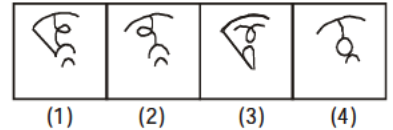
Directions (29-31) : In each of the following questions which one of the answer figures shall complete the given question figure.

(SSC Combined Matric Level (PRE) Exam. 24.10.1999 (1st Sitting))

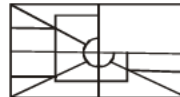
29. Question Figure :



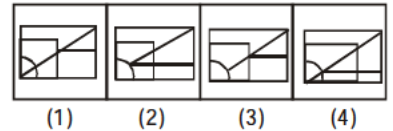
Answer Figures :



30. Question Figure :

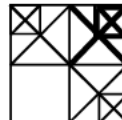


Answer Figures :

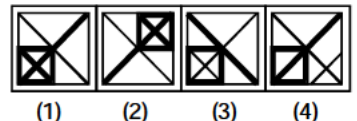


(SSC Combined Matric Level (PRE) Exam. 24.10.1999 (1st Sitting))

31. Question Figure :



Answer Figures :



(SSC Combined Matric Level (PRE) Exam. 24.10.1999 (1st Sitting))

**COMPLETION OF FIGURE**

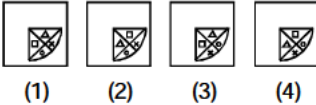
**Directions (32-34) :** In questions which one of the answer figures shall complete the given question figure ?

(SSC Combined Matric Level (PRE) Exam. 24.10.1999 (IInd Sitting))

**32. Question Figure :**



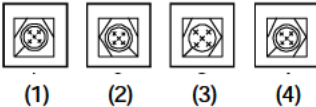
**Answer Figures :**



**33. Question Figure :**



**Answer Figures :**



**34. Question Figure :**



**Answer Figures :**



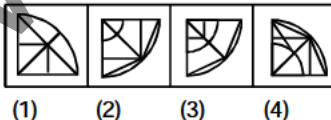
**Directions (35-36) :** Which one of the answer figures shall complete the given question figure?

(SSC Combined Matric Level (PRE) Exam. 21.05.2000 (1st Sitting) (East Zone))

**35. Question Figure :**



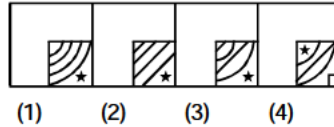
**Answer Figures :**



**36. Question Figure :**



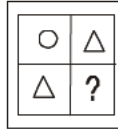
**Answer Figures :**



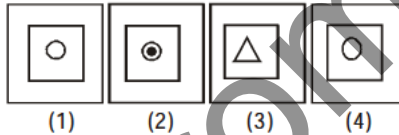
**Directions (37-38) :** In the following questions, which one of the answer figures shall complete the given question figure?

(SSC Combined Matric Level (PRE) Exam. 21.05.2000 (1st Sitting) (Raipur, Madhya Pradesh))

**37. Question Figure :**



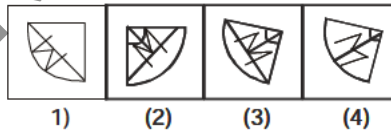
**Answer Figures :**



**38. Question Figure :**



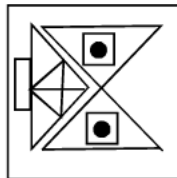
**Answer Figures :**



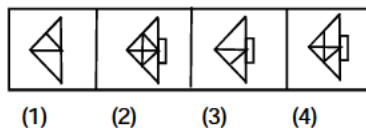
**Directions (39-40) :** Which one of the answer figures shall complete the given question figure ?

(SSC Combined Matric Level (PRE) Exam. 21.05.2000 (1st Sitting) (Middle Zone))

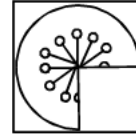
**39. Question Figure :**



**Answer Figures :**



**40. Question Figure :**



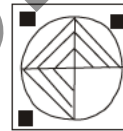
**Answer Figures :**



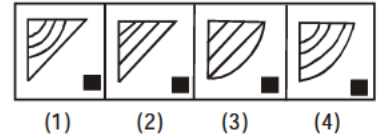
**Directions (41-42) :** Which answer figure will complete the question figure?

(SSC Combined Matric Level (PRE) Exam. 21.05.2000 (IInd Sitting) (Middle Zone, Allahabad))

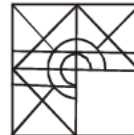
**41. Question Figure :**



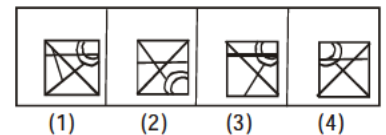
**Answer Figures :**



**42. Question Figure :**



**Answer Figures :**

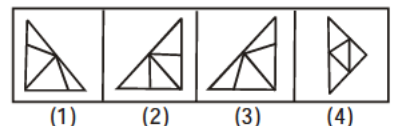


**43. Which one of the answer figures shall complete the given question figure?**

**Question figure :**



**Answer figures :**



(SSC Combined Matric Level (PRE) Exam. 13.05.2001 (1st Sitting))

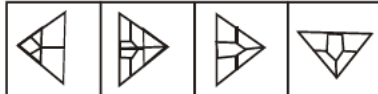
**COMPLETION OF FIGURE**

44. In the given question, a part of the figure is missing. Select one of the response figures which exactly fits into the missing part of the question figure.

**Question Figure :**



**Answer Figures :**



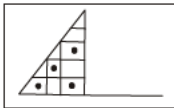
(1) (2) (3) (4)

(SSC Combined Matric Level (PRE)  
Exam. 13.05.2001 (IInd Sitting))

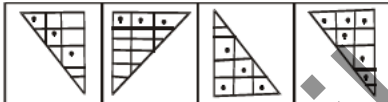
**Directions (45-46) :** In each of following questions which one of the answer figures shall complete the given question figure?

(SSC Combined Matric Level (PRE)  
Exam. 13.05.2001 (IInd Sitting))

45. **Question Figure :**



**Answer Figures :**

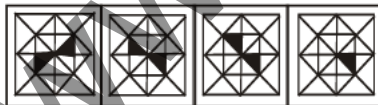


(1) (2) (3) (4)

46. **Question Figure :**



**Answer Figures :**




(1) (2) (3) (4)

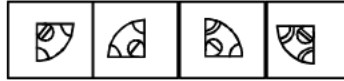
**Directions (47-49) :** Which one of the answer figures shall complete the given question figure?

(SSC Combined Matric Level (PRE) Exam.  
27.05.2001 (IInd Sitting)(East Zone))

47. **Question Figure :**



**Answer Figures :**

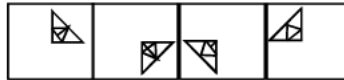


(1) (2) (3) (4)

48. **Question Figure :**

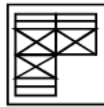


**Answer Figures :**



(1) (2) (3) (4)

49. **Question Figure :**



**Answer Figures :**

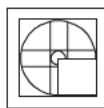


(1) (2) (3) (4)

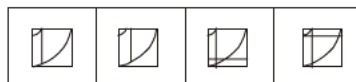
**Direction (50) :** Which one of the answer figures shall complete the given question figure?

(SSC Combined Matric Level (PRE)  
Exam. 05.05.2002 (Ist Sitting)  
(Eastern Zone, Guwahati))

50. **Question Figure :**

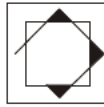


**Answer Figures :**

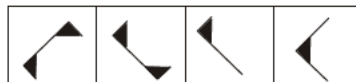


(1) (2) (3) (4)

51. **Question figure :**



**Answer Figures :**



(1) (2) (3) (4)

(SSC Combined Matric Level (PRE)  
Exam. 05.05.2002 (Ist Sitting)  
(Eastern Zone, Guwahati))

**Directions (52-53) :** Which one of the answer figures shall complete the given question figure?

(SSC Combined Matric Level (PRE)  
Exam. 05.05.2002 (IInd Sitting)  
(Eastern Zone, Guwahati))

52. **Question Figure :**



**Answer Figures :**

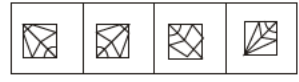


(1) (2) (3) (4)

53. **Question Figure :**



**Answer Figures :**



(1) (2) (3) (4)

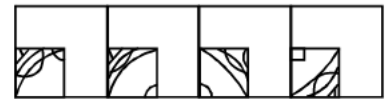
**Directions (54-55) :** In each of the following questions which one of the answer figures shall complete the given question figure?

(SSC Combined Matric Level (PRE)  
Exam. 05.05.2002 (Ist Sitting)  
(North Zone, Delhi))

54. **Question Figure :**

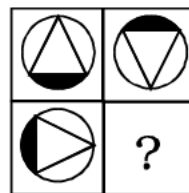


**Answer Figures :**

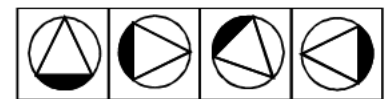


(1) (2) (3) (4)

55. **Question Figure :**



**Answer Figures :**



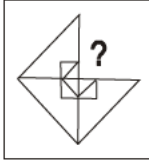
(1) (2) (3) (4)

**COMPLETION OF FIGURE**

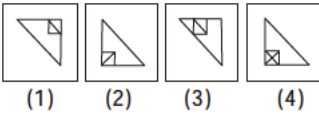
**Directions (56-58) :** Which one of the answer figures shall complete the given question figure ?

SSC Combined Matric Level (Pre)  
Exam. 05.05.2002 (IInd Sitting)  
(North Zone Delhi)

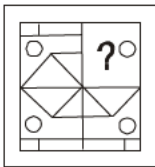
**56. Question Figure :**



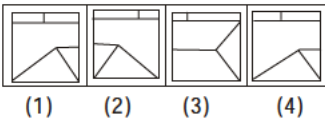
**Answer Figures :**



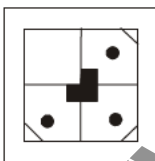
**57. Question Figure :**



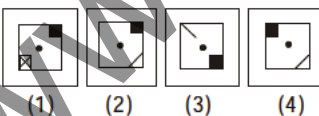
**Answer Figures :**



**58. Question Figure :**



**Answer Figures :**



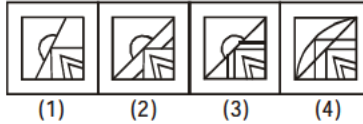
**Directions (59-60) :** Which one of the Answer Figures shall complete the given question figure?

SSC Combined Matric Level (Pre)  
Exam. 12.05.2002 (1st Sitting)

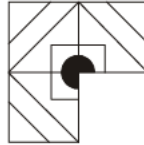
**59. Question Figure :**



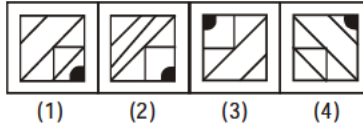
**Answer Figures :**



**60. Question Figure :**



**Answer Figures :**



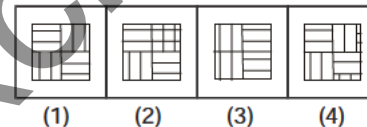
**Directions (61-62) :** In each of the following questions which one of the answer figures shall complete.

SSC Combined Matric Level (Pre)  
Exam. 12.05.2002 (IInd Sitting)

**61. Question Figure :**



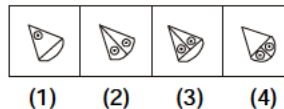
**Answer Figures :**



**62. Question Figure :**



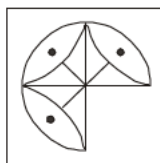
**Answer Figures :**



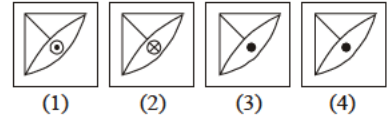
**Direction (63) :** Which one of the answer figures shall complete the question figure?

SSC Combined Matric Level (Pre) Exam.  
30.07.2006 (1st Sitting) (East Zone)

**63. Question Figure :**



**Answer Figures :**

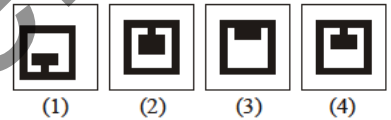


**64. The metal block given below when fitted with one of the frames (1), (2), (3) or (4) turns itself into a perfect square block. Select the right one.**

**Question Figure :**



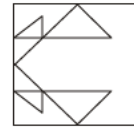
**Answer Figures :**



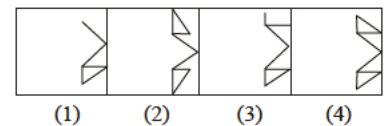
SSC Combined Matric Level (Pre) Exam.  
30.07.2006 (1st Sitting) (East Zone)

**65. Which one of the answer figures shall complete the given question figure?**

**Question Figure :**



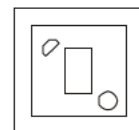
**Answer Figures :**



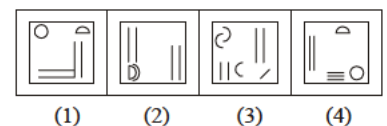
SSC Combined Matric Level (Pre) Exam.  
30.07.2006 (IInd Sitting) (Central Zone)

**66. In the following question, which of the alternatives (1), (2), (3) and (4) will exactly make up the key figure given in the question?**

**Question Figure :**



**Answer Figures :**



SSC Combined Matric Level (Pre) Exam.  
30.07.2006 (IInd Sitting) (Central Zone)

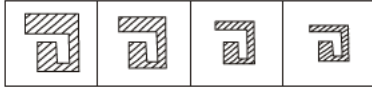
COMPLETION OF FIGURE

67. The figure given below has a fitting complement figure in the four alternatives that makes it a perfect square. Which one is it?

Question Figure :



Answer Figures :



(1) (2) (3) (4)

SSC Combined Matric Level (Pre) Exam. 30.07.2006 (IInd Sitting) (Central Zone)

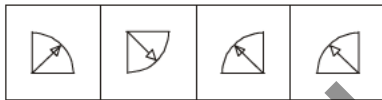
Directions (68-71) : Which answer figure will complete the question figure.

SSC Combined Matric Level (Pre) Exam. 30.03.2008 (1st Sitting)

68. Question Figure :



Answer Figures :



(1) (2) (3) (4)

69. Question Figure :



Answer Figures :

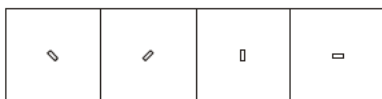


(1) (2) (3) (4)

70. Question Figure :



Answer Figures :

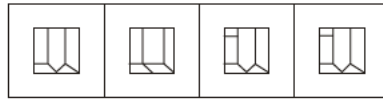


(1) (2) (3) (4)

71. Question Figure :



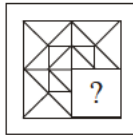
Answer Figures :



(1) (2) (3) (4)

72. Which answer figure will complete the pattern in the question figure ?

Question Figure :



Answer Figures :

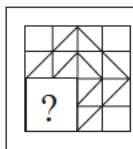


(1) (2) (3) (4)

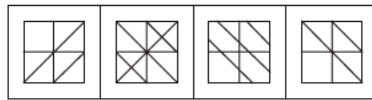
SSC Data Entry Operator Exam. 31.08.2008

Direction (73) : Which answer figure will complete the pattern in the question figure ?

73. Question Figure :



Answer Figures :



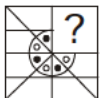
(1) (2) (3) (4)

SSC Data Entry Operator Exam. 02.08.2009

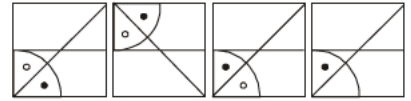
74. Direction (74) : Which answer figure will complete the pattern in the question figure?

SSC Stenographer (Grade'C & D') Exam. 26.09.2010

Question Figure :



Answer Figures :

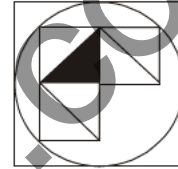


(1) (2) (3) (4)


Direction (75) : Which answer figure will complete the question figure?

(SSC Higher Secondary Level Data Entry Operator & LDC Exam. 27.11.2010)

75. Question Figure :



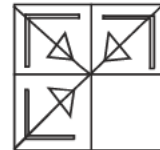
Answer Figures :



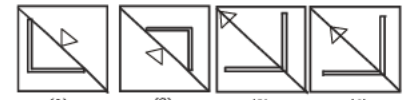
(1) (2) (3) (4)

76. Which answer figure will complete the question figure ?

Question Figure :



Answer figures :

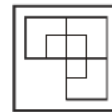


(1) (2) (3) (4)

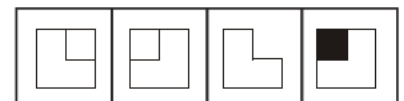
(SSC Higher Secondary Level Data Entry Operator & LDC Exam. 28.11.2010 (1st sitting))

Directions : Which answer figure will complete the question figure ?

77. Question Figure :



Answer Figures :



(1) (2) (3) (4)

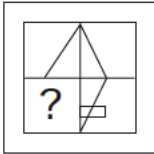
(SSC Higher Secondary Level Data Entry Operator & LDC Exam. 28.11.2010 (IInd sitting))

**COMPLETION OF FIGURE**

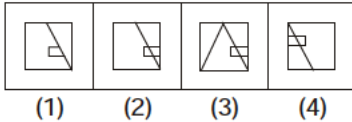
**Directions (78) :** Which answer figure will complete the question figure?

(SSC Multi-Tasking (Non-Technical) Staff Exam. 20.02.2011)

**78. Question Figure :**



**Answer Figures :**



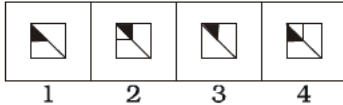
**Directions (79) :** Which answer figure will complete the question figure ?

(SSC Multi-Tasking (Non-Technical) Staff Exam. 27.02.2011)

**79. Question Figure :**



**Answer Figures :**

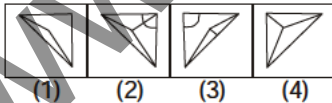


**80. Which one of the following figures will complete the given question figure ?**

**Question Figure :**



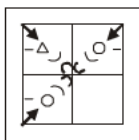
**Answer Figures :**



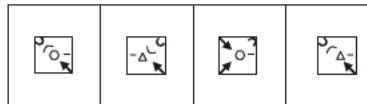
(SSC Stenographer (Grade 'C' & 'D') Exam. 16.10.2011)

**81. Which answer figure will complete the pattern in the question figure?**

**Question Figure :**



**Answer Figures :**

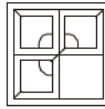


(1) (2) (3) (4)

SSC (10+2) Level Data Entry Operator & LDC Exam. 04.12.2011 (1st Sitting (North Zone))

**82. Which answer figure will complete the pattern in the question figure ?**

**Question Figure :**



**Answer figures :**

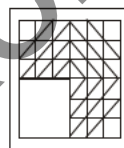


(1) (2) (3) (4)

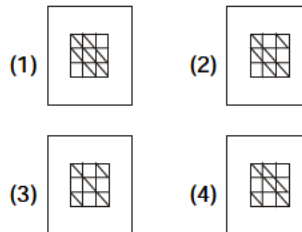
SSC (10+2) Level Data Entry Operator & LDC Exam. 04.12.2011 (IInd Sitting (North Zone))

**83. Which answer figure will complete the pattern in the question figure?**

**Question Figure :**



**Answer Figures :**



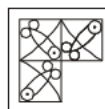
(1) (2)

(3) (4)

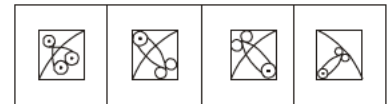
SSC (10+2) Level Data Entry Operator & LDC Exam. 04.12.2011 (1st Sitting (East Zone))

**84. Which answer figure will complete the pattern in the question figure ?**

**Question Figure :**



**Answer Figures :**



(1) (2) (3) (4)

SSC (10+2) Level Data Entry Operator & LDC Exam. 04.12.2011 (IInd Sitting (East Zone))

**85. Which answer figure will complete the pattern in the question figure?**

**Question Figure :**



**Answer Figures :**



(1) (2) (3) (4)

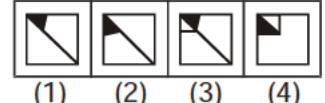
SSC (10+2) Level Data Entry Operator & LDC Exam. 11.12.2011 (1st Sitting (Delhi Zone))

**86. Which answer figure will complete the pattern in the question figure ?**

**Question Figure :**



**Answer Figures :**



(1) (2) (3) (4)

SSC (10+2) Level Data Entry Operator & LDC Exam. 11.12.2011 (IInd Sitting (Delhi Zone))

**87. Which answer figure will complete the pattern in the question figure ?**

**Question Figure :**



**Answer Figures :**



(1) (2) (3) (4)

SSC (10+2) Level Data Entry Operator & LDC Exam. 11.12.2011 (1st Sitting (East Zone))

**COMPLETION OF FIGURE**

88. Which answer figure will complete the pattern in the question figure ?

**Question Figure :**



**Answer Figures :**

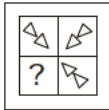


(1) (2) (3) (4)

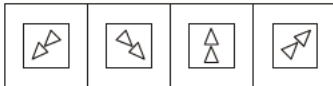
SSC (10+2) Level Data Entry Operator & LDC Exam. 11.12.2011 (IInd Sitting (East Zone))

89. Which answer figure will complete the pattern in the question figure ?

**Question Figure :**



**Answer Figures :**



(1) (2) (3) (4)

SSC Constable (GD) & Rifleman (GD) Exam. 22.04.1912 (1st Sitting)

90. Which answer figure will complete the pattern in the question figure?

**Question Figure :**



**Answer Figures :**

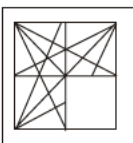


(1) (2) (3) (4)

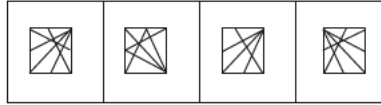
SSC Constable (GD) & Rifleman (GD) Exam. 22.04.1912 (IInd Sitting)

91. Which answer figure will complete the pattern in the question figure ?

**Question Figure :**



**Answer Figures :**



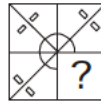
(1) (2) (3) (4)

(SSC Level Data Entry Operator & LDC Exam.21.10.2012 (1st Sitting))

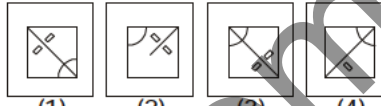
**Directions (92-93) :** In each of the following questions, which answer figure will complete the pattern in the question figure ?

(SSC Level Data Entry Operator & LDC Exam.21.10.2012 (IInd Sitting))

92. **Question Figure :**



**Answer Figures :**

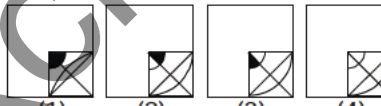


(1) (2) (3) (4)

93. **Question Figure :**



**Answer Figures :**




(1) (2) (3) (4)

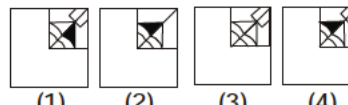
**Directions (95-96) :** In each of the following questions, which answer figure will complete the pattern in the question figure ?

(SSC Level Data Entry Operator & LDC Exam.21.10.2012 (IInd Sitting))

94. **Question Figure :**

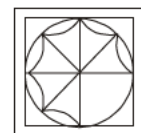


**Answer Figures :**

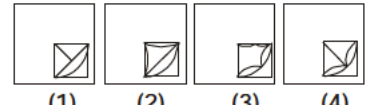


(1) (2) (3) (4)

95. **Question Figure :**



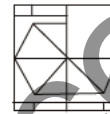
**Answer Figures :**



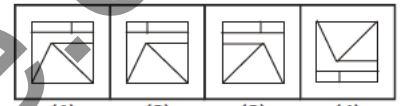
(1) (2) (3) (4)

96. Which answer figure will complete the pattern in the question figure?

**Question Figure :**



**Answer Figures :**



(1) (2) (3) (4)

(SSC Level Data Entry Operator & LDC Exam.28.10.2012 (1st Sitting))

97. Which answer figure will complete the pattern in the question figure ?

**Question Figure :**



**Answer Figures :**



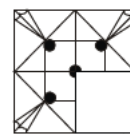
(1) (2) (3) (4)

(SSC Level Data Entry Operator & LDC Exam.28.10.2012 (1st Sitting))

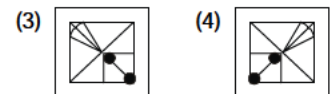
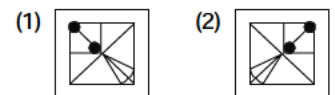
**Directions (98-99) :** In each of the following questions, which answer figure will complete the pattern in the question figure ?

(SSC Level Data Entry Operator & LDC Exam.04.11.2012 (IInd Sitting))

98. **Question Figure :**



**Answer Figures :**

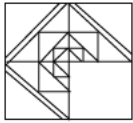


(3) (4)

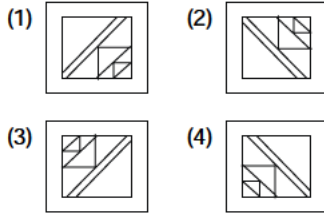


**COMPLETION OF FIGURE**

99. Question Figure :



Answer Figures :

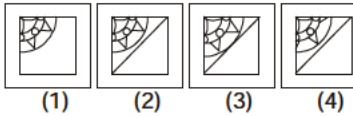


100. Which answer figure will complete the pattern in the question figure ?

Question Figure :



Answer Figures :



(SSC Graduate Level Tier-I Exam. 11.11.2012 (1st Sitting))

101. Which answer figure will complete the pattern in the question figure ?

Question Figure :



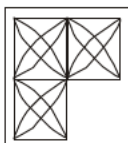
Answer Figure :



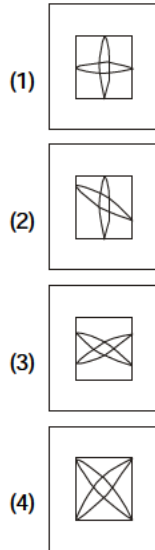
(FCI Assistant Grade-II Exam. Held on : 22.01.2012 Paper-I)

102. Which answer figure will complete the pattern in the question figure ?

Question Figure :



Answer Figures :



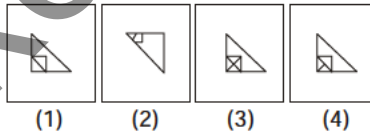
(FCI Assistant Grade-III Exam. Held on : 25.02.2012 (Paper-I) North Zone (1st Sitting))

103. Which answer figure will complete the pattern in the question figure ?

Question Figure :

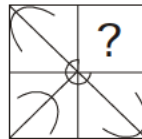


Answer Figure :

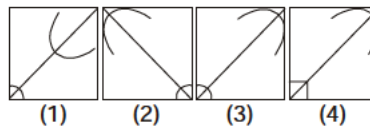


(FCI Assistant Grade-III Exam. Held on : 05.02.2012 (Paper-I) East Zone (IInd Sitting))

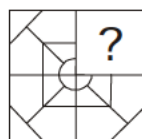
104. Question Figure :



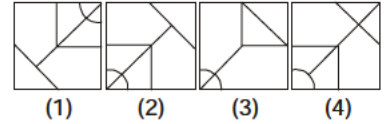
Answer Figures :



105. Question Figure :

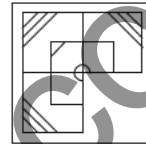


Answer Figures :

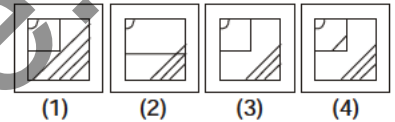


106. Which answer figure will complete the pattern in the question figure?

Question Figure :



Answer Figures :



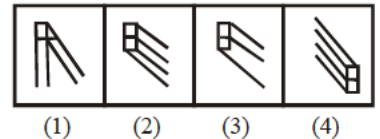
(SSC Multi-Tasking Staff Exam. 10.03.2013, 1st Sitting : Patna)

107. Which answer figure will complete the pattern in the question figure ?

Question Figure :

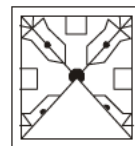


Answer Figures :

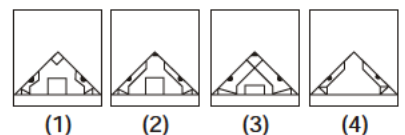


(SSC Multi-Tasking Staff Exam. 10.03.2013)

108. Question Figure :



Answer Figures :



(SSC Multi-Tasking Staff Exam. 17.03.2013, Kolkata Region)

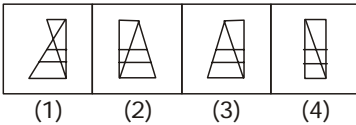
**COMPLETION OF FIGURE**

109. Which answer figure will complete the pattern in the question figure ?

**Question Figure :**



**Answer Figures :**

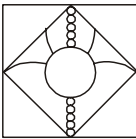


(SSC Multi-Tasking Staff Exam. 17.03.2013, 1st Sitting)

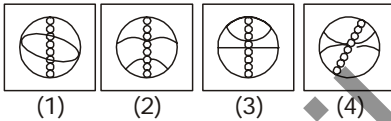
**Directions (110-111) :** In the following questions, which answer figure will complete the pattern in the question figure ?

(SSC Graduate Level Tier-I Exam. 21.04.2013, 1st Sitting)

110. **Question Figure :**



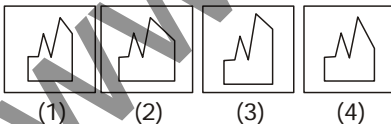
**Answer Figures :**



111. **Question Figure :**



**Answer Figures :**



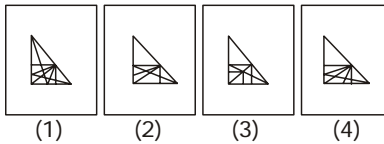
**Directions (112-114) :** In each of the following questions, which answer figure will complete the question figure?

(SSC Graduate Level Tier-I Exam. 21.04.2013, 1st Sitting)

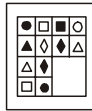
112. **Question Figure :**



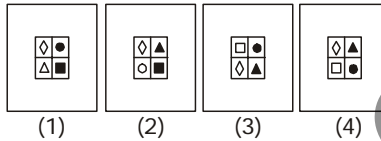
**Answer Figures :**



113. **Question Figure :**



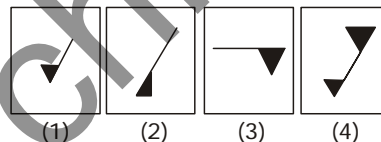
**Answer Figures :**



114. **Question Figure :**



**Answer Figures :**



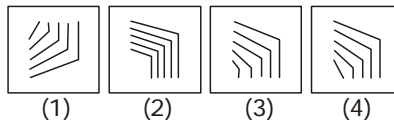
**Directions (115-116) :** In the following questions, which answer figure will complete the pattern in the question figure ?

(SSC Graduate Level Tier-I Exam. 21.04.2013, 1st Sitting)


115. **Question Figure :**



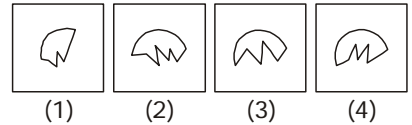
**Answer Figures :**



116. **Question Figure :**



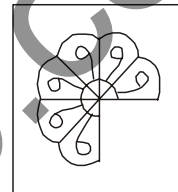
**Answer Figures :**



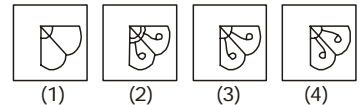
**Directions (117-118) :** In each of the following questions, which answer figure will complete the pattern in the question figure?

(SSC Graduate Level Tier-I Exam. 21.04.2013, 1st Sitting)


117. **Question Figure :**



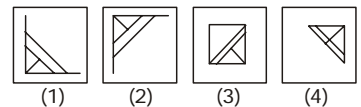
**Answer Figures :**



118. **Question Figure :**

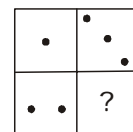


**Answer Figures :**

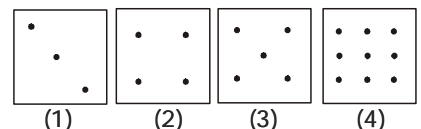


119. Which one of the answer figures shall complete the given question figure ?

**Question Figure :**



**Answer Figures :**

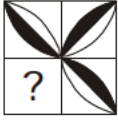


(SSC Constable (GD) Exam. 12.05.2013)

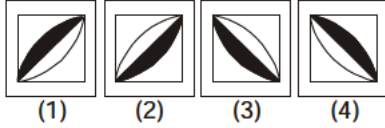
**COMPLETION OF FIGURE**

120. Which answer figure will complete the pattern in the question figure :

**Question Figure :**



**Answer Figures :**



(SSC Constable (GD)

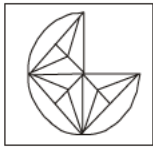
Exam. 12.05.2013 1st Sitting)

**Directions (121-122) :** In the following questions, which answer figure will complete the pattern in the question figure.

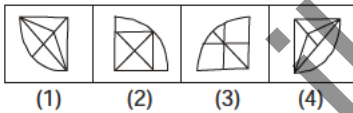
(SSC Graduate Level Tier-I Exam. 19.05.2013, 1st Sitting)

121. Find out which answer figures will exactly make up the question figure ?

**Question Figure :**



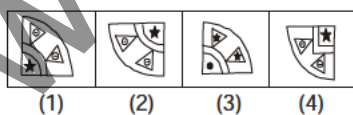
**Answer Figures :**



122. **Question Figure :**



**Answer Figures :**

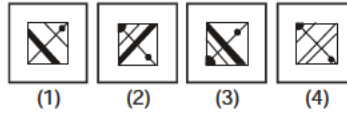


123. Which one of the answer figures shall complete the given question figure ?

**Question Figure :**



**Answer Figures :**

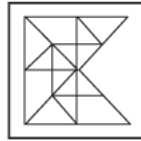


(SSC Graduate Level Tier-I Exam. 19.05.2013, IInd Sitting)

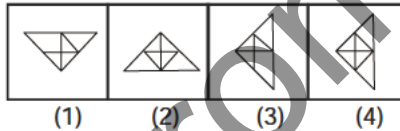
**Directions (124-125) :** In each of the following questions, which answer figure will complete the pattern in the question figure ?

(SSC Graduate Level Tier-I Exam. 19.05.2013, 1st Sitting)

124. **Question Figure :**



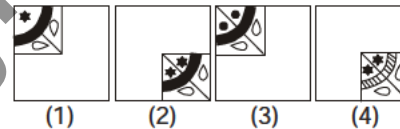
**Answer Figures :**



125. **Question Figure :**



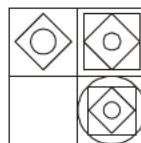
**Answer Figures :**



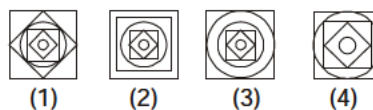
**Directions (126-127) :** In each of the following questions, which answer figure will complete the pattern in the question figure?

(SSC CAPFs SI & CISF ASI Exam. 23.06.2013)


126. **Question Figure :**



**Answer Figures :**



127. **Question Figure :**



**Answer Figures :**



**Directions (128-129) :** In the following questions, which answer figure will complete the pattern in the question figure ?

(SSC Cabinet Secretariat RO (ECO), DFO (T) & DFO (GD) Tier-I Exam. 23.06.2013)

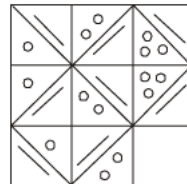
128. **Question Figure :**



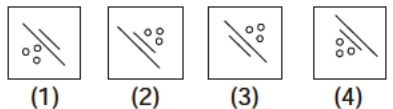
**Answer Figures :**



129. **Question Figure :**

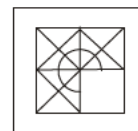


**Answer Figures :**

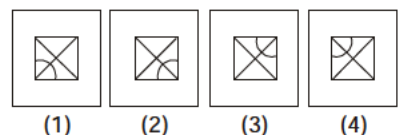


130. Which answer figure will complete the pattern in the question figure ?

**Question Figure :**



**Answer Figures :**

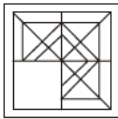


(SSC Multi-Tasking (Non-Tech.) Staff Exam. 16.02.2014)

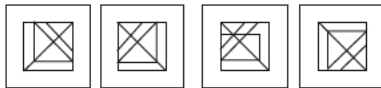
**COMPLETION OF FIGURE**

131. Which answer figure will complete the pattern in the question figure ?

**Question Figure :**



**Answer Figures :**

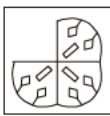


(1) (2) (3) (4)

(SSC Multi-Tasking Staff (Patna) Exam. 16.02.2014)

132. Which answer figure will complete the pattern in the question figure ?

**Question Figure :**



**Answer Figures :**




(1) (2) (3) (4)

(SSC Multi-Tasking (Non-Tech.) Staff Exam. 23.02.2014, IInd Sitting)

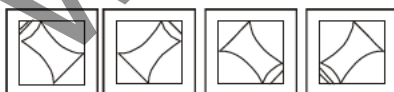
**Directions (133 - 134) :** In each of the following questions, which answer figure will complete the pattern in the question figure ?

(SSC CGL Tier-I Re-Exam-2013, 27.04.2014)

133. **Question Figure :**

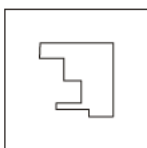


**Answer Figures :**



(1) (2) (3) (4)

134. **Question Figure :**



**Answer Figures :**

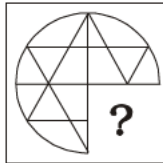


(1) (2) (3) (4)

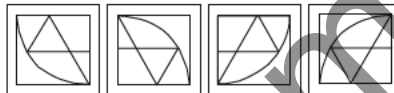
**Directions (135-136) :** In each of the following questions, which answer figure will complete the pattern in the question figure ?

(SSC CGL Tier-I Re-Exam-2013, 27.04.2014)

135. **Question Figure :**

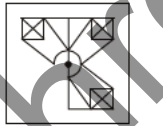


**Answer Figures :**

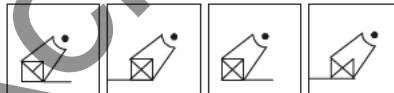


(1) (2) (3) (4)

136. **Question Figure :**



**Answer Figures :**



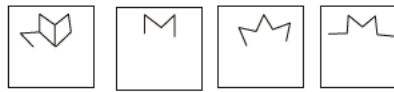
(1) (2) (3) (4)

137. Which answer figure will complete the pattern in the question figure ?

**Question Figure :**



**Answer Figures :**




(1) (2) (3) (4)

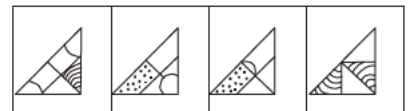
(SSC CAPFs SI, CISF ASI & Delhi Police SI Exam. 22.06.2014)

138. Which answer figure will complete the pattern in the question figure ?

**Question Figure :**



**Answer Figures :**



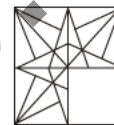
(1) (2) (3) (4)

(SSC CAPFs SI, CISF ASI & Delhi Police SI Exam. 22.06.2014)

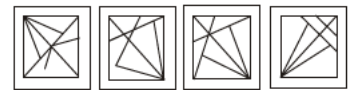
**Directions (139-140) :** In each of the following questions, which answer figure will complete the pattern in the question figure ?

(SSC GL Tier-I Re-Exam. (2013) 20.07.2014, 1st Sitting)

139. **Question Figure :**

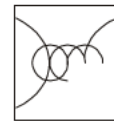


**Answer Figures :**

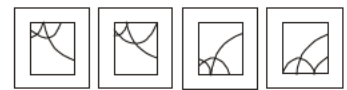


(1) (2) (3) (4)

140. **Question Figure :**



**Answer Figures :**



(1) (2) (3) (4)

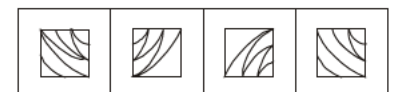
**Directions (141-142) :** In each of the following questions, which answer figure will complete the pattern in the question figure ?

(SSC GL Tier-I Re-Exam. (2013) 20.07.2014, IInd Sitting)

141. **Question Figure :**




**Answer Figures :**



(1) (2) (3) (4)

**COMPLETION OF FIGURE**

**142. Questions Figure :**



**Answer Figures :**

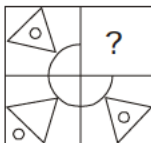


(1) (2) (3) (4)

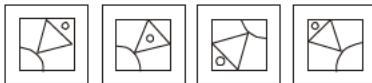
**Directions (143-144) :** In each of the following questions, which answer figure will complete the pattern in the question figure ?

(SSC GL Tier-I Exam. 19.10.2014, 1st Sitting)

**143. Question Figure :**

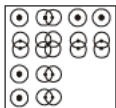


**Answer Figures :**



(1) (2) (3) (4)

**144. Question Figure :**



**Answer Figures :**

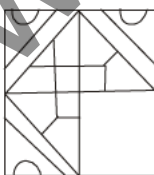


(1) (2) (3) (4)

**Directions (145-146) :** In each of the following questions, which answer figure will complete the pattern in the question figure ?

(SSC GL Tier-I Exam. 19.10.2014)

**145. Question Figure :**

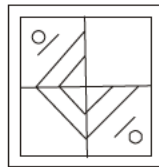


**Answer Figures :**

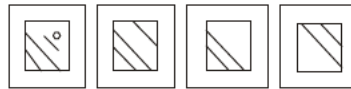


(1) (2) (3) (4)

**146. Question Figure :**



**Answer Figures :**

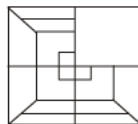


(1) (2) (3) (4)

**Directions (147-148) :** In each of the following questions, which answer figure will complete the pattern in the question figure ?

(SSC GL Tier-I Exam. 26.10.2014)

**147. Question Figure :**

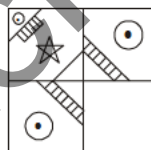


**Answer Figures :**

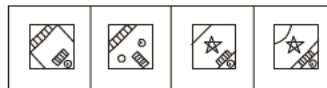


(1) (2) (3) (4)

**148. Question Figure :**



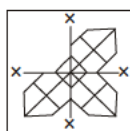
**Answer Figures :**



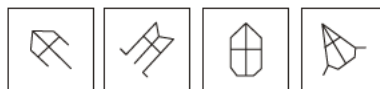
(1) (2) (3) (4)

**149. Which answer figure will complete the question figure ?**

**Question Figure :**



**Answer Figures :**

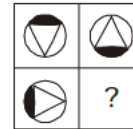


(1) (2) (3) (4)

(SSC CHSL (10+2) DEO & LDC Exam. 02.11.2014, Patna Region : 1st Sitting)

**150. Which answer figure will complete the question figure ?**

**Question Figure :**



**Answer Figures :**

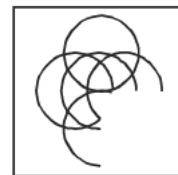


(1) (2) (3) (4)

(SSC CHSL (10+2) DEO & LDC Exam. 09.11.2014)

**151. Which answer figure will complete the pattern in the questions figure ?**

**Question Figure :**



**Answer Figures :**

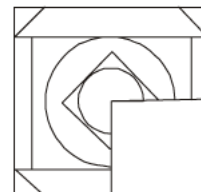


(1) (2) (3) (4)

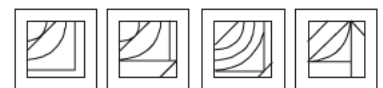
(SSC CHSL (10+2) DEO & LDC Exam. 16.11.2014, Patna Region : 1st Sitting)

**152. Which answer figure will complete the pattern in the question figure ?**

**Question Figure :**



**Answer Figures :**



(1) (2) (3) (4)

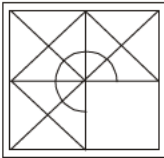
(SSC CHSL (10+2) DEO & LDC Exam. 16.11.2014)

**COMPLETION OF FIGURE**

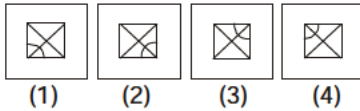
**Directions (153-154):** In each of the following questions, which answer figure will complete the pattern in the question figure?

(SSC CGL Tier-I Exam. 19.10.2014  
TF No. 022 MH 3)

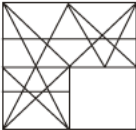
**153. Question Figure :**



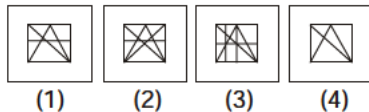
**Answer Figures :**



**154. Question Figure :**

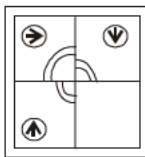


**Answer Figures :**

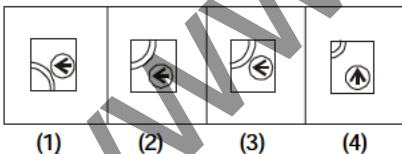


**155. Which answer figure will complete the pattern in the question figure?**

**Question Figure :**



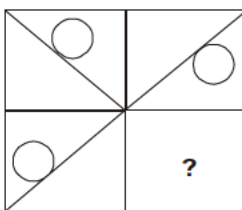
**Answer Figures :**



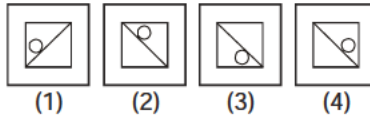
(SSC CHSL (10+2) DEO & LDC Exam.  
16.11.2014, 1st Sitting TF No. 333 LO 2)

**156. Identify the answer figure that completes the pattern in the question figure.**

**Question Figure :**



**Answer Figures :**

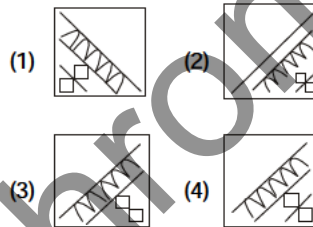
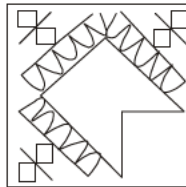


(SSC CHSL (10+2) DEO & LDC Exam.  
16.11.2014, 1st Sitting TF No. 545 QP 6)

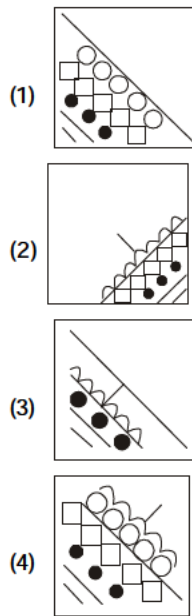
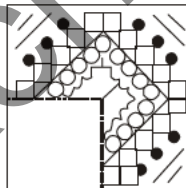
**Directions (157-158):** In each of the following questions, which answer figure will complete the pattern in the question figure?

(SSC CAPFs SI, CISF ASI & Delhi Police SI  
Exam, 21.06.2015 (1st Sitting)  
TF No. 8037731)

**157.**



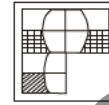
**158.**



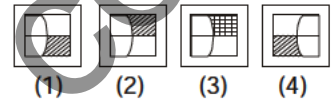
**Directions (159-160):** In the following two questions, which answer figure will complete the pattern in the question figure?

(SSC CGL Tier-I Exam, 09.08.2015  
(1st Sitting) TF No. 1443088)

**159. Question Figure :**



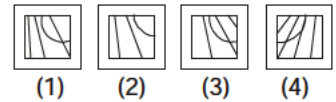
**Answer Figures :**



**160. Question Figure :**



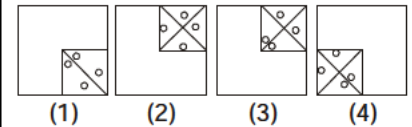
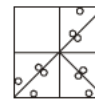
**Answer Figures :**



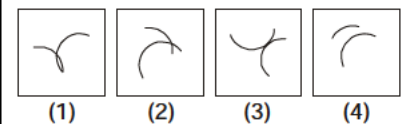
**Directions (161-162):** In the following questions, which answer figure will complete the pattern in the question figure?

(SSC CGL Tier-I Exam, 09.08.2015  
(1st Sitting) TF No. 4239378)

**161.**



**162.**




**Directions (163-164):** In each of the following questions, which answer figure will complete the pattern in the question figure?

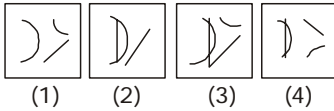
(SSC CGL Tier-I Exam, 16.08.2015  
(1st Sitting) TF No. 3196279)

**COMPLETION OF FIGURE**

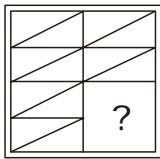
163. Question Figure :



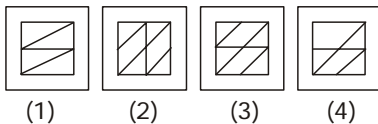
Answer Figures :



164. Question Figure :



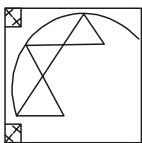
Answer Figures :



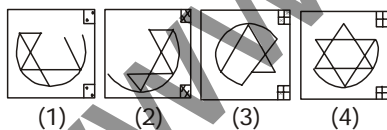
Directions (165-166) : In each of the following questions, which answer figure will complete the pattern in the question figure?

(SSC CGL Tier-I Exam, 16.08.2015  
IIInd Sitting) TF No. 2176783)

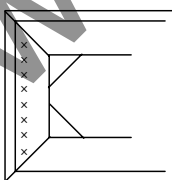
165. Question Figure :



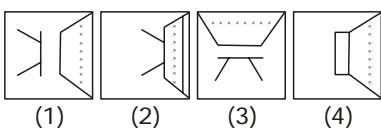
Answer Figure



166. Question Figure :



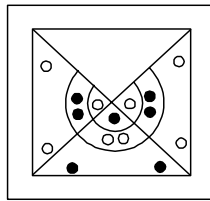
Answer Figures :



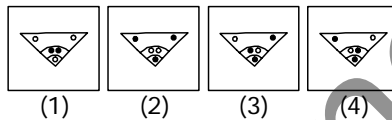
Directions (167-168) : In the following questions, which answer figure will complete the pattern in the question figure?

(SSC CGL Tier-I Re-Exam, 30.08.2015)

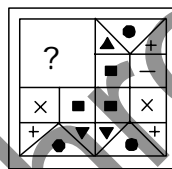
167. Question Figure :



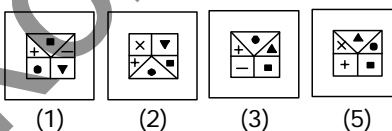
Answer Figures :



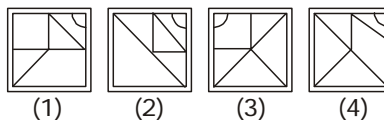
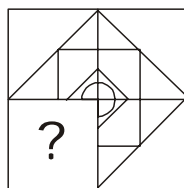
168. Question Figure :



Answer Figures :



169. Which answer figure will complete the pattern in the question figure ?

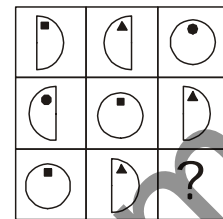


(SSC Constable (GD)

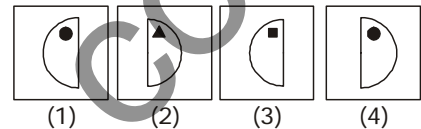
Exam, 04.10.2015, 1st Sitting)

170. Which answer figure will complete the pattern in the question figure ?

Question Figure :




Answer Figures :



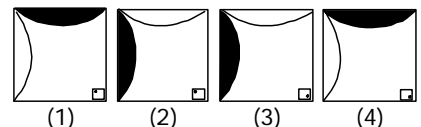
(SSC Constable (GD)  
Exam, 04.10.2015, IIInd Sitting)

171. Which answer figure will complete the pattern in the question figure?

Question Figure :



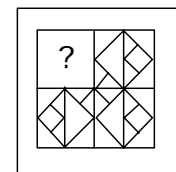
Answer Figures :



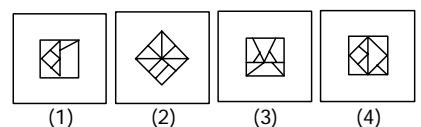
(SSC CHSL (10+2) LDC, DEO & PA/SA  
Exam, 01.11.2015, IIInd Sitting)

172. Which answer figure will complete the pattern in the question figure ?

Question Figure



Answer Figures



(SSC CHSL (10+2) LDC, DEO & PA/SA  
Exam, 15.11.2015(1st Sitting)  
TF No. 6636838)

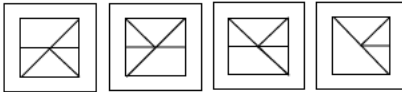
**COMPLETION OF FIGURE**

173. Which answer figure will complete the pattern in the question figure?

**Question Figure**



**Answer Figures**

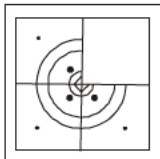


(1) (2) (3) (4)

(SSC CHSL (10+2) LDC, DEO & PA/SA Exam, 15.11.2015 (IInd Sitting) TF No. 7203752)

174. Which answer figure will complete the pattern in the question figure?

**Question Figure**



**Answer Figures**



(1) (2) (3) (4)

(SSC CHSL (10+2) LDC, DEO & PA/SA Exam, 06.12.2015 (Ist Sitting) TF No. 1375232)

175. Which answer figure will complete the pattern in the question figure?

**Question Figure**



**Answer Figures**

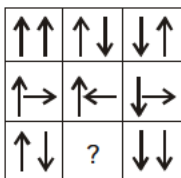


(1) (2) (3) (4)

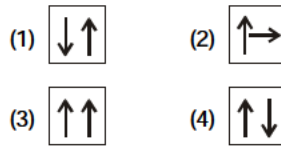
(SSC CHSL (10+2) LDC, DEO & PA/SA Exam, 06.12.2015 (IInd Sitting) TF No. 3441135)

176. Which answer figure will complete the pattern in the question figure?

**Question Figure**



**Answer Figures :**




(SSC CHSL (10+2) LDC, DEO & PA/SA Exam, 20.12.2015 (Ist Sitting) TF No. 9692918)

**Directions (177-178) :** In each of the following questions, which answer figure will complete the pattern in the question figure ?

(SSC CAPFs (CPO) SI & ASI, Delhi Police Exam. 20.03.2016) (IInd Sitting)

177. **Question Figure**

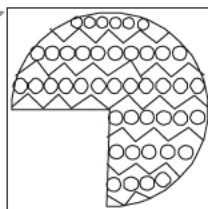


**Answer Figures**

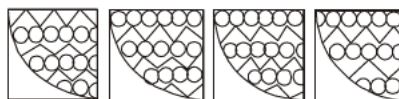


(1) (2) (3) (4)

178. **Question Figure**



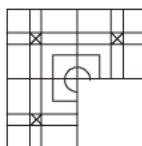
**Answer Figures**



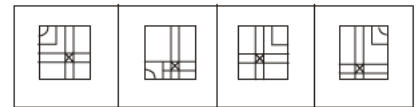
(1) (2) (3) (4)

179. Which answer figure will complete the pattern in the question figure?

**Question Figure :**



**Answer Figures :**

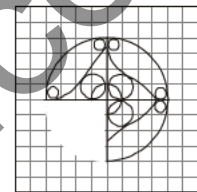


(1) (2) (3) (4)

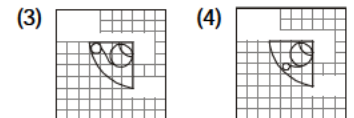
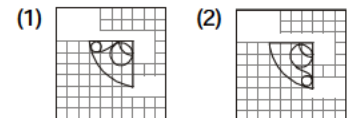
(SSC (10+2) Stenographer Grade 'C' & 'D' Exam. 31.07.2016)

180. Which answer figure will complete the pattern in the question figure?

**Question Figure :**



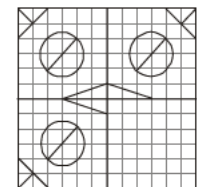
**Answer Figures :**



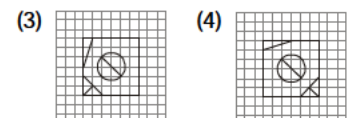
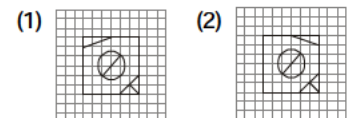
(SSC CGL Tier-I (CBE) Exam.10.09.2016)

181. Which answer figure will complete the pattern in the question figure?

**Question Figure :**



**Answer Figures :**



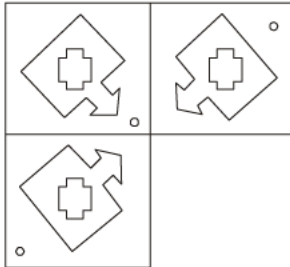
(SSC CGL Tier-I (CBE) Exam.11.09.2016) (Ist Sitting)



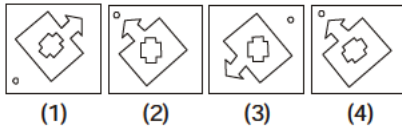
**COMPLETION OF FIGURE**

**182.** Identify the figure that completes the pattern.

**Question Figure :**



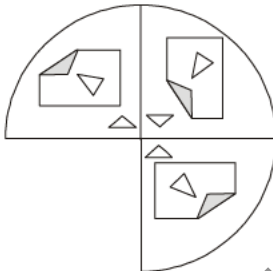
**Answer Figures :**



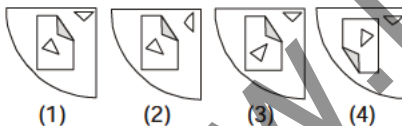
(1) (2) (3) (4)  
(SSC CPO SI, ASI Online Exam.05.06.2016) (IInd Sitting)

**183.** Identify the figure that completes the pattern.

**Question Figure :**



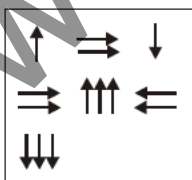
**Answer Figures :**



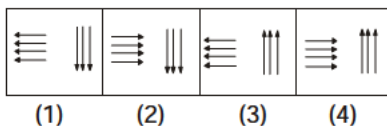
(1) (2) (3) (4)  
(SSC CPO SI, ASI Online Exam.05.06.2016) (IInd Sitting)

**184.** In the following question, which answer figure will complete the pattern in the question figure ?

**Question Figure**

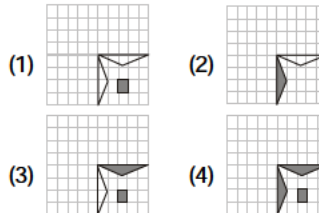
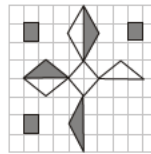


**Answer Figures**



(1) (2) (3) (4)  
(SSC CPO Exam. 06.06.2016) (1st Sitting)

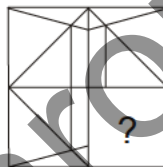
**185.** Which answer figure will complete the pattern in the question figure?



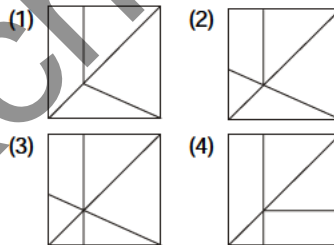
(SSC CHSL (10+2) Tier-I (CBE) Exam. 08.09.2016) (1st Sitting)

**186.** Which answer figure will complete the pattern in the question figure?

**Question Figure :**



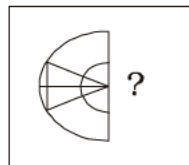
**Answer Figures :**



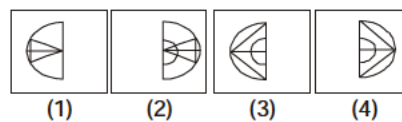
(SSC CGL Tier-I (CBE) Exam. 09.09.2016) (1st Sitting)

**187.** Find the answer figure which will complete the pattern in the question figure.

**Question Figure :**



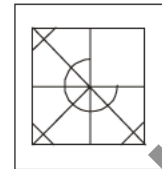
**Answer Figures :**



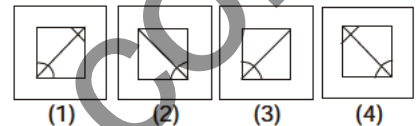
(SSC CAPFs (CPO) SI & ASI, Delhi Police Exam. 05.06.2016) (1st Sitting)

**188.** Find the answer figure which will complete the pattern in the question figure.

**Question Figure :**

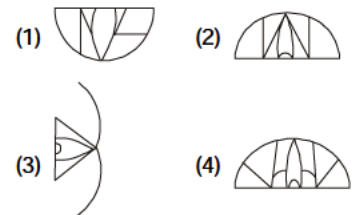
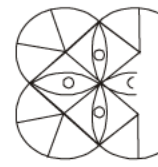


**Answer Figures :**



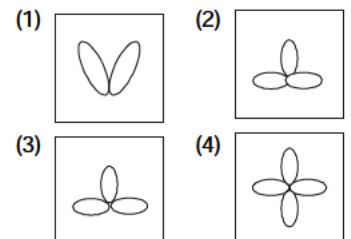
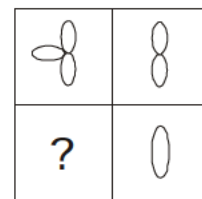
(SSC CAPFs (CPO) SI & ASI, Delhi Police Exam. 05.06.2016) (1st Sitting)

**189.** In the following question, which answer figure will complete the pattern in the question figure ?



(SSC CPO SI & ASI, Online Exam. 06.06.2016) (IInd Sitting)

**190.** In the following question, which answer figure will complete the pattern in the question figure ?

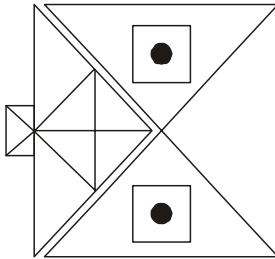


(SSC CPO SI & ASI, Online Exam. 06.06.2016) (IInd Sitting)

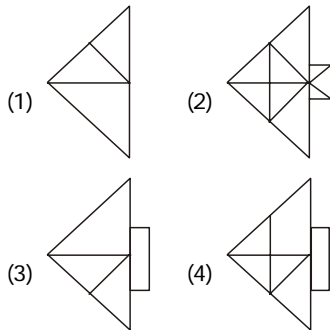
**COMPLETION OF FIGURE**

191. Which answer figure will complete the pattern in the question figure?

**Question Figure :**



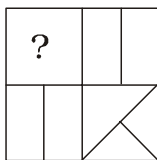
**Answer Figures :**



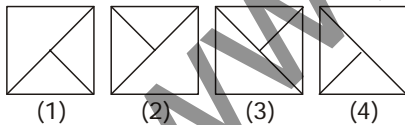
(SSC CGL Tier-I (CBE)  
Exam. 27.08.2016) (1st Sitting)

192. Identify the figure that completes the pattern :

**Question Figure :**

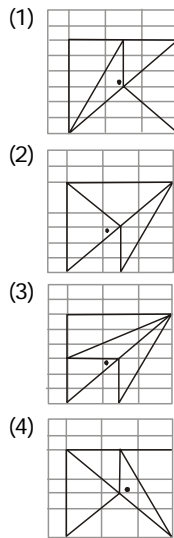
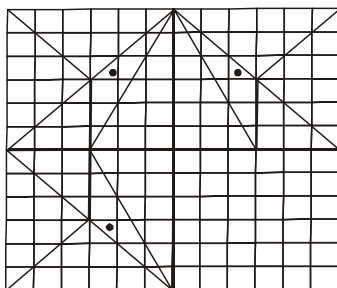


**Answer Figures :**



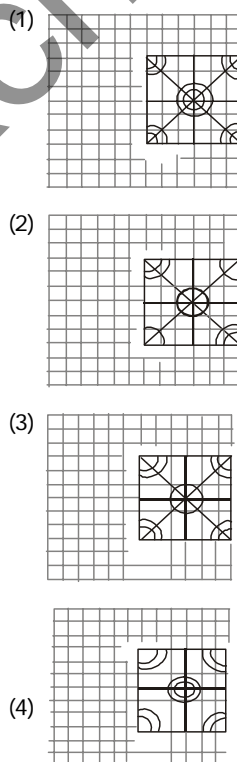

(SSC CGL Tier-I (CBE)  
Exam. 27.08.2016) (1st Sitting)

193. Which answer figure will complete the pattern in the question figure?



(SSC CGL Tier-I (CBE)  
Exam. 28.08.2016) (1st Sitting)

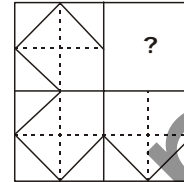
194. Which answer figure will complete the pattern in the question figure?



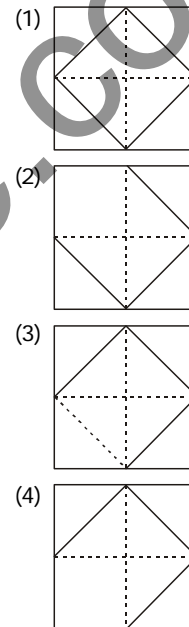
(SSC CGL Tier-I (CBE)  
Exam. 29.08.2016) (1st Sitting)

195. Which answer figure will complete the pattern in the question figure?

**Question Figure :**



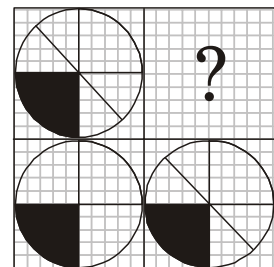
**Answer Figures :**



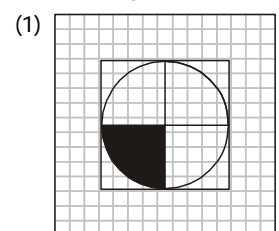
(SSC CGL Tier-I (CBE)  
Exam. 30.08.2016) (1st Sitting)

196. Which answer figure will complete the pattern in the question figure?

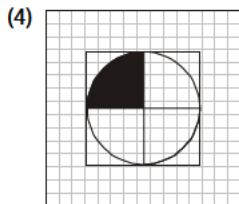
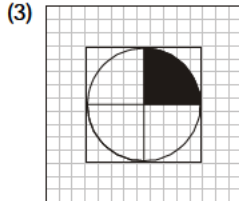
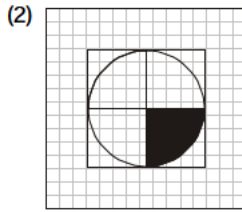
**Question Figure :**



**Answer Figures :**

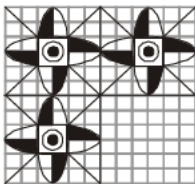


**COMPLETION OF FIGURE**

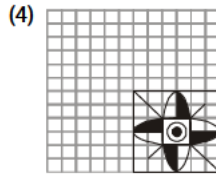
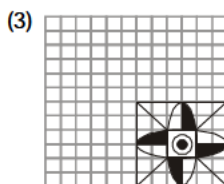
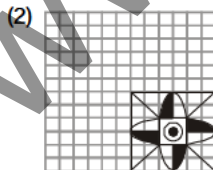
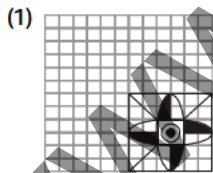


(SSC CGL Tier-I (CBE)  
Exam. 31.08.2016) (1st Sitting)

**197. Which answer figure will complete the pattern in the question figure?  
Question Figure**

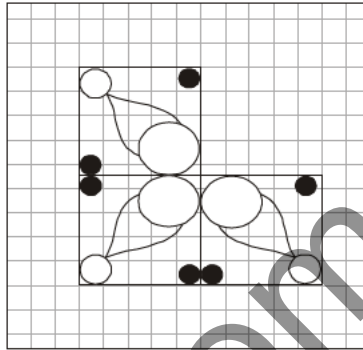


**Answer Figures**

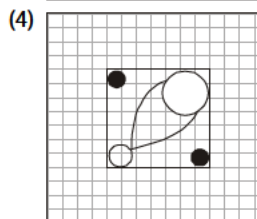
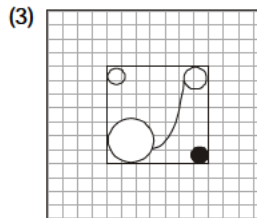
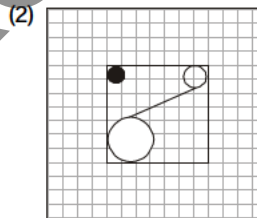
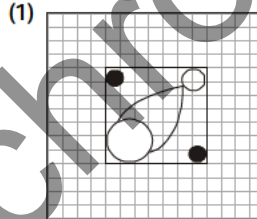


(SSC CGL Tier-I (CBE)  
Exam. 01.09.2016) (1st Sitting)

**198. Which answer figure will complete the pattern in the question figure?  
Question Figure :**

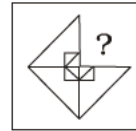


**Answer Figures :**

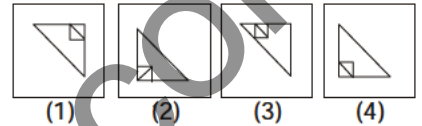


(SSC CGL Tier-I (CBE)  
Exam. 02.09.2016) (1st Sitting)

**199. Which one of the Answer figures completes the Question figure?  
Question Figure :**

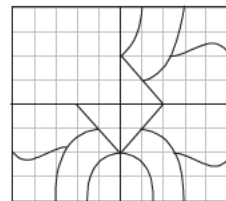


**Answer Figures :**

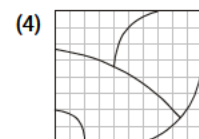
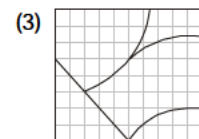
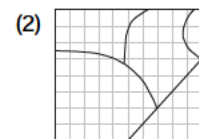
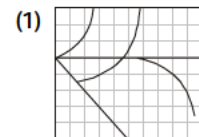


(SSC CGL Tier-I (CBE)  
Exam. 02.09.2016) (IInd Sitting)

**200. Which answer figure will complete the pattern in the question figure?  
Question Figure :**



**Answer Figures :**

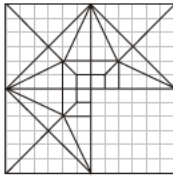


(SSC CGL Tier-I (CBE)  
Exam. 03.09.2016) (IInd Sitting)

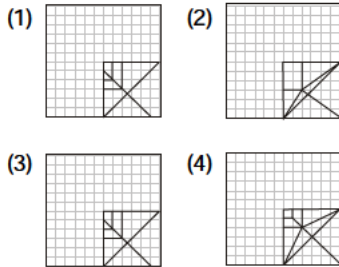
**COMPLETION OF FIGURE**

201. Which answer figure will complete the pattern in the question figure?

**Question Figure :**




**Answer Figures :**



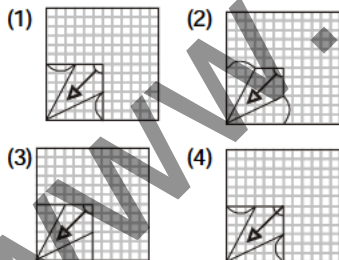
(SSC CGL Tier-I (CBE)  
Exam. 04.09.2016) (1st Sitting)

202. Which answer figure will complete the pattern in the question figure?

**Questions Figure :**



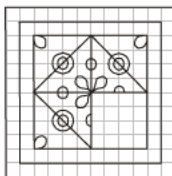
**Answer Figures :**



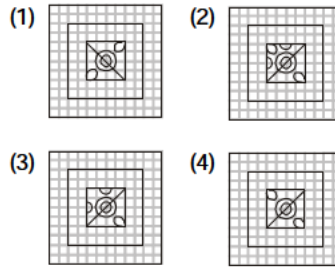
(SSC CGL Tier-I (CBE)  
Exam. 06.09.2016) (1st Sitting)

203. Which answer figure will complete the pattern in the question figure?

**Question Figure**



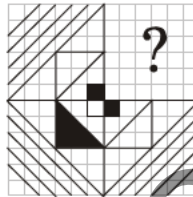
**Answer Figures**



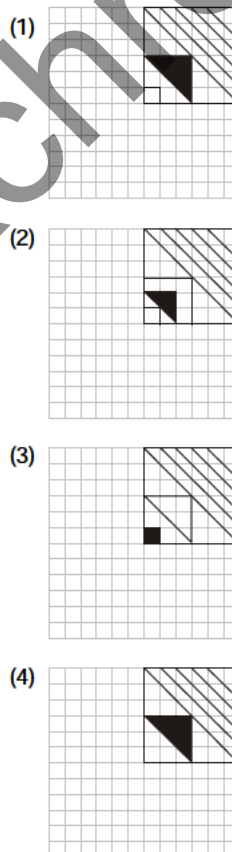
(SSC CGL Tier-I (CBE)  
Exam. 07.09.2016) (1st Sitting)

204. Which answer figure will complete the pattern in the question figure?

**Question Figure :**




**Answer Figures :**



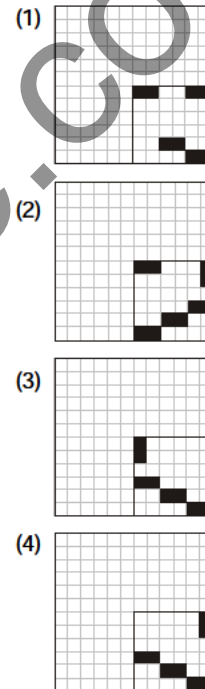
(SSC CGL Tier-I (CBE)  
Exam. 30.08.2016) (IInd Sitting)

205. Which answer figure will complete the pattern in the question figure?

**Question Figure :**



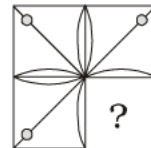
**Answer Figures :**



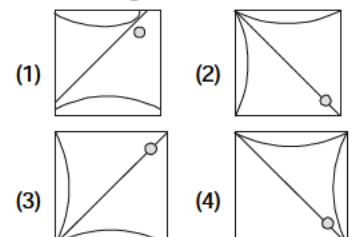
(SSC CGL Tier-I (CBE)  
Exam. 31.08.2016) (IInd Sitting)

206. Which answer figure will complete the pattern in the question figure?

**Question Figure :**



**Answer Figures :**

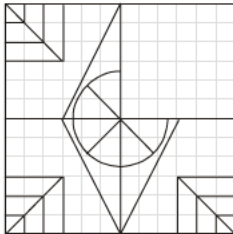


(SSC CGL Tier-I (CBE)  
Exam. 01.09.2016) (1st Sitting)

**COMPLETION OF FIGURE**

207. Which answer figure will complete the pattern in the question figure?

**Question Figure :**



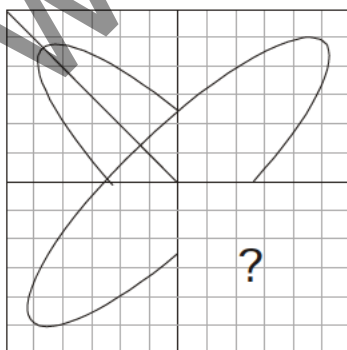
**Answer Figures :**

- (1)
- (2)
- (3)
- (4)

(SSC CGL Tier-I (CBE) Exam. 02.09.2016) (1st Sitting)

208. Which answer figure will complete the pattern in the question figure?

**Question Figure :**



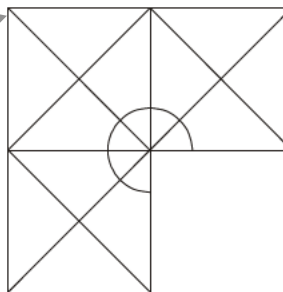
**Answer Figures :**

- (1)
- (2)
- (3)
- (4)

(SSC CGL Tier-I (CBE) Exam. 28.08.2016) (1st Sitting)

209. Which answer figure will complete the pattern in the question figure?

**Question Figure :**



**Answer Figures :**

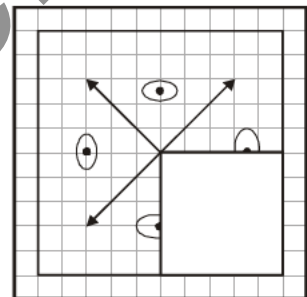
- (1)
- (2)

- (3)
- (4)

(SSC CGL Tier-I (CBE) Exam. 29.08.2016) (1st Sitting)

210. Which answer figure will complete the pattern in the question figure?

**Question Figure :**



**Answer Figures :**

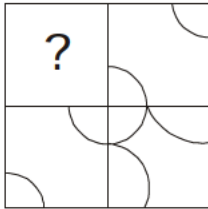
- (1)
- (2)
- (3)
- (4)

(SSC CGL Tier-I (CBE) Exam. 30.08.2016) (1st Sitting)

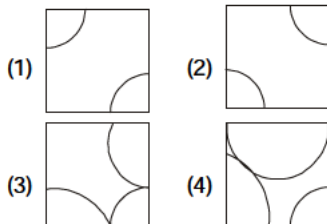
**COMPLETION OF FIGURE**

211. Which answer figure will complete the pattern in the question figure?

**Question Figure :**



**Answer Figures :**

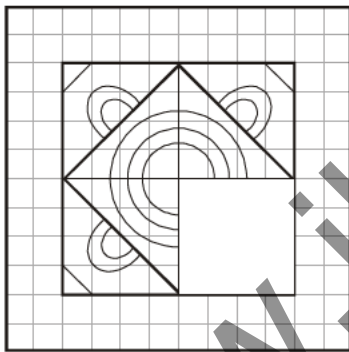


(SSC CGL Tier-I (CBE)

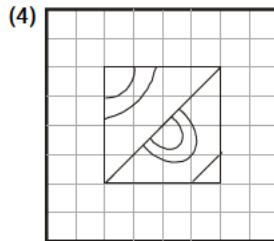
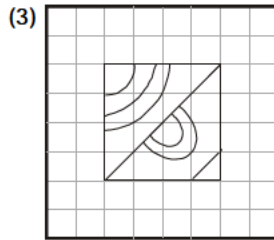
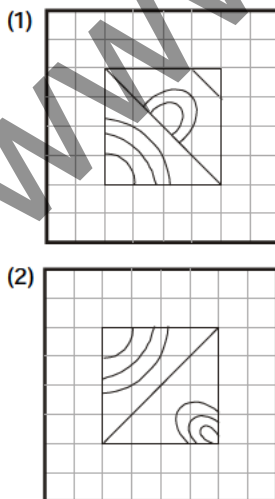
Exam. 31.08.2016) (IInd Sitting)

212. Which answer figure will complete the pattern in the question figure?

**Question Figure :**



**Answer Figures :**

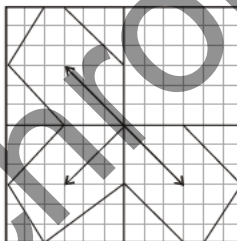


(SSC CGL Tier-I (CBE)

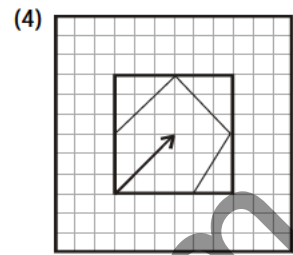
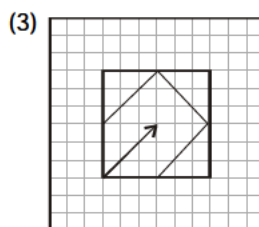
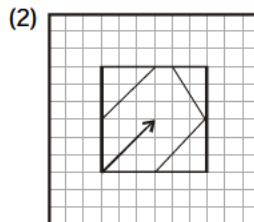
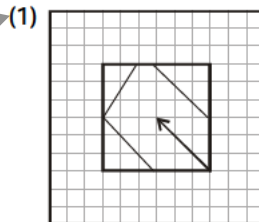
Exam. 01.09.2016) (IInd Sitting)

213. Which answer figure will complete the pattern in the question figure?

**Question Figure :**



**Answer Figures :**

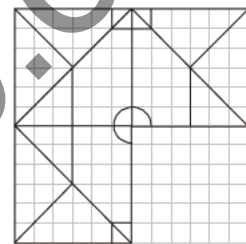


(SSC CGL Tier-I (CBE)

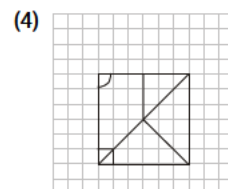
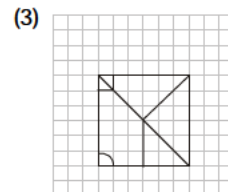
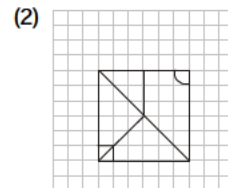
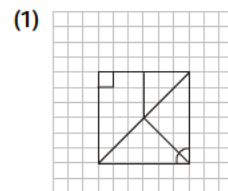
Exam. 02.09.2016) (IInd Sitting)

214. Which answer figure will complete the pattern in the question figure?

**Question Figure :**



**Answer Figures :**



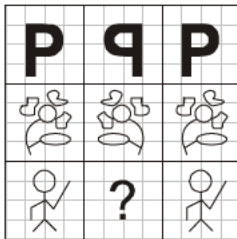
(SSC CGL Tier-I (CBE)

Exam. 03.09.2016) (IIIrd Sitting)

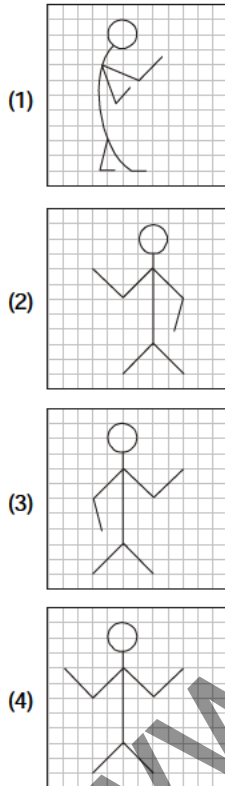
**COMPLETION OF FIGURE**

215. Which answer figure will complete the pattern in the question figure?

**Question Figure :**



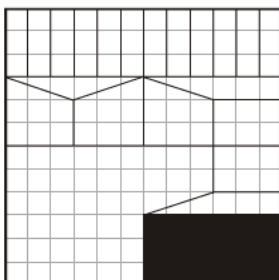
**Answer Figures :**



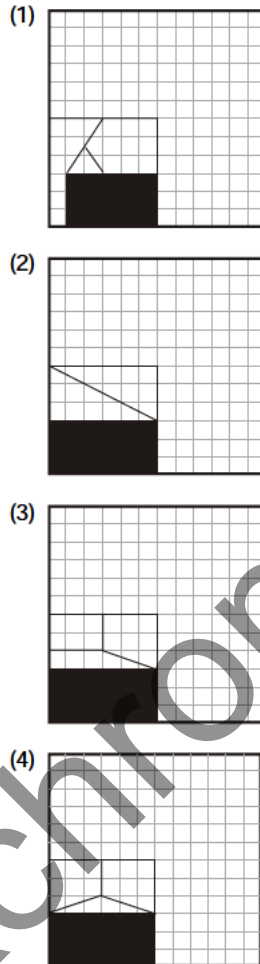
(SSC CGL Tier-I (CBE) Exam. 04.09.2016) (IIIrd Sitting)

216. Which answer figure will complete the pattern in the question figure?

**Question Figure :**



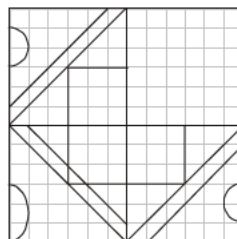
**Answer Figures :**



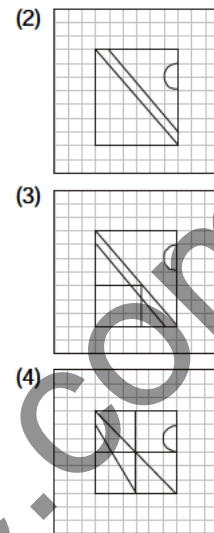
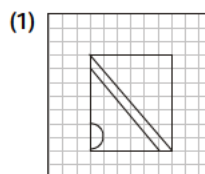
(SSC CGL Tier-I (CBE) Exam. 06.09.2016) (IIIrd Sitting)

217. Which answer figure will complete the pattern in the question figure?

**Question Figure :**



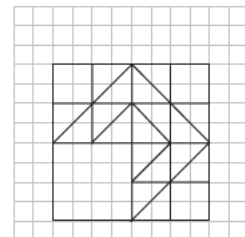
**Answer Figures :**



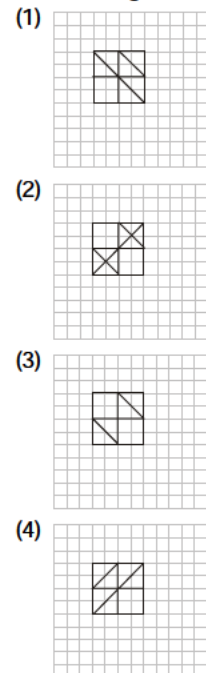
(SSC CGL Tier-I (CBE) Exam. 07.09.2016) (IIIrd Sitting)

218. Which answer will complete the pattern in the question figure?

**Question Figure :**



**Answer Figures :**

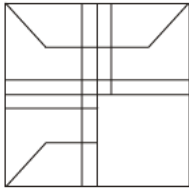


(SSC CGL Tier-I (CBE) Exam. 08.09.2016) (IIIrd Sitting)

**COMPLETION OF FIGURE**

219. Which answer figure will complete the figure in the question figure?

**Question Figure :**



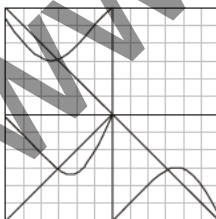
**Answer Figures :**

- (1)
- (2)
- (3)
- (4)

(SSC CGL Tier-I (CBE) Exam. 09.09.2016) (IIInd Sitting)

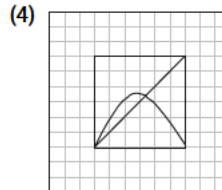
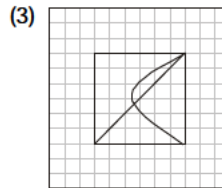
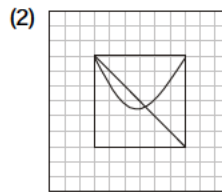
220. Which answer figure will complete the pattern in the question figure?

**Question Figure :**



**Answer Figures :**


- (1)



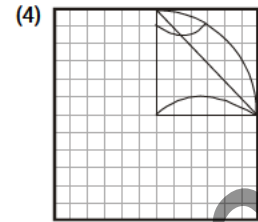
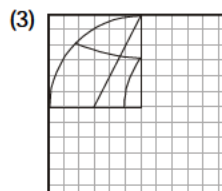
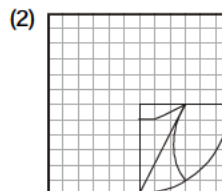
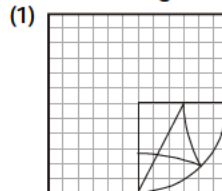
(SSC CGL Tier-I (CBE) Exam. 10.09.2016) (IIIrd Sitting)

221. Which answer figure can complete the pattern in the question figure?

**Question Figure :**



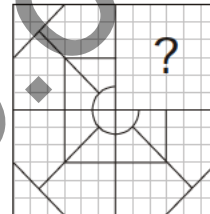
**Answer Figures :**



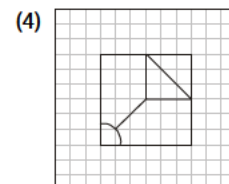
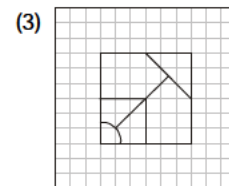
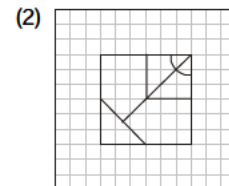
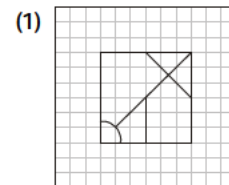
(SSC CGL Tier-I (CBE) Exam. 11.09.2016) (IIInd Sitting)

222. Which answer figure will complete the pattern in the question figure?

**Question Figure :**



**Answer Figures :**



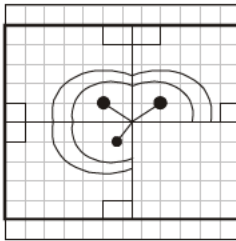
(SSC CGL Tier-I (CBE) Exam. 03.09.2016) (IIInd Sitting)



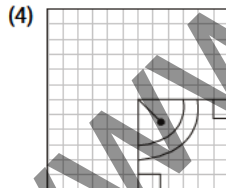
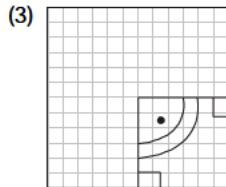
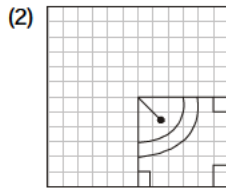
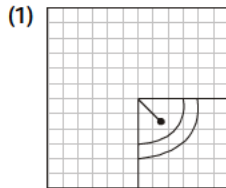
**COMPLETION OF FIGURE**

223. Which answer figure will complete the pattern in the question figure?

**Question Figure :**



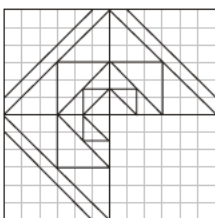
**Answer Figures :**



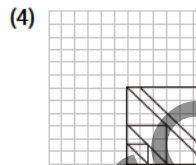
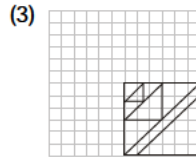
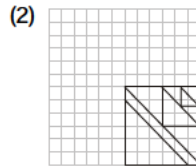
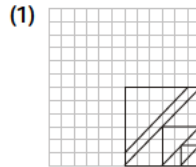
(SSC CGL Tier-I (CBE) Exam. 04.09.2016) (IInd Sitting)

224. Which answer figure will complete the pattern in the question figure?

**Question Figure :**



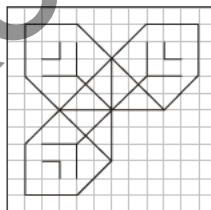
**Answer Figures :**



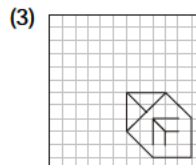
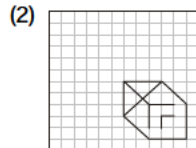
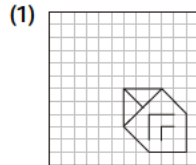
(SSC CGL Tier-I (CBE) Exam. 06.09.2016) (IInd Sitting)

225. Which answer figure will complete the pattern in the question figure ?

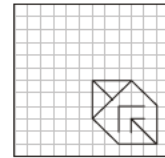
**Question Figure**



**Answer Figures**



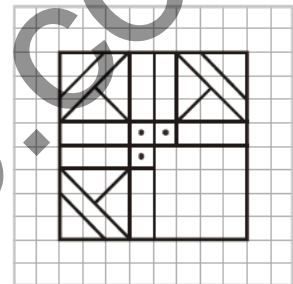
(4)



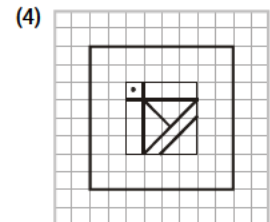
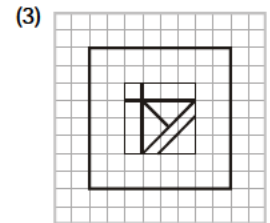
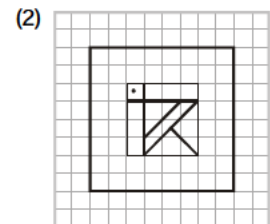
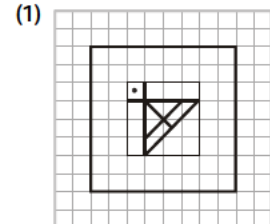
(SSC CGL Tier-I (CBE) Exam. 07.09.2016) (IInd Sitting)

226. Which answer figure will complete the pattern in the question figure ?

**Question Figure :**



**Answer Figures :**

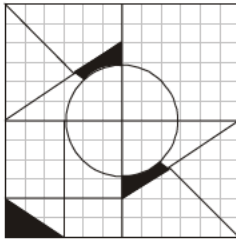


(SSC CGL Tier-I (CBE) Exam. 08.09.2016) (IInd Sitting)

**COMPLETION OF FIGURE**

227. Which answer figure will complete the pattern in the question figure?

**Question Figure :**



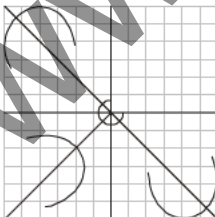
**Answer Figures :**

- (1)
- (2)
- (3)
- (4)

(SSC CGL Tier-I (CBE) Exam. 09.09.2016) (IInd Sitting)

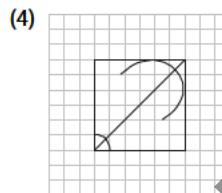
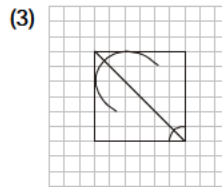
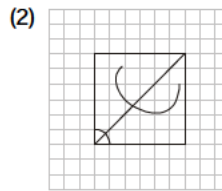
228. Which answer figure will complete the figure in the question figure?

**Question Figure :**



**Answer Figures :**

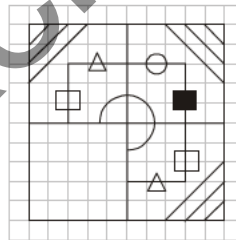
- (1)



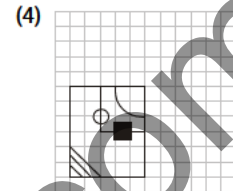
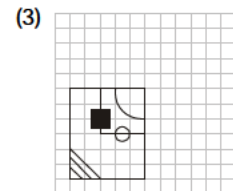
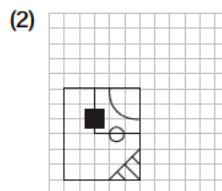
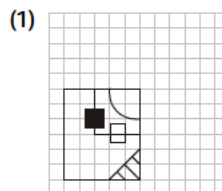
(SSC CGL Tier-I (CBE) Exam. 10.09.2016) (IInd Sitting)

229. Which answer figure will complete the pattern in the question figure?

**Question Figure :**



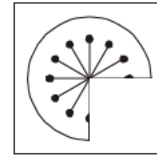
**Answer Figures :**



(SSC CGL Tier-I (CBE) Exam. 11.09.2016) (IInd Sitting)

230. Which answer figure will complete the pattern in the question figure ?

**Question Figure :**



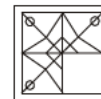
**Answer Figures :**

- (1)
- (2)
- (3)
- (4)

(SSC CGL Tier-I (CBE) Exam. 27.10.2016) (Ist Sitting)

231. Which answer figure will complete the pattern in the question figure ?

**Question Figure :**



**Answer Figures :**

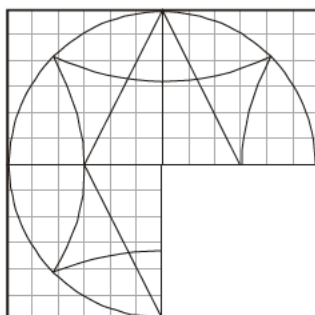
- (1)
- (2)
- (3)
- (4)

(SSC CGL Tier-I (CBE) Exam. 27.10.2016) (IInd Sitting)

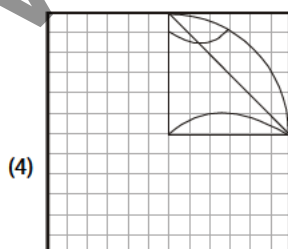
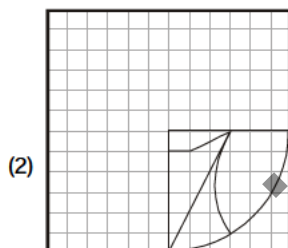
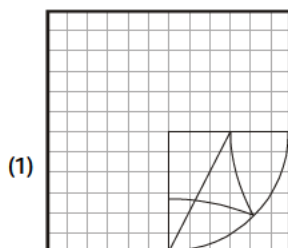
**COMPLETION OF FIGURE**

232. Which answer figure can complete the pattern in the question figure?

**Question Figure :**



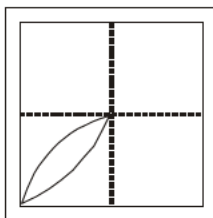
**Answer Figures :**



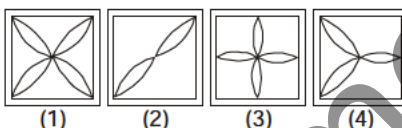
(SSC CGL Tier-I (CBE)  
Exam. 11.09.2016) (1st Sitting)

233. A piece of paper is folded and punched as shown below in the question figure. From the given answer figures, indicate how it will appear when opened.

**Question Figure :**



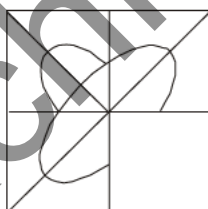
**Answer Figures :**



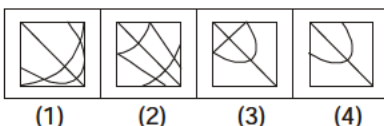
(SSC CHSL (10+2) Tier-I (CBE)  
Exam. 15.01.2017) (IInd Sitting)

234. Which answer figure will complete the pattern in the question figure ?

**Question Figure**



**Answer Figures**



(SSC Multi-Tasking Staff  
Exam. 30.04.2017 1st Sitting)

**ANSWERS**

1. (2)	2. (2)	3. (1)	4. (4)
5. (1)	6. (3)	7. (4)	8. (1)
9. (2)	10. (1)	11. (4)	12. (1)
13. (1)	14. (4)	15. (2)	16. (1)
17. (1)	18. (1)	19. (1)	20. (3)
21. (2)	22. (4)	23. (2)	24. (1)
25. (2)	26. (3)	27. (1)	28. (2)
29. (1)	30. (3)	31. (1)	32. (4)
33. (4)	34. (2)	35. (2)	36. (3)
37. (1)	38. (2)	39. (2)	40. (3)
41. (3)	42. (4)	43. (2)	44. (2)
45. (3)	46. (4)	47. (2)	48. (3)
49. (3)	50. (4)	51. (3)	52. (4)
53. (3)	54. (2)	55. (4)	56. (1)
57. (2)	58. (4)	59. (2)	60. (3)
61. (1)	62. (3)	63. (4)	64. (4)
65. (4)	66. (3)	67. (3)	68. (4)
69. (4)	70. (2)	71. (3)	72. (3)
73. (4)	74. (1)	75. (4)	76. (4)
77. (1)	78. (2)	79. (3)	80. (3)
81. (4)	82. (4)	83. (2)	84. (2)
85. (1)	86. (3)	87. (1)	88. (4)
89. (4)	90. (3)	91. (2)	92. (3)
93. (2)	94. (4)	95. (4)	96. (3)
97. (2)	98. (1)	99. (3)	100. (2)
101. (3)	102. (4)	103. (4)	104. (1)
105. (2)	106. (4)	107. (2)	108. (2)
109. (3)	110. (2)	111. (3)	112. (4)
113. (2)	114. (1)	115. (4)	116. (1)
117. (3)	118. (2)	119. (2)	120. (2)
121. (4)	122. (2)	123. (2)	124. (3)
125. (2)	126. (1)	127. (3)	128. (1)
129. (3)	130. (4)	131. (1)	132. (4)
133. (1)	134. (1)	135. (3)	136. (3)
137. (2)	138. (1)	139. (3)	140. (1)
141. (4)	142. (3)	143. (1)	144. (1)
145. (4)	146. (3)	147. (4)	148. (3)

**COMPLETION OF FIGURE**

149. (1)	150. (1)	151. (3)	152. (2)
153. (4)	154. (1)	155. (2)	156. (3)
157. (4)	158. (4)	159. (1)	160. (3)
161. (4)	162. (4)	163. (3)	164. (1)
165. (2)	166. (2)	167. (2)	168. (3)
169. (2)	170. (1)	171. (4)	172. (4)
173. (1)	174. (3)	175. (2)	176. (3)
177. (2)	178. (2)	179. (1)	180. (3)
181. (1)	182. (2)	183. (3)	184. (3)
185. (3)	186. (2)	187. (2)	188. (1)
189. (3)	190. (4)	191. (2)	192. (2)
193. (1)	194. (4)	195. (4)	196. (1)
197. (2)	198. (1)	199. (4)	200. (2)
201. (4)	202. (1)	203. (2)	204. (1)
205. (4)	206. (2)	207. (2)	208. (4)
209. (1)	210. (2)	211. (3)	212. (3)
213. (3)	214. (4)	215. (2)	216. (3)
217. (3)	218. (1)	219. (4)	220. (4)
221. (1)	222. (3)	223. (4)	224. (3)
225. (2)	226. (4)	227. (1)	228. (2)
229. (3)	230. (3)	231. (4)	232. (1)
233. (1)	234. (3)		

**EXPLANATIONS**

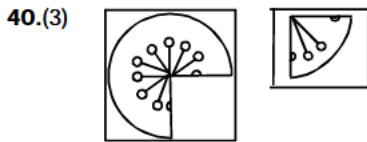
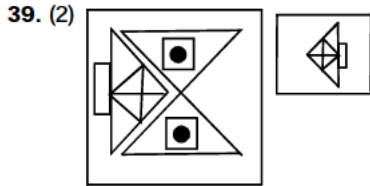
- 1. (2)
- 2. (2)
- 3. (1)
- 4. (4)
- 5. (1)
- 6. (3)
- 7. (4)

- 8. (1)
- 9. (2)
- 10. (1)
- 11. (4)
- 12. (1)
- 13. (1)
- 14. (4)
- 15. (2)
- 16. (1)
- 17. (1)
- 18. (1)
- 19. (1)
- 20. (3)
- 21. (2)
- 22. (4)
- 23. (2)
- 24. (1)

- 25. (2)
- 26. (3) Answer Figure (3) will complete the pattern.
- 27. (1)
- 28. (2)
- 29. (1)
- 30. (3) Answer figure (3) would complete the given figural pattern. The complete pattern would appear as:
- 31. (1) The Answer figure (1) would complete the given figural pattern.
- 32. (4)
- 33. (4)
- 34. (2)
- 35. (2) The complete pattern will look as :
- 36. (3) The complete pattern will look as :

**COMPLETION OF FIGURE**

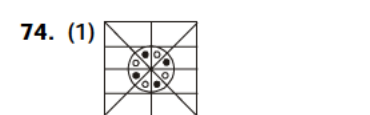
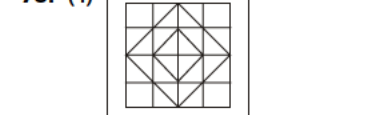
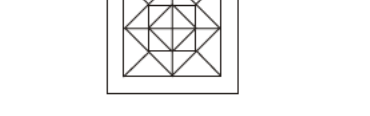
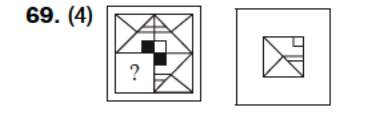
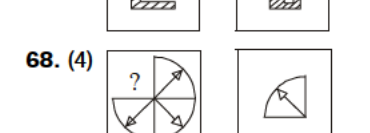
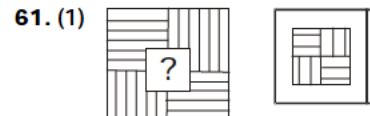
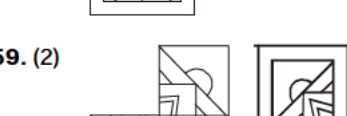
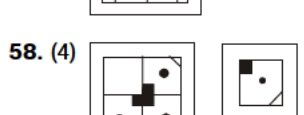
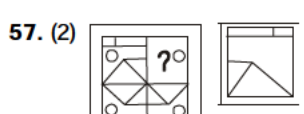
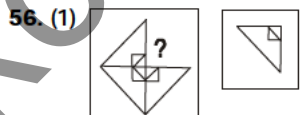
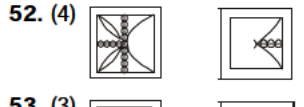
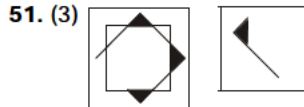
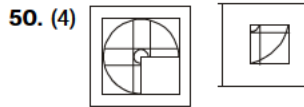
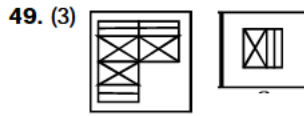
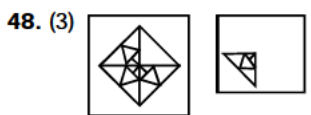
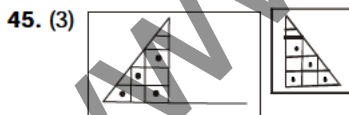
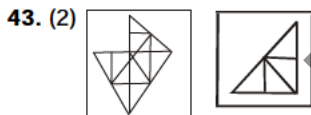
37. (1) In the given figure two triangles are arranged diagonally and hence one circle would complete the diagram.



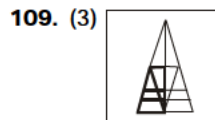
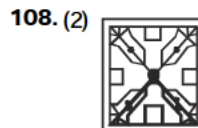
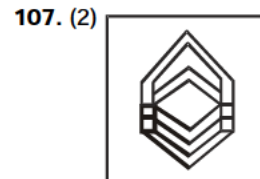
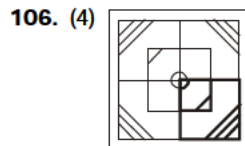
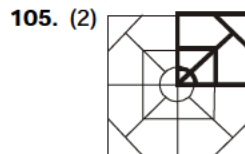
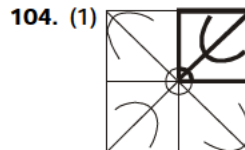
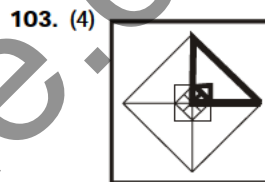
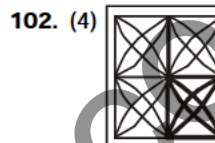
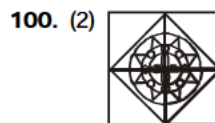
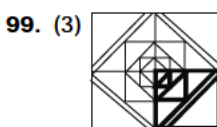
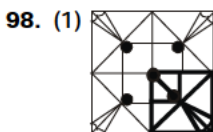
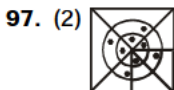
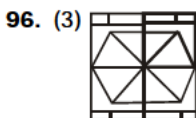
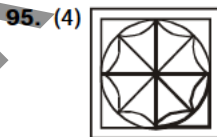
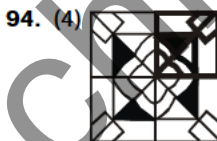
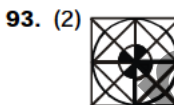
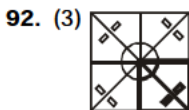
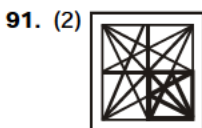
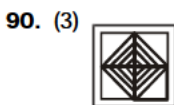
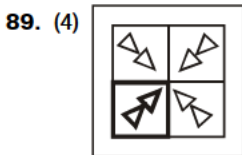
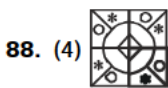
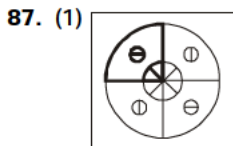
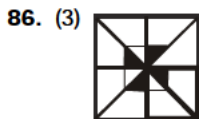
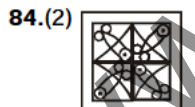
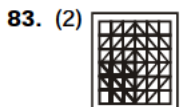
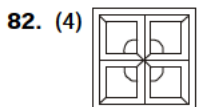
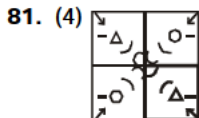
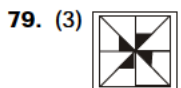
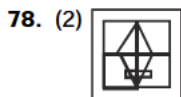
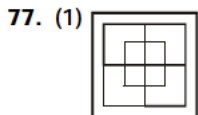
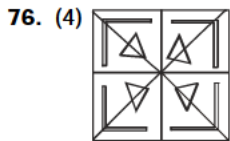
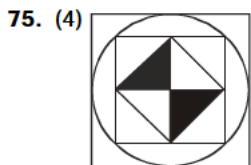
41. (3) The complete pattern :



42. (4) The complete pattern :

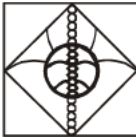


COMPLETION OF FIGURE



**COMPLETION OF FIGURE**

110. (2)




111. (3)



112. (4)



113. (2)



114. (1)



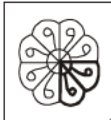
115. (4)



116. (1)



117. (3)



118. (2)



119. (2) The number of dot is increasing by one. Therefore, there should be four dots at the place of question mark.

120. (2)




121. (4)



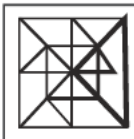
122. (2)



123. (2)




124. (3)



125. (2)



126. (1)



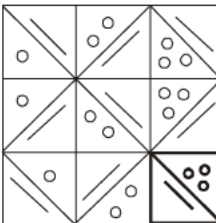
127. (3)



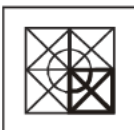
128. (1)



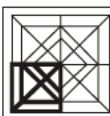
129. (3)



130. (4)



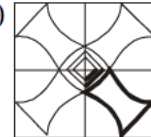
131. (1)



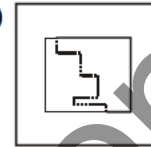
132. (4)



133. (1)



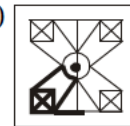
134. (1)



135. (3)



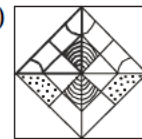
136. (3)



137. (2)



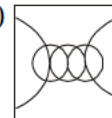
138. (1)



139. (3)




140. (1)



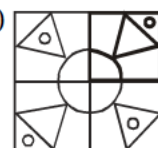
141. (4)



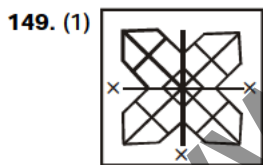
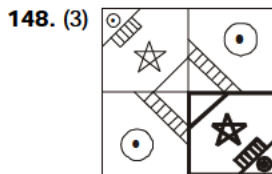
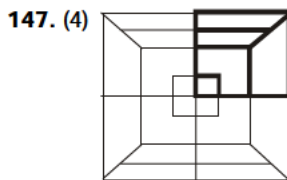
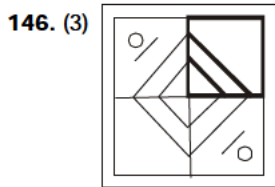
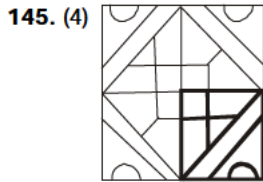
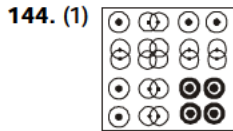
142. (3)



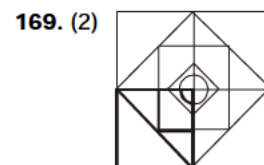
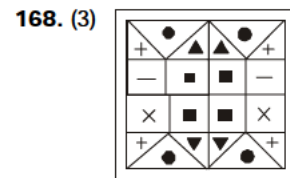
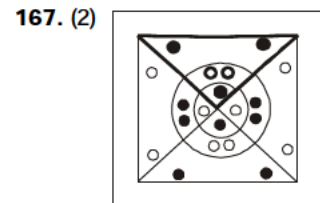
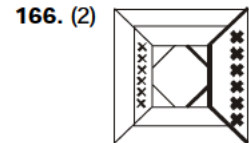
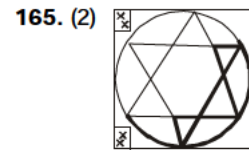
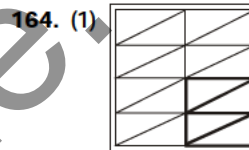
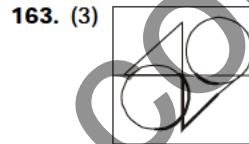
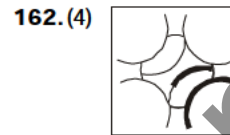
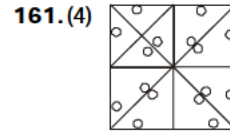
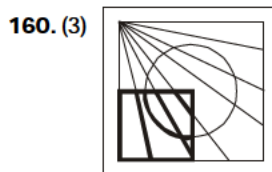
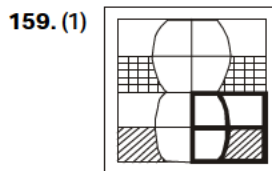
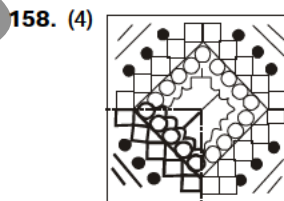
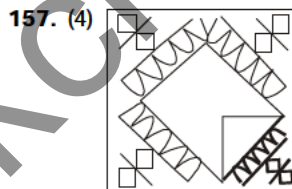
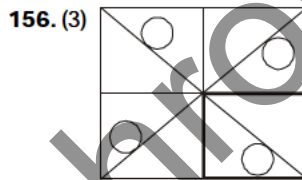
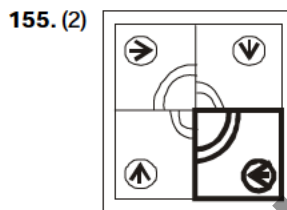
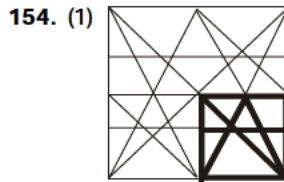
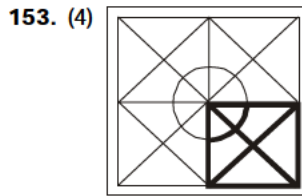
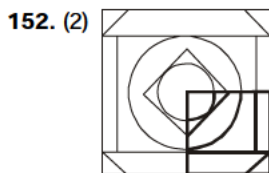
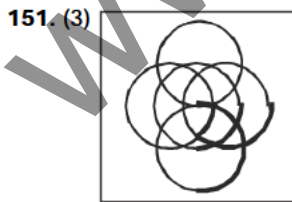
143. (1)



COMPLETION OF FIGURE



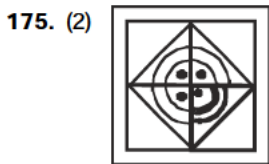
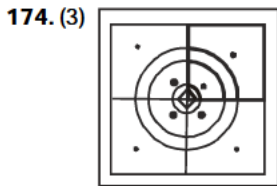
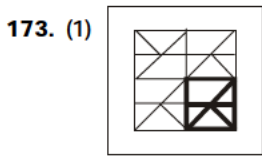
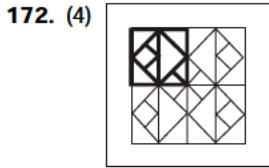
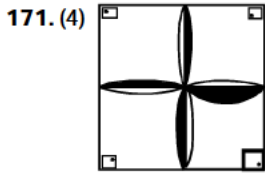
150. (1) In the upper part the first figure has been inverted in the second figure.



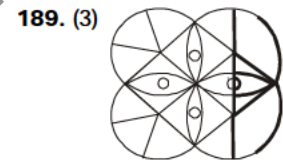
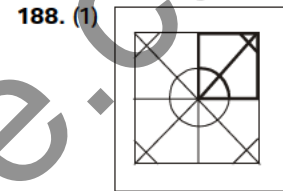
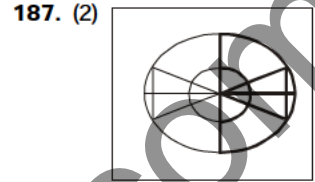
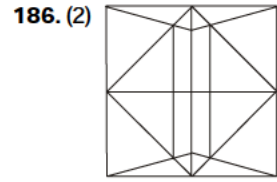
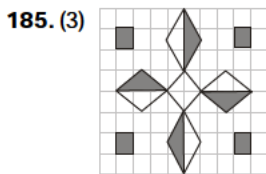
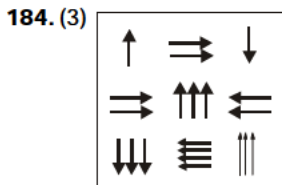
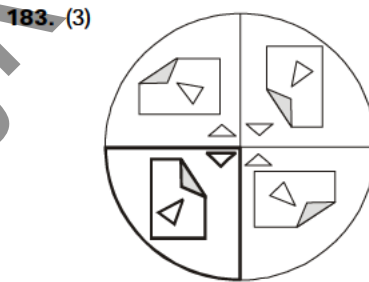
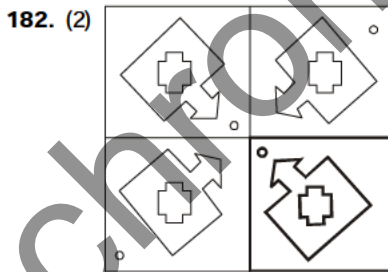
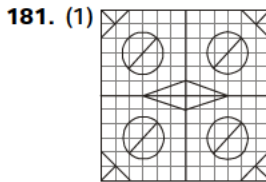
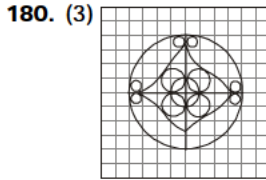
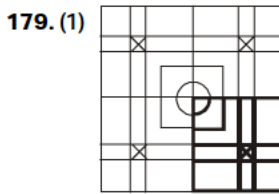
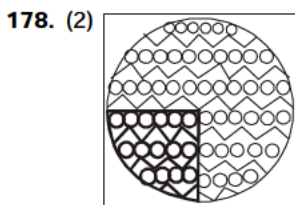
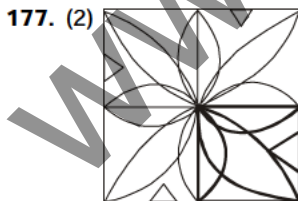
170. (1) In each row there is one circle and two semi-circles. There are three different designs in the circle and semi-circles.



**COMPLETION OF FIGURE**

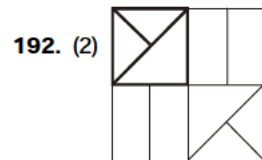
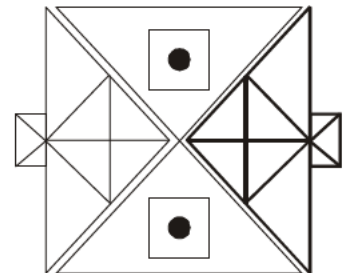


176. (3) If we proceed row-wise, in the first step one design is inverted and in the second step both the designs are inverted.  
If we proceed column-wise, in each step one design rotates through 90° clockwise.

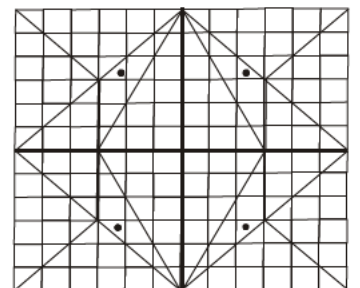


190. (4) One leaflet is added in anticlockwise direction.

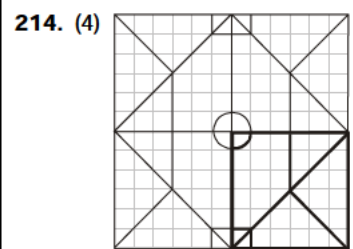
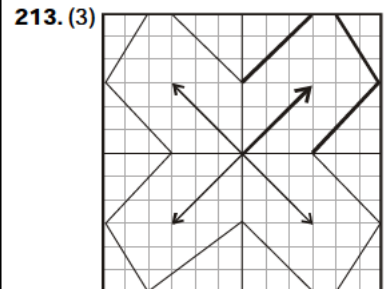

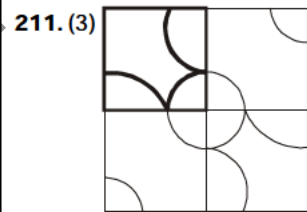
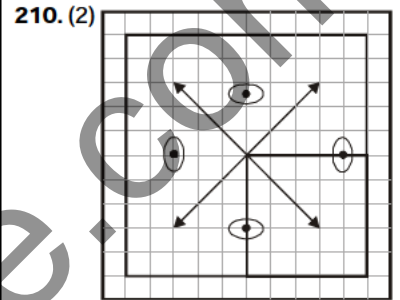
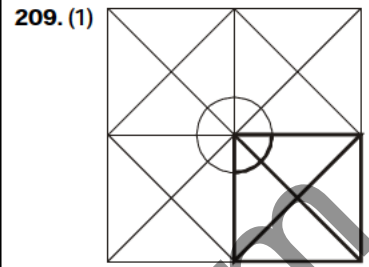
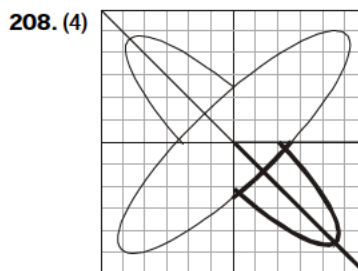
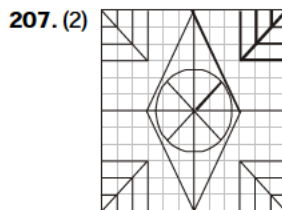
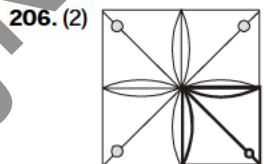
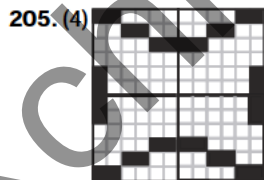
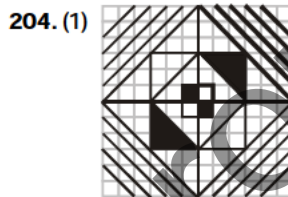
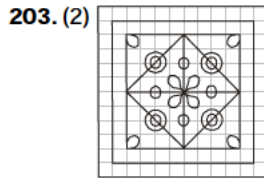
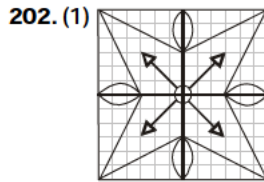
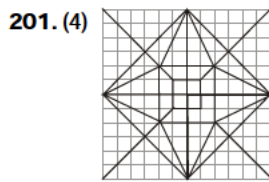
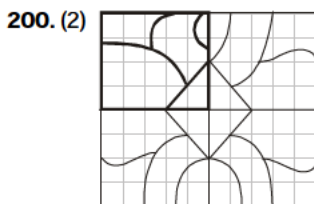
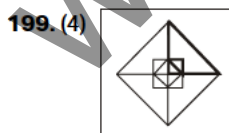
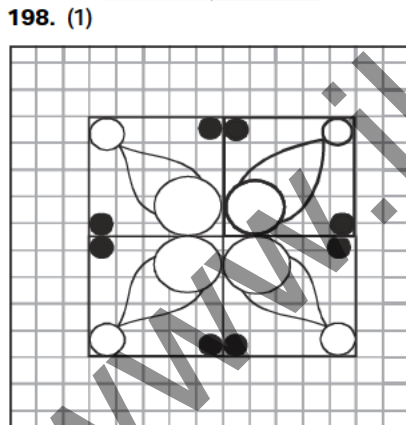
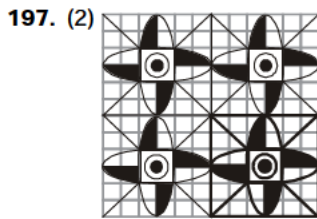
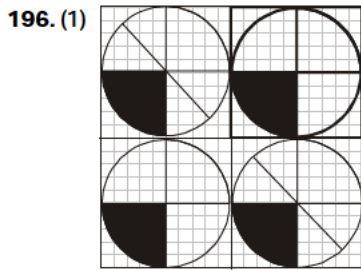
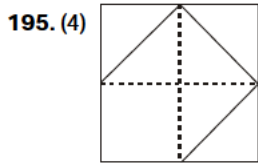
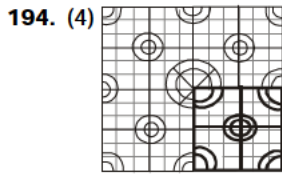
191. (2)



193. (1)




COMPLETION OF FIGURE



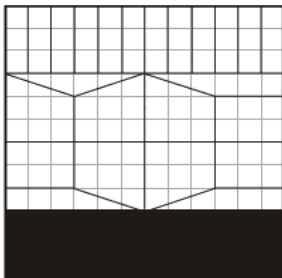
**COMPLETION OF FIGURE**

215. (2)

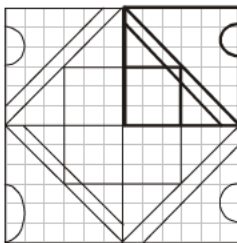


In each row the middle figure is the mirror image of the first figure.

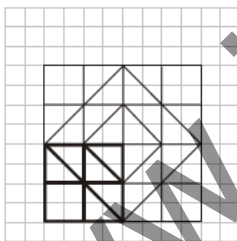
216. (3)



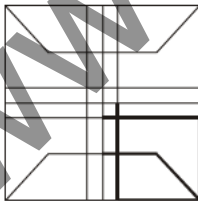
217. (3)



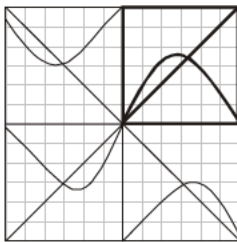
218. (1)



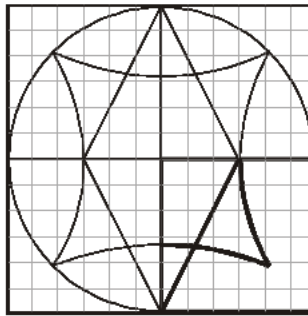
219. (4)



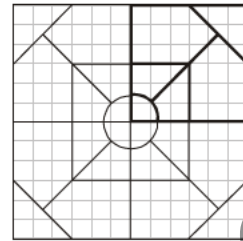
220. (4)



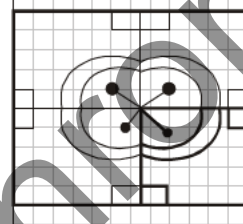
221. (1)



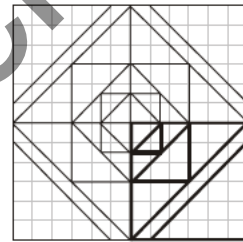
222. (3)



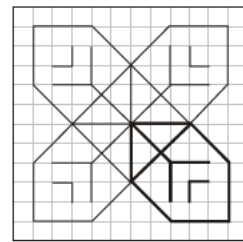
223. (4)



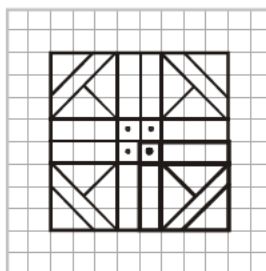
224. (3)



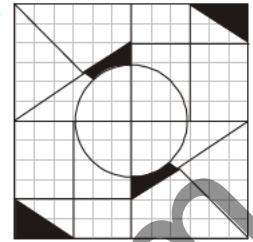
225. (2)




226. (4)



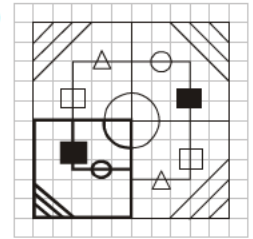
227. (1)



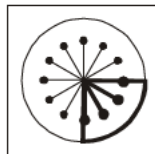
228. (2)



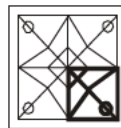
229. (3)



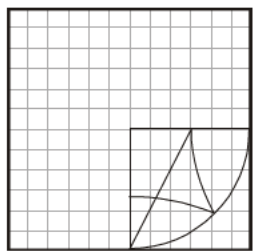
230. (3)



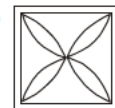
231. (4)



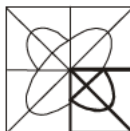
232. (1)



233. (1)



234. (3)





# JK Chrome

JK Chrome | Employment Portal



## Rated No.1 Job Application of India

Sarkari Naukri  
Private Jobs  
Employment News  
Study Material  
Notifications



JOBS



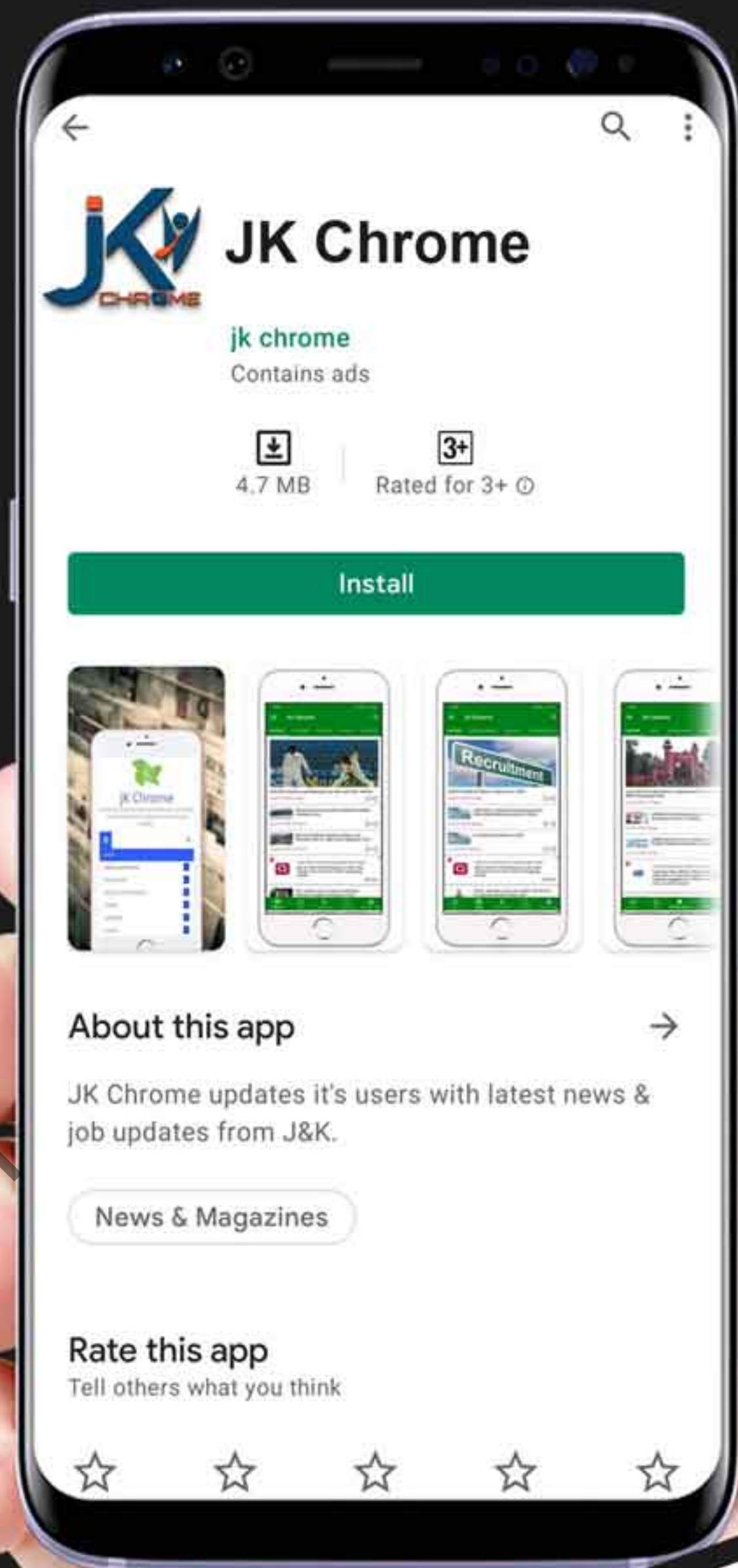
NOTIFICATIONS



G.K



STUDY MATERIAL



JK Chrome

jk chrome  
Contains ads



www.jkchrome.com | Email : contact@jkchrome.com