



# JK Chrome

JK Chrome | Employment Portal



## Rated No.1 Job Application of India

Sarkari Naukri  
Private Jobs  
Employment News  
Study Material  
Notifications



JOBS



NOTIFICATIONS



G.K



STUDY MATERIAL



JK Chrome

jk chrome  
Contains ads



www.jkchrome.com | Email : contact@jkchrome.com

# Embedded figure

## Embedded figure meaning

Embedded figures are the figures hidden inside another figure. In other words, a figure (x) is said to be embedded inside figure (y), if figure (y) contains figure (x) in it.

Embedded figure questions consist of unique figure which is hidden or embedded in one of the four option figures. In such questions, all the options look same and confusing. So candidates need to be careful while attempting such questions. Anyhow with practice we can master these embedded figures. We must basically understand the structure of the given question figure and then proceed to find the correct answer figure.

## Types of embedded figure questions

There are many types of embedded figure questions. A few of them are explained below,

### Type 1: Complex answer figure

A question figure (x) is given followed by four complex option figures in such a way that the question figure (x) is embedded in only one of the given four options. The candidate must identify the correct figure in which figure (x) is hidden.

### Example 1

Question figure:



Answer figures:



(1)



(2)



(3)



(4)

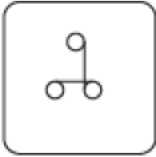
Solution



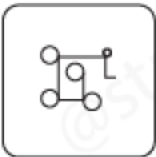
Answer figure  
(1)

## Example 2

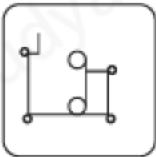
Question figure:



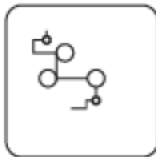
Answer figures:



(1)



(2)

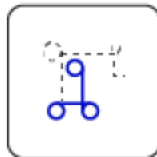


(3)



(4)

Solution



Answer figure  
(1)

## Type 2: Complex question figure

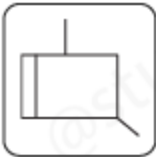
A complex question figure (x) is given followed by four option figures in such a way that only one of the option figures is embedded inside the given question figure. The candidate must identify the correct option figure which is hidden inside the question figure (x).

Example 1

Question figure:



Answer figures:



(1)



(2)

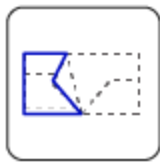


(3)



(4)

Solution



Answer figure

(3)

Example 2:

Question figure:



Answer figures:



(1)



(2)



(3)



(4)

Solution



Answer figure  
(2)

www.jkchrome.com

### Embedded Figures

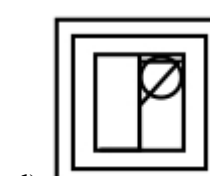
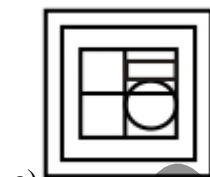

1. Select the option in which the given figure (X) is embedded.



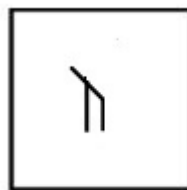
X

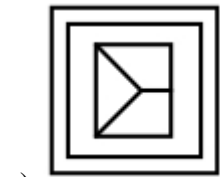


2. From the given answer figures, select the one in which the question figure is hidden/embedded.



3. From the given answer figures, select the one in which the question figure is hidden/embedded.





a)



b)

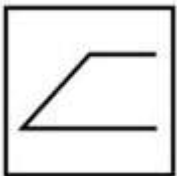


c)



d)

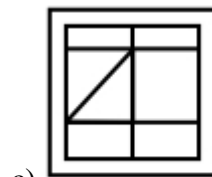
4. From the given answer figures, select the one in which the question figure is hidden/embedded. (Rotation is not allowed)



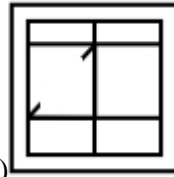
a)



b)




c)

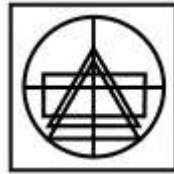


d)

5. From the given answer figures, select the one in which the question figure is hidden/embedded.



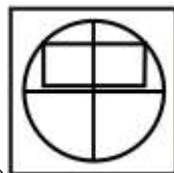
a)



b)



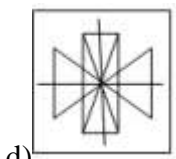
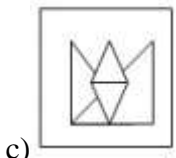
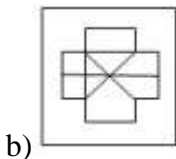
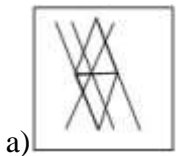
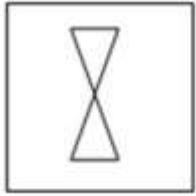
c)



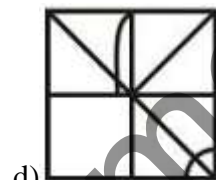
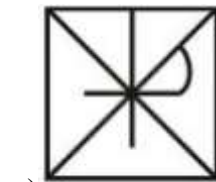
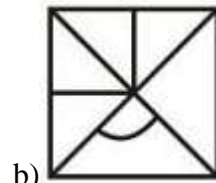
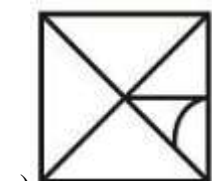
d)



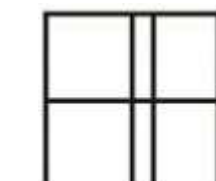
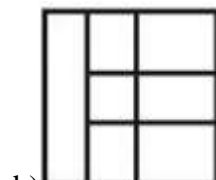
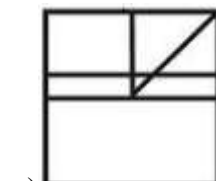
6. From the given answer figures, select the one in which the question figure is hidden/embedded. (Rotation is not allowed)



7. From the given answer figures, select the one in which the question figure is hidden/embedded. (Rotation is not allowed)



8. From the given answer figures, select the one in which the question figure is hidden/embedded.







d)

9. From the given answer figures, select the one in which the question figure is hidden/embedded. (Rotation is not allowed)




a)




b)



c)



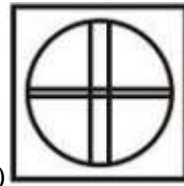
d)



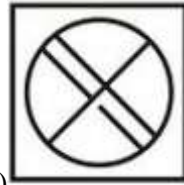
10. From the given answer figures, select the one in which the question figure is hidden/embedded.




a)



b)



c)



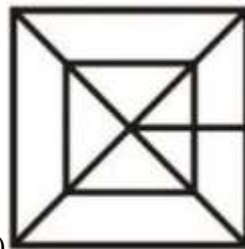
d)

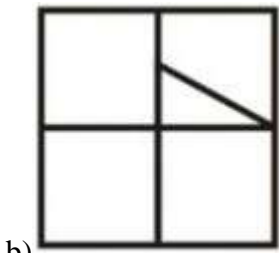


11. From the given answer figures, select the one in which the question figure is hidden/embedded. (Rotation is not allowed)

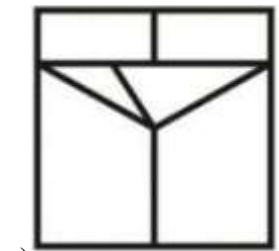


a)

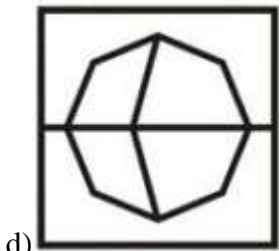




b)



c)



d)

12. Select the option in which figure - X is embedded.  
(Rotation is not allowed)


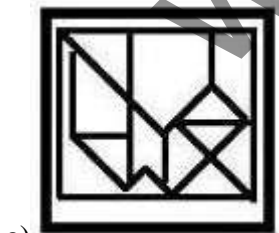
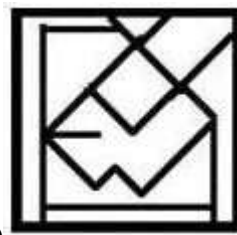



Figure-X




a)



b)

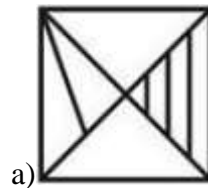


c)

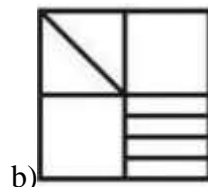


d)

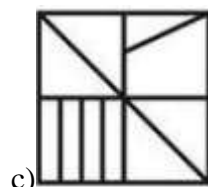
13. From the given answer figures, select the one in which the question figure is hidden/embedded.



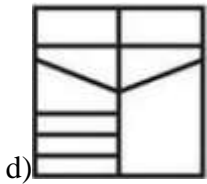
a)



b)

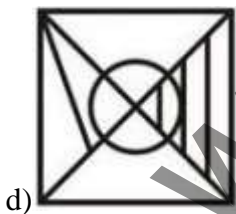
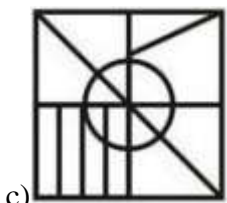
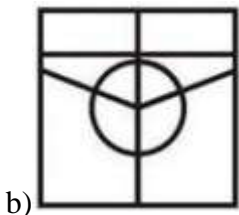
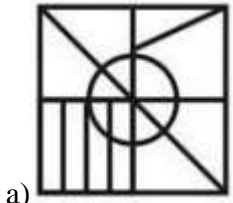


c)



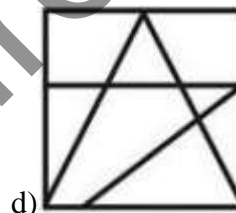
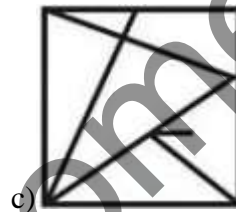
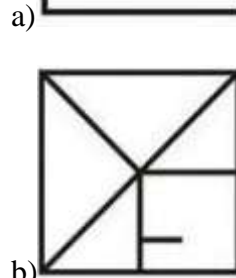
14. From the given answer figures, select the one in which the question figure is hidden/embedded.

P

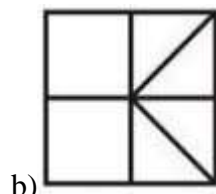
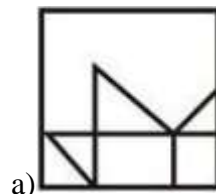


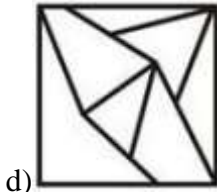
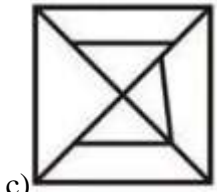
15. From the given answer figures, select the one in which the question figure is hidden/embedded.

V



16. From the given answer figures, select the one in which the question figure is hidden/embedded.

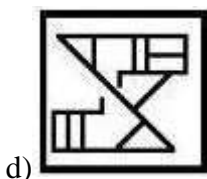
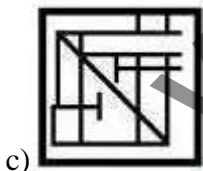
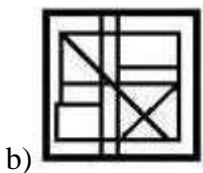
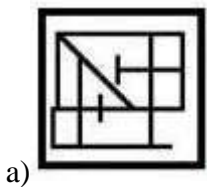




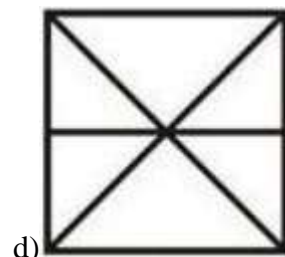
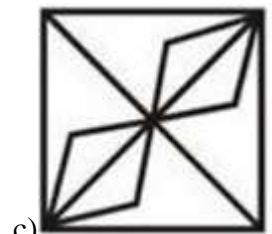
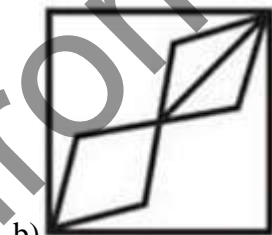

17. Select the option in which figure – X is embedded. (Rotation is not allowed)



Figure-X

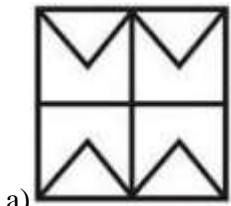


18. From the given answer figures, select the one in which the question figure is hidden/embedded. (Rotation is not allowed)

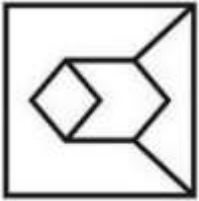


19. From the given answer figures, select the one in which the question figure is hidden/embedded.

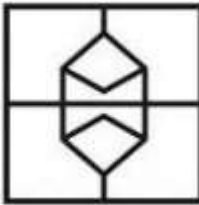




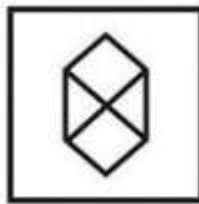
a)



b)



c)



d)

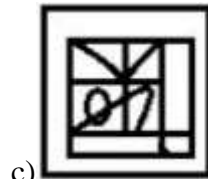
20. From the given answer figures, select the one in which the question figure is hidden/embedded.



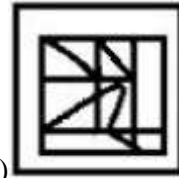
a)



b)



c)

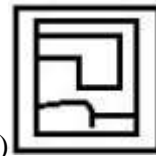


d)

21. From the given answer figures, select the one in which the question figure is hidden/embedded.



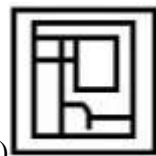
a)



b)



c)



d)

22. From the given answer figures, select the one in which the question figure is hidden/embedded.



- a)
- b)
- c)
- d)

23. From the given answer figures, select the one in which the question figure is hidden/embedded.

- 
- a)
  - b)
  - c)

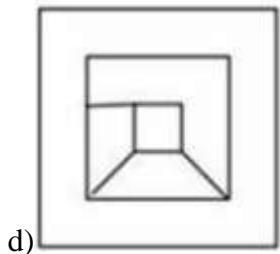
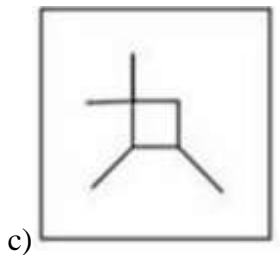
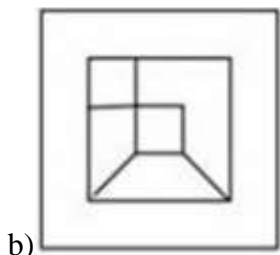
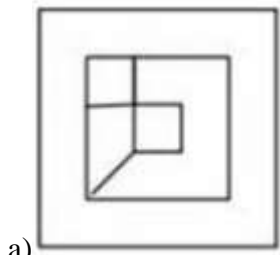
- d)

24. Select the option in which the given figure (X) is embedded.


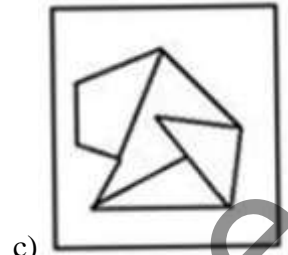
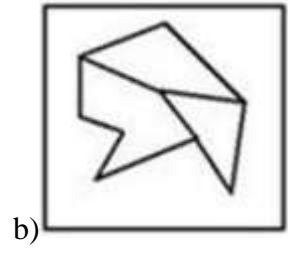
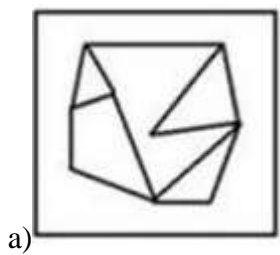
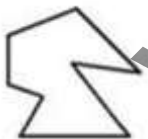
- 
- a)
  - b)
  - c)
  - d)

25. From the given answer figures, select the one in which the question figure is hidden/embedded.

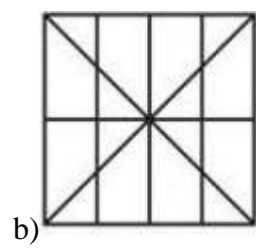
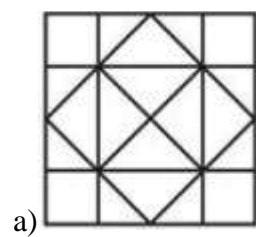
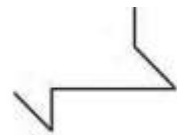


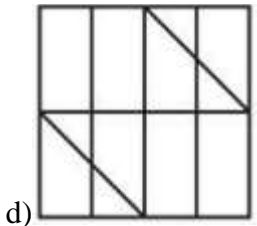
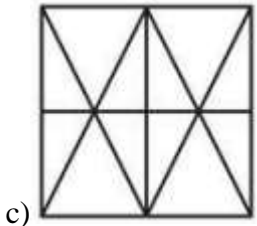


26. From the given answer figures, select the one in which the question figure is hidden/embedded.

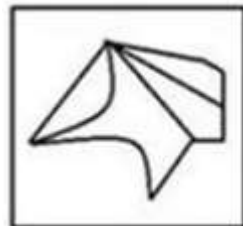
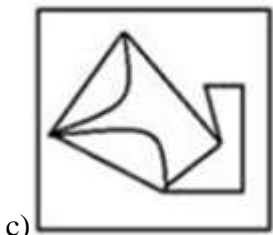




27. From the given answer figures, select the one in which the question figure is hidden/embedded.

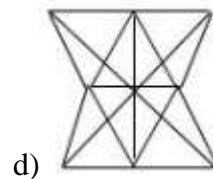
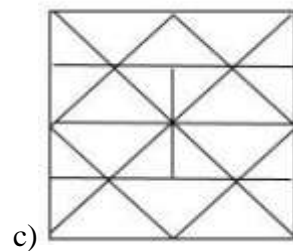
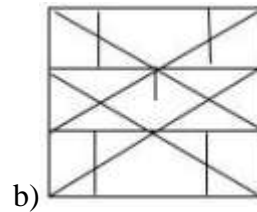
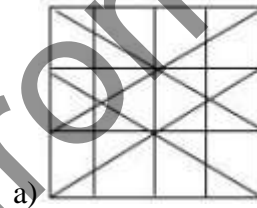




28. From the given answer figures, select the one in which the question figure is hidden/embedded. (Rotation is not allowed)

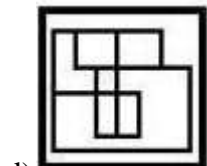
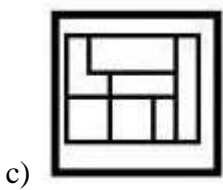
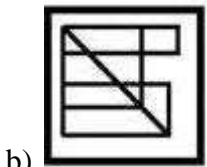
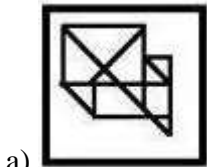
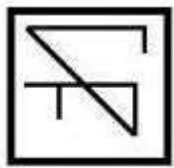


29. From the given answer figures, select the one in which the question figure is hidden/embedded.

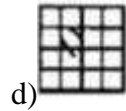
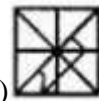
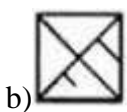
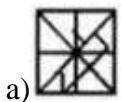


30. Select the option in which the given figure is embedded.

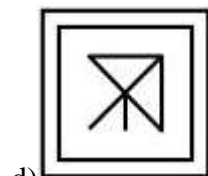

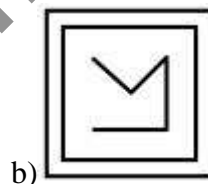





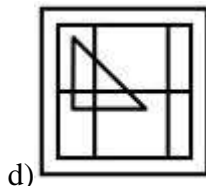
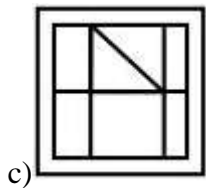
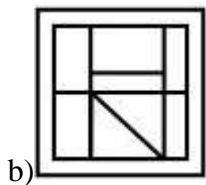
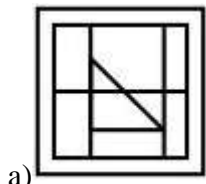

31. From the given answer figures, select the one in which the question figure is hidden/embedded.



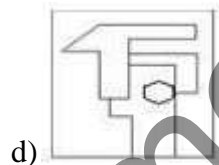
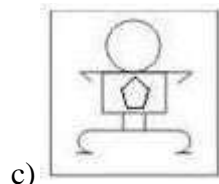
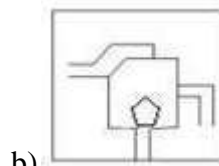
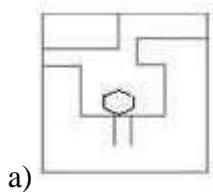
32. From the given answer figures, select the one in which the question figure is hidden/embedded.



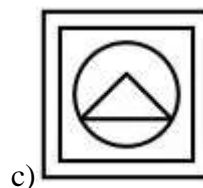
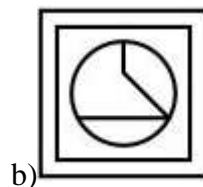
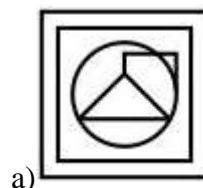
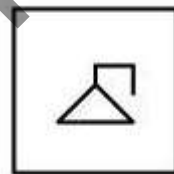
33. From the given answer figures, select the one in which the question figure is hidden/embedded.



34. Select the option in which the given figure is embedded.



35. From the given answer figures, select the one in which the question figure is hidden/embedded. (Rotation is not allowed).



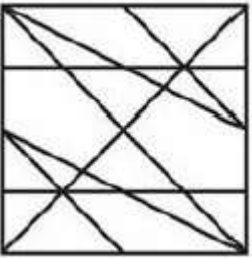


d)

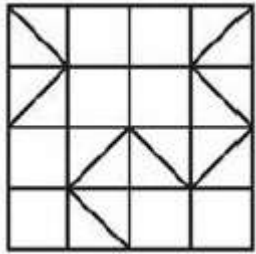
36. Select the option in which the given figure is embedded. (Rotation is not allowed).



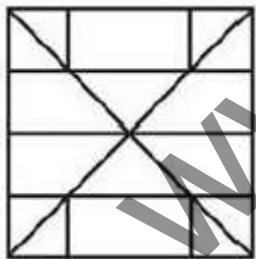
a)



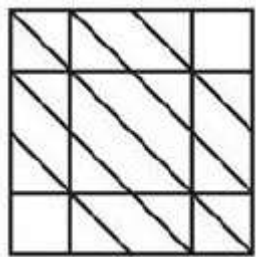
b)



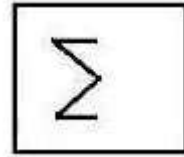
c)



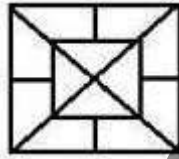
d)



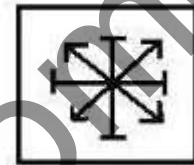
37. Select the option in which the given figure is embedded.




a)




b)



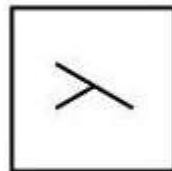
c)




d)

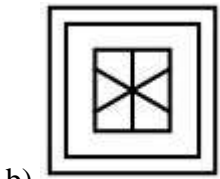


38. Select the option in which the figure is embedded.

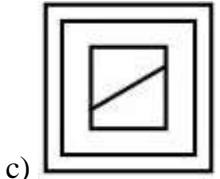


a)

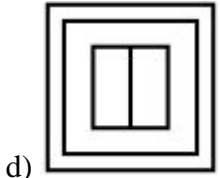




b)



c)



d)

39. Select the option in which the figure is embedded. (Rotation not allowed)



a)



b)



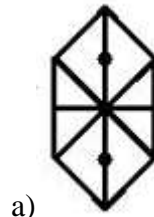
c)




d)



40. Select the option in which the figure is embedded.



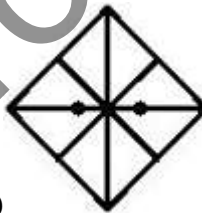
a)



b)



c)

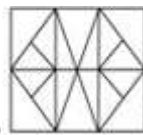


d)

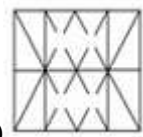
41. Select the option in which the figure is embedded.



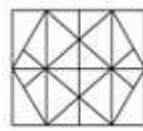
a)

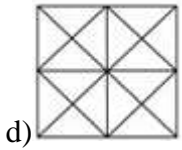


b)

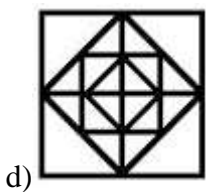
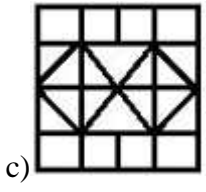
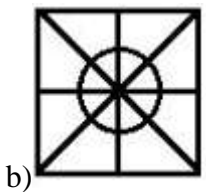
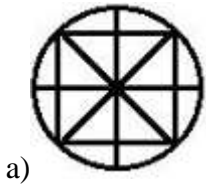


c)

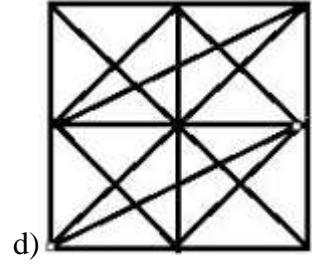
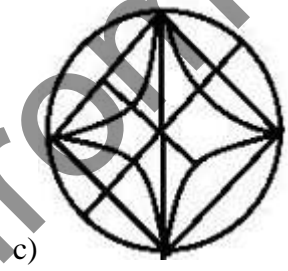
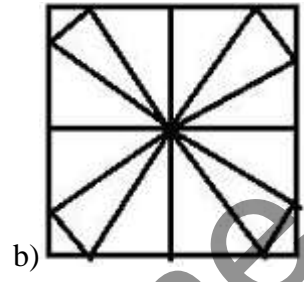
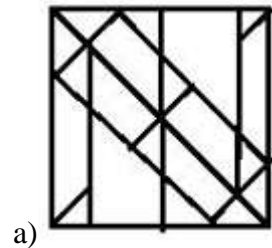
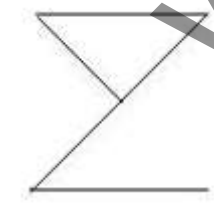




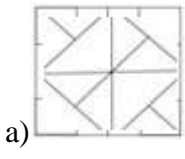
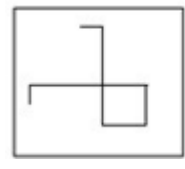
d)  
42. Select the option in which the figure is embedded.

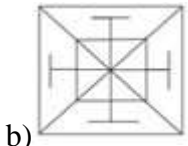


43. Select the option in which the figure is embedded.

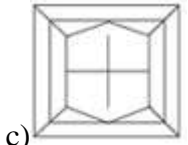


44. Select the option in which the figure is embedded.

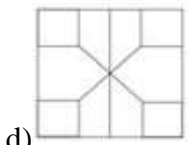




b)

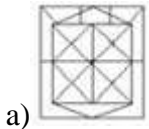


c)

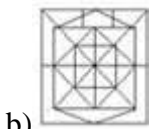


d)

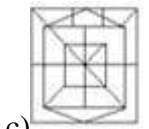
45. Select the option in which the figure is embedded. (Rotation is not allowed)



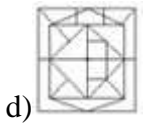
a)



b)

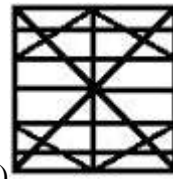


c)



d)

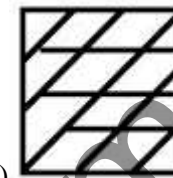
46. Select the option in which the figure is embedded.



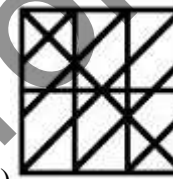
a)



b)

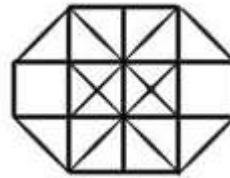
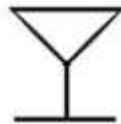


c)

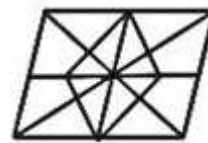


d)

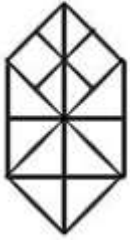
47. Select the option in which the figure is embedded.




a)



b)



c)



d)

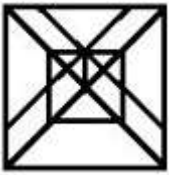
48. Select the option in which the figure is embedded.



a)




b)



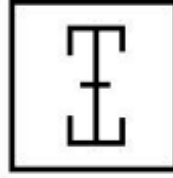
c)



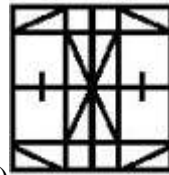
d)



49. Select the option in which the figure is embedded.



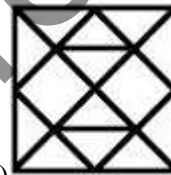
a)



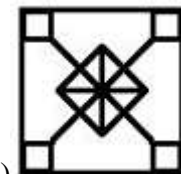
b)



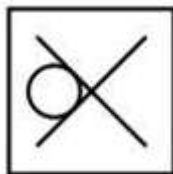
c)



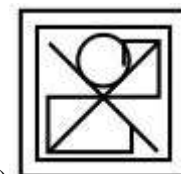
d)

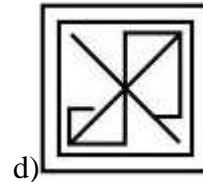
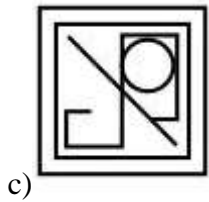
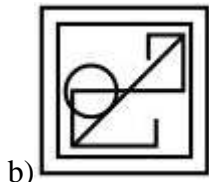


50. From the given answer figures, select the one in which the question figure is hidden/embedded.



a)





## ANSWERS

1) Answer: B

2) Answer: C

3) Answer: B

4) Answer: C

5) Answer: D

6) Answer: D

7) Answer: C

8) Answer: B

9) Answer: D

10) Answer: C

11) Answer: B

12) Answer: A

13) Answer: C

14) Answer: B

15) Answer: A

16) Answer: A)

17) Answer: B

18) Answer: D

19) Answer: C

20) Answer: B

21) Answer: C

22) Answer: A

23) Answer: C

24) Answer: B

25) Answer: B

26) Answer: C

27) Answer: D

28) Answer: C

29) Answer: A

30) Answer: A

31) Answer: A

32) Answer: A

33) Answer: D

34) Answer: C



35) Answer: A

36) Answer: D

37) Answer: A

38) Answer: B

39) Answer: C

40) Answer: C

41) Answer: C

42) Answer: D

43) Answer: D

44) Answer: B

45) Answer: B

46) Answer: A

47) Answer: A

48) Answer: B

49) Answer: A

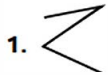
50) Answer: A

www.jkchrome.com

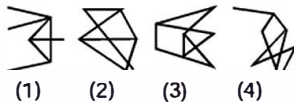
# EMBEDDED FIGURE

**Directions (1-2) :** In which answer figures is the given figure embedded?  
(SSC Combined Graduate Level Prelim Exam. 04.07.1999 (First Sitting))

**Question Figure :**



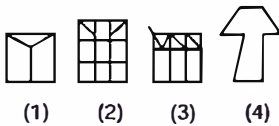
**Answer Figures :**



2. **Question Figure :**



**Answer Figures :**



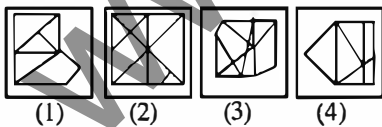
**Directions (3-4) :** In which answer figure is the question figure embedded?

(SSC Combined Graduate Level Prelim Exam. 04.07.1999 (IInd Sitting))

3. **Question Figure :**



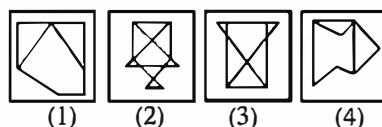
**Answer Figures :**



4. **Question Figure :**



**Answer Figures :**

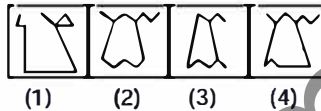


**Direction (5) :** In which answer figure is the question figure embedded?  
(SSC Combined Graduate Level Prelim Exam. 24.02.2002 (First Sitting))

5. **Question Figure :**



**Answer Figures :**

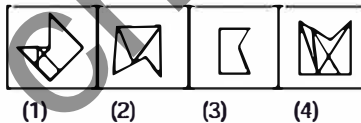


6. From the given answer figures, select the one in which question figure is hidden/embedded.

**Question Figures :**



**Answer Figures :**



(SSC Combined Graduate Level Prelim Exam. 27.02.2002 (IInd Sitting))

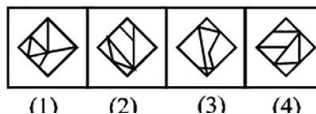
7. **Direction (7) :** In which answer figure is the question figure embedded?

(SSC Combined Graduate Level Prelim Exam. 24.02.2002 (Middle Zone))

**Question Figure :**

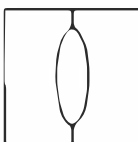


**Answer Figures :**

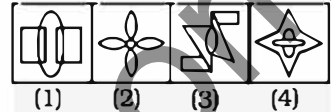


8. From the given answer figures, select the one in which the question figure is hidden/embedded.

**Question Figure :**



**Answer Figures :**



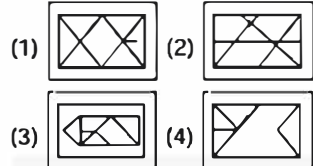
(SSC CPO Sub-Inspector Exam. 12.01.2003)

**Direction (9) :** In which answer figure is the question figure embedded?  
(SSC Combined Graduate Level Prelim Exam. 11.05.2003 (First Sitting))

9. **Question Figure :**



**Answer Figures :**

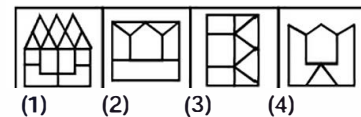


10. In which answer figure is the given question figure embedded?  
(SSC Combined Graduate Level Prelim Exam. 11.05.2003 (IInd Sitting))

**Question Figure :**




**Answer Figures :**

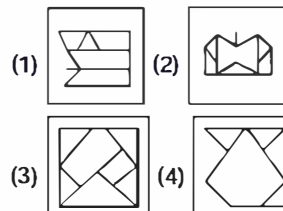


11. In which Answer Figure is the given figure embedded?

**Question Figure :**



**Answer Figures :**



(SSC Combined Graduate Level Prelim Exam. 08.02.2004 (IInd Sitting))

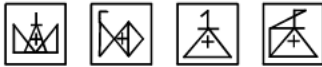
**EMBEDDED FIGURE**

12. In which Answer Figure is the given figure embedded ?

**Given Figure :**



**Answer Figures :**



(1) (2) (3) (4)

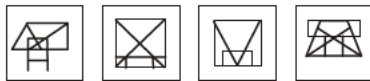
(SSC CPO Sub-Inspector Exam. 26.05.2005)

**Directions (13-14) :** In which answer figure is the given figure embedded ?

13. **Given Figure :**



**Answer Figures :**



(1) (2) (3) (4)

(SSC Statistical Investigators Grade-IV Exam. 31.07.2005)

14. **Given Figure :**



**Answer Figures :**



(1) (2) (3) (4)

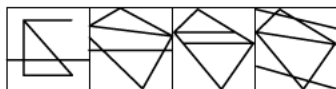
(SSC Statistical Investigators Grade-IV Exam. 31.07.2005)

15. In which answer figure is the question figure embedded ?

**Question Figures :**



**Answer Figures :**



(1) (2) (3) (4)

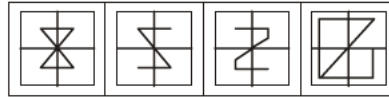
(SSC Combined Graduate Level Prelim Exam. 13.11.2005 (First Sitting))

16. In which answer figure is the question figure embedded ?

**Question Figure :**



**Answer Figures :**



(1) (2) (3) (4)

(SSC Combined Graduate Level Prelim Exam. 13.11.2005 (IInd Sitting))

17. In which answer figure is the given figure embedded ?

**Question Figure :**



**Answer Figures :**



(1) (2) (3) (4)


(SSC CPO Sub-Inspector Exam. 03.09.2006)

18. From the given answer figures, select the one in which the question figure is hidden/embedded.

**Question Figure :**



**Answer Figures :**



(1) (2) (3) (4)


(SSC Combined Graduate Level Prelim Exam. 04.02.2007 (First Sitting))

19. In which answer figure is the given figure embedded ?

**Question figure :**



**Answer figures :**



(1) (2) (3) (4)

(SSC Combined Graduate Level Prelim Exam. 04.02.2007 (Second Sitting))

20. In which answer figure is the question figure embedded ?

**Question Figure :**



**Answer Figures :**



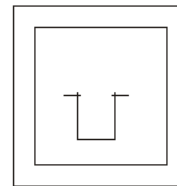
(1) (2) (3) (4)

(SSC CPO Sub-Inspector Exam. 16.12.2007)

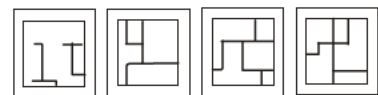
**Direction (21) :** In question no.21, from the Answer figures, select the one in which the question figure is hidden/embedded.

(SSC Combined Graduate Level Prelim Exam. 27.07.2008 (First Sitting))

21. **Question Figure :**



**Answer Figure :**



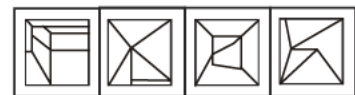
(1) (2) (3) (4)

22. From the given answer figures, select the one in which the question figure is hidden/embedded.

**Question Figure :**



**Answer Figures :**



(1) (2) (3) (4)

(SSC Combined Graduate Level Prelim Exam. 27.07.2008 (IInd Sitting))

**EMBEDDED FIGURE**

**Direction (23) :** In this question the given question figure is embedded in which given answer figure ?

(SSC CPO Sub-Inspector Exam. 09.11.2008)

**23. Question Figure :**




**Answer Figures :**



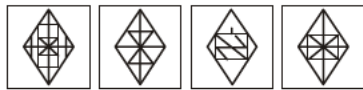
(1) (2) (3) (4)

**24. In which answer figure is the question figure embedded ?**

**Question Figure :**



**Answer Figures :**



(1) (2) (3) (4)

(SSC CPO Sub-Inspector Exam. 06.09.2009)

**25. From the given answer figures, select the one in which the question figure is hidden/embedded in the same direction.**

**Question Figure :**



**Answer Figures :**



(1) (2) (3) (4)

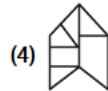
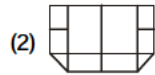
(SSC Combined Graduate Level Tier-1 Exam. 16.05.2010 (First Sitting))

**26. From the given answer figures, select the one in which the question figure is hidden/embedded.**

**Question Figure :**



**Answer Figures :**



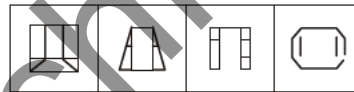
(SSC Combined Graduate Level Tier-I Exam. 16.05.2010 (Second Sitting))

**27. From the given answer figures, select the one in which the question figure is hidden/embedded in the same direction**

**Question Figure :**



**Answer Figures :**



(1) (2) (3) (4)

(SSC SAS Exam. 26.06.2010 (Paper-I))

**28. From the given answer figures, select the one in which the question figure is hidden/embedded.**

**Question Figure :**



**Answer Figures :**



(1) (2) (3) (4)

(SSC CISF ASI Exam. 29.08.2010 (Paper-I))

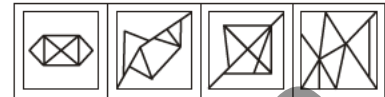
**Direction (29) :** From the given answer figures, select the one in each in which the question figure is hidden/embedded.

(SSC CPO Sub-Inspector Exam. 12.12.2010 (Paper-I))

**29. Question Figure :**



**Answer Figures :**



(1) (2) (3) (4)

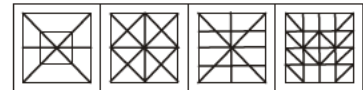
**Direction (30) :** From the given answer figures, select the one in which the question figure is hidden/embedded.

(SSC Combined Graduate Level Prelim Exam. 19.06.2011 (First Sitting))

**30. Question Figure :**



**Answer figures :**



(1) (2) (3) (4)

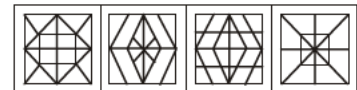
**Direction (31) :** From the given answer figures, select the one in which the question figure is hidden/embedded.

(SSC Combined Graduate Level Prelim Exam. 19.06.2011 (First Sitting))

**31. Question Figure :**



**Answer Figures :**

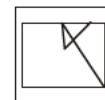


(1) (2) (3) (4)

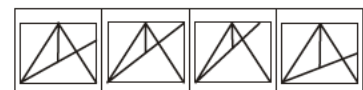
**Direction (32) :** From the given answer figures, select the one in which the question figure is hidden/embedded.

(SSC Combined Graduate Level Tier-1 Exam. 26.06.2011 (First Sitting))

**32. Question Figure :**



**Answer Figures :**



(1) (2) (3) (4)

**EMBEDDED FIGURE**

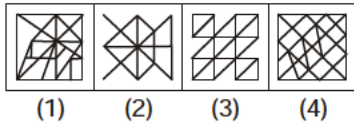
**Direction (33) :** From the given answer figures, select the one in which the question figure is hidden/embedded.

(SSC Combined Graduate Level Tier-1 Exam. 26.06.2011 (Second Sitting))

**33. Question Figure :**



**Answer Figures :**

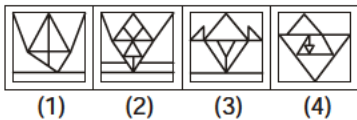


**34. From the given answer figures, select the one in which the question figure is hidden/ embedded.**

**Question Figure :**



**Answer Figures :**



(SSC CPO (SI, ASI & Intelligence Officer) Exam. 28.08.2011 (Paper-I))

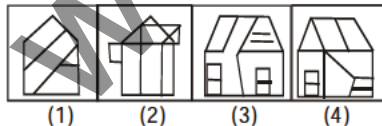
**Directions (35-39) :** In each of the following questions from the given answer figures, select the one in which the question figure is hidden/embedded.

(SSC Combined Matric Level (PRE) Exam. 24.10.1999 (1st Sitting))

**35. Question Figure :**



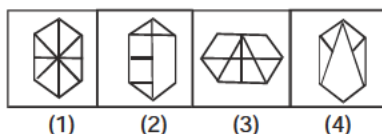
**Answer Figures :**



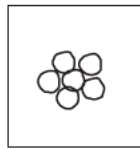
**36. Question Figure :**



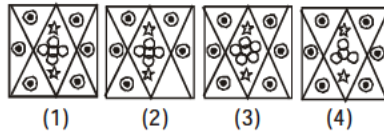
**Answer Figures :**



**37. Question Figure :**



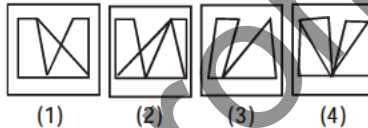
**Answer Figures :**



**38. Question Figure :**



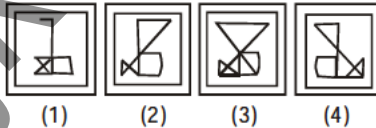
**Answer Figures :**



**39. Question Figure :**



**Answer Figures :**



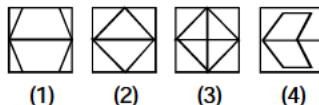
**Directions (40-44) :** In each of the following questions from the given answer figures, select the one in which the question figure is hidden/ embedded.

(SSC Combined Matric Level (PRE) Exam. 24.10.1999 (IInd Sitting))

**40. Question Figure :**



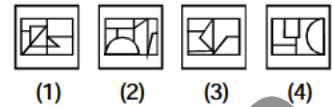
**Answer Figures :**



**41. Question Figure :**



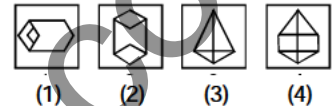
**Answer Figures :**



**42. Question Figure :**



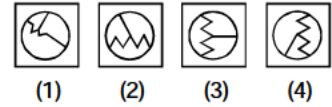
**Answer Figures :**



**43. Question Figure :**



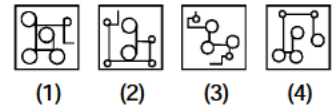
**Answer Figures :**



**44. Question Figure :**



**Answer Figures :**



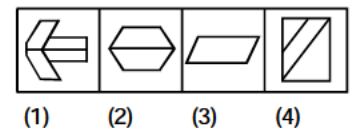
**Directions (45-47) :** In which answer figure is the question figure embedded?

(SSC Combined Matric Level (PRE) Exam. 21.05.2000 (1st Sitting) (East Zone))

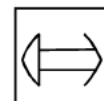
**45. Question Figure :**



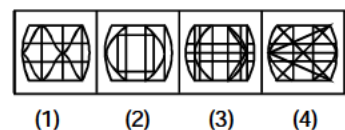
**Answer Figures :**



**46. Question Figure :**



**Answer Figures :**

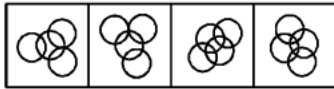


**EMBEDDED FIGURE**

**47. Question Figure :**



**Answer Figures :**



(1) (2) (3) (4)

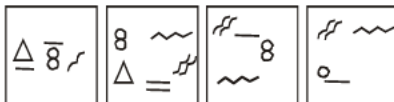
**Direction (48) :** In question in which answer figure specified components of question figure are found?

(SSC Combined Matric Level (PRE)  
Exam. 21.05.2000 (1st Sitting)  
(Raipur, Madhya Pradesh)

**48. Question Figure :**



**Answer Figures :**



(1) (2) (3) (4)

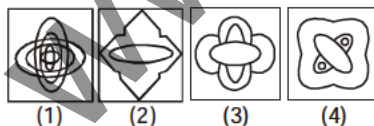
**Directions (49-52) :** In following questions from the given answer figures, select the one in which the question figure is hidden/embedded

(SSC Combined Matric Level (PRE)  
Exam. 21.05.2000 (1st Sitting)  
(Raipur, Madhya Pradesh)

**49. Question Figure :**



**Answer Figures :**

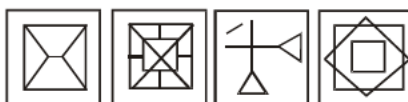


(1) (2) (3) (4)

**50. Question Figure :**

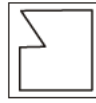


**Answer Figures :**

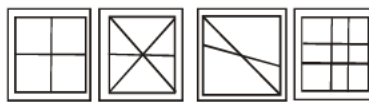


(1) (2) (3) (4)

**51. Question Figure :**



**Answer Figures :**

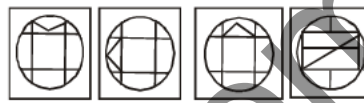


(1) (2) (3) (4)

**52. Question Figure :**



**Answer Figures :**



(1) (2) (3) (4)

**Directions (53-56) :** From the given answer figures, select the one in which the question figure is hidden/embedded.

(SSC Combined Matric Level (PRE)  
Exam. 21.05.2000 (1st Sitting)  
(Middle Zone)

**53. Question Figure :**



**Answer Figures :**



(1) (2) (3) (4)

**54. Question Figure :**



**Answer Figures :**



(1) (2) (3) (4)

**55. Question Figure :**



**Answer Figures :**



(1) (2) (3) (4)

**56. Question Figure :**



**Answer Figures :**



(1) (2) (3) (4)

**Directions (57-60) :** From the answer figures, select the one in which the question figure is hidden/embedded.

(SSC Combined Matric Level (PRE)  
Exam. 21.05.2000 (IInd Sitting)  
(Middle Zone, Allahabad)

**57. Question Figure :**



**Answer Figures :**

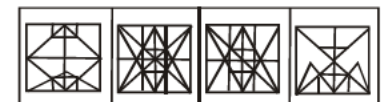


(1) (2) (3) (4)

**58. Question Figure :**



**Answer Figures :**



(1) (2) (3) (4)

**59. Question Figure :**



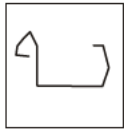
**Answer Figures :**



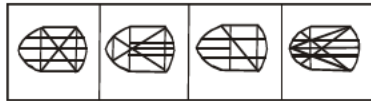
(1) (2) (3) (4)

**EMBEDDED FIGURE**

**60. Question Figure :**



**Answer Figures :**




(1) (2) (3) (4)

**61. In which of the answer figures specified components of question figure are found?**

**Question figure :**



**Answer figures :**



(1) (2) (3) (4)

(SSC Combined Matric Level (PRE) Exam. 13.05.2001 (1st Sitting))

**62. Which answer figure contains the question figure?**

**Question figure :**



**Answer figures :**



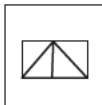
(1) (2) (3) (4)

(SSC Combined Matric Level (PRE) Exam. 13.05.2001 (1st Sitting))

**Directions (63-64) :** In the following questions from the given answer figures, select the one in which the question figure is hidden/embedded.

(SSC Combined Matric Level (PRE) Exam. 13.05.2001 (1st Sitting))

**63. Question Figure :**



**Answer Figures :**

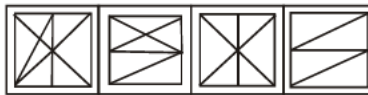


(1) (2) (3) (4)

**64. Question Figure :**



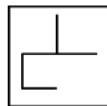
**Answer Figures :**



(1) (2) (3) (4)

**65. From the given answer figures, select the one in which the question figure is hidden/embedded.**

**Question Figure :**



**Answer Figures :**



(1) (2) (3) (4)

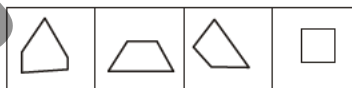
(SSC Combined Matric Level (PRE) Exam. 27.05.2001 (1st Sitting) (East Zone))

**66. Which of the answer figures is embedded in the question figure?**

**Question Figure :**



**Answer Figures :**



(1) (2) (3) (4)

(SSC Combined Matric Level (PRE) Exam. 05.05.2002 (1st Sitting) (Eastern Zone, Guwahati))

**Direction (67) :** In question nos. 67 and 68, in which one of the answer figures is the question figure embedded ?

(SSC Combined Matric Level (PRE) Exam. 05.05.2002 (1st Sitting) (Eastern Zone, Guwahati))

**67. Question Figure :**

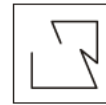


**Answer Figures :**



(1) (2) (3) (4)

**68. Question Figure :**



**Answer Figures :**



(1) (2) (3) (4)

(SSC Combined Matric Level (PRE) Exam. 05.05.2002 (1st Sitting) (Eastern Zone, Guwahati))

**69. Select the answer figure in which the question figure is hidden.**

**Question Figure :**



**Answer Figures :**



(1) (2) (3) (4)

(SSC Combined Matric Level (PRE) Exam. 05.05.2002 (1st Sitting) (Eastern Zone, Guwahati))

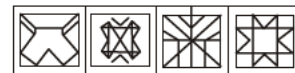
**Directions (70-71) :** Which one of the answer figures is embedded within the question figure ?

(SSC Combined Matric Level (PRE) Exam. 05.05.2002 (1st Sitting) (Eastern Zone, Guwahati))

**70. Question Figure :**



**Answer Figures :**



(1) (2) (3) (4)

**71. Question Figure :**



**Answer Figures :**



(1) (2) (3) (4)

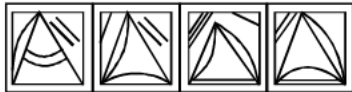
**EMBEDDED FIGURE**

**72. In which answer figure is the question figure embedded?**

**Question Figure :**



**Answer Figures :**



(1) (2) (3) (4)

(SSC Combined Matric Level (PRE) Exam. 05.05.2002 (1st Sitting) (North Zone, Delhi))

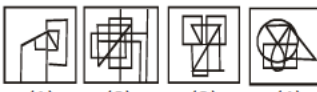
**Directions (73-74) :** Select the answer figure in which the question figure is hidden :

(SSC Combined Matric Level (Pre) Exam. 05.05.2002 (IInd Sitting) (North Zone Delhi))

**73. Question Figure :**



**Answer Figures :**



(1) (2) (3) (4)

**74. Question Figure :**



**Answer Figures :**



(1) (2) (3) (4)

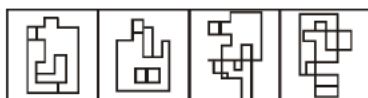
**Directions (75-77) :** From the given Answer Figures select the one in which the question figure is hidden/embedded.

(SSC Combined Matric Level (Pre) Exam. 12.05.2002 (1st Sitting))

**75. Question Figure :**



**Answer Figures :**



(1) (2) (3) (4)

**76. Questions Figure :**



**Answer Figures :**



(1) (2) (3) (4)

**77. Question Figure :**



**Answer Figures :**

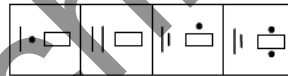


(1) (2) (3) (4)

**78. Question Figure :**



**Answer Figures :**



(1) (2) (3) (4)

(SSC Combined Matric Level (Pre) Exam. 12.05.2002 (IInd Sitting))

**Directions (79-80) :** In each of the following questions from the given answer figures, select the one in which the question figure is hidden/embedded.

(SSC Combined Matric Level (Pre) Exam. 12.05.2002 (IInd Sitting))

**79. Question Figure :**



**Answer Figures :**



(1) (2) (3) (4)

**80. Question Figure :**



**Answer Figures :**



(1) (2) (3) (4)

**Direction (81) :** From the given answer figures, select the one in which the question figure is hidden/embedded.

(SSC Combined Matric Level (Pre) Exam. 30.07.2006 (1st Sitting) (East Zone))

**81. Question Figure :**



**Answer Figures :**

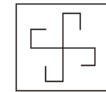


(1) (2) (3) (4)

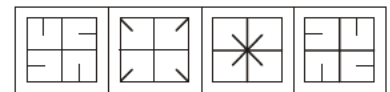
**Directions (82-83) :** From the given answer figures, select the one in which the question figure is hidden/embedded.

(SSC Combined Matric Level (Pre) Exam. 30.07.2006 (IInd Sitting) (Central Zone))

**82. Questions Figure :**



**Answer Figures :**



(1) (2) (3) (4)

**83. Question Figure :**



**Answer Figures :**

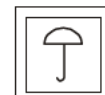


(1) (2) (3) (4)

**Directions (84-85) :** From the given answer figures, select the one in which the question figure is hidden/embedded.

(SSC Combined Matric Level (Pre) Exam. 30.03.2008 (1st Sitting))

**84. Question Figure :**



**Answer Figures :**

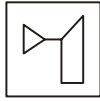


(1) (2) (3) (4)

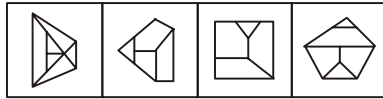


**EMBEDDED FIGURE**

85. Question Figure :



Answer Figures :



(1) (2) (3) (4)

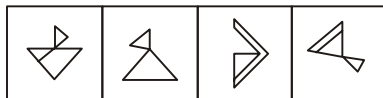
Directions (86-87) : Which one of the answer figures is hidden in the following question figure ?

SSC Combined Matric Level (Pre) Exam. 30.03.2008 (1st Sitting)

86. Question Figure :

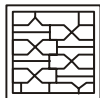


Answer Figures :



(1) (2) (3) (4)

87. Question Figure :



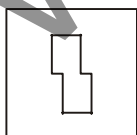
Answer Figures :



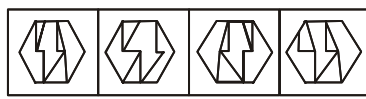
(1) (2) (3) (4)

88. From the given answer figures, select the one in which the question figure is hidden/embedded?

Question Figure :



Answer Figures :



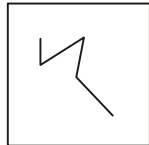
(1) (2) (3) (4)

SSC Data Entry Operator Exam. 31.08.2008

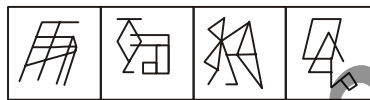
Direction (89) : From the given answer figures, select the one in which the question figure is hidden/embedded.

SSC Data Entry Operator Exam. 02.08.2009

89. Question Figures :



Answer Figures :



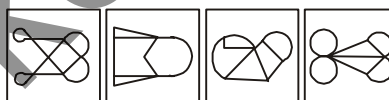
(1) (2) (3) (4)

90. From the given answer figures, select the one in which the question figure is hidden/embedded :

Question Figure :



Answer Figures :



(1) (2) (3) (4)

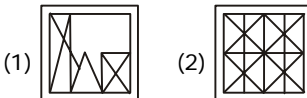
SSC Stenographer (Grade 'C' & 'D') Exam. 26.09.2010

91. From the given answer figures, select the one in which the question figure is hidden/embedded.

Question Figure :



Answer Figures :



(1) (2)

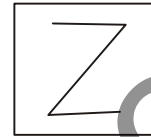


(3) (4)

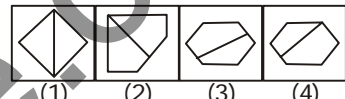
(SSC Stenographer Grade 'C' & 'D' Exam. 09.01.2011)

92. From the following answer figures, select the one in which the given question figure is hidden/embedded.

Question Figure :



Answer Figures :

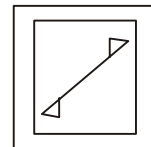


(1) (2) (3) (4)

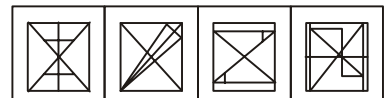
(SSC Stenographer (Grade 'C' & 'D') Exam. 16.10.2011)

93. Select the answer figure in which the question figure is hidden/embedded.

Question Figures :



Answer Figures :

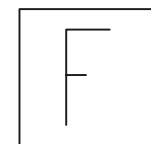


(1) (2) (3) (4)

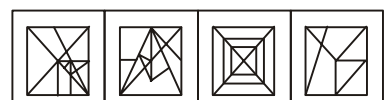
SSC (10+2) Level Data Entry Operator & LDC Exam. 04.12.2011 (1st Sitting (North Zone))

94. Select the answer figure in which the question figure is hidden/embedded.

Question Figure :



Answer Figures :



(1) (2) (3) (4)

SSC (10+2) Level Data Entry Operator & LDC Exam. 04.12.2011 (IInd Sitting) (North Zone)

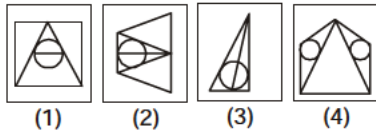
**EMBEDDED FIGURE**

95. Select the answer figure in which the question figure is hidden/embedded.

**Question Figure :**



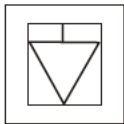
**Answer Figures :**



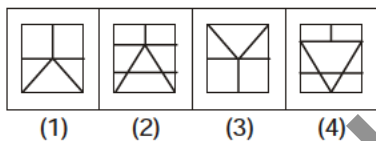
SSC (10+2) Level Data Entry Operator & LDC Exam. 04.12.2011 (Ist Sitting (East Zone))

96. Select the answer figure in which the question figure is hidden/embedded.

**Question Figure :**



**Answer Figures :**



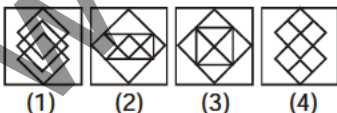
SSC (10+2) Level Data Entry Operator & LDC Exam. 04.12.2011 (IInd Sitting (East Zone))

97. Select the answer figure in which the question figure is hidden/embedded.

**Question Figure :**



**Answer Figures :**



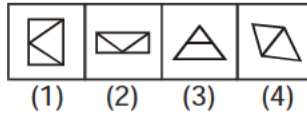
SSC (10+2) Level Data Entry Operator & LDC Exam. 11.12.2011 (Ist Sitting (Delhi Zone))

98. Select the answer figure in which the question figure is hidden/embedded.

**Question Figure :**



**Answer Figures :**



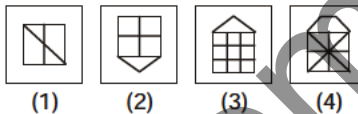
SSC (10+2) Level Data Entry Operator & LDC Exam. 11.12.2011 (IInd Sitting (Delhi Zone))

99. Select the answer figure in which the question figure is hidden/embedded.

**Question Figure :**



**Answer Figures :**



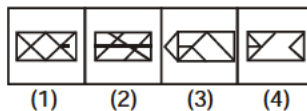
SSC (10+2) Level Data Entry Operator & LDC Exam. 11.12.2011 (Ist Sitting (East Zone))

100. Select the answer figure in which the question figure is hidden/embedded.

**Question Figure :**



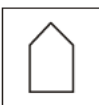
**Answer Figures :**



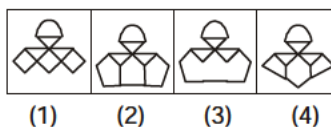
SSC (10+2) Level Data Entry Operator & LDC Exam. 11.12.2011 (IInd Sitting (East Zone))

101. Select the answer figure in which the question figure is hidden/embedded.

**Question Figure :**



**Answer Figures :**



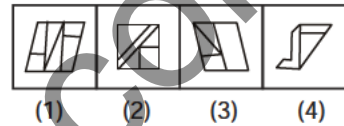
SSC Constable (GD) & Rifleman (GD) Exam. 22.04.1912 (Ist Sitting)

102. Select the answer figure in which the question figure is hidden/embedded.

**Question Figure :**



**Answer Figures :**



SSC Constable (GD) & Rifleman (GD) Exam. 22.04.1912 (IInd Sitting)

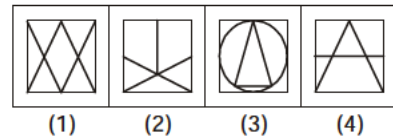
**Directions (103-105) :** In each of the following questions, from the given answer figures, select the one in which the question figure is hidden/embedded.

(SSC Level Data Entry Operator & LDC Exam.21.10.2012 (Ist Sitting))

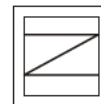
103. Question Figure :



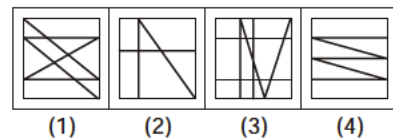
**Answer Figures :**



104. Question Figure



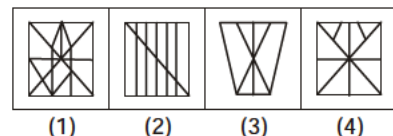
**Answer Figures :**



105. Question Figure :



**Answer Figures :**



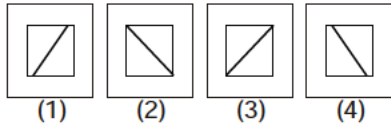
**EMBEDDED FIGURE**

**106.** From the given answer figures, select the one in which the question figure is hidden/embedded.

**Question Figure :**



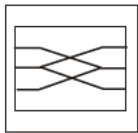
**Answer Figures :**



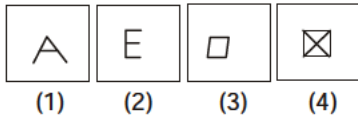
(SSC Level Data Entry Operator & LDC Exam.21.10.2012 (IInd Sitting))

**107.** Which answer figure is the part of the following complete form of question figure?

**Question Figure :**



**Answer Figures :**



(SSC Level Data Entry Operator & LDC Exam.21.10.2012 (IInd Sitting))

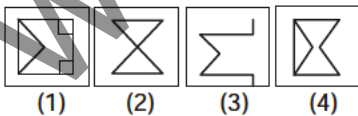
**Directions (108-109) :** In each of the following question, from the given answer figures, select the one in which the question figure is hidden/embedded.

(SSC Level Data Entry Operator & LDC Exam.21.10.2012 (IInd Sitting))

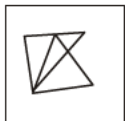
**108. Question Figure :**



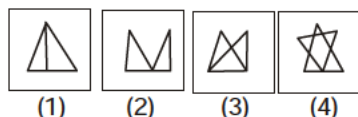
**Answer Figures :**



**109. Question Figure :**



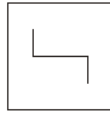
**Answer Figures :**



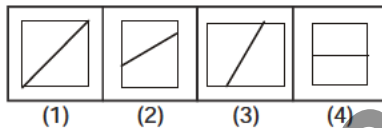
**Directions (110-111) :** In each of the following questions, from the given answer figures, select the one in which the question figure is hidden/embedded.

(SSC Level Data Entry Operator & LDC Exam.28.10.2012 (1st Sitting))

**110. Question Figure :**



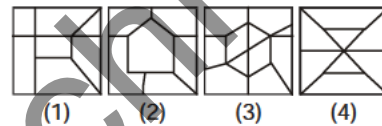
**Answer Figures :**



**111. Question Figure :**



**Answer Figures :**



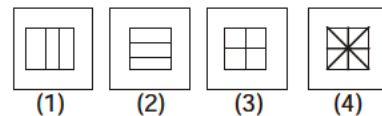
**Directions (112-114) :** In each of the following questions, from the given answer figures, select the one in which the question figure is hidden/embedded.

(SSC Level Data Entry Operator & LDC Exam.28.10.2012 (1st Sitting))

**112. Question Figure :**



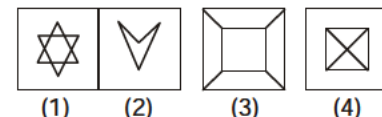
**Answer Figures :**



**113. Question Figure :**



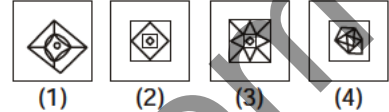
**Answer Figures :**



**114. Question Figure :**



**Answer Figures :**

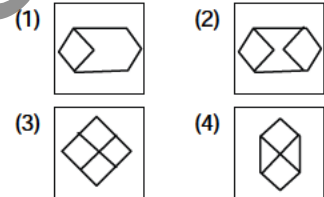


**115.** From the given answer figures, select the one in which the question figure is hidden/embedded.

**Question Figure :**



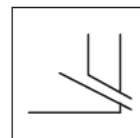
**Answer Figures :**



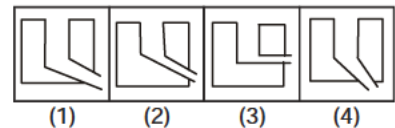
(SSC Level Data Entry Operator & LDC Exam.04.11.2012 (IInd Sitting))

**116.** Select the answer figure in which the question figure is hidden.

**Question Figure :**



**Answer Figures :**



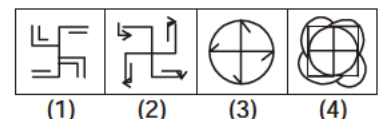
(SSC Assistant Grade-III Exam.11.11.2012 (IInd Sitting))

**117.** Select the answer figure in which the question figure is hidden/embedded.

**Question Figure :**



**Answer Figures :**




(FCI Assistant Grade-II Exam. 22.01.2012 Paper-I)

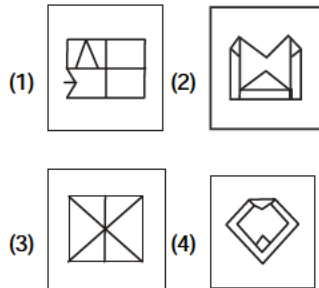
**EMBEDDED FIGURE**

**118.** Select the answer figure in which the question figure is hidden/embedded.

**Question Figure :**



**Answer Figures :**



FCI Assistant Grade-III Exam. 25.02.2012 (Paper-I)

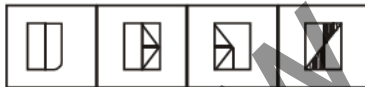
**North Zone (1st Sitting)**

**119.** Select the answer figure in which the question figure is hidden/embedded.

**Question Figure :**



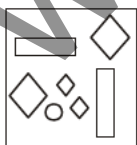
**Answer Figures :**



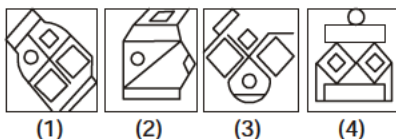
FCI Assistant Grade-III Exam. 05.02.2012 (Paper-I) East Zone (IInd Sitting)

**120.** Which answer figure includes all the components given in the question figure ?

**Question Figure :**



**Answer Figures :**



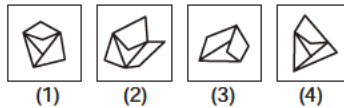
(SSC Graduate Level Tier-I Exam. 21.04.2013, 1st Sitting)

**121.** Identify the response figure from which the question figure's pieces have been cut.

**Question Figure**



**Answer Figures**



(SSC Graduate Level Tier-I Exam. 21.04.2013, IInd Sitting)

**122.** Which of the answer figures is not made up of only the components of the key figure (question figure) ?

**Question Figure :**



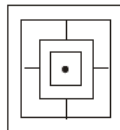
**Answer Figures :**



(SSC Graduate Level Tier-I Exam. 19.05.2013, 1st Sitting)

**123.** Find out which of the answer figures will exactly make up the question figure ?

**Question Figure :**



**Answer Figures :**



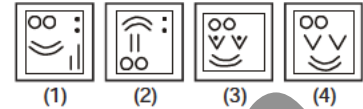
(SSC Graduate Level Tier-I Exam. 19.05.2013, IInd Sitting)

**124.** Find out which of the following answer figures will exactly make up the question figure ?

**Question Figure :**



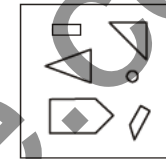
**Answer Figures**



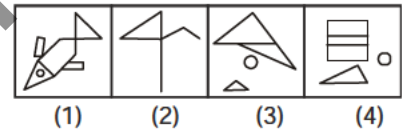
(SSC Graduate Level Tier-I Exam. 19.05.2013, IInd Sitting)

**125.** Which of the answer figures includes the separate components found in the question figure ?

**Question Figure :**



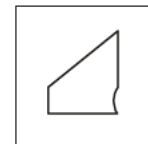
**Answer Figures :**



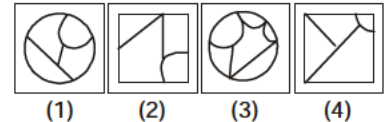
(SSC Graduate Level Tier-I Exam. 19.05.2013, 1st Sitting)

**126.** From the given answer figures, select the one in which the question figure is hidden/embedded.

**Question Figure :**



**Answer Figures :**



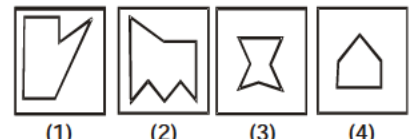
(SSC (10+2) Level Data Entry Operator & LDC Exam. 04.11.2012, 1st Sitting)

**127.** Which of the answer figure is hidden/ embedded in the question figure ?

**Question Figure :**



**Answer Figures :**



(SSC Multi-Tasking Staff Exam. 10.03.2013, 1st Sitting : Patna)

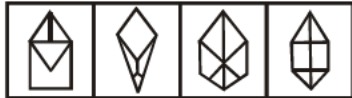
**EMBEDDED FIGURE**

128. From the given answer figures, select the one in which the question figure is hidden/ embedded.

**Question Figure :**



**Answer Figures :**



(1) (2) (3) (4)

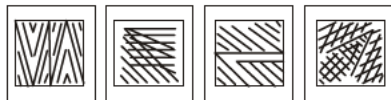
(SSC Multi-Tasking Staff Exam. 10.03.2013)

129. From the given answer figures, select the one in which the question figure is hidden/ embedded

**Question Figure :**



**Answer Figures :**

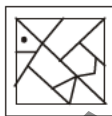


(1) (2) (3) (4)

(SSC Multi-Tasking Staff Exam. 17.03.2013, Kolkata Region)

130. Which of the answer figure is embedded in the question figure?

**Question Figure :**



**Answer Figures :**

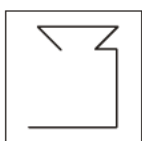


(1) (2) (3) (4)

(SSC Multi-Tasking Staff Exam. 24.03.2013, 1st Sitting)

131. From the given answer figures, select the one in which the question figure is hidden/embedded.

**Question Figure :**



**Answer Figures :**

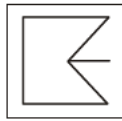


(1) (2) (3) (4)

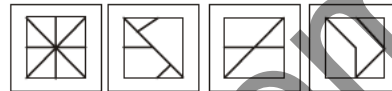
(SSC Graduate Level Tier-I Exam. 21.04.2013, 1st Sitting)

132. From the given answer figures, select the one in which the question figure is hidden/ embedded.

**Question Figure :**



**Answer Figures :**



(1) (2) (3) (4)

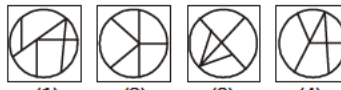
(SSC Graduate Level Tier-I Exam. 21.04.2013, IIInd Sitting)

133. From the given answer figures, select the one in which the question figure is hidden/ embedded.

**Question Figure :**



**Answer Figures :**



(1) (2) (3) (4)

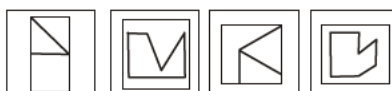
(SSC Graduate Level Tier-I Exam. 21.04.2013, IIInd Sitting)

134. Select the answer figure in which the question figures are hidden/ embedded.

**Question Figures :**



**Answer Figures :**

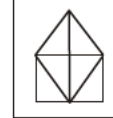


(1) (2) (3) (4)

(SSC Constable (GD) Exam. 12.05.2013)

135. From the given answer figures, select the one in which the question figure is hidden/ embedded.

**Question Figure :**



**Answer Figures :**

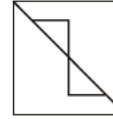


(1) (2) (3) (4)

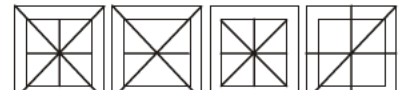
(SSC Constable (GD) Exam. 12.05.2013)

136. From the given answer figures, select the one in which the question figure is hidden/ embedded.

**Question Figure :**



**Answer Figures :**



(1) (2) (3) (4)

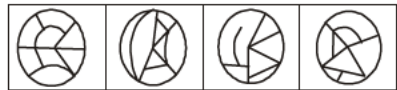
(SSC Constable (GD) Exam. 12.05.2013 1st Sitting)

137. From the given answer figures, select the one in which the question figure is hidden/ embedded.

**Question Figure :**



**Answer Figures :**



(1) (2) (3) (4)

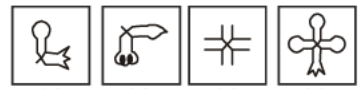
(SSC Graduate Level Tier-I Exam. 19.05.2013, 1st Sitting)

138. Which one of the answer figures is hidden in the following question figure ?

**Question Figure :**



**Answer Figures :**



(1) (2) (3) (4)

(SSC Graduate Level Tier-I Exam. 19.05.2013, IIInd Sitting)

**EMBEDDED FIGURE**

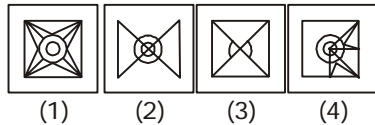
**Directions (139-140) :** In each of the following questions, select the answer figure in which the question figure is hidden/embedded.

(SSC CAPFs SI & CISF ASI Exam. 23.06.2013)

**139. Question Figure:**



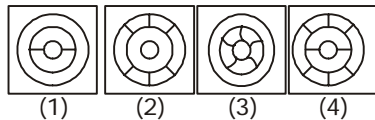
**Answer Figures:**



**140. Question Figure:**

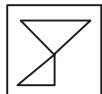


**Answer Figures:**

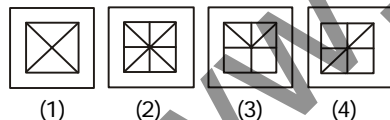


**141. From the given answer figures, select the one in which the question figure is hidden/embedded.**

**Question Figure :**



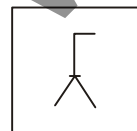
**Answer Figures :**



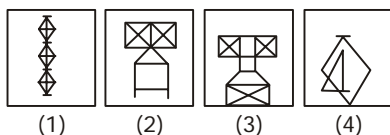
(SSC Cabinet Secretariat RO (ECO), DFO (T) & DFO (GD) Tier-I Exam. 23.06.2013)

**142. From the given answer figures, select the one in which the question figure is hidden/embedded?**

**Question Figure :**



**Answer Figures :**



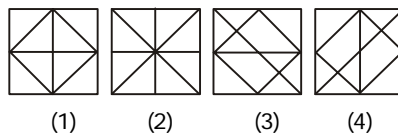
(SSC Multi-Tasking (Non-Tech.) Staff Exam. 16.02.2014)

**143. From the given answer figures, select the one in which the question figure is hidden/embedded.**

**Question Figure :**



**Answer figures :**



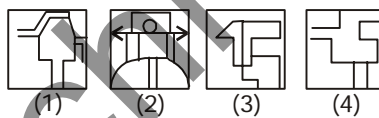
(SSC Multi-Tasking Staff (Patna) Exam. 16.02.2014)

**144. From the given answer figures, select the one in which the question figure is hidden/embedded.**

**Question Figure :**



**Answer Figures :**

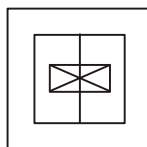


(SSC Multi-Tasking (Non-Tech.) Staff Exam. 23.02.2014, IInd Sitting)

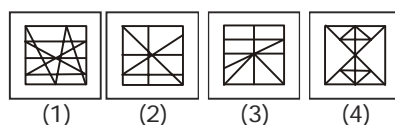
**Directions (145-146) :** In each of the following questions, from the given answer figures, select the one in which the question figure is hidden/embedded.

(SSC CGL Tier-I Re-Exam-2013, 27.04.2014)

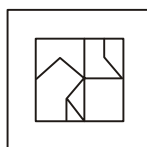
**145. Question Figure :**



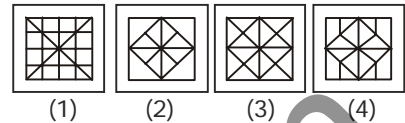
**Answer Figures :**



**146. Question Figure :**

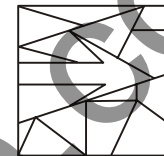


**Answer Figures :**

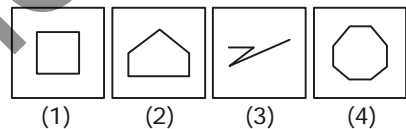


**147. From the given answer figures, select the one which is hidden/embedded, in the question figure.**

**Question Figure :**



**Answer Figures :**



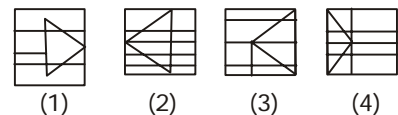
(SSC CGL Tier-I Re-Exam-2013, 27.04.2014)

**148. From the given answer figures, select the one in which the question figure is hidden/embedded.**

**Question Figure :**



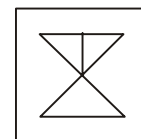
**Answer Figures :**



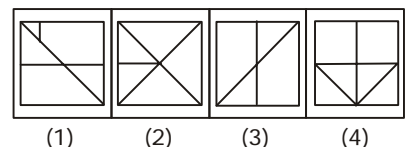
(SSC CAPFs SI, CISF ASI & Delhi Police SI Exam. 22.06.2014)

**149. From the given answer figures, select the one in which the question figure is hidden/embedded.**

**Question Figure :**



**Answer Figures :**



(SSC CAPFs SI, CISF ASI & Delhi Police SI Exam. 22.06.2014)

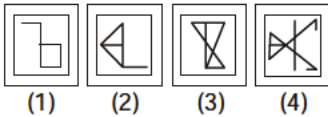
**EMBEDDED FIGURE**

150. From the given answer figures, select the one in which the question figure is hidden/embedded.

**Question Figure :**



**Answer Figures :**



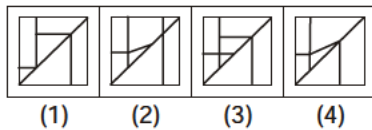
(SSC GL Tier-I Re-Exam. (2013) 20.07.2014, 1st Sitting)

151. From the given answer figures, select the one in which the question figure is hidden/embedded.

**Question Figure :**



**Answer Figures :**



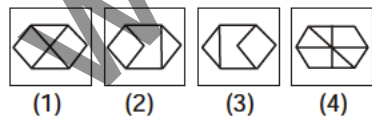
(SSC GL Tier-I Re-Exam. (2013) 20.07.2014, IIInd Sitting)

152. From the given answer figures, select the one in which the question figure is hidden/embedded.

**Question Figure :**



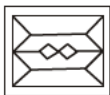
**Answer Figures :**



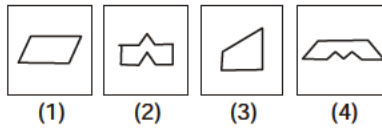
(SSC GL Tier-I Exam.19.10.2014, 1st Sitting & Bihar SSC 2nd CGL (Pre) Exam. 23.20.2015)

153. From the given answer figures select the figure which is hidden/embedded in the question figure.

**Question Figure :**



**Answer Figure :**



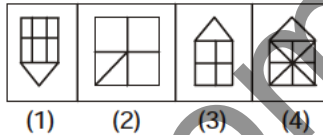
(SSC GL Tier-I Exam. 19.10.2014)

154. From the given answer figures, select the one in which the question figure is hidden/embedded.

**Question Figure :**



**Answer Figures :**



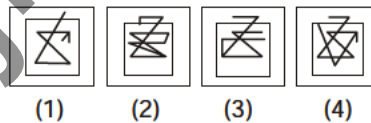
(SSC GL Tier-I Exam. 26.10.2014)

155. From the given answer figures, select the one in which the question figure is hidden/embedded.

**Question Figure :**



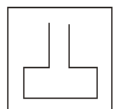
**Answer Figures :**



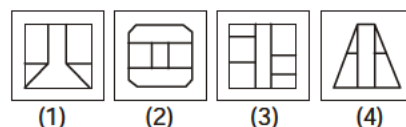
(SSC CHSL (10+2) DEO & LDC Exam. 02.11.2014, Patna Region : 1st Sitting)

156. From the given answer figures, select the one in which the question figure is hidden/embedded.

**Question Figure :**



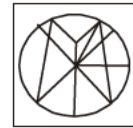
**Answer Figures :**



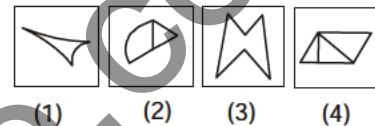
(SSC CHSL (10+2) DEO & LDC Exam. 02.11.2014, IIInd Sitting)

157. Which of the answer figures is embedded in the question figure ?

**Question Figure :**



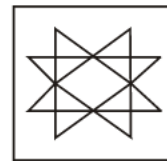
**Answer Figures :**



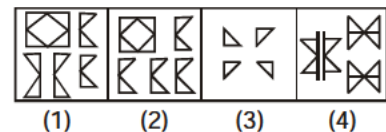
(SSC CHSL (10+2) DEO & LDC Exam. 09.11.2014)

158. Select the appropriate answer figure from which the question figure is formed.

**Question Figure :**



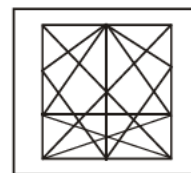
**Answer Figures :**



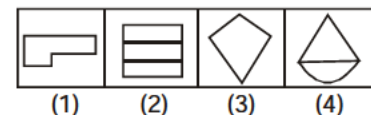
(SSC CHSL (10+2) DEO & LDC Exam. 16.11.2014, Patna Region : 1st Sitting)

159. Which of the answer figures is embedded in the question figure ?

**Question Figure :**



**Answer Figures :**

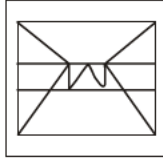


(SSC CHSL (10+2) DEO & LDC Exam. 16.11.2014, Patna Region : 1st Sitting)

**EMBEDDED FIGURE**

160. Which of the answer figures is embedded in the question figure ?

**Question Figure :**



**Answer Figures :**

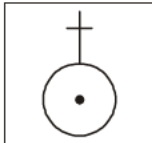


(1) (2) (3) (4)

(SSC CHSL (10+2) DEO & LDC Exam. 16.11.2014)

161. Find out which answer figure will exactly make up the question figure.

**Question Figure :**



**Answer Figures :**



(1) (2) (3) (4)

(SSC CGL Tier-I Exam. 19.10.2014 TF No. 022 MH 3)

162. From the given answer figures, select the figure which is hidden/embedded in the question figure.

**Question Figure :**



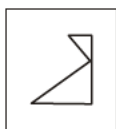
**Answer Figures :**




(1) (2) (3) (4)  
(SSC CGL Tier-I Exam. 19.10.2014 TF No. 022 MH 3)

163. From the given answer figures, select the one in which the question figure is hidden/embedded.

**Question Figure :**



**Answer Figures :**

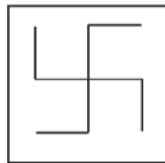


(1) (2) (3) (4)

(SSC CHSL (10+2) DEO & LDC Exam. 16.11.2014, 1st Sitting TF No. 333 LO 2)

164. From the given answer figures, select the one in which the question figure is hidden/embedded.

**Question Figure :**



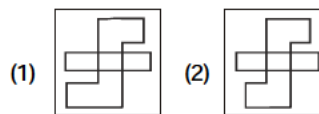
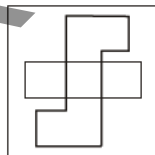
**Answer Figures :**



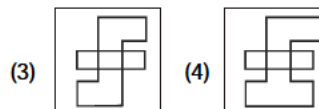
(1) (2) (3) (4)

(SSC CHSL (10+2) DEO & LDC Exam. 16.11.2014, IInd Sitting TF No. 545 QP 6)

165. Select the answer figure which is the same as question figure.



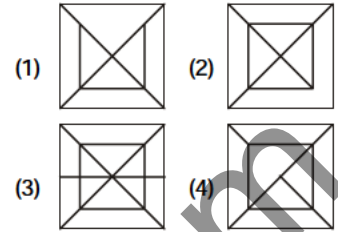
(1) (2)



(3) (4)

(SSC CAPFs SI, CISF ASI & Delhi Police SI Exam, 21.06.2015 (1st Sitting) TF No. 8037731)

166. From the given answer figures, select the one in which the question figure is hidden/embedded.



(1) (2) (3) (4)

(SSC CAPFs SI, CISF ASI & Delhi Police SI Exam, 21.06.2015 (1st Sitting) TF No. 8037731)

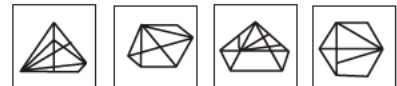
**Directions (167-168) :** In the following two questions, from the given answer figures, select the one in which the question figure is hidden/embedded.

(SSC CAPFs SI, CISF ASI & Delhi Police SI Exam, 21.06.2015 IInd Sitting)

167. **Question Figure :**

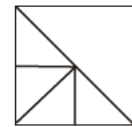


**Answer Figures :**

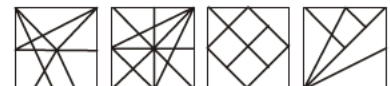


(1) (2) (3) (4)

168. **Question Figure :**



**Answer Figures :**

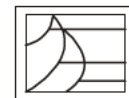


(1) (2) (3) (4)

(SSC CAPFs SI, CISF ASI & Delhi Police SI Exam, 21.06.2015 IInd Sitting)

169. From the given answer figures, select the one which is hidden/embedded in the question figure :

**Question Figure :**



**Answer Figures :**



(1) (2) (3) (4)

(SSC CGL Tier-I Exam, 09.08.2015 (1st Sitting) TF No. 1443088)



**EMBEDDED FIGURE**

170. From the given answer figures, select the one which is hidden/embedded in the question figure.

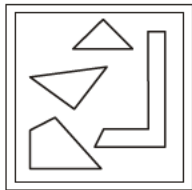


(1) (2) (3) (4)

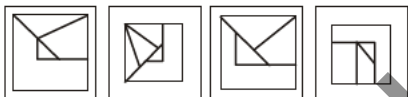
(SSC CGL Tier-I Exam, 09.08.2015 (IInd Sitting) TF No. 4239378)

171. From the given answer figures, select the one in which the question figure is hidden/embedded.

**Question Figure :**



**Answer Figure :**

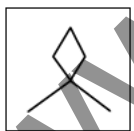


(1) (2) (3) (4)

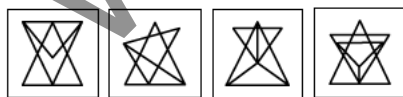
(SSC CGL Tier-I Exam, 16.08.2015 (1st Sitting) TF No. 3196279)

172. From the given answer figures, select the one in which the question figure is hidden/embedded.

**Question Figure :**



**Answer Figures :**



(1) (2) (3) (5)

(SSC CGL Tier-I Re-Exam, 30.08.2015)

173. Select the answer figure in which the question figure is hidden.

**Question Figure :**



**Answer Figures :**



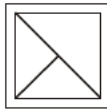
(1) (2) (3) (4)

(SSC Constable (GD)

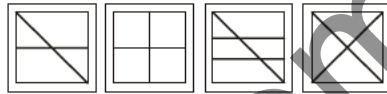
Exam, 04.10.2015, 1st Sitting)

174. From the given answer figures, select the one in which the question figure is hidden/embedded.

**Question Figure :**



**Answer Figures :**



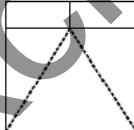
(1) (2) (3) (4)

(SSC Constable (GD)

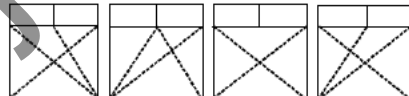
Exam, 04.10.2015, IInd Sitting)

175. From the given answer figures, select the one in which the question figure is hidden/embedded.

**Questions Figure :**



**Answer Figures :**



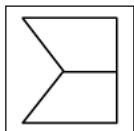
(1) (2) (3) (4)

(SSC CHSL (10+2) LDC, DEO & PA/SA

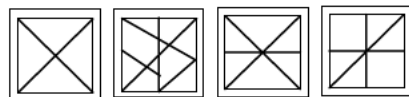
Exam, 01.11.2015, IInd Sitting)

176. From the given answer figures, select the one in which the question figure is hidden/embedded.

**Question Figure**



**Answer Figures**



(1) (2) (3) (4)

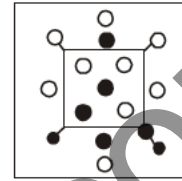
(SSC CHSL (10+2) LDC, DEO & PA/SA

Exam, 15.11.2015 (1st Sitting)

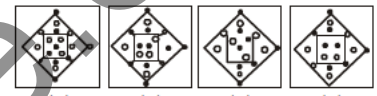
TF No. 6636838)

177. From the given answer figures, select the one in which the question figure is hidden/embedded.

**Question Figure :**



**Answer Figures :**



(1) (2) (3) (4)

(SSC CHSL (10+2) LDC, DEO & PA/SA

Exam, 06.12.2015 (1st Sitting)

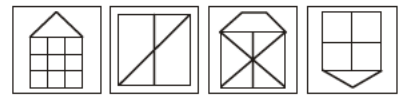
TF No. 1375232)

178. From the given answer figures, select the one in which the question figure is hidden/embedded.

**Question Figure**



**Answer Figures**



(1) (2) (3) (4)

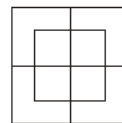
(SSC CHSL (10+2) LDC, DEO & PA/SA

Exam, 06.12.2015 (IInd Sitting)

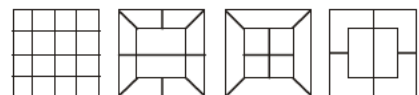
TF No. 3441135)

179. From the given answer figures, select the one in which the question figure is hidden/embedded.

**Question Figure :**



**Answer Figures :**



(1) (2) (3) (4)

(SSC CHSL (10+2) LDC, DEO & PA/SA

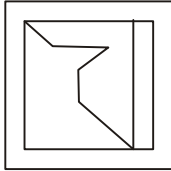
Exam, 20.12.2015 (1st Sitting)

TF No. 9692918)

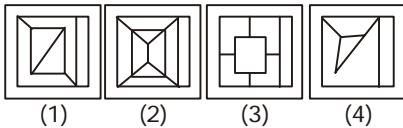
**EMBEDDED FIGURE**

180. From the given answer figures, select the one in which the question figure is hidden/embedded.

**Question Figure :**



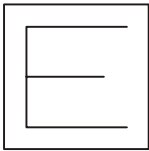
**Answer Figures :**



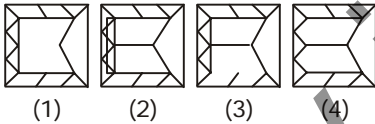
(SSC (10+2) Stenographer Grade 'C' & 'D' Exam. 31.01.2016 TF No. 3513283)

181. Select the answer figure in which the question figure is hidden.

**Question Figure :**



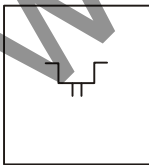
**Answer Figures :**



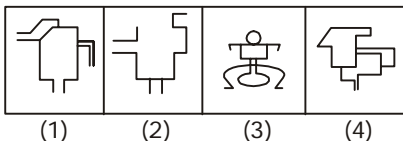
(SSC CGL Tier-I Exam, 16.08.2015 (IInd Sitting) TF No. 2176783)

182. From the given answer figures, select the one in which the question figure is hidden/embedded.

**Question Figure :**



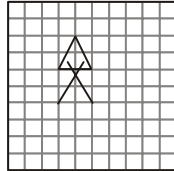
**Answer Figures :**



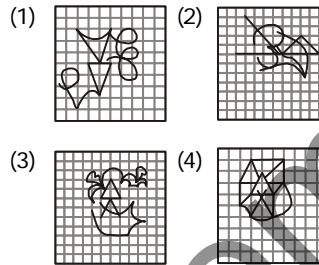
(SSC (10+2) Stenographer Grade 'C' & 'D' Exam. 31.07.2016)

183. From the given answer figures, select the one in which the question figure is hidden/embedded

**Question Figure :**



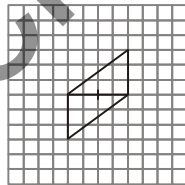
**Answer Figures :**



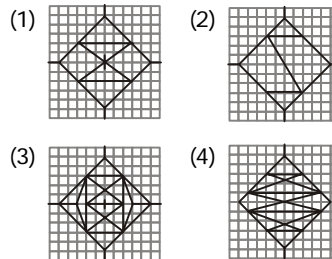
(SSC CGL Tier-I (CBE) Exam.10.09.2016)

184. From the given answer figures, select the one in which the question figure is hidden/embedded.

**Question Figure :**



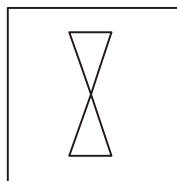
**Answer Figures :**



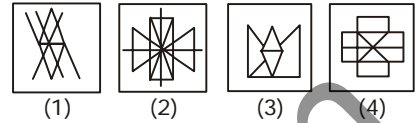
(SSC CGL Tier-I (CBE) Exam.11.09.2016) (1st Sitting)

185. Find out the alternative figure which contains the given figure.

**Question Figure :**



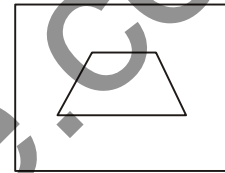
**Answer Figures :**



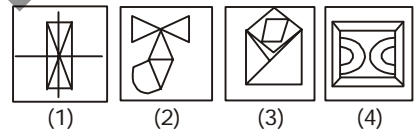
(SSC CPO SI, ASI Online Exam.05.06.2016) (IInd Sitting)

186. Find out the alternative figure which contains the given figure.

**Question Figures :**



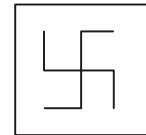
**Answer Figures :**



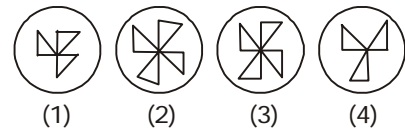
(SSC CPO SI, ASI Online Exam.05.06.2016) (IInd Sitting)

187. Find out the correct alternative figure which contains the given question figure.

**Question Figure**



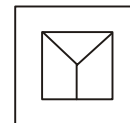
**Answer Figures**



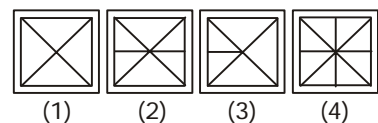
(SSC CPO Exam. 06.06.2016) (1st Sitting)

188. Find out the correct alternative figure which contains the given question figure.

**Question Figure**



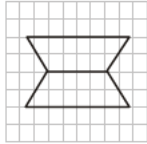
**Answer Figures**



(SSC CPO Exam. 06.06.2016) (1st Sitting)

**EMBEDDED FIGURE**

**189.** Select the one in which the question figure is hidden/embedded.

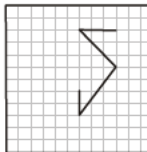


- (1)
- (2)
- (3)
- (4)

(SSC CHSL (10+2) Tier-I (CBE) Exam. 08.09.2016) (1st Sitting)

**190.** From the given answer figures, select the one in which the question figure is hidden.

**Question Figure :**



**Answer Figures :**

- (1)
- (2)
- (3)
- (4)

(SSC CGL Tier-I (CBE) Exam. 09.09.2016) (1st Sitting)

**Directions (191-192) :** In each of the following questions, from the given answer figures, select the one in which the question figure is hidden/embedded.

(SSC CAPFs (CPO) SI & ASI, Delhi Police Exam. 20.03.2016) (IInd Sitting)

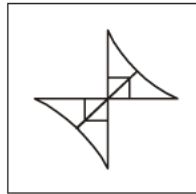
**191. Question Figure**



**Answer Figures**

- (1)
- (2)
- (3)
- (4)

**192. Question Figure**

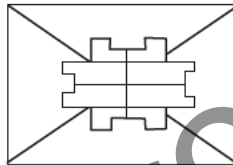


**Answer Figures**

- (1)
- (2)
- (3)
- (4)

**193. Which of the given answer figures is hidden in the question figure?**

**Question Figure :**



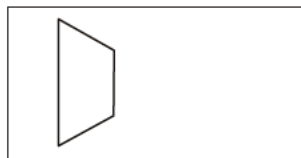
**Answer Figures :**

- (1)
- (2)
- (3)
- (4)

(SSC CAPFs (CPO) SI & ASI, Delhi Police Exam. 05.06.2016) (1st Sitting)

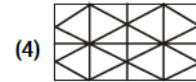
**194.** Find out the correct alternative figure which contains the given question figure.

**Question Figure :**



**Answer Figures :**

- (1)
- (2)
- (3)



(4)

(SSC CAPFs (CPO) SI & ASI, Delhi Police Exam. 05.06.2016) (1st Sitting)

**195.** Find out the correct alternative figure which contains the given question figure.



- (1)
- (2)
- (3)
- (4)

(SSC CPO SI & ASI, Online Exam. 06.06.2016) (IInd Sitting)

**196.** From the given answer figures, select the one in which the question figure is hidden/embedded?

**Question Figure :**



**Answer Figures :**

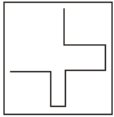
- (1)
- (2)
- (3)
- (4)

(SSC CGL Tier-I (CBE) Exam. 27.08.2016) (1st Sitting)

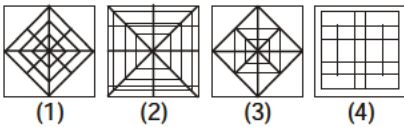
EMBEDDED FIGURE

197. In which of the following figures, the given figure is embedded?

Question Figure :

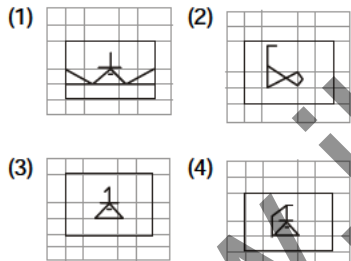
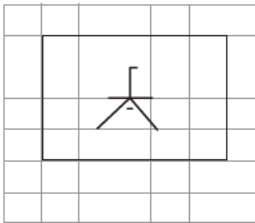


Answer Figures :



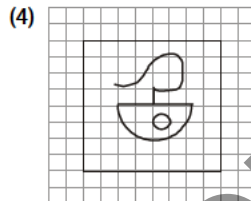
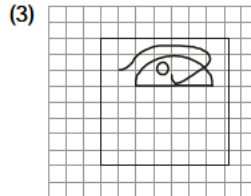
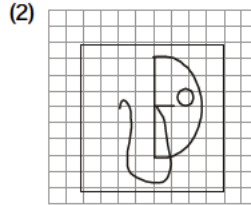
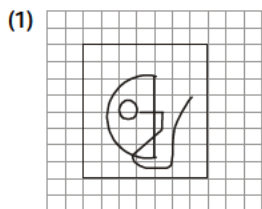
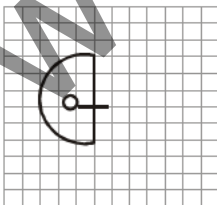
(SSC CGL Tier-I (CBE) Exam. 27.08.2016) (IInd Sitting)

198. From the given answer figures, select the one in which the question figure is hidden/embedded



(SSC CGL Tier-I (CBE) Exam. 28.08.2016) (IInd Sitting)

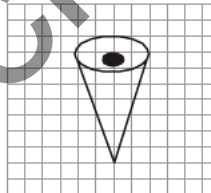
199. From the given answer figures, select the one in which the question figure is hidden/embedded



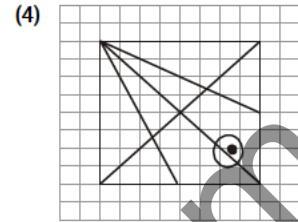
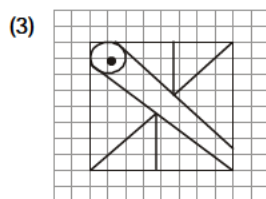
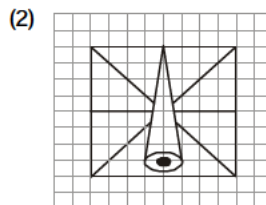
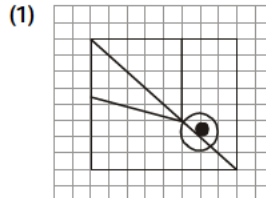
(SSC CGL Tier-I (CBE) Exam. 29.08.2016) (IInd Sitting)

200. From the given answer figures, select the one in which the question figure is hidden/embedded.

Question Figure :



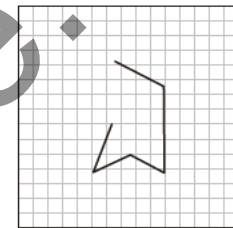
Answer Figures :



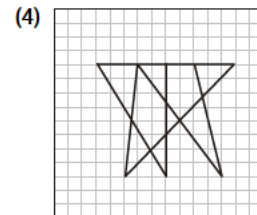
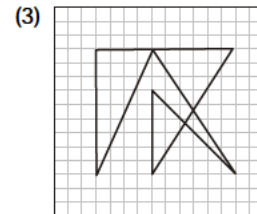
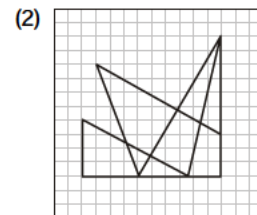
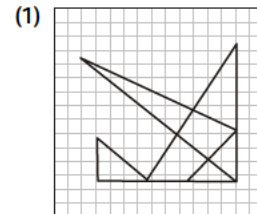
(SSC CGL Tier-I (CBE) Exam. 30.08.2016) (1st Sitting)

201. From the given answer figures, select the one in which the question figure is hidden/embedded.

Question Figure :



Answer Figures :

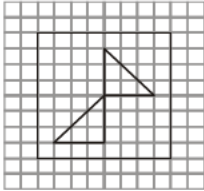


(SSC CGL Tier-I (CBE) Exam. 31.08.2016) (1st Sitting)

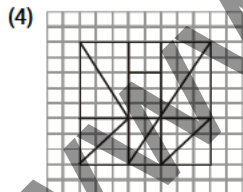
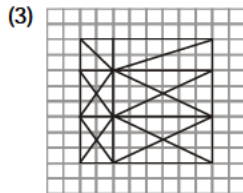
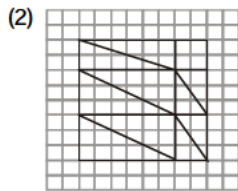
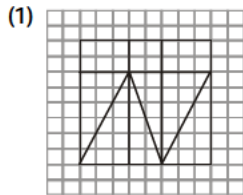
**EMBEDDED FIGURE**

202. From the given answer figures, select the one in which the question figure is hidden/embedded

**Question Figure**



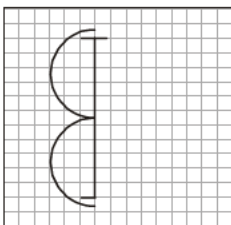
**Answer Figures**



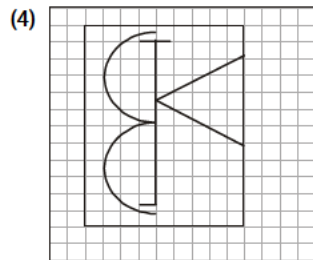

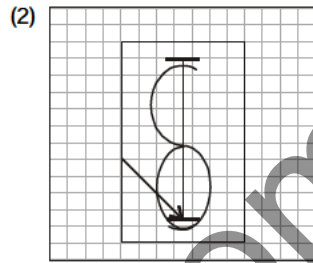
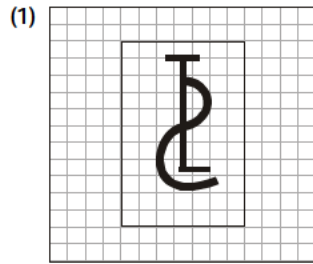
(SSC CGL Tier-I (CBE) Exam. 01.09.2016) (1st Sitting)

203. From the given answer figures, select the one in which the question figure is hidden/embedded.

**Question Figure :**



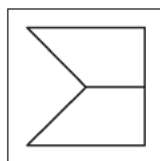
**Answer Figures :**



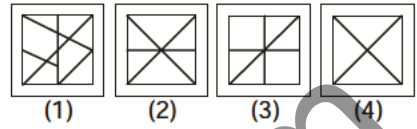
(SSC CGL Tier-I (CBE) Exam. 02.09.2016) (1st Sitting)

204. Which of the following has the given figure embedded in it?

**Question Figure :**



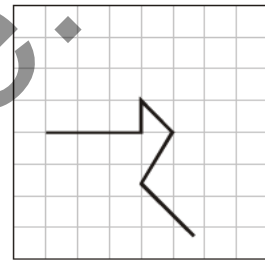
**Answer Figures :**



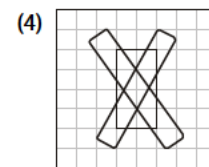
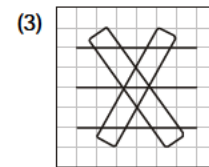
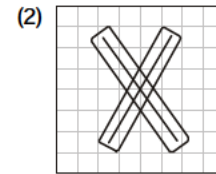
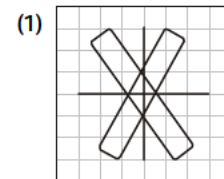
(SSC CGL Tier-I (CBE) Exam. 02.09.2016) (IInd Sitting)

205. From the given answer figures, select the one in which the question figure is hidden/embedded.

**Question Figure :**



**Answer Figures :**

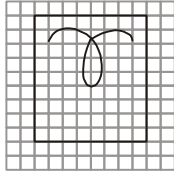


(SSC CGL Tier-I (CBE) Exam. 03.09.2016) (IInd Sitting)

**EMBEDDED FIGURE**

206. From the given answer figures, select the one in which the question figure is hidden/embedded.

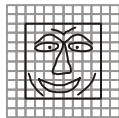
**Question Figure :**



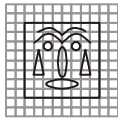
**Answer Figures :** (1)



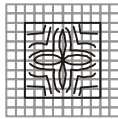
(2)



(3)



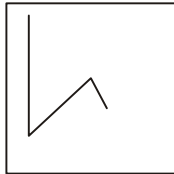
(4)



(SSC CGL Tier-I (CBE)  
Exam. 04.09.2016) (1st Sitting)

207. From the given answer figures, select the one in which the question figure is hidden/embedded.

**Question Figure :**




**Answer Figures :**


(1)



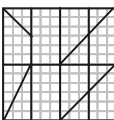
(2)



(3)



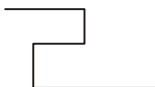
(4)



(SSC CGL Tier-I (CBE)  
Exam. 06.09.2016) (1st Sitting)

208. From the given answer figures, select the one in which the question figure is hidden/embedded

**Question Figure**

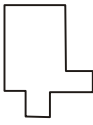


**Answer Figures**

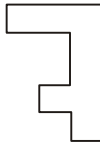
(1)



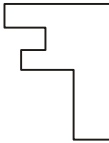
(2)



(3)



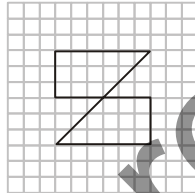
(4)



(SSC CGL Tier-I (CBE)  
Exam. 07.09.2016) (1st Sitting)

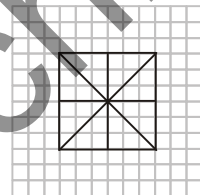
209. From the given answer figures, select the one in which the question figure is hidden/embedded?

**Question Figure :**

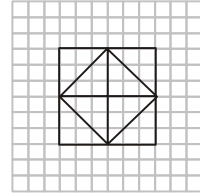


**Answer Figures :**

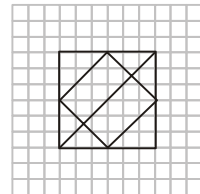
(1)



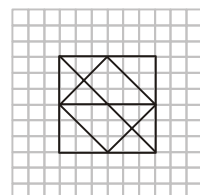
(2)



(3)



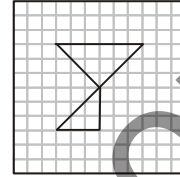
(4)



(SSC CGL Tier-I (CBE)  
Exam. 30.08.2016) (IIInd Sitting)

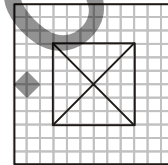
210. From the given answer figures, select the one in which the question figure is hidden.

**Question Figure :**

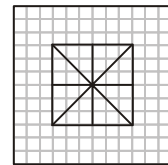


**Answer Figures :**

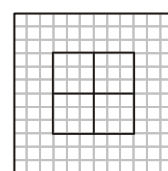
(1)



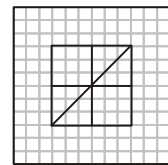
(2)



(3)



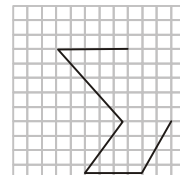
(4)



(SSC CGL Tier-I (CBE)  
Exam. 31.08.2016) (IIInd Sitting)

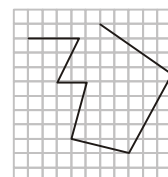
211. From the given answer figures, select the one in which the question figure is hidden/embedded.

**Question Figure :**

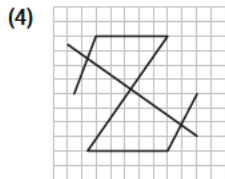
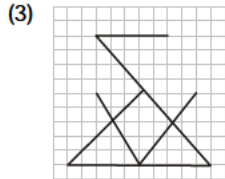
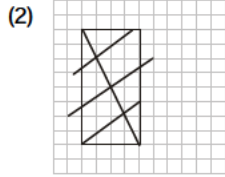


**Answer Figures :**

(1)



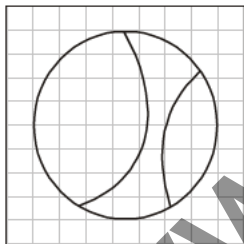
**EMBEDDED FIGURE**



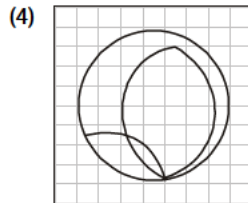
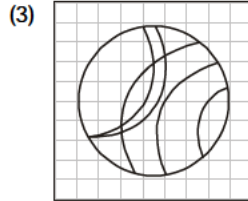
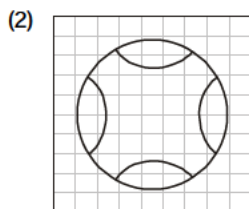
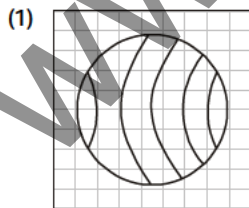
(SSC CGL Tier-I (CBE)  
Exam. 01.09.2016) (1st Sitting)

**212.** From the given answer figures, select the one in which the question figure is hidden/embedded.

**Question Figure :**



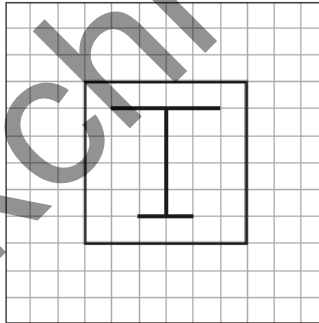
**Answer Figures :**



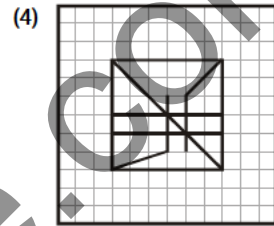
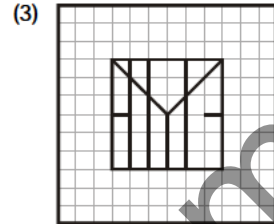
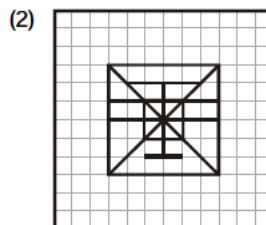
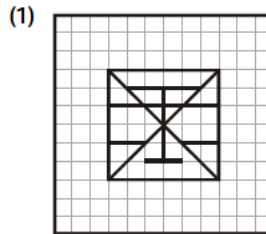
(SSC CGL Tier-I (CBE)  
Exam. 02.09.2016) (1st Sitting)

**213.** From the given answer figures, select the one in which the question figure is hidden/embedded :

**Question Figure :**



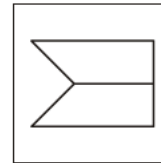
**Answer Figures :**



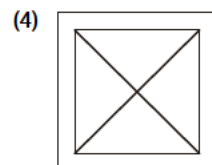
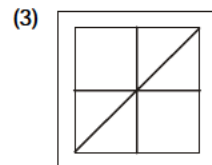
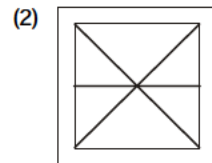
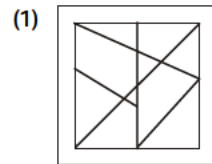
(SSC CGL Tier-I (CBE)  
Exam. 28.08.2016) (1st Sitting)

**214.** From the given answer figures, select the one in which the question figure is hidden/embedded.

**Question Figure :**



**Answer Figures :**

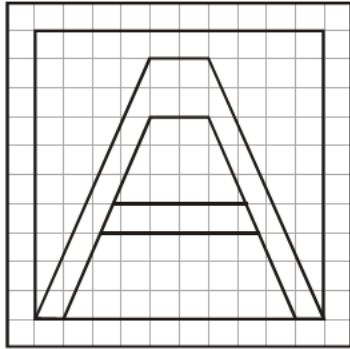


(SSC CGL Tier-I (CBE)  
Exam. 29.08.2016) (1st Sitting)

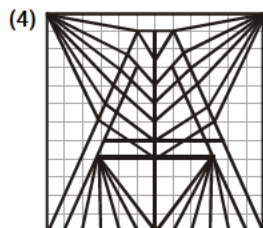
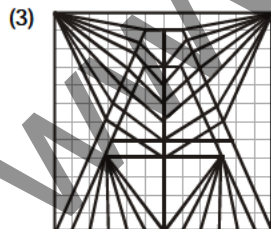
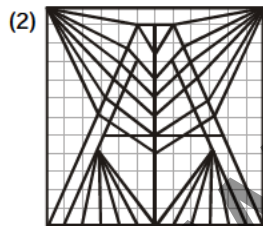
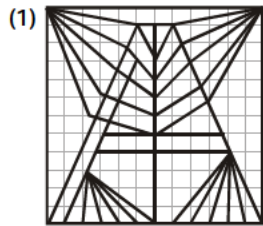
**EMBEDDED FIGURE**

215. From the given answer figures, select the one in which the question figure is hidden/embedded.

**Question Figure :**




**Answer Figures :**



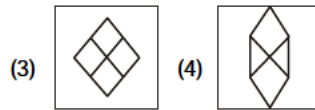
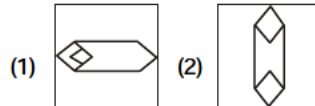
(SSC CGL Tier-I (CBE) Exam. 30.08.2016) (IInd Sitting)

216. From the given answer figures, select the one in which the question figure is hidden/embedded.

**Question Figure :**



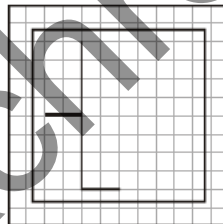
**Answer Figures :**



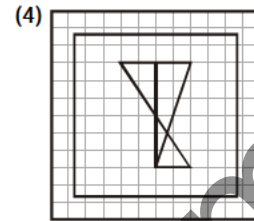
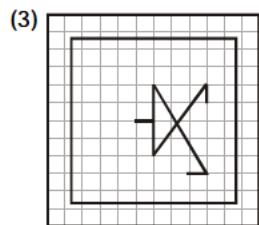
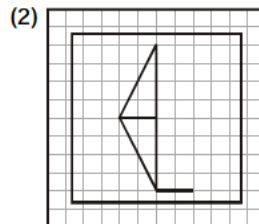
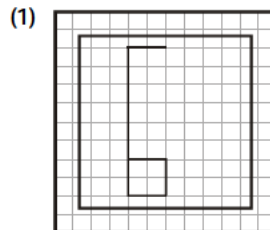
(SSC CGL Tier-I (CBE) Exam. 31.08.2016) (IInd Sitting)

217. From the given answer figures, select the one in which the question figure is hidden/embedded.

**Question Figure :**



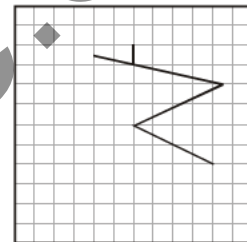
**Answer Figures :**



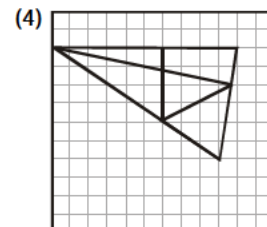
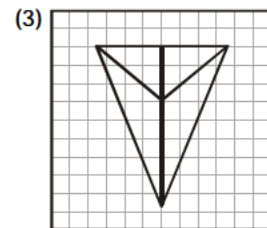
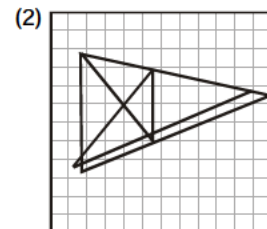
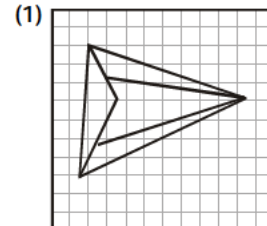
(SSC CGL Tier-I (CBE) Exam. 01.09.2016) (IInd Sitting)

218. From the given answer figures, select the one in which the question figure is hidden/embedded.

**Question Figure :**



**Answer Figures :**



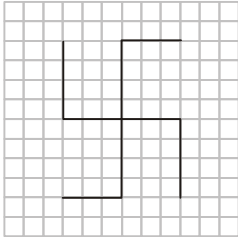
(SSC CGL Tier-I (CBE) Exam. 02.09.2016) (IInd Sitting)



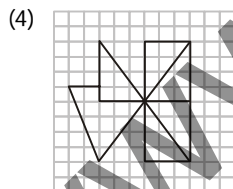
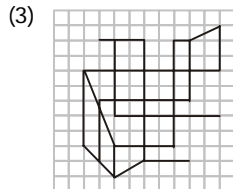
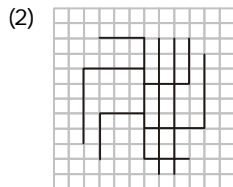
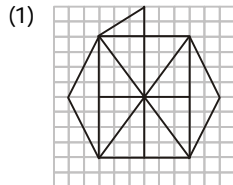
**EMBEDDED FIGURE**

219. From the given answer figures, select the one in which the question figure is hidden/embedded.

**Question Figure :**



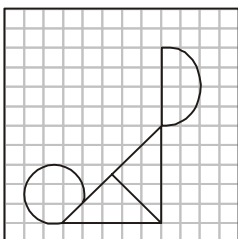
**Answer Figures :**



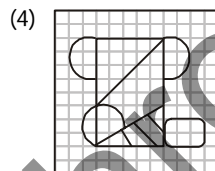
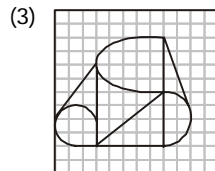
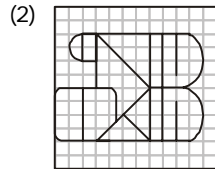
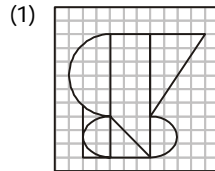
(SSC CGL Tier-I (CBE) Exam. 03.09.2016) (IIIrd Sitting)

220. From the given answer figures, select the one in which the question figure is hidden/embedded.

**Question Figure :**



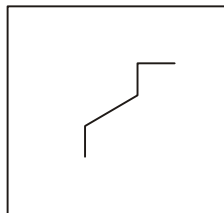
**Answer Figures :**




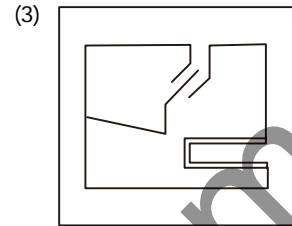
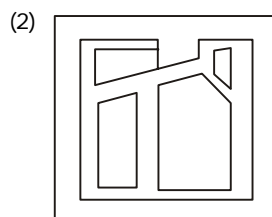
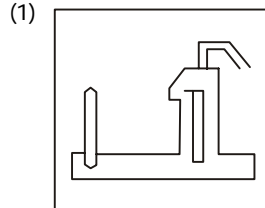
(SSC CGL Tier-I (CBE) Exam. 04.09.2016) (IIIrd Sitting)

221. From the given answer figures, select the one in which the question figure is hidden/embedded.

**Question Figure :**



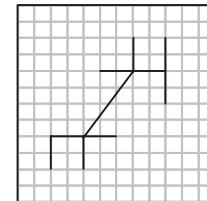
**Answer Figures :**



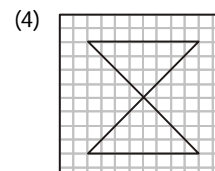
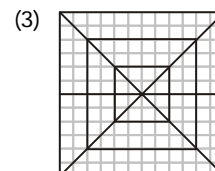
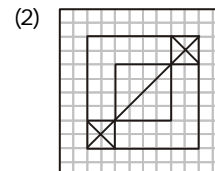
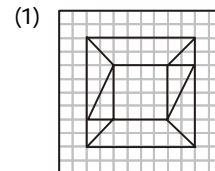
(SSC CGL Tier-I (CBE) Exam. 06.09.2016) (IIIrd Sitting)

222. From the given answer figures, select the one in which the question figure is hidden/embedded.

**Question Figure :**



**Answer Figures :**

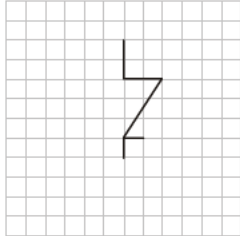


(SSC CGL Tier-I (CBE) Exam. 07.09.2016) (IIIrd Sitting)

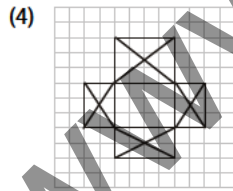
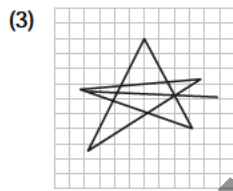
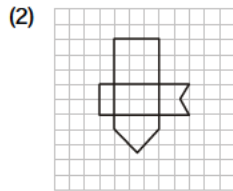
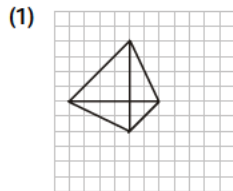
**EMBEDDED FIGURE**

223. From the given answer figures, select the one in which the question figure is hidden/embedded.

**Question Figure :**



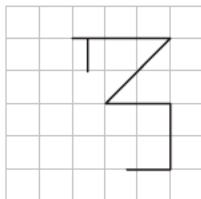
**Answer Figures :**



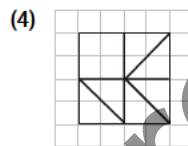
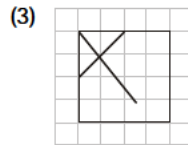
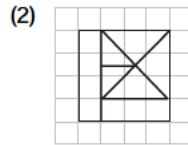
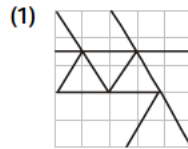
(SSC CGL Tier-I (CBE) Exam. 08.09.2016) (IIIrd Sitting)

224. From the given answer figures, select the one in which the question figure is hidden/embedded

**Question Figure :**



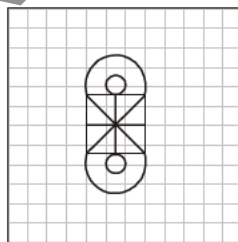
**Answer Figures :**



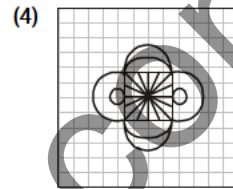
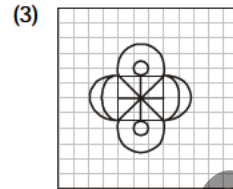
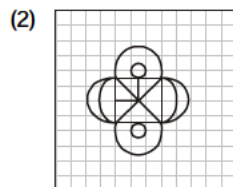
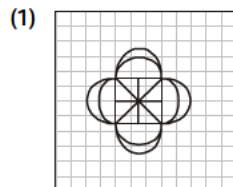
(SSC CGL Tier-I (CBE) Exam. 09.09.2016) (IIInd Sitting)

225. From the given answer figures, select the one in which the question figure is hidden/embedded.

**Question Figure :**



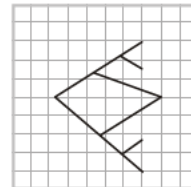
**Answer Figures :**



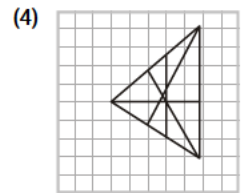
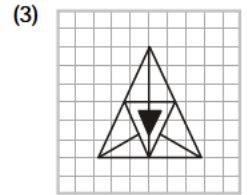
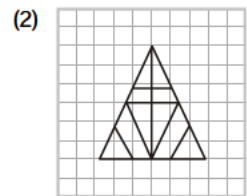
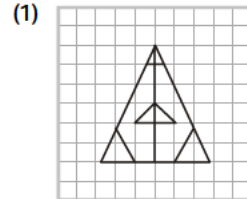
(SSC CGL Tier-I (CBE) Exam. 10.09.2016) (IIIrd Sitting)

226. From the given answer figures, select the one in which the question figure is hidden / embedded

**Question Figure :**



**Answer Figures :**

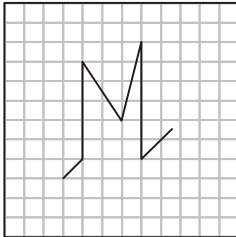


(SSC CGL Tier-I (CBE) Exam. 11.09.2016) (IIInd Sitting)

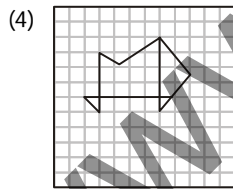
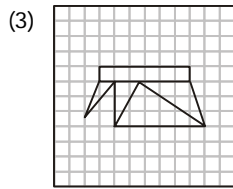
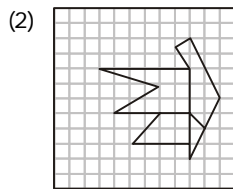
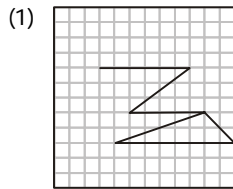
**EMBEDDED FIGURE**

227. From the given answer figures, select the one in which the question figure is hidden.

**Question Figure :**



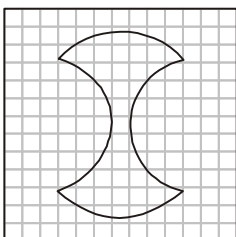
**Answer Figures :**



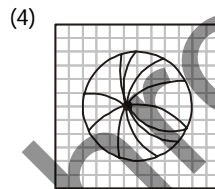
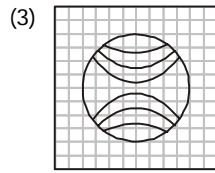
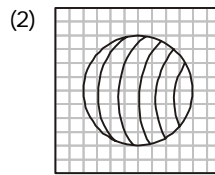
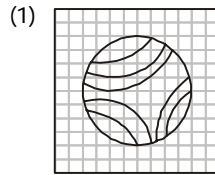
(SSC CGL Tier-I (CBE) Exam. 03.09.2016) (IInd Sitting)

228. From the given answer figures, select the one in which the question figure is hidden/embedded

**Question Figure :**



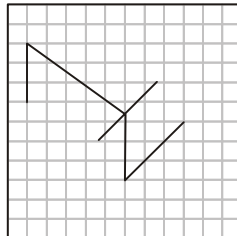
**Answer Figures :**



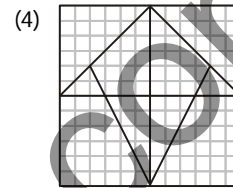
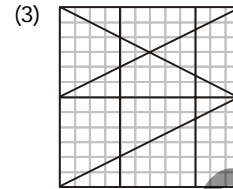
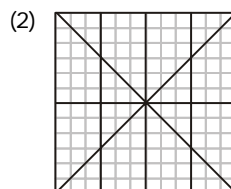
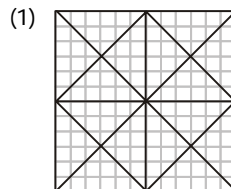
(SSC CGL Tier-I (CBE) Exam. 04.09.2016) (IInd Sitting)

229. From the given answer figures, select the one in which the question figure is hidden/embedded.

**Question Figure :**



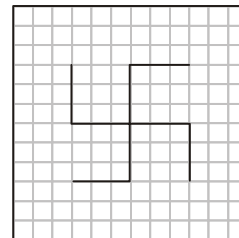
**Answer Figures :**



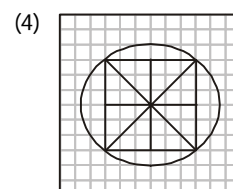
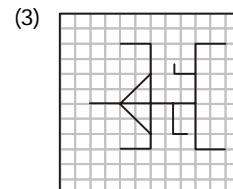
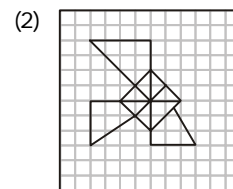
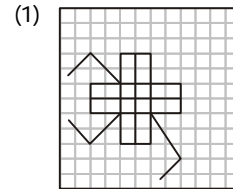
(SSC CGL Tier-I (CBE) Exam. 06.09.2016) (IInd Sitting)

230. Select the answer figure in which the question figure is hidden.

**Question Figure**



**Answer Figures**

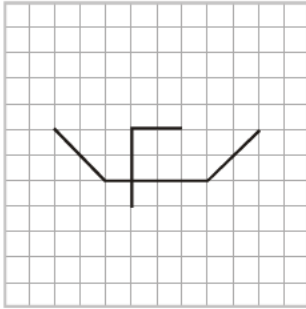


(SSC CGL Tier-I (CBE) Exam. 07.09.2016) (IInd Sitting)

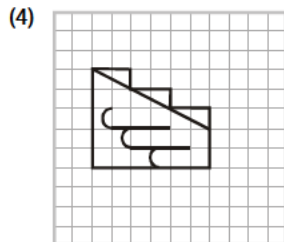
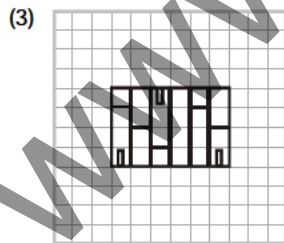
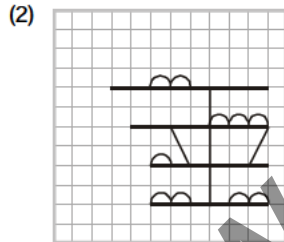
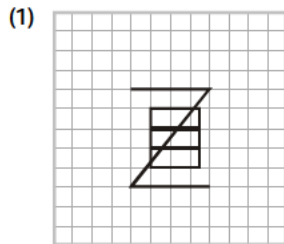
**EMBEDDED FIGURE**

231. From the given answer figures, select the one in which the question figure is hidden/embedded.

**Question Figure :**



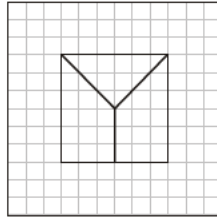
**Answer Figures :**



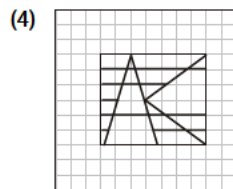
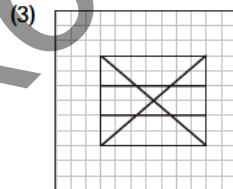
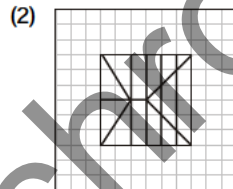
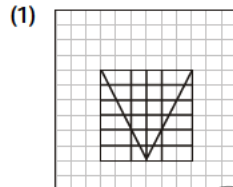
(SSC CGL Tier-I (CBE) Exam. 08.09.2016) (IInd Sitting)

232. From the given answer figures, select the one in which the question figure is hidden/embedded.

**Question Figure :**



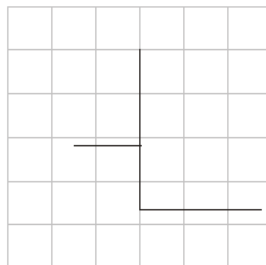
**Answer Figures :**



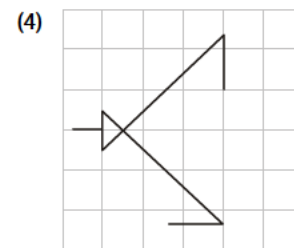
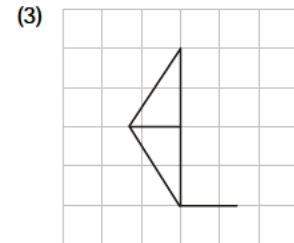
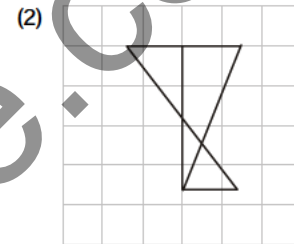
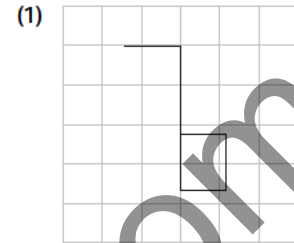
(SSC CGL Tier-I (CBE) Exam. 09.09.2016) (IInd Sitting)

233. Select the one in which the question figure is hidden/embedded :

**Question Figure :**



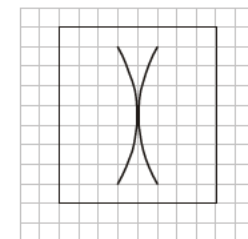
**Answer Figures :**



(SSC CGL Tier-I (CBE) Exam. 10.09.2016) (IInd Sitting)

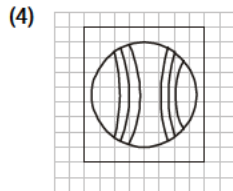
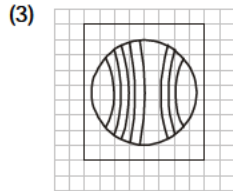
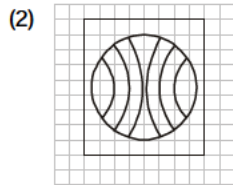
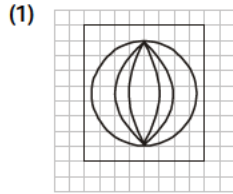
234. From the given answer figures, select the one in which the question figure is hidden/embedded.

**Question Figure :**



**EMBEDDED FIGURE**

**Answer Figures :**



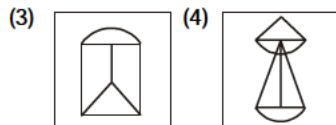
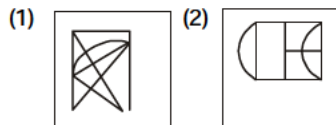
(SSC CGL Tier-I (CBE) Exam. 11.09.2016) (IInd Sitting)

235. From the given answer figures, select the one in which the question figure is hidden/embedded :

**Question Figure :**



**Answer Figures :**



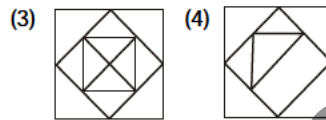
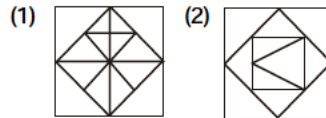
(SSC CGL Tier-I (CBE) Exam. 27.10.2016) (Ist Sitting)

236. Select the answer figure in which the question figure is hidden/embedded :

**Question Figure :**



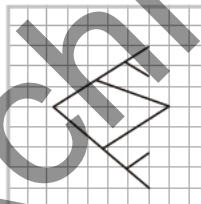
**Answer Figures :**



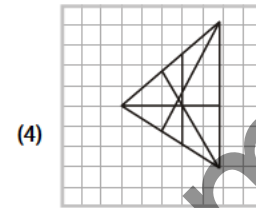
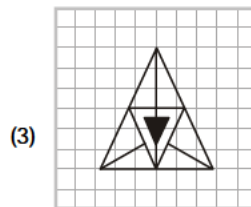
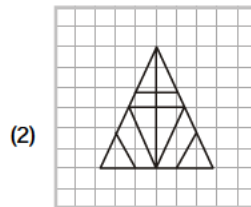
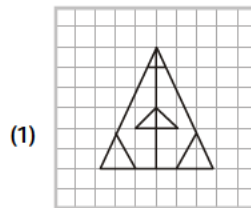
(SSC CGL Tier-I (CBE) Exam. 27.10.2016) (IInd Sitting)

237. From the given answer figures, select the one in which question the question figure is hidden / embedded

**Question Figure :**



**Answer Figures :**



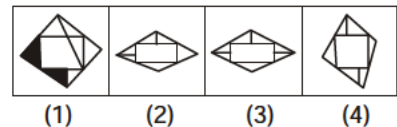
(SSC CGL Tier-I (CBE) Exam. 11.09.2016) (Ist Sitting)

238. From the given answer figures, select the one in which the question figures are hidden/embedded ?

**Question Figures :**



**Answer Figures :**



(SSC Multi-Tasking Staff Exam. 30.04.2017 Ist Sitting)

**ANSWERS**

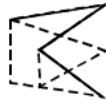
1. (3)	2. (3)	3. (2)	4. (2)
5. (1)	6. (1)	7. (2)	8. (3)
9. (1)	10. (1)	11. (2)	12. (4)
13. (4)	14. (1)	15. (1)	16. (4)
17. (3)	18. (2)	19. (2)	20. (4)
21. (2)	22. (4)	23. (2)	24. (4)
25. (4)	26. (1)	27. (1)	28. (4)
29. (4)	30. (4)	31. (3)	32. (3)
33. (3)	34. (2)	35. (3)	36. (2)
37. (3)	38. (2)	39. (2)	40. (1)
41. (3)	42. (2)	43. (1)	44. (1)
45. (1)	46. (4)	47. (3)	48. (3)
49. (3)	50. (3)	51. (2)	52. (3)
53. (3)	54. (3)	55. (3)	56. (4)
57. (2)	58. (2)	59. (4)	60. (3)
61. (3)	62. (2)	63. (3)	64. (2)
65. (1)	66. (2)	67. (3)	68. (2)
69. (2)	70. (4)	71. (3)	72. (4)
73. (3)	74. (1)	75. (4)	76. (3)

**EMBEDDED FIGURE**

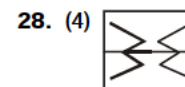
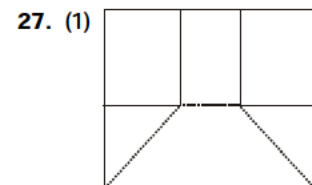
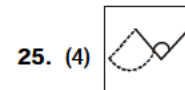
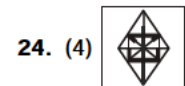
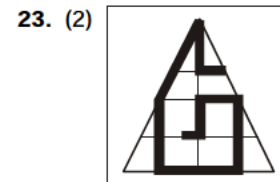
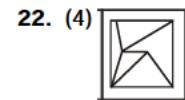
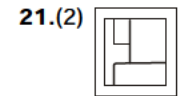
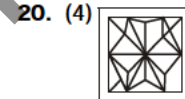
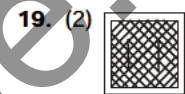
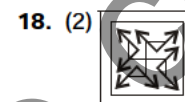
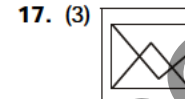
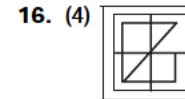
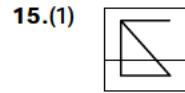
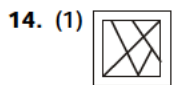
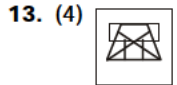
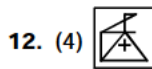
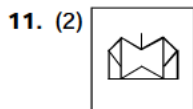
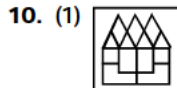
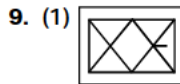
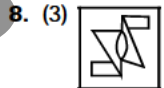
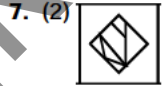
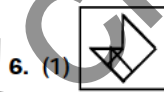
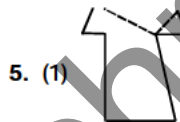
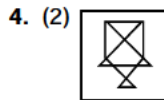
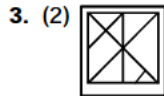
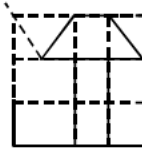
77. (4)	78. (3)	79. (4)	80. (2)
81. (2)	82. (4)	83. (4)	84. (3)
85. (3)	86. (2)	87. (3)	88. (1)
89. (3)	90. (1)	91. (2)	92. (1)
93. (3)	94. (2)	95. (2)	96. (4)
97. (3)	98. (2)	99. (4)	100. (1)
101. (2)	102. (4)	103. (4)	104. (1)
105. (3)	106. (3)	107. (2)	108. (1)
109. (3)	110. (4)	111. (3)	112. (1)
113. (3)	114. (2)	115. (2)	116. (2)
117. (4)	118. (2)	119. (2)	120. (4)
121. (4)	122. (1)	123. (1)	124. (2)
125. (1)	126. (2)	127. (1)	128. (3)
129. (4)	130. (2)	131. (4)	132. (1)
133. (3)	134. (1)	135. (2)	136. (1)
137. (1)	138. (3)	139. (1)	140. (4)
141. (3)	142. (2)	143. (2)	144. (2)
145. (4)	146. (4)	147. (3)	148. (2)
149. (2)	150. (2)	151. (1)	152. (1)
153. (4)	154. (4)	155. (4)	156. (1)
157. (3)	158. (1)	159. (3)	160. (1)
161. (3)	162. (1)	163. (1)	164. (1)
165. (2)	166. (3)	167. (4)	168. (2)
169. (2)	170. (2)	171. (3)	172. (3)
173. (3)	174. (4)	175. (2)	176. (3)
177. (1)	178. (3)	179. (1)	180. (2)
181. (2)	182. (2)	183. (4)	184. (3)
185. (2)	186. (4)	187. (3)	188. (4)
189. (2)	190. (2)	191. (3)	192. (3)
193. (3)	194. (4)	195. (1)	196. (4)
197. (4)	198. (4)	199. (1)	200. (2)
201. (4)	202. (3)	203. (4)	204. (2)
205. (1)	206. (1)	207. (2)	208. (4)
209. (1)	210. (2)	211. (3)	212. (3)
213. (2)	214. (2)	215. (3)	216. (2)
217. (2)	218. (4)	219. (1)	220. (4)
221. (4)	222. (2)	223. (4)	224. (4)
225. (3)	226. (2)	227. (2)	228. (3)
229. (1)	230. (4)	231. (2)	232. (2)
233. (3)	234. (2)	235. (4)	236. (3)
237. (2)	238. (1)		

**EXPLANATIONS**

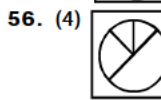
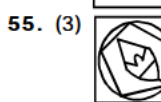
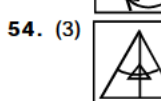
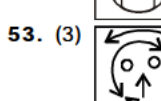
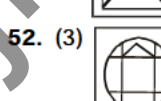
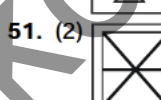
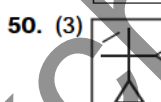

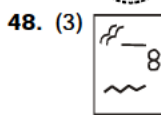
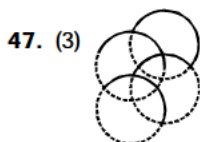
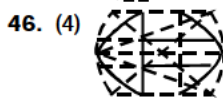
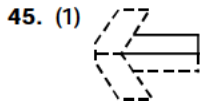
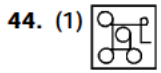
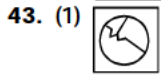
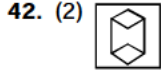
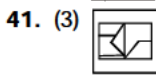
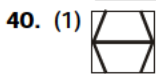
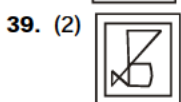
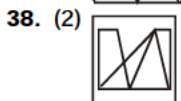
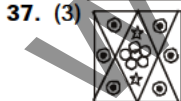
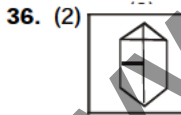
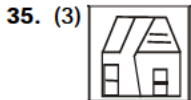
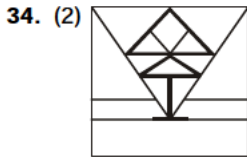
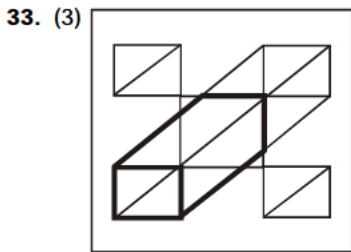
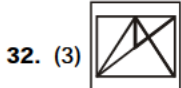
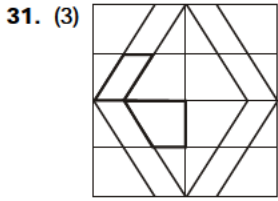
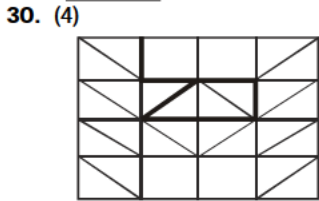
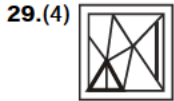
1. (3) The given figures is embedded in answer figure (3).



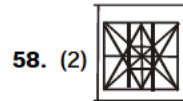
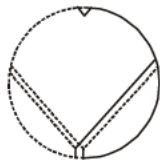
2. (3) The given figure is embedded in answer figure (3).



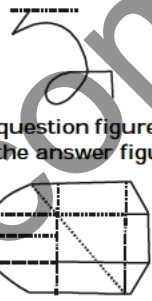
EMBEDDED FIGURE



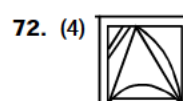
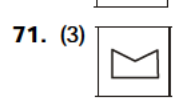
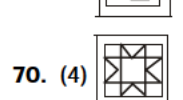
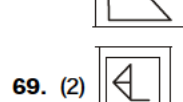
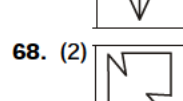
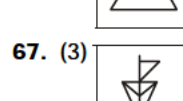
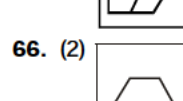
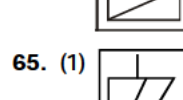
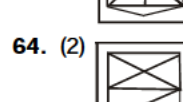
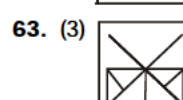
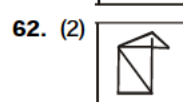
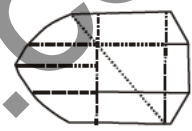
57. (2) The question figure is embedded in the answer figure (2).



















59. (4) The question figure is embedded in the answer figure (4).






























60. (3) The question figure is embedded in the answer figure (3).



EMBEDDED FIGURE

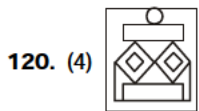
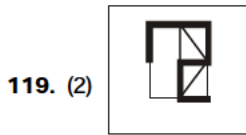
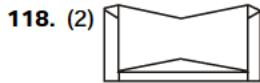
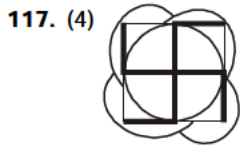
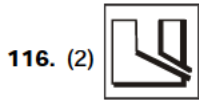
- 73. (3) 
- 74. (1) 
- 75. (4) 
- 76. (3) 
- 77. (4) 
- 78. (3) 
- 79. (4) 
- 80. (2) 
- 81. (2) 
- 82. (4) 
- 83. (4) 
- 84. (3) 
- 85. (3) 
- 86. (2) 
- 87. (3) 
- 88. (1) 

- 89. (3) 
- 90. (1) 
- 91. (2) 
- 92. (1) 
- 93. (3) 
- 94. (2) 
- 95. (2) 
- 96. (4) 
- 97. (3) 
- 98. (2) 
- 99. (4) 
- 100. (1) 

- 101. (2) 
- 102. (4) 
- 103. (4) 
- 104. (1) 
- 105. (3) 
- 106. (3) 
- 107. (2) 
- 108. (1) 
- 109. (3) 
- 110. (4) 
- 111. (3) 
- 112. (1) 
- 113. (3) 
- 114. (2) 
- 115. (2) 




EMBEDDED FIGURE



121. (4) All the components of question figure are present in the Answer Figure (4)

122. (1) Answer Figure (1) cannot be formed.



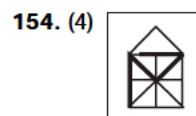
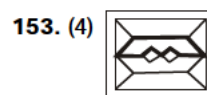
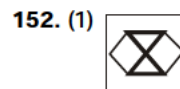
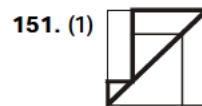
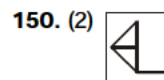
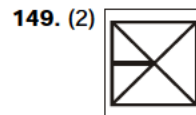
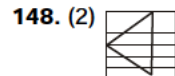
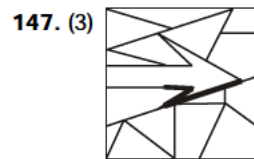
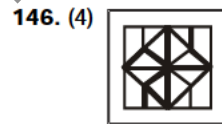
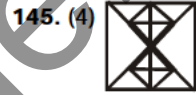
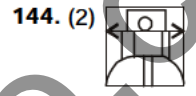
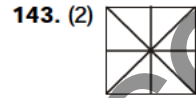
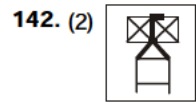
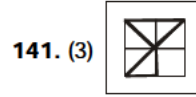
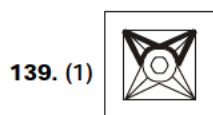
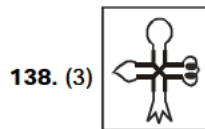
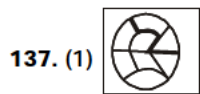
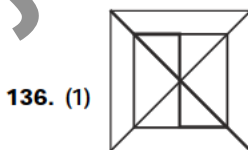
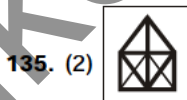
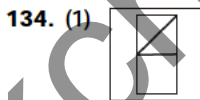
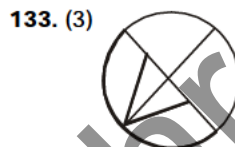
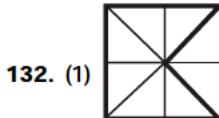
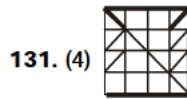
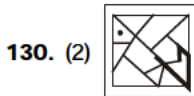
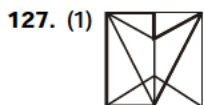
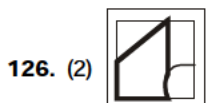
123. (1) All the components of the question figure are present in the Answer Figure (1).



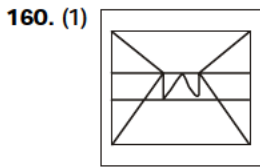
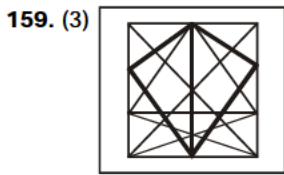
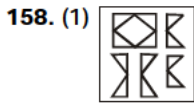
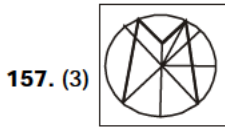
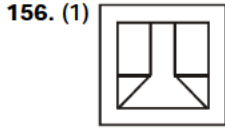
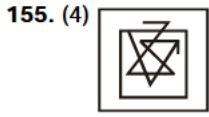
124. (2) All the components of the Question Figure are present in the answer figure (2)



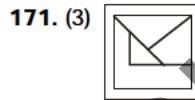
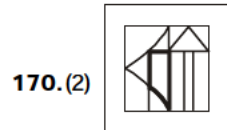
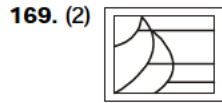
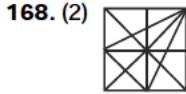
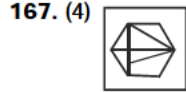
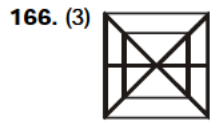
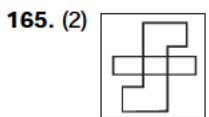
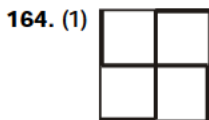
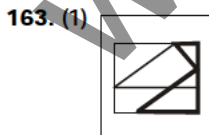
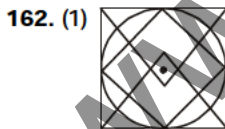
125. (1) All the components of Question Figure are present in Answer Figure (1).



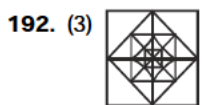
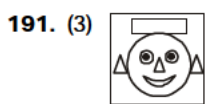
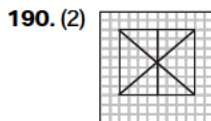
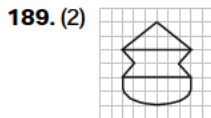
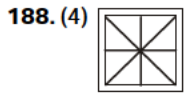
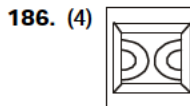
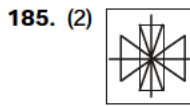
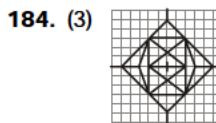
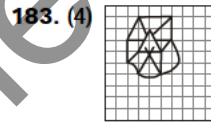
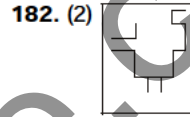
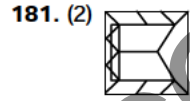
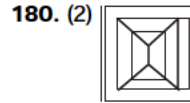
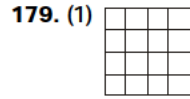
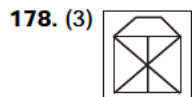
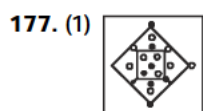
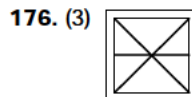
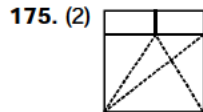
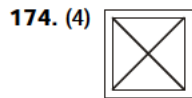
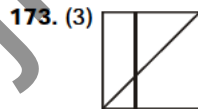
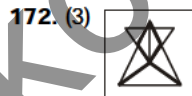
EMBEDDED FIGURE



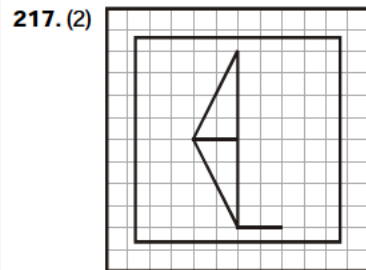
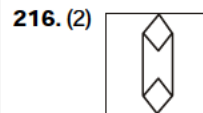
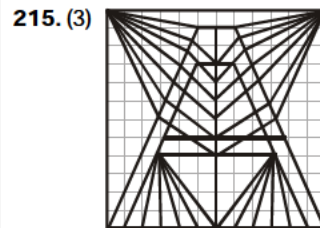
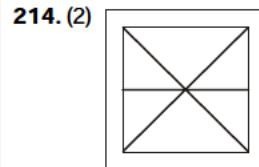
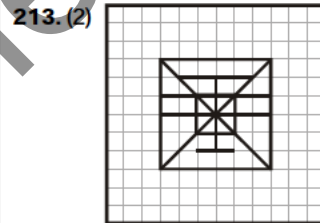
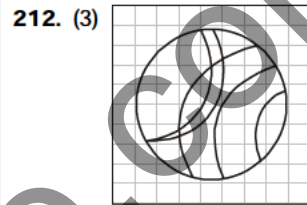
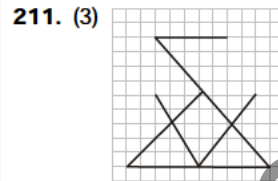
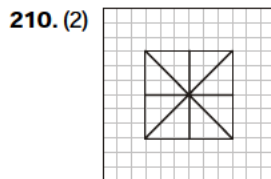
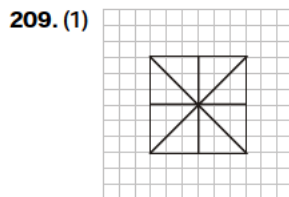
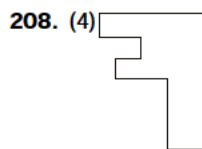
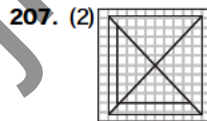
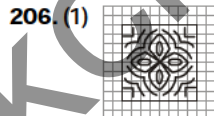
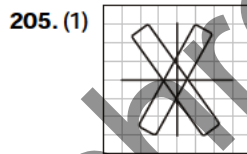
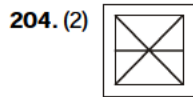
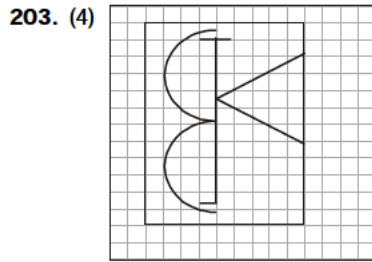
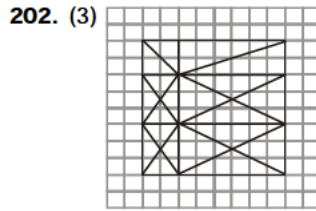
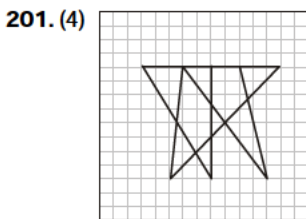
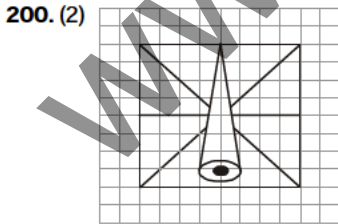
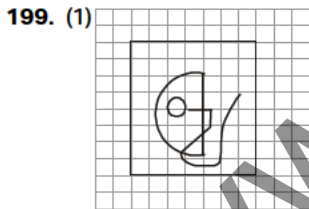
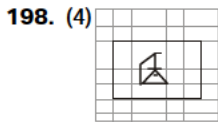
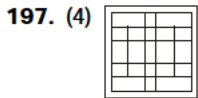
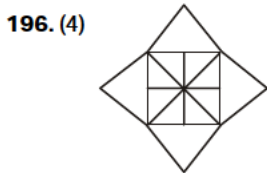
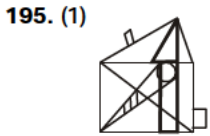
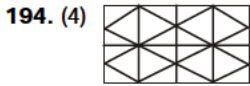
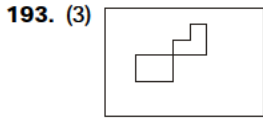
161. (3) All the components of question figure are present in the Answer Figure (3).



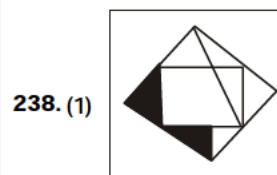
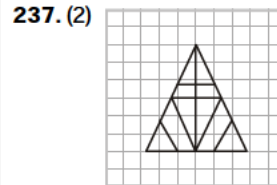
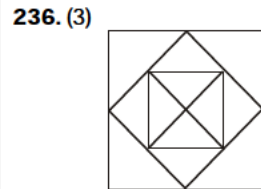
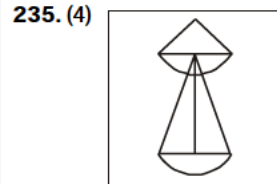
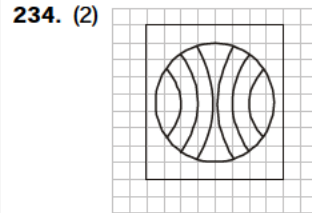
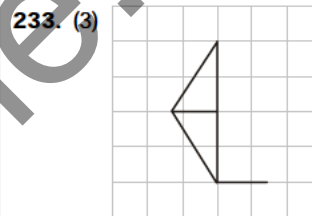
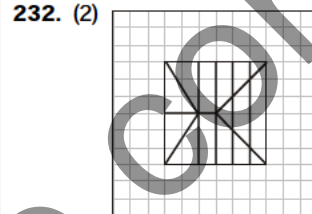
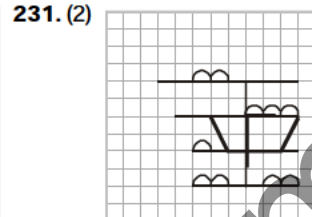
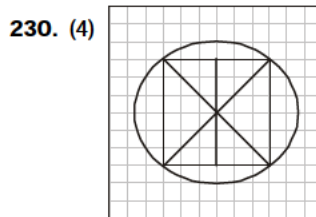
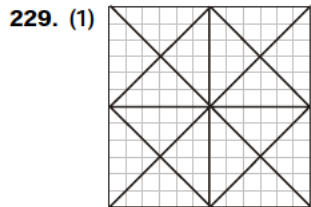
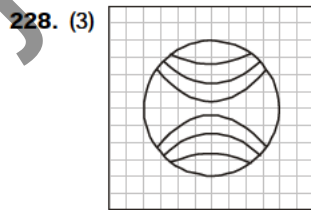
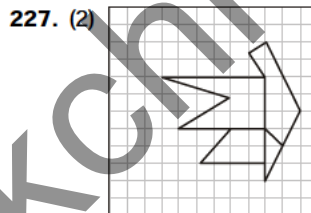
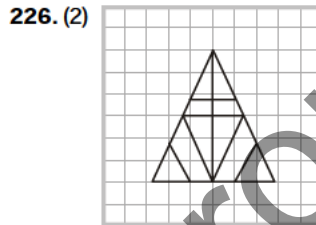
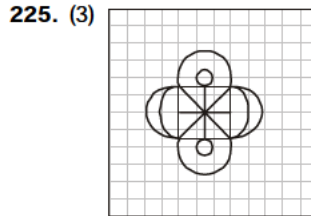
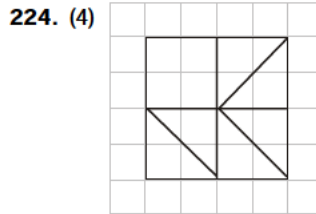
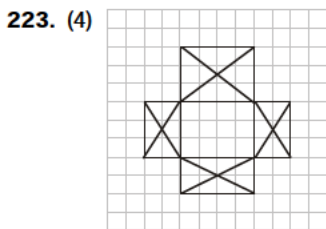
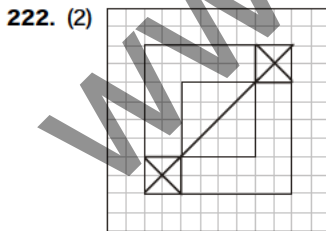

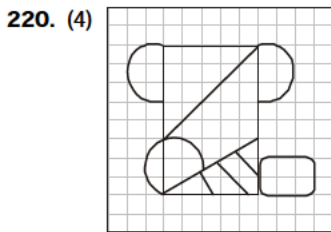
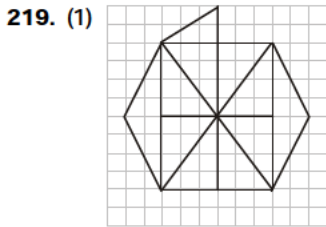
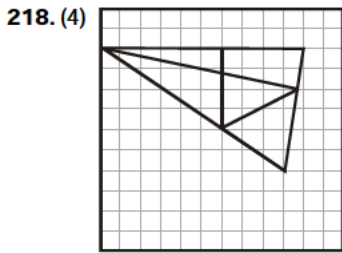
All the components of question figure are present in the Answer Figure (3)



EMBEDDED FIGURE



EMBEDDED FIGURE





# JK Chrome

JK Chrome | Employment Portal



## Rated No.1 Job Application of India

Sarkari Naukri  
Private Jobs  
Employment News  
Study Material  
Notifications



JOBS



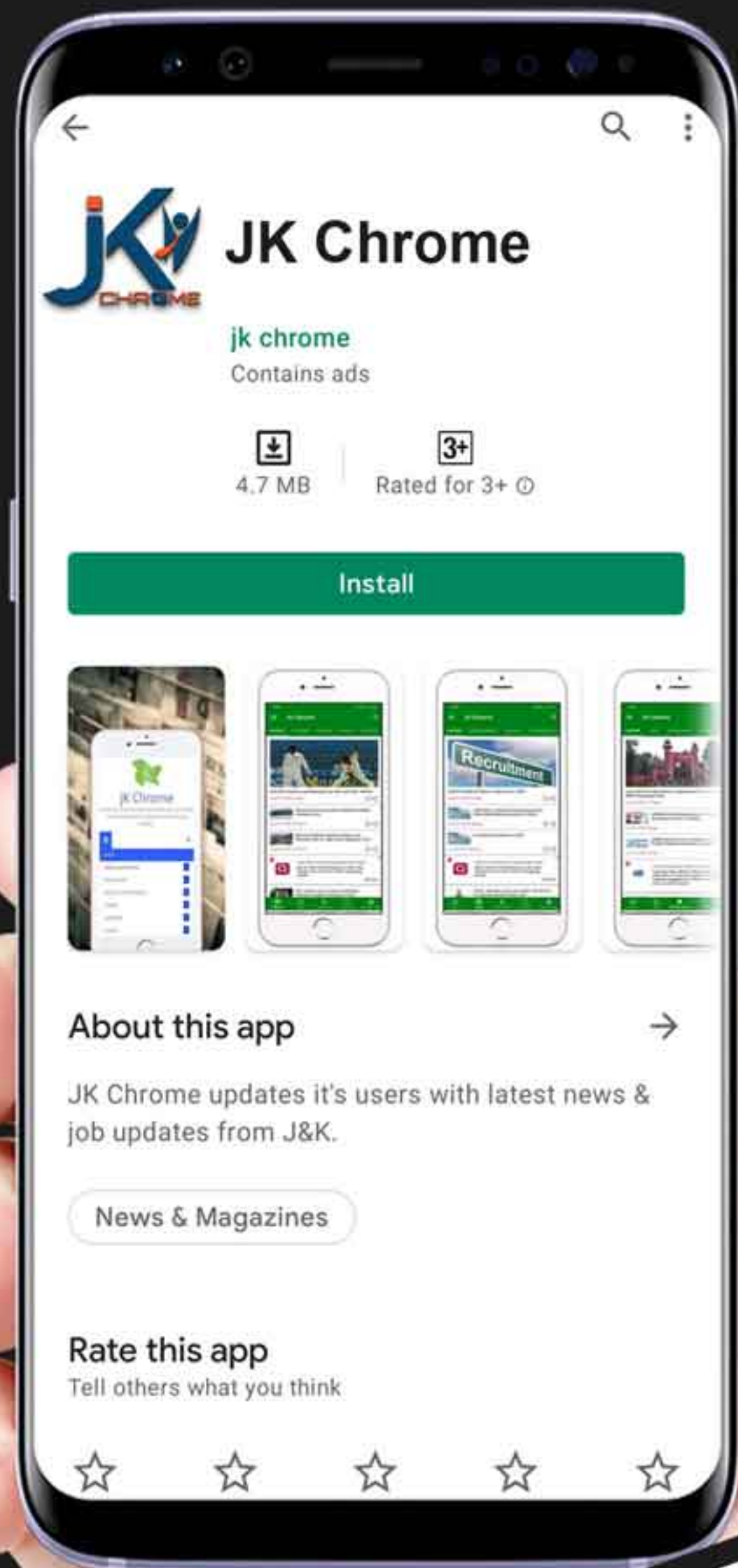
NOTIFICATIONS



G.K



STUDY MATERIAL



JK Chrome

jk chrome  
Contains ads



www.jkchrome.com | Email : contact@jkchrome.com