



JK Chrome

JK Chrome | Employment Portal



Rated No.1 Job Application of India

Sarkari Naukri
Private Jobs
Employment News
Study Material
Notifications



JOBS



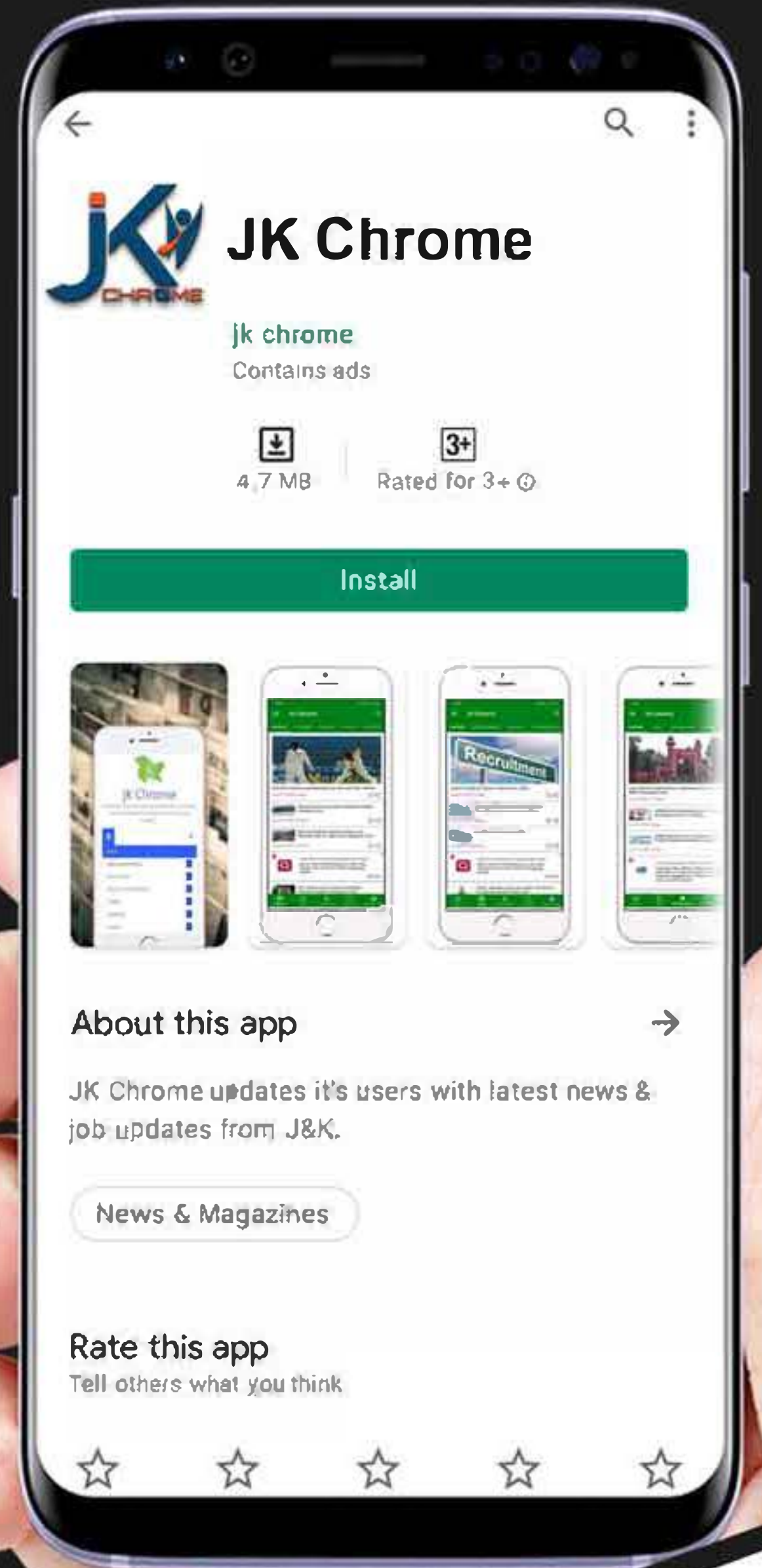
NOTIFICATIONS



G.K



STUDY MATERIAL



JK Chrome

jk chrome
Contains ads



www.jkchrome.com | Email : contact@jkchrome.com

Recruitment of SI in CAPFs ASI in CISF and SI in Delhi Police Examination 2020 Paper I

| | |
|----------------|-------------------------|
| Roll No. | |
| Candidate Name | |
| Venue Name | |
| Exam Date | 24/11/2020 |
| Exam Time | 3:00 PM - 5:00 PM |
| Subject | SI CPO Examination 2020 |

Sect on **General Intelligence and Reasoning**

Q.1 Which number will replace the question mark (?) in the following series?

16, 32, ?, 192, 576, 1152

- Ans
- 1 48
 - 2 80
 - 3 64
 - 4 96

Quest on D **6549782273**
Status **Answered**
Chosen Opt on **4**

Q.2 Which number will replace the question mark (?) in the following series?

46, 66, 94, 132, 182, ?

- Ans
- 1 246
 - 2 292
 - 3 220
 - 4 232

Quest on D **6549782274**
Status **Answered**
Chosen Opt on **1**

Q.3 Select the option that is related to the third letter-cluster in the same way as the second letter-cluster is related to the first letter-cluster.

FOREST : TSROFE :: MOVING : ?

- Ans
- 1 OVINMG
 - 2 GIMNOV
 - 3 VOMNGI
 - 4 VONMIG

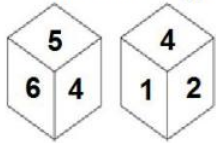
Quest on D **6549782259**
Status **Not Attempted and Marked For Review**
Chosen Opt on **--**

Q.4 Pointing towards a man, a lady said, "His brother is my mother's only daughter's husband's son's father". How is the man related to the lady's husband?

- Ans
- 1 Paternal uncle
 - 2 Brother
 - 3 Father
 - 4 Brother-in-law

Quest on D **6549782267**
 Status **Answered**
 Chosen Opt on **2**

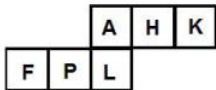
Q.5 Two different positions of the same dice are shown, the six faces of which are numbered from 1 to 6. Select the number that will be on the face opposite to the face showing '3'.



- Ans
- 1 4
 - 2 2
 - 3 5
 - 4 1

Quest on D **6549782296**
 Status **Answered**
 Chosen Opt on **1**

Q.6 A cube is made by folding the given sheet. In the cube so formed, which letter will be on the face opposing to the one showing 'P'?



- Ans
- 1 H
 - 2 L
 - 3 K
 - 4 A

Quest on D **6549782295**
 Status **Answered**
 Chosen Opt on **1**

Q.7 Study the given pattern carefully and select the number that can replace the question mark (?) in it.

| | | |
|----|---|-----|
| 19 | 9 | 140 |
| 17 | 9 | 130 |
| ? | 5 | 120 |

- Ans**
- 1 47
 - 2 28
 - 3 24
 - 4 19

Quest on D **6549782285**

Status **Not Attempted and Marked For Review**

Chosen Opt on --

Q.8 Study the given pattern carefully and select the number that can replace the question mark (?) in it.

| | | |
|----|----|----|
| 36 | 55 | 49 |
| 64 | 47 | 39 |
| 49 | ? | 61 |

- Ans**
- 1 72
 - 2 120
 - 3 88
 - 4 68

Quest on D **6549782284**

Status **Not Attempted and Marked For Review**

Chosen Opt on --

Q.9 In a code language, if 'my personal use' is written as '521', 'use these things' is written as '169', 'personal things' is written as '29', then which phrase would the code '569' represent in this language?

- Ans**
- 1 my personal things
 - 2 my these things
 - 3 these personal things
 - 4 my personal use

Quest on D **6549782261**

Status **Answered**

Chosen Opt on **3**

Q.10 In a code language, 'DOUBLE' is written as 'VPEFMC'. How will 'CLIQUE' be written in that language?

- Ans
- 1 JMDGVQ
 - 2 JMDFVS
 - 3 JMDFVR
 - 4 KNDFVR

Quest on D 6549782262

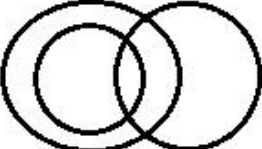



Status Not Attempted and
Marked For Review

Chosen Opt on --

Q.11 Select the Venn diagram that best illustrates the relationship between the following classes.

Car drivers, Human beings, Men

Ans

- 1 
- 2 
- 3 
- 4 

Quest on D 6549782299

Status Answered

Chosen Opt on 3

Q.12 विशाल और अदिति की वर्तमान आयु का योग 105 वर्ष है। यदि अदिति, विशाल से 25 वर्ष छोटी है, तो प्रीतम, जो कि अदिति से 7 वर्ष बड़ा है, की वर्तमान आयु कितनी होगी?

- Ans
- 1 40 वर्ष
 - 2 72 वर्ष
 - 3 32 वर्ष
 - 4 47 वर्ष

Quest on D 6549782275

Status Answered

Chosen Opt on 4

Q.13 Select the number-pair in which the two numbers are related in the same way as are the two numbers of the following number-pair.

7 : 198

- Ans**
- 1 9 : 162
 - 2 5 : 240
 - 3 6 : 72
 - 4 8 : 228

Quest on D **6549782278**
Status **Answered**
Chosen Opt on **4**

Q.14 What was the day of the week on 24th October 2011?

- Ans**
- 1 Wednesday
 - 2 Monday
 - 3 Tuesday
 - 4 Saturday

Quest on D **6549782277**
Status **Answered**
Chosen Opt on **2**

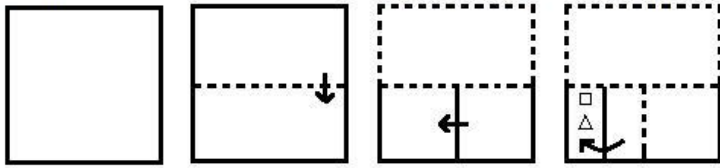
Q.15 Select the option that represents the correct order of the given words as they would appear in an English dictionary.

1. Lexicon
2. Lacuna
3. Lacerate
4. Lactation
5. Locust

- Ans**
- 1 3, 4, 2, 1, 5
 - 2 3, 2, 4, 1, 5
 - 3 3, 4, 2, 5, 1
 - 4 4, 3, 2, 1, 5

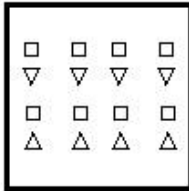
Quest on D **6549782254**
Status **Answered**
Chosen Opt on **1**

Q.16 A paper is folded and cut as shown below. How will it appear when unfolded?




Ans

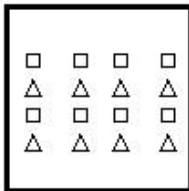
1



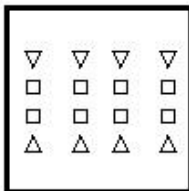
2



3



4



Quest on D **6549782294**
 Status **Answered**
 Chosen Opt on **1**

Q.17 Two statements are given, followed by three conclusions numbered I, II and III. Assuming the statements to be true, even if they seem to be at variance with commonly known facts, decide which of the conclusions logically follow(s) from the statements.

Statements:

Some colleges are schools.

No ground is a college.

Conclusions:

I. No college is a ground.

II. No school is a college.

III. Some schools are colleges.

- Ans**
- 1 Only conclusions II and III follow
 - 2 Only conclusions I and II follow
 - 3 Only conclusions I and III follow
 - 4 All of the conclusions follow

Quest on D 6549782270

Status Answered

Chosen Opt on 3

Q.18 A paper is folded and cut as shown below. How will it appear when unfolded?



Ans

- 1
- 2
- 3
- 4

Quest on D 6549782293

Status Answered

Chosen Opt on 4

Q.19 Select the letter-cluster that can replace the question mark (?) in the given letter-cluster series.

AZA, EVW, ?, OLM, UFG

- Ans 1 JRS
- 2 IRS
- 3 JQS
- 4 IRV

Quest on D 6549782253
 Status Answered
 Chosen Opt on 3

Q.20 Select the figure that will replace the question mark (?) in the following figure series.



Ans

- 1
- 2
- 3
- 4

Quest on D 6549782288
 Status Answered
 Chosen Opt on 2

Q.21 Six friends are sitting in two lines, one line behind the other line, and all the friends are facing north. Each line has three friends. Jogi is sitting between Vikrant and Saroj. Shrikant is sitting just behind Vikrant. Vaani is to the immediate right of Tripti. Which three persons are sitting in the same line?

- Ans**
- 1 Jogi, Tripti and Vaani
 - 2 Jogi, Vikrant and Saroj
 - 3 Jogi, Vikrant and Tripti
 - 4 Vikrant, Vaani and Tripti

Quest on D **6549782265**
 Status **Answered**
 Chosen Opt on **2**

Q.22 Three of the following four letter-clusters are alike in a certain way and one is different. Pick the odd one out.

- Ans**
- 1 QTWZC
 - 2 HKNQT
 - 3 BEHKN
 - 4 RUXAE

Quest on D **6549782256**
 Status **Answered**
 Chosen Opt on **4**

Q.23 Select the option figure which is NOT embedded in the figure (X) given below (rotation is NOT allowed).



(X)

- Ans**
- 1
 - 2
 - 3
 - 4

Quest on D **6549782292**
 Status **Answered**
 Chosen Opt on **2**

Q.24 Select the option that is related to the third letter-cluster in the same way as the second letter-cluster is related to the first letter-cluster.

PORCH : IDSPQ :: MOIST : ?

- Ans
- 1 UTJQO
 - 2 OMITS
 - 3 OPJTU
 - 4 UTJPN

Quest on D **6549782258**
 Status **Answered**
 Chosen Opt on **4**

Q.25 ₹2,871 is to be divided among A, B and C in the ratio of 9 : 11 : 13, respectively. How much more money (in ₹) will C get as compared to A?

- Ans
- 1 ₹783
 - 2 ₹348
 - 3 ₹402
 - 4 ₹296

Quest on D **6549782276**
 Status **Answered**
 Chosen Opt on **2**

Q.26 Select the correct mirror image of the given combination when the mirror is placed at 'PQ' as shown below.

t f d m w r h |
 P
 Q

- Ans
- 1 h r w m d f t
 - 2 r r w w b f t
 - 3 r r w m b f t
 - 4 h r w m b f t

Quest on D **6549782298**
 Status **Answered**
 Chosen Opt on **4**

Q.27 In a code language, 'SOGGY' is written as '78' and 'PLINTH' is written as '85'. How will 'DEVOTION' be written in that language?

- Ans
- 1 112
 - 2 98
 - 3 104
 - 4 120

Quest on D **6549782264**
 Status **Answered**
 Chosen Opt on **3**

Q.28 In a code language, if 'get up now' is written as 'pax max rax', 'he will get' is written as 'max dax zax', and 'will it stop' is written as 'zax kax lax', then for which word is the code 'dax' used in this language?

- Ans
- 1 get
 - 2 it
 - 3 he
 - 4 will

Quest on D **6549782260**
 Status **Answered**
 Chosen Opt on **3**

Q.29 Select the correct combination of mathematical signs that can sequentially replace the * signs from left to right to balance the following equation.

$$16 * 35 * 5 * 20 * 4 * 89$$

- Ans
- 1 $\times, -, +, \div, =$
 - 2 $-, \div, +, \times, =$
 - 3 $\times, \div, +, -, =$
 - 4 $-, \times, \div, +, =$

Quest on D **6549782281**
 Status **Not Attempted and Marked For Review**
 Chosen Opt on **--**

Q.30 'A # B' means 'A is the brother of B'.

'A @ B' means 'A is the wife of B'.

'A & B' means 'A is the daughter of B'.

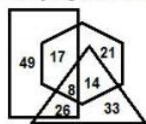
'A % B' means 'A is the sister of B'.

If $P \% R \& Y @ Z \# M \% N$, then how is M related to P?

- Ans
- 1 Paternal aunt
 - 2 Mother
 - 3 Paternal uncle
 - 4 Maternal aunt

Quest on D **6549782268**
 Status **Not Attempted and Marked For Review**
 Chosen Opt on **--**

Q.31 In the following Venn diagram, the 'Rectangle' stands for 'Judges', the 'Triangle' stands for 'Males', and the 'Hexagon' stands for 'Golf players'. The given numbers represent the number of persons in that particular category. How many male judges are there in total?



- Ans
- 1 26
 - 2 22
 - 3 17
 - 4 34

Quest on D **6549782300**
 Status **Answered**
 Chosen Opt on **1**

Q.32 Select the letter-cluster that can replace the question mark (?) in the given letter-cluster series.
 PZX, QAY, SCA, VFD, ?

- Ans
- 1 ZKH
 - 2 ZJH
 - 3 AJG
 - 4 YKH

Quest on D **6549782251**
 Status **Answered**
 Chosen Opt on **2**

Q.33 Which number will replace the question mark (?) in the following series?
 25, 36, 51, 70, 93, 120, ?

- Ans
- 1 141
 - 2 151
 - 3 163
 - 4 159

Quest on D **6549782271**
 Status **Answered**
 Chosen Opt on **2**

Q.34 In a code language, 'EAGER' is written as 'BXJBU' and 'MARKS' is written as 'PXUNV'. How will 'LOCUST' be written in that language?

- Ans
- 1 ORFXVW
 - 2 OLGRBW
 - 3 ILZRPQ
 - 4 OLFrvw

Quest on D **6549782263**
 Status **Not Attempted and Marked For Review**
 Chosen Opt on **--**

Q.35 Three of the following four letter-clusters are alike in a certain way and one is different. Pick the odd one out.

- Ans
- 1 KFBY
 - 2 TOKH
 - 3 ZUQO
 - 4 BWSP

Quest on D 6549782257

Status Answered

Chosen Opt on 3

Q.36 Eight friends A, B, C, D, E, F, G and H are sitting anticlockwise in the same sequence around a circular table at equal distances from each other. All are facing the centre of the table. If G is sitting in the Southeast, then in which direction is A sitting?

- Ans
- 1 North
 - 2 North-west
 - 3 North-east
 - 4 South-west

Quest on D 6549782266

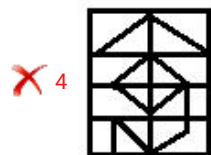
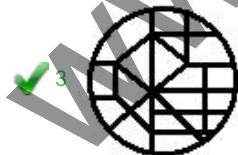
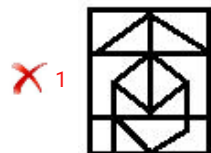
Status Answered

Chosen Opt on 3

Q.37 Select the option in which the given figure (X) is embedded (rotation is NOT allowed).



Ans

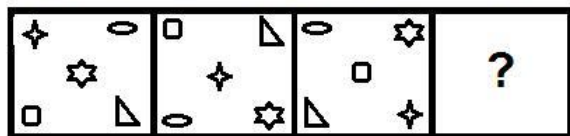


Quest on D 6549782291

Status Answered

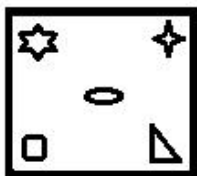
Chosen Opt on 3

Q.38 Select the figure that will replace the question mark (?) in the following figure series.

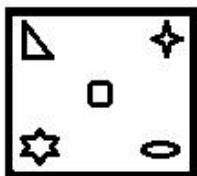


Ans

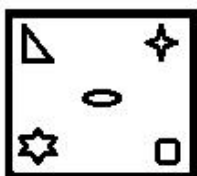
1



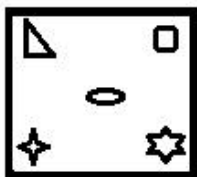
2



3



4



Quest on D **6549782290**
 Status **Not Answered**
 Chosen Opt on --

Q.39 Select the correct option that indicates the arrangement of the following words in a logical and meaningful order.

- 1. Knee
- 2. Navel
- 3. Eyebrows
- 4. Waist
- 5. Chin

Ans

1 1, 4, 2, 3, 5

2 1, 4, 2, 5, 3

3 2, 4, 1, 5, 3

4 4, 1, 2, 5, 3

Quest on D **6549782255**
 Status **Answered**
 Chosen Opt on **2**

Q.40 Which number will replace the question mark (?) in the following series?

57, ?, 62, 71, 87, 112, 148

- Ans
- 1 61
 - 2 60
 - 3 58
 - 4 59

Quest on D 6549782272

Status Not Attempted and
Marked For Review

Chosen Opt on --

Q.41 Study the given pattern carefully and select the number that can replace the question mark (?) in it.

| | | |
|----|---|----|
| 14 | 4 | 28 |
| 21 | 6 | 63 |
| 45 | 8 | ? |

- Ans
- 1 210
 - 2 180
 - 3 195
 - 4 150

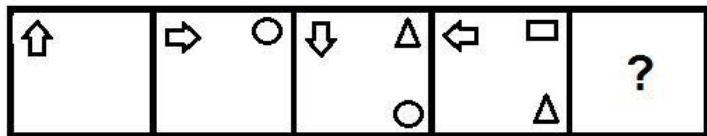
Quest on D 6549782282

Status Answered

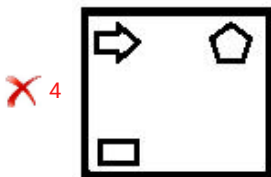
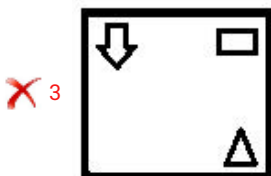
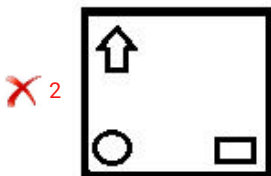
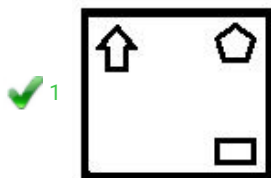
Chosen Opt on 2

www.jkchrome.com

Q.42 Select the figure that will replace the question mark (?) in the following figure series.



Ans



Quest on D **6549782289**
 Status **Answered**
 Chosen Opt on **1**

Q.43 Which two numbers should be interchanged to make the given equation correct?

$$63 \div 21 - 42 + 8 \times 7 = 135$$

Ans ✗ 1 7 and 63

✓ 2 7 and 21

✗ 3 21 and 42

✗ 4 21 and 8

Quest on D **6549782279**
 Status **Not Attempted and Marked For Review**
 Chosen Opt on **--**

Q.44 Arjun walks 40 m towards the South from his home, and then he turns left and walks 55 m. Then, he takes another left turn and walks 15 m. Then, he turns left again and walks 55 m. How far is he from his home now?

- Ans
- 1 35 m
 - 2 25 m
 - 3 15 m
 - 4 30 m

Quest on D **6549782286**
 Status **Answered**
 Chosen Opt on **2**

Q.45 Study the given pattern carefully and select the number that can replace the question mark (?) in it.

| | | |
|-----|-----|-----|
| 557 | 835 | 504 |
| 447 | 753 | 612 |
| 502 | 794 | ? |

- Ans
- 1 596
 - 2 552
 - 3 558
 - 4 544

Quest on D **6549782283**
 Status **Not Attempted and Marked For Review**
 Chosen Opt on **--**

Q.46 Two statements are given, followed by two conclusions numbered I and II. Assuming the statements to be true, even if they seem to be at variance with commonly known facts, decide which of the conclusions logically follow(s) from the statements.

Statements:

Some octopuses are fish.

Some fish are frogs.

Conclusions:

I. Some frogs are fish.

II. Some fish are octopuses.

- Ans
- 1 Only conclusion I follows
 - 2 Either conclusion I or II follows.
 - 3 Only conclusion II follows
 - 4 Both conclusions follow

Quest on D **6549782269**
 Status **Answered**
 Chosen Opt on **1**

Q.47 Select the letter-cluster that can replace the question mark (?) in the given letter-cluster series.

POUR, MLRO, IHNK, DCIF, ?

- Ans
- 1 YWCA
 - 2 XWCZ
 - 3 XWBY
 - 4 XVBZ

Quest on D **6549782252**

Status **Answered**

Chosen Opt on **2**

Q.48 Z's house is 45 m South to P's house. J's house is 50 m South to H's house. Q's house is 30 m West to Z's house. M's house is 50 m North to P's house. H's house is 30 m West to M's house. In which direction and at what distance is J's house with reference to Q's house?

- Ans
- 1 West, 30 m
 - 2 South, 50 m
 - 3 North, 45 m
 - 4 South, 45 m

Quest on D **6549782287**

Status **Not Attempted and Marked For Review**

Chosen Opt on --

Q.49 If 'A' denotes 'addition', 'B' denotes 'multiplication', 'C' denotes 'subtraction', and 'D' denotes 'division', then what will be the value of the following expression?

$15 B (14 C 7) A 25 D (18 C 13) C 8 B (2 A 3) = ?$

- Ans
- 1 105
 - 2 115
 - 3 70
 - 4 40

Quest on D **6549782280**

Status **Not Attempted and Marked For Review**

Chosen Opt on --

Q.50 Select the correct mirror image of the given combination when the mirror is placed at 'PQ' as shown below.

AVN54 |
P
Q

- Ans
- 1 4 2 N V A
 - 2 4 2 N V A
 - 3 4 5 N V A
 - 4 4 2 N V A

Quest on D 6549782297
Status Answered
Chosen Opt on 1

Sect on General Knowledge and General Awareness

Q.1 'The Substance and the Shadow' is the autobiography of .

- Ans
- 1 Guru Dutt
 - 2 Shamm Kapoor
 - 3 D p Kumar
 - 4 Dev Anand

Quest on D 6549782335
Status Not Attempted and Marked For Review
Chosen Opt on --

Q.2 ऐसी भूमि है, जो पांच से अधिक सालों से ऊसर (अकृषित) पड़ी है और सुधार कार्यों के माध्यम से उसे सुधारने के बाद खेती के काम में लाया जा सकता है।

- Ans
- 1 स्थायी चरागाह
 - 2 वन भूमि
 - 3 खेती योग्य बंजर भूमि
 - 4 वर्तमान में बंजर

Quest on D 6549782323
Status Answered
Chosen Opt on 3

Q.3 The water utilisation is very high in the states of Punjab, Haryana, Rajasthan, and Tamil Nadu.

- Ans
- 1 sea
 - 2 ra n
 - 3 ground
 - 4 r ver

Quest on D 6549782324
Status Answered
Chosen Opt on 4

Q.4 Muhammad Ghori was defeated by a ruler in 1191.

- Ans
- 1 Gahadava a
 - 2 Maurya
 - 3 Chahamana
 - 4 Chahamana

Quest on ID 6549782331
Status Answered
Chosen Option 3

Q.5 Teejan Bai was awarded the Padma Vibhushan Award in 2019 for her contribution in the field of .

- Ans
- 1 Public Affairs
 - 2 Art-Acting-Theatre
 - 3 Art-Vocals-Folk
 - 4 Trade and Industry - Infrastructure

Quest on ID 6549782340
Status Answered
Chosen Option 3

Q.6 The longest continuous wall in India, the second longest in the world, is at Fort.

- Ans
- 1 Kumbhgarh
 - 2 Mehrangarh
 - 3 Chittorgarh
 - 4 Kangra

Quest on ID 6549782328
Status Answered
Chosen Option 3

Q.7 Fondly called the 'Haryana Hurricane', made his test debut in the year 1978.

- Ans
- 1 Kapil Dev
 - 2 Sun Gavaskar
 - 3 Dip Vengsarkar
 - 4 Rav Shastri

Quest on ID 6549782347
Status Answered
Chosen Option 1

Q.8 As on 30 June 2020, Harsimrat Kaur Badal was the Indian Cabinet Minister for the Ministry of .

- Ans
- 1 Health and Family Welfare
 - 2 Human Resource Development
 - 3 Women and Child Development
 - 4 Food Processing Industries

Question ID 6549782346
Status Answered
Chosen Option 4

Q.9 Planned economic development in India began in _____ with the inception of the First Five Year Plan.

- Ans
- 1 1948
 - 2 1951
 - 3 1956
 - 4 1958

Question ID 6549782306
Status Answered
Chosen Option 2

Q.10 In which of the following states are the Sundergarh deposits of Manganese located?

- Ans
- 1 Gujarat
 - 2 Maharashtra
 - 3 Odisha
 - 4 Kerala

Question ID 6549782325
Status Not Attempted and Marked For Review
Chosen Option --

Q.11 What is the length of the Indian border with Afghanistan?

- Ans
- 1 106 km
 - 2 575 km
 - 3 601 km
 - 4 755 km

Question ID 6549782327
Status Answered
Chosen Option 1

Q.12 Birhor dance is a tribal folk dance from .

- Ans
- 1 Karnataka
 - 2 H macha Pradesh
 - 3 Punjab
 - 4 Jharkhand

Quest on D 6549782304

Status Not Attempted and Marked For Review

Chosen Opt on --

Q.13 The Indian Cabinet Minister – Ministry of Corporate Affairs, as on 30 June 2020 was .

- Ans
- 1 N rma a S tharaman
 - 2 Subrahmanyam Ja shankar
 - 3 Rav Shankar Prasad
 - 4 N t n Ja ram Gadkar

Quest on D 6549782341

Status Answered

Chosen Opt on 4

Q.14 Solids can be classified as on the basis of the nature of order present in the arrangement of their constituent particles.

- Ans
- 1 conductor or non-conductor
 - 2 crysta ne or amorphous
 - 3 meta c or non-meta c
 - 4 magnet c or non-magnet c

Quest on D 6549782317

Status Answered

Chosen Opt on 2

Q.15 हल्लीसक मूल रूप से का समूह नृत्य है।

- Ans
- 1 महाराष्ट्र
 - 2 गोवा
 - 3 गुजरात
 - 4 राजस्थान

Quest on D 6549782301

Status Not Attempted and Marked For Review

Chosen Opt on --

Q.16 Sagol Kangjei, an indigenous game of Manipur is similar to the modern day sports of:

- Ans
- 1 box ng
 - 2 hockey
 - 3 cr cket
 - 4 po o

Quest on D 6549782350

Status Not Attempted and
Marked For Review

Chosen Opt on --

Q.17 बालीयात्रा, जिसका शाब्दिक अर्थ है, 'बाली की यात्रा', जो विशेष रूप से में बहुत धूमधाम से मनाया जाने वाला त्योहार है।

- Ans
- 1 कटक
 - 2 वेल्लूर
 - 3 गुड़गांव
 - 4 कोच्चि

Quest on D 6549782302

Status Answered

Chosen Opt on 4

Q.18 छोटे किसान और मौसमी मजदूर जैसे लोग, जो नियमित रूप से गरीबी दायरे के अंदर और बाहर होते रहते हैं, उन्हें के रूप में वर्गीकृत किया जाता है।

- Ans
- 1 कदाचित गरीब (occasional poor)
 - 2 विलोड़न गरीब (chronic poor)
 - 3 स्थाई गरीब (always poor)
 - 4 सामान्य गरीब (usually poor)

Quest on D 6549782309

Status Answered

Chosen Opt on 1

Q.19 The Chief Minister of the state of Gujarat as on 30 June 2020 was

- Ans
- 1 Naveen Patnaik
 - 2 Pramod Sawant
 - 3 Nitish Kumar
 - 4 Vijaybhaskar Rupani

Quest on D 6549782342

Status Answered

Chosen Opt on 4

Q.20 The Governor of the state of Maharashtra as on 30 June 2020 was .

- Ans
- 1 Acharya Dev Vrat
 - 2 Bhagat Singh Koshiyar
 - 3 Najma Heptu a
 - 4 Anand ben Pate

Quest on D **6549782344**
 Status **Answered**
 Chosen Opt on **2**

Q.21 Jayprakash Narayan was given the title of ' .

- Ans
- 1 Deenbandhu
 - 2 Deshbandhu
 - 3 Loknayak
 - 4 Jana Nayak

Quest on D **6549782337**
 Status **Answered**
 Chosen Opt on **3**

Q.22 The process of evolution of different species in a given geographical area starting from a point and literally radiating to other areas of geography (habitats) is called .

- Ans
- 1 adjust ve rad at on
 - 2 adjust ve evo ut on
 - 3 adapt ve evo ut on
 - 4 adapt ve rad at on

Quest on D **6549782321**
 Status **Not Attempted and Marked For Review**
 Chosen Opt on **--**

Q.23 कर सुधार सरकार की करान और सार्वजनिक व्यय की नीतियों में सुधार से संबंधित है, जिन्हें सम्मिलित रूप से के रूप में जाना जाता है।

- Ans
- 1 राजकोषीय नीति
 - 2 राजकोषीय सुधार
 - 3 वित्तीय सुधार
 - 4 वित्तीय नीति

Quest on D **6549782307**
 Status **Answered**
 Chosen Opt on **4**

Q.24 Name the high frequency radiation produced in nuclear reactions and also emitted by radioactive nuclei that is used in medicine to destroy cancer cells.

- Ans
- 1 Ultraviolet waves
 - 2 Gamma rays
 - 3 Light waves
 - 4 X-rays

Quest on D 6549782312
Status Answered
Chosen Option 2

Q.25 states that for a solution of volatile liquids, the partial vapour pressure of each component of the solution is directly proportional to its mole fraction present in solution.

- Ans
- 1 Dalton's law
 - 2 Raoult's law
 - 3 Faraday's law
 - 4 Boyle's law

Quest on D 6549782318
Status Answered
Chosen Option 2

Q.26 When a host is exposed to antigens, which may be in the form of living or dead microbes or other proteins, antibodies are produced in the host body. This type of immunity is called immunity.

- Ans
- 1 acquired
 - 2 active
 - 3 passive
 - 4 strong

Quest on D 6549782322
Status Not Attempted and Marked For Review
Chosen Option --

Q.27 Electrical conductance through metals is called electronic conductance and it

- Ans
- 1 does not depend on temperature
 - 2 decreases with increase in temperature
 - 3 increases with increase in temperature
 - 4 decreases with decrease in temperature

Quest on D 6549782320
Status Not Attempted and Marked For Review
Chosen Option --

Q.28 ONGC भारतीय सार्वजनिक क्षेत्रक उपक्रम, तेल और प्राकृतिक गैस निगम की एक सहायक कंपनी है।

- Ans
- 1 विशेष
 - 2 विनेश
 - 3 विघ्नेश
 - 4 विदेश

Quest on D 6549782308
Status Answered
Chosen Opt on 1

Q.29 Detritivores in the soil break down detritus into smaller particles. This process is called

- Ans
- 1 catabolism
 - 2 mineralization
 - 3 fragmentation
 - 4 each one

Quest on D 6549782316
Status Answered
Chosen Opt on 3

Q.30 Who is the first Indian to be awarded the Nobel Prize in Physics?

- Ans
- 1 Subramanyan Chandrasekhar
 - 2 Venkatraman Ramakrishnan
 - 3 Har Gobind Khorana
 - 4 Chandrasekhara Venkata Raman

Quest on D 6549782338
Status Answered
Chosen Opt on 4

Q.31 The charge has to be passed _____ to obtain maximum work from a galvanic cell.

- Ans
- 1 proportionately
 - 2 inversely
 - 3 reversibly
 - 4 uniformly

Quest on D 6549782319
Status Not Attempted and Marked For Review
Chosen Opt on --

Q.32 Nuclear membrane is absent in organisms that fall under kingdom .

- Ans
- 1 Fung
 - 2 An ma a
 - 3 Monera
 - 4 P antae

Quest on ID 6549782314
Status Not Attempted and Marked For Review
Chosen Option --

Q.33 The Chief of the Naval Staff of India as on 30 June 2020 was .

- Ans
- 1 Karam r S ngh
 - 2 Rakesh Kumar S ngh Bhadaur a
 - 3 B p n Rawat
 - 4 Manoj Mukund Naravane

Quest on ID 6549782343
Status Answered
Chosen Option 1

Q.34 Mohandas Karamchand Gandhi returned to India in the year after two decades of residence abroad.

- Ans
- 1 1869
 - 2 1893
 - 3 1905
 - 4 1915

Quest on ID 6549782329
Status Answered
Chosen Option 4

Q.35 Lord Hastings initiated the where the East India Company claimed that its authority was supreme and hence its power was greater than that of Indian states.

- Ans
- 1 Government's Stores Po cy
 - 2 Po cy of 'Paramountcy'
 - 3 mpera Po cy
 - 4 Doctr ne of Lapse

Quest on ID 6549782334
Status Answered
Chosen Option 2

Q.36 Fouaad Mirza is an Indian who was awarded the Arjuna award in 2019.

- Ans
- 1 we ght fter
 - 2 wrest er
 - 3 go fer
 - 4 equestr an r der

Quest on D **6549782349**
Status **Answered**
Chosen Opt on **3**

Q.37 Called the farmer's 'friend', the well as in loosening of the soil. helps in the breakdown of complex organic matter as

- Ans
- 1 ocust
 - 2 earthworm
 - 3 rat
 - 4 weed

Quest on D **6549782315**
Status **Answered**
Chosen Opt on **2**

Q.38 Sakewa is a religious festival celebrated by the Kirat Khambu Rai community of

- Ans
- 1 Megha aya
 - 2 Arunacha Pradesh
 - 3 Naga and
 - 4 S kk m

Quest on D **6549782303**
Status **Not Attempted and Marked For Review**
Chosen Opt on **--**

Q.39 was elected as President of the Indian National Congress in December 1929 at its annual session in the city of Lahore.

- Ans
- 1 Subhas Chandra Bose
 - 2 Sardar Va abhbha Pate
 - 3 Jawahar a Nehru
 - 4 La Bahadur Shastr

Quest on D **6549782330**
Status **Answered**
Chosen Opt on **3**

Q.40 Of the 552 members of the Lok Sabha, members represent the states.

- Ans
- 1 520
 - 2 540
 - 3 530
 - 4 550

Quest on D **6549782345**
Status **Answered**
Chosen Opt on **3**

Q.41 Viswanathan Anand, Pentala Harikrishna and Vidit Gujrathi are associated with the game of

- Ans
- 1 cr cket
 - 2 footba
 - 3 chess
 - 4 kabadd

Quest on D **6549782336**
Status **Answered**
Chosen Opt on **3**

Q.42 Languages like Nyishi, Apatani and Bokar are widely spoken in

- Ans
- 1 Assam
 - 2 Arunacha Pradesh
 - 3 M zoram
 - 4 Naga and

Quest on D **6549782305**
Status **Not Attempted and Marked For Review**
Chosen Opt on **--**

Q.43 The discovery and understanding of electromagnetic induction is based on a long series of experiments carried out by

- Ans
- 1 P anck and Ferm
 - 2 E nste n
 - 3 Faraday and Henry
 - 4 Rutherford

Quest on D **6549782313**
Status **Answered**
Chosen Opt on **3**

Q.44 What is the total area of the state of Goa?

- Ans
- 1 2702 km²
 - 2 4702 km²
 - 3 3702 km²
 - 4 1702 km²

Quest on D 6549782326
Status Not Attempted and
Marked For Review
Chosen Opt on --

Q.45 The first lot of 33 declassified files relating to Netaji Subhas Chandra Bose was handed over by the Prime Minister's Office (PMO) to the National Archives of India on 4 December .

- Ans
- 1 2019
 - 2 2018
 - 3 2014
 - 4 2015

Quest on D 6549782332
Status Not Attempted and
Marked For Review
Chosen Opt on --

Q.46 समीकरण का एक सेट, जिसमें इलेक्ट्रिक और चुंबकीय क्षेत्र, और उनके स्रोत, आवेश और धारा धनत्व शामिल होते हैं, उन्हें के समीकरण के रूप में जाना जाता है।

- Ans
- 1 आइंस्टीन
 - 2 भोर
 - 3 न्यूटन
 - 4 मैक्सवेल

Quest on D 6549782311
Status Answered
Chosen Opt on 4

Q.47 The British annexed Punjab after defeating the Sikhs in the Anglo-Sikh War in the year

- Ans
- 1 1839
 - 2 1835
 - 3 1845
 - 4 1849

Quest on D 6549782333
Status Not Attempted and
Marked For Review
Chosen Opt on --

Q.48 Which of the following poems is NOT written by Sarojini Naidu?

- Ans
- 1 A Love Song from the North
 - 2 My Dead Dream
 - 3 n the Forest
 - 4 The Banyan Tree

Quest on ID 6549782339
Status Answered
Chosen Option 4

Q.49 With which of the following sports are Ritwik Bhattacharya, Joshna Chinappa and Saurav Ghosal associated?

- Ans
- 1 Squash
 - 2 Wrestling
 - 3 Tennis
 - 4 Weightlifting

Quest on ID 6549782348
Status Answered
Chosen Option 1

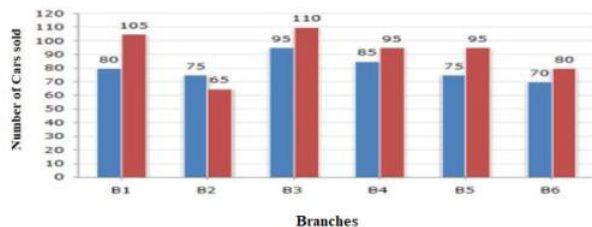
Q.50 Which of the following public sector enterprises falls under the status 'Maharatna'?

- Ans
- 1 Bharat Sanchar Nigam Limited
 - 2 Hindustan Aeronautics Limited
 - 3 Steel Authority of India Limited
 - 4 Mahanagar Telephone Nigam Limited

Quest on ID 6549782310
Status Answered
Chosen Option 3

Section Quantitative Aptitude

- Q.1** The given bar graph shows the sales of cars from six branches of a dealer B1, B2, B3, B4, B5, B6, during two consecutive years 2018 and 2019. Blue colour corresponds to the year 2018 and red colour corresponds to the year 2019.



The average sale of cars (from all branches) for the year 2018 is:

- Ans**
- 1 78
 - 2 90
 - 3 85
 - 4 80

Quest on D **6549782393**
 Status **Answered**
 Chosen Opt on **4**

- Q.2** On the marked price of ₹1,250 of an article, three successive discounts of 5%, 15% and 20% are offered. What will be the selling price (in ₹) after all discounts?

- Ans**
- 1 1,000
 - 2 807.50
 - 3 975.75
 - 4 950.25

Quest on D **6549782359**
 Status **Not Attempted and Marked For Review**
 Chosen Opt on **--**

- Q.3** The base of a triangle is equal to the perimeter of a square whose diagonal is $6\sqrt{2}$ cm, and its height is equal to the side of a square whose area is 144 cm^2 . The area of the triangle (in cm^2) is:

- Ans**
- 1 288
 - 2 216
 - 3 144
 - 4 72

Quest on D **6549782380**
 Status **Answered**
 Chosen Opt on **3**

Q.4 The area of a square and rectangle are equal. The length of the rectangle is greater than the length of a side of the square by 10 cm and the breadth is less than 5 cm. The perimeter (in cm) of the rectangle is:

- Ans**
- 1 50
 - 2 40
 - 3 80
 - 4 100

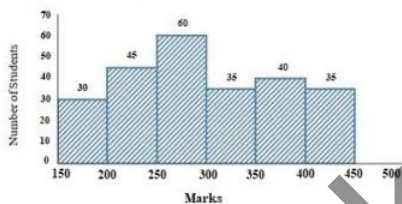
Quest on D **6549782379**
 Status **Answered**
 Chosen Opt on **4**

Q.5 P and Q together can do a work in 12 days. P alone can do the same work in 18 days. In how many days can Q alone complete two-third part of the same work?

- Ans**
- 1 30
 - 2 21
 - 3 24
 - 4 36

Quest on D **6549782370**
 Status **Answered**
 Chosen Opt on **3**

Q.6 Study the given histogram that shows the marks obtained by students in an examination and answer the question that follows.



The number of students who obtained less than 250 marks is:

- Ans**
- 1 135
 - 2 75
 - 3 30
 - 4 45

Quest on D **6549782398**
 Status **Answered**
 Chosen Opt on **2**

Q.7

The value of $\frac{\sin^2 52^\circ + 2 + \sin^2 38^\circ}{4\cos^2 43^\circ - 5 + 4\cos^2 47^\circ}$ is:

- Ans
- 1 3
 - 2 $\frac{1}{3}$
 - 3 $-\frac{1}{3}$
 - 4 -3

Quest on D 6549782388
 Status Answered
 Chosen Opt on 4

Q.8 On the marked price of an article, the sum of selling prices with a discount of 35% and two successive discounts of 20% and 15%, is ₹1,995. The marked price of the article (in ₹) is:

- Ans
- 1 1,550
 - 2 1,800
 - 3 1,500
 - 4 1,600

Quest on D 6549782362
 Status Not Attempted and Marked For Review
 Chosen Opt on --

Q.9 If 49% of X = Y, then Y% of 50 is:

- Ans
- 1 40% of Y
 - 2 24.5% of Y
 - 3 50% of X
 - 4 24.5% of X

Quest on D 6549782360
 Status Answered
 Chosen Opt on 4

Q.10 Chord AB of a circle is produced to a point P, and C is a point on the circle such that PC is a tangent to the circle. If PC = 12 cm, and BP = 10 cm, then the length of AB (in cm) is:

- Ans
- 1 5.4
 - 2 6
 - 3 5
 - 4 4.4

Quest on D 6549782385
 Status Answered
 Chosen Opt on 4

Q.11 A ladder is resting against a wall. The angle between the foot of the ladder and wall is 60° , and the foot of the ladder is 3.6 m away from the wall. The length of the ladder (in m) is:

- Ans
- 1 5.4
 - 2 3.6
 - 3 14.4
 - 4 7.2

Quest on D **6549782390**
Status **Answered**
Chosen Opt on **4**

Q.12 A pump can fill a tank with water in 3 hours. Because of a leak, it took $3\frac{1}{3}$ hours to fill the tank. In how many hours can the leak alone drain all the water of the tank when it is full?

- Ans
- 1 21
 - 2 15
 - 3 30
 - 4 10

Quest on D **6549782372**
Status **Answered**
Chosen Opt on **3**

Q.13 In $\triangle ABC$, $\angle A = 68^\circ$. If I is the incentre of the triangle, then the measure of $\angle BIC$ is:

- Ans
- 1 124°
 - 2 68°
 - 3 148°
 - 4 54°

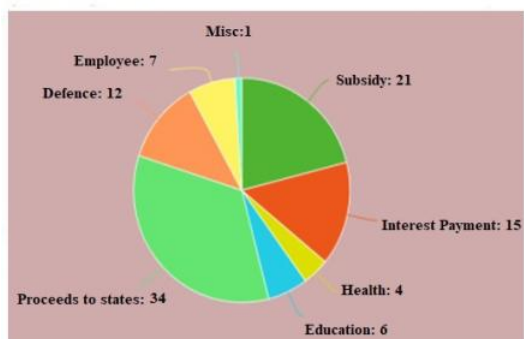
Quest on D **6549782387**
Status **Answered**
Chosen Opt on **1**

Q.14 If the selling price of 50 articles is equal to the cost price of 42 articles, the what is the approximate loss or profit percentage?

- Ans
- 1 8% profit
 - 2 16% loss
 - 3 10% loss
 - 4 20% profit

Quest on D **6549782365**
Status **Answered**
Chosen Opt on **2**

Q.15 The following pie chart shows percentage expenditure of a country on different heads. The total expenditure is ₹1,680 (in billions). Study the chart and answer the question.



The amount of expenditure on Defence is what percentage more than the expenditure on Education?

- Ans
- 1 50%
 - 2 125%
 - 3 150%
 - 4 100%

Quest on D 6549782396
Status Answered
Chosen Opt on 4

Q.16 If $x + y + z = 13$, $x^2 + y^2 + z^2 = 133$ and $x^3 + y^3 + z^3 = 847$, then the value of $\sqrt[3]{xyz}$ is:

- Ans
- 1 8
 - 2 7
 - 3 -9
 - 4 -6

Quest on D 6549782383
Status Answered
Chosen Opt on 4

Q.17 Three partners shared the profit in a business in the ratio 8 : 7 : 5. They invested their capitals for 7 months, 8 months and 14 months, respectively. What was the ratio of their capitals?

- Ans
- 1 49 : 64 : 20
 - 2 20 : 49 : 64
 - 3 20 : 64 : 49
 - 4 64 : 49 : 20

Quest on D 6549782367
Status Answered
Chosen Opt on 4

Q.18 A number is first increased by 40% and then decreased by 25%, again increased by 15% and then decreased by 20%.
What is the net increase/decrease per cent in the number?

- Ans
- 1 7.2% decrease
 - 2 6.4% increase
 - 3 3.4% increase
 - 4 3.4% decrease

Quest on D **6549782364**

Status **Not Attempted and Marked For Review**

Chosen Opt on --

Q.19 The average temperature for Monday, Wednesday and Friday was 41°C. The average for Wednesday, Friday and Thursday was 42°C. If the temperature on Thursday was 43°C, then the temperature on Monday was:

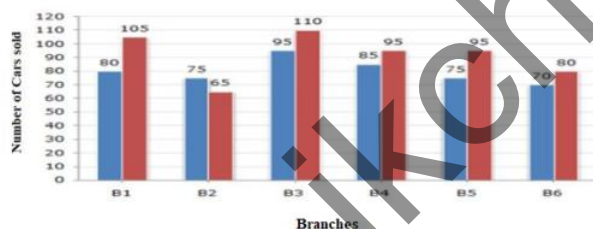
- Ans
- 1 43°C
 - 2 41°C
 - 3 42°C
 - 4 40°C

Quest on D **6549782358**

Status **Answered**

Chosen Opt on **4**

Q.20 The given bar graph shows the sales of cars from six branches of a dealer B1, B2, B3, B4, B5, B6, during two consecutive years 2018 and 2019. Blue colour corresponds to the year 2018 and red colour corresponds to the year 2019.



The total sale of cars from all the branches in the year 2018 is what percentage less than the total sales of cars from all the branches in the year 2019? (correct to one decimal place)

- Ans
- 1 12.7%
 - 2 14.3%
 - 3 11.9%
 - 4 13.5%

Quest on D **6549782394**

Status **Answered**

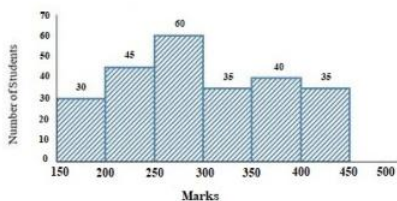
Chosen Opt on **1**

Q.21 The simple interest on a sum of money at 10% per annum for 2 years is ₹8,100. Compounded annually, what would be the compound interest (in ₹) on the same sum for the same period at the same rate of interest?

- Ans**
- 1 8,100
 - 2 8,505
 - 3 8,715
 - 4 9,000

Quest on D **6549782369**
 Status **Answered**
 Chosen Opt on **2**

Q.22 Study the given histogram that shows the marks obtained by students in an examination and answer the question that follows.



If the total marks obtained by students be represented as a pie chart, then the central angle corresponding to marks 250 or more but less than 300 is:
 (correct to the nearest degree)

- Ans**
- 1 188°
 - 2 88°
 - 3 68°
 - 4 128°

Quest on D **6549782400**
 Status **Not Attempted and Marked For Review**
 Chosen Opt on **--**

Q.23 The internal measures of a cuboidal room are with length as 12 m, breadth as 8 m and height as 10 m. The total cost (in ₹) of whitewashing all four walls of the room and also the ceiling of the room, if the cost of whitewashing is ₹25 per m^2 , is:

- Ans**
- 1 12,400
 - 2 12,000
 - 3 18,000
 - 4 13,600

Quest on D **6549782378**
 Status **Answered**
 Chosen Opt on **1**

Q.24 How many numbers between 400 and 700 are divisible by 5, 6 and 7?

- Ans
- 1 20
 - 2 10
 - 3 2
 - 4 5

Quest on D **6549782352**
Status **Answered**
Chosen Opt on **3**

Q.25 A class has five sections that have 25, 30, 40, 45 and 60 students, respectively. The pass percentage of these sections are 20%, 30%, 35%, 40% and 100%, respectively. The pass percentage of the entire class is:

- Ans
- 1 87%
 - 2 63%
 - 3 53%
 - 4 79%

Quest on D **6549782361**
Status **Answered**
Chosen Opt on **3**

Q.26 If $a^3 + b^3 = 217$ and $a + b = 7$, then the value of ab is:

- Ans
- 1 -6
 - 2 -1
 - 3 7
 - 4 6

Quest on D **6549782381**
Status **Answered**
Chosen Opt on **4**

Q.27 PQRS is a cyclic quadrilateral. If $\angle P$ is 4 times $\angle R$, and $\angle S$ is 3 times $\angle Q$, then the average of $\angle Q$ and $\angle R$ is:

- Ans
- 1 40.5°
 - 2 45.7°
 - 3 90°
 - 4 81°

Quest on D **6549782384**
Status **Answered**
Chosen Opt on **1**

Q.28 If 25% of $400 + 35\%$ of $1260 + 27\%$ of $1800 = 1020 + x$, then the value of x lies between:

- Ans 1 6 to 10
 2 0 to 5
 3 11 to 15
 4 16 to 20

Quest on D **6549782363**
Status **Answered**
Chosen Opt on **1**

Q.29 Pipes A, B and C can fill a tank in 15, 30 and 40 hours, respectively. Pipes A, B and C are opened at 6 a.m., 8 a.m. and 10 a.m., respectively, on the same day. When will the tank be full?

- Ans 1 3:20 p.m.
 2 11:20 p.m.
 3 7:20 p.m.
 4 5:20 p.m.

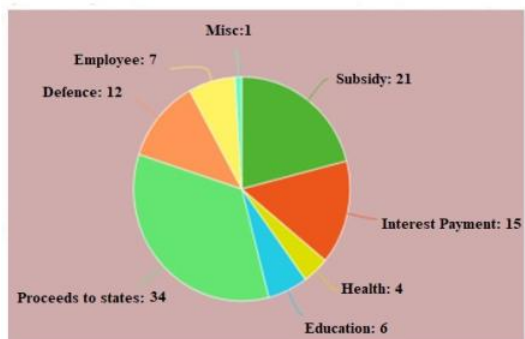
Quest on D **6549782373**
Status **Answered**
Chosen Opt on **3**

Q.30 If 4θ is an acute angle, and $\cot 4\theta = \tan(\theta - 5^\circ)$, then what is the value of θ ?

- Ans 1 19°
 2 45°
 3 21°
 4 24°

Quest on D **6549782389**
Status **Answered**
Chosen Opt on **1**

Q.31 The following pie chart shows percentage expenditure of a country on different heads. The total expenditure is ₹1,680 (in billions). Study the chart and answer the question.



The central angle of the sector representing expenditure on Subsidy is :

- Ans
- 1 54.9°
 - 2 90°
 - 3 108.3°
 - 4 75.6°

Quest on D **6549782397**
 Status **Answered**
 Chosen Opt on **4**

Q.32 The present ages of A and B are in the ratio 3 : 4. Twelve years ago, their ages were in the ratio 2 : 3. The sum of the present ages of A and B (in years) is:

- Ans
- 1 72
 - 2 60
 - 3 84
 - 4 48

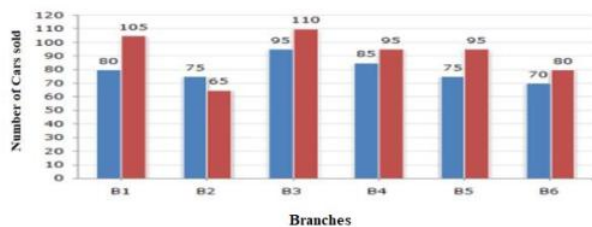
Quest on D **6549782366**
 Status **Answered**
 Chosen Opt on **3**

Q.33 The value of $\frac{4.35 \times 4.35 \times 4.35 + 3.25 \times 3.25 \times 3.25}{43.5 \times 43.5 + 32.5 \times 32.5 - 43.5 \times 32.5}$ is:

- Ans
- 1 0.0076
 - 2 0.76
 - 3 0.076
 - 4 7.6

Quest on D **6549782357**
 Status **Answered**
 Chosen Opt on **4**

- Q.34** The given bar graph shows the sales of cars from six branches of a dealer B1, B2, B3, B4, B5, B6, during two consecutive years 2018 and 2019. Blue colour corresponds to the year 2018 and red colour corresponds to the year 2019.



In the bar graph, the ratio of the total sales from branches B1, B2 and B3 taken together for the year 2018 to the sales from the branches B6, B4 and B5 for the year 2019, is:

- Ans
- 1 25 : 29
 - 2 25 : 27
 - 3 29 : 25
 - 4 27 : 25

Quest on D 6549782392
Status Answered
Chosen Opt on 2

- Q.35** A can complete some work in 35 days and B can complete the same work in 15 days. They worked together for 8 days, then B left the work. In how many days will A alone complete 60% of the remaining work?

- Ans
- 1 15
 - 2 10
 - 3 5
 - 4 8

Quest on D 6549782371
Status Answered
Chosen Opt on 3

- Q.36** A sum of ₹27,000 is divided into two parts A and B such that the simple interest at the rate of 15% p.a. on A and B after two years and four years, respectively, is equal. The total interest (in ₹) received together from A and B is:

- Ans
- 1 9,600
 - 2 5,400
 - 3 18,000
 - 4 10,800

Quest on D 6549782368
Status Not Attempted and Marked For Review
Chosen Opt on --

Q.37 A train travelling at the speed of x km/h crossed a 300 m long platform in 30 seconds, and overtook a man walking in the same direction at 6 km/h in 20 seconds. What is the value of x ?

- Ans
- 1 60
 - 2 96
 - 3 48
 - 4 102

Quest on D **6549782375**

Status **Not Attempted and Marked For Review**

Chosen Opt on --

Q.38 The value of $\frac{2}{3} \div \frac{3}{10}$ of $\frac{4}{9} - \frac{4}{5} \times 1\frac{1}{9} \div \frac{8}{15} - \frac{3}{4} + \frac{3}{4} \div \frac{1}{2}$ is:

- Ans
- 1 $\frac{25}{6}$
 - 2 $\frac{14}{3}$
 - 3 $\frac{17}{9}$
 - 4 $\frac{49}{12}$

Quest on D **6549782356**

Status **Not Attempted and Marked For Review**

Chosen Opt on --

Q.39 If $a^2 + b^2 + c^2 + 84 = 4(a - 2b + 4c)$, then $\sqrt{ab - bc + ca}$ is equal to:

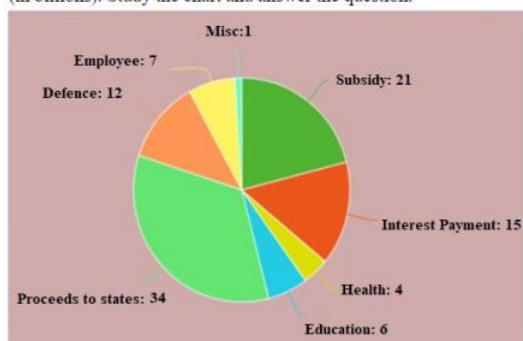
- Ans
- 1 $4\sqrt{10}$
 - 2 $\sqrt{10}$
 - 3 $5\sqrt{10}$
 - 4 $2\sqrt{10}$

Quest on D **6549782382**

Status **Answered**

Chosen Opt on **4**

Q.40 The following pie chart shows percentage expenditure of a country on different heads. The total expenditure is ₹1,680 (in billions). Study the chart and answer the question.



The total amount of expenditure for education and Health (in billions ₹) is:

- Ans**
- 1 168
 - 2 126
 - 3 186
 - 4 84

Quest on D 6549782395
Status Answered
Chosen Opt on 1

Q.41 What is the least number of soldiers that can be drawn up in troops of 10, 12, 15, 18 and 20 soldiers, and also in form of a solid square?

- Ans**
- 1 400
 - 2 625
 - 3 900
 - 4 180

Quest on D 6549782354
Status Answered
Chosen Opt on 4

Q.42 The value of $-7 \div [5 + 1 \div 2 - \{4 + (4 \text{ of } 2 \div 4) + (4 \div 4 \text{ of } 2)\}]$ is:

- Ans**
- 1 $-\frac{7}{2}$
 - 2 -7
 - 3 $\frac{7}{2}$
 - 4 7

Quest on D 6549782355
Status Answered
Chosen Opt on 4

Q.43 A boy increases his speed to $\frac{9}{5}$ times of his original speed. By doing this, he reaches his school 40 minutes before the usual time. How much time (in minutes) does he take usually?

- Ans**
- 1 120
 - 2 30
 - 3 90
 - 4 45

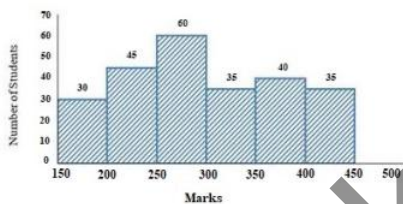
Quest on D **6549782374**
 Status **Answered**
 Chosen Opt on **3**

Q.44 The perimeter of a right triangle is 60 cm and its hypotenuse is 26 cm. What is the area (in cm^2) of the triangle?

- Ans**
- 1 60
 - 2 96
 - 3 90
 - 4 120

Quest on D **6549782377**
 Status **Answered**
 Chosen Opt on **4**

Q.45 Study the given histogram that shows the marks obtained by students in an examination and answer the question that follows.



The number of students who obtained less than 350 marks is what per cent more than the number of students who obtained 400 or more marks?
 (correct to one decimal place)

- Ans**
- 1 350%
 - 2 100%
 - 3 385.7%
 - 4 375.8%

Quest on D **6549782399**
 Status **Answered**
 Chosen Opt on **3**

Q.46 In $\triangle ABC$, D is the median from A to BC. AB = 6 cm, AC = 8 cm, and BC = 10 cm. The length of median AD (in cm) is:

- Ans
- 1 4.5
 - 2 5
 - 3 4
 - 4 3

Quest on D **6549782386**
 Status **Answered**
 Chosen Opt on **2**

Q.47 The HCF of two numbers is 29, and the other two factors of their LCM are 15 and 13. The larger of the two numbers is:

- Ans
- 1 435
 - 2 377
 - 3 406
 - 4 464

Quest on D **6549782353**
 Status **Answered**
 Chosen Opt on **1**

Q.48 A 64 cm wide path is made around a circular garden having a diameter of 10 metres. The area (in m^2) of the path is closest to:

(Take $\pi = \frac{22}{7}$)

- Ans
- 1 10
 - 2 11
 - 3 15
 - 4 9

Quest on D **6549782376**
 Status **Not Attempted and Marked For Review**
 Chosen Opt on **--**

Q.49 When a number is successively divided by 3, 4 and 7, the remainders obtained are 2, 3 and 5, respectively. What will be the remainder when 84 divides the same number?

- Ans
- 1 71
 - 2 30
 - 3 48
 - 4 53

Quest on D **6549782351**
 Status **Not Attempted and Marked For Review**
 Chosen Opt on **--**

Q.50 Let A and B be two towers with same base. From the midpoint of the line joining their feet, the angles of elevation of the tops of A and B are 30° and 60° , respectively. The ratio of the heights of B and A is:

- Ans
- 1 1 : 3
 - 2 3 : 1
 - 3 1 : 2
 - 4 1 : $\sqrt{3}$

Quest on D **6549782391**
 Status **Answered**
 Chosen Opt on **2**

Sect on English Comprehension

Q.1 Select the most appropriate option to substitute the underlined segment in the given sentence. If there is no need to substitute it, select 'No substitution required'.

She is being waited for you for two hours.

- Ans
- 1 had wa t
 - 2 has been wa t ng
 - 3 No subst tut on requ red
 - 4 have been wa ted

Quest on D **6549782406**
 Status **Answered**
 Chosen Opt on **2**

Q.2 Select the most appropriate ANTONYM of the given word.

SUAVE

- Ans
- 1 br sk
 - 2 rude
 - 3 charm ng
 - 4 po te

Quest on D **6549782427**
 Status **Answered**
 Chosen Opt on **2**

Q.3 Select the most appropriate synonym of the given word.

COVETED

- Ans
- 1 des red
 - 2 desp sed
 - 3 covered
 - 4 renounced

Quest on D **6549782425**
 Status **Answered**
 Chosen Opt on **3**

Q.4 Select the most appropriate option to substitute the underlined segment in the given sentence. If there is no need to substitute it, select 'No substitution required'.

The train was delayed in order to an accident.

- Ans
- 1 since
 - 2 owing to
 - 3 No substitution required
 - 4 because

Quest on ID 6549782407
 Status Answered
 Chosen Option 2

Q.5 Select the most appropriate meaning of the given idiom.

Bear the brunt of

- Ans
- 1 breed jealousy
 - 2 assume an identity
 - 3 bear discrimination
 - 4 bear the maximum fury

Quest on ID 6549782434
 Status Not Attempted and Marked For Review
 Chosen Option --

Q.6 Identify the segment in the sentence which contains a grammatical error.

The two trains gave the illusion of been stationary.

- Ans
- 1 The two
 - 2 of been stationary
 - 3 the us on
 - 4 trains gave

Quest on ID 6549782403
 Status Answered
 Chosen Option 2

Q.7 Select the most appropriate synonym of the given word.

SHOVE

- Ans
- 1 shout
 - 2 poke
 - 3 push
 - 4 hat

Quest on ID 6549782423
 Status Answered
 Chosen Option 2

Q.8 Select the most appropriate synonym of the given word.

LOFTY

- Ans
- 1 humb e
 - 2 s ent
 - 3 p a n
 - 4 tower ng

Quest on D 6549782422
Status Answered
Chosen Opt on 4

Q.9 Select the most appropriate meaning of the given idiom.

The sword of Damocles

- Ans
- 1 a rare art fact
 - 2 an authent c sword
 - 3 an mpend ng threat
 - 4 a po gnant weapon

Quest on D 6549782436
Status Answered
Chosen Opt on 3

Q.10 Select the most appropriate one-word substitution for the given group of words.

A person of evil reputation

- Ans
- 1 con
 - 2 notor ous
 - 3 famous
 - 4 renowned

Quest on D 6549782437
Status Answered
Chosen Opt on 2

Q.11 Fill in the blank with the most appropriate option.

I am allowed to take photographs inside the church, ?

- Ans
- 1 sha
 - 2 aren't
 - 3 am
 - 4 can't

Quest on D 6549782411
Status Answered
Chosen Opt on 2

Q.12 Fill in the blank with the most appropriate word.

More than half the drain been desilted.

- Ans
- 1 has
 - 2 was
 - 3 have
 - 4 s

Quest on D 6549782414
Status Answered
Chosen Opt on 1

Q.13 Fill in the blank with the most appropriate word.

! What a frightening experience it was!

- Ans
- 1 Oh
 - 2 Bravo
 - 3 A as
 - 4 Hurray

Quest on D 6549782413
Status Answered
Chosen Opt on 1

Q.14 Select the correctly spelt word.

- Ans
- 1 recommend
 - 2 recomend
 - 3 reccommend
 - 4 recommened

Quest on D 6549782444
Status Answered
Chosen Opt on 1

Q.15 Select the most appropriate one-word substitution for the given group of words.

A person who believes everything easily

- Ans
- 1 credulous
 - 2 credtor
 - 3 re-able
 - 4 p-ause

Quest on D 6549782441
Status Answered
Chosen Opt on 1

Comprehension:

In the following passage some words have been deleted. Fill in the blanks with the help of the alternatives given. Select the most appropriate option for each number.

Afred Hitchcock was a man with vivid imagination, (1) skills and a passion for life. With his (2) style and God-gifted wit he produced and directed (3) of the most thrilling films that had the audience swooning (4) fright and falling off their seats with laughter. He was greatly (5) by American films and magazines.

SubQuestion No : 16

Q.16 Select the most appropriate option to fill in blank no. 1.

- Ans 1 creative
 2 leading
 3 original
 4 clever

Question ID: 6549782417
 Status: Answered
 Chosen Option: 1

Comprehension:

In the following passage some words have been deleted. Fill in the blanks with the help of the alternatives given. Select the most appropriate option for each number.

Afred Hitchcock was a man with vivid imagination, (1) skills and a passion for life. With his (2) style and God-gifted wit he produced and directed (3) of the most thrilling films that had the audience swooning (4) fright and falling off their seats with laughter. He was greatly (5) by American films and magazines.

SubQuestion No : 17

Q.17 Select the most appropriate option to fill in blank no. 2.

- Ans 1 separate
 2 ordinary
 3 unique
 4 dual

Question ID: 6549782418
 Status: Answered
 Chosen Option: 3

Comprehension:

In the following passage some words have been deleted. Fill in the blanks with the help of the alternatives given. Select the most appropriate option for each number.

Afred Hitchcock was a man with vivid imagination, (1) skills and a passion for life. With his (2) style and God-gifted wit he produced and directed (3) of the most thrilling films that had the audience swooning (4) fright and falling off their seats with laughter. He was greatly (5) by American films and magazines.

SubQuestion No : 18

Q.18 Select the most appropriate option to fill in blank no. 3.

- Ans
- 1 more
 - 2 much
 - 3 any
 - 4 some

Question ID: 6549782419
 Status: Answered
 Chosen Option: 4

Comprehension:

In the following passage some words have been deleted. Fill in the blanks with the help of the alternatives given. Select the most appropriate option for each number.

Afred Hitchcock was a man with vivid imagination, (1) skills and a passion for life. With his (2) style and God-gifted wit he produced and directed (3) of the most thrilling films that had the audience swooning (4) fright and falling off their seats with laughter. He was greatly (5) by American films and magazines.

SubQuestion No : 19

Q.19 Select the most appropriate option to fill in blank no. 4.

- Ans
- 1 with
 - 2 by
 - 3 of
 - 4 through

Question ID: 6549782420
 Status: Answered
 Chosen Option: 1

Comprehension:

In the following passage some words have been deleted. Fill in the blanks with the help of the alternatives given. Select the most appropriate option for each number.

Afred Hitchcock was a man with vivid imagination, (1) skills and a passion for life. With his (2) style and God-gifted wit he produced and directed (3) of the most thrilling films that had the audience swooning (4) fright and falling off their seats with laughter. He was greatly (5) by American films and magazines.

SubQuestion No : 20

Q.20 Select the most appropriate option to fill in blank no. 5.

- Ans 1 determined
 2 altered
 3 attached
 4 influenced

Question ID: 6549782421
 Status: Answered
 Chosen Option: 1

Q.21 Select the most appropriate meaning of the given idiom.

Tide over

- Ans 1 to overcome
 2 to deceive
 3 to change sides
 4 to jump over

Question ID: 6549782432
 Status: Answered
 Chosen Option: 1

Q.22 Select the most appropriate meaning of the given idiom.

Through thick and thin

- Ans 1 by unfair means
 2 under extreme pressure
 3 under all circumstances
 4 going through pain

Question ID: 6549782433
 Status: Answered
 Chosen Option: 3

Q.23 Select the most appropriate one-word substitution for the given group of words.

Holding an office without receiving a pay

- Ans
- 1 charity
 - 2 honorary
 - 3 startup
 - 4 free lance

Quest on D 6549782440
Status Answered
Chosen Opt on 2

Q.24 Select the most appropriate ANTONYM of the given word.

DEFICIENCY

- Ans
- 1 snag
 - 2 excess
 - 3 dearth
 - 4 g tch

Quest on D 6549782430
Status Answered
Chosen Opt on 2

Q.25 Identify the segment in the sentence which contains a grammatical error.

Sam took a little time to thought before he replied.

- Ans
- 1 a t t e t m e
 - 2 to thought
 - 3 Sam took
 - 4 before he rep ed

Quest on D 6549782401
Status Answered
Chosen Opt on 2

Q.26 Identify the segment in the sentence which contains a grammatical error.

The jury are from different parts of the country.

- Ans
- 1 are from
 - 2 The jury
 - 3 d fferent parts
 - 4 of the country

Quest on D 6549782405
Status Answered
Chosen Opt on 1

Q.27 Select the most appropriate ANTONYM of the given word.

DIVERGE

- Ans
- 1 branch
 - 2 divide
 - 3 stray
 - 4 connect

Quest on D 6549782429
Status Answered
Chosen Option 4

Q.28 Select the misspelt word.

- Ans
- 1 nimca
 - 2 etiquette
 - 3 affiate
 - 4 adjourn

Quest on D 6549782445
Status Answered
Chosen Option 3

Q.29 Select the most appropriate synonym of the given word.

TUMULT

- Ans
- 1 surprise
 - 2 peace
 - 3 carty
 - 4 uproar

Quest on D 6549782424
Status Answered
Chosen Option 4

Q.30 Select the most appropriate option to substitute the underlined segment in the given sentence. If there is no need to substitute it, select 'No substitution required'.

The large mansion was over his reaching.

- Ans
- 1 No substitution required
 - 2 above his reaching
 - 3 away from reaching
 - 4 beyond his reach

Quest on D 6549782409
Status Answered
Chosen Option 4

Q.31 Select the most appropriate synonym of the given word.

INTRIGUING

- Ans
- 1 monotonous
 - 2 gripping
 - 3 simultaneous
 - 4 investment

Quest on D **6549782426**
 Status **Answered**
 Chosen Option **2**

Q.32 Identify the segment in the sentence which contains a grammatical error.

Two elderly ladies narrated an rather improbable story to the police.

- Ans
- 1 Two elderly ladies
 - 2 narrated an rather
 - 3 to the police
 - 4 improbable story

Quest on D **6549782402**
 Status **Answered**
 Chosen Option **1**

Q.33 Fill in the blank with the most appropriate word.

The wise try to improve themselves the fools keep blaming their luck.

- Ans
- 1 therefore
 - 2 whereas
 - 3 so
 - 4 whether

Quest on D **6549782412**
 Status **Answered**
 Chosen Option **2**

Q.34 Fill in the blank with the most appropriate word.

He was born in a business family and has a natural aptitude business.

- Ans
- 1 for
 - 2 to
 - 3 at
 - 4 on

Quest on D **6549782415**
 Status **Answered**
 Chosen Option **1**

Q.35 Select the correctly spelt word.

- Ans
- 1 r ght ous
 - 2 r teous
 - 3 r cheous
 - 4 r gh teous

Quest on D 6549782442
Status Answered
Chosen Opt on 1

Q.36 Select the most appropriate one-word substitution for the given group of words.

A deceased holy person's remains or belongings kept for reverence

- Ans
- 1 souven r
 - 2 re c
 - 3 trophy
 - 4 memento

Quest on D 6549782439
Status Answered
Chosen Opt on 4

Q.37 Select the most appropriate meaning of the given idiom.

Kick up a row

- Ans
- 1 cause a d sturbance
 - 2 arrange n rows
 - 3 h t someone angr y
 - 4 break a queue

Quest on D 6549782435
Status Answered
Chosen Opt on 1

Q.38 Select the most appropriate ANTONYM of the given word.

DEFILE

- Ans
- 1 degrade
 - 2 e evate
 - 3 debase
 - 4 evade

Quest on D 6549782431
Status Answered
Chosen Opt on 2

Q.39 Select the most appropriate option to substitute the underlined segment in the given sentence. If there is no need to substitute it, select 'No substitution required'.

He decided not to take to heart the loss that he had incurred in business.

- Ans
- 1 take heart of
 - 2 No substitution required
 - 3 takes to heart
 - 4 being taken heart

Quest on ID 6549782408
Status Answered
Chosen Option 1

Q.40 Identify the segment in the sentence which contains a grammatical error.

Miss Marple is neither a good singer or the good stage artist.

- Ans
- 1 Miss Marples
 - 2 neither a good singer
 - 3 stage artist
 - 4 or the good

Quest on ID 6549782404
Status Answered
Chosen Option 4

Q.41 Select the misspelt word.

- Ans
- 1 committee
 - 2 jeopardy
 - 3 negotiate
 - 4 genuity

Quest on ID 6549782446
Status Answered
Chosen Option 3

Q.42 Select the correctly spelt word.

- Ans
- 1 bouckey
 - 2 bowquet
 - 3 bouquet
 - 4 bookay

Quest on ID 6549782443
Status Answered
Chosen Option 3

Q.43 Select the most appropriate option to substitute the underlined segment in the given sentence. If there is no need to substitute it, select 'No substitution required'.

The police was accused to tamper with the evidence.

- Ans
- 1 accused of tampering
 - 2 accusing to tamper
 - 3 No substitution required
 - 4 accused to tampered

Quest on D **6549782410**
Status **Answered**
Chosen Option **1**

Q.44 Select the most appropriate one-word substitution for the given group of words.

To go around an area to keep a watch

- Ans
- 1 campaign
 - 2 cruise
 - 3 patrol
 - 4 explore

Quest on D **6549782438**
Status **Answered**
Chosen Option **3**

Q.45 Select the most appropriate ANTONYM of the given word.

EXPEL

- Ans
- 1 leave
 - 2 absorb
 - 3 erupt
 - 4 remove

Quest on D **6549782428**
Status **Answered**
Chosen Option **2**

Comprehension:

Read the given passage and answer the questions that follow

Fishing traps, baskets, cradles, bridges, rainproof hats and umbrellas, mats, musical instruments, water pipes and fans have always used the bamboo in numerous ways. It is used for house construction, fencing and in the making of bullock carts. Low-cost domestic furniture and a vast range of domestic utility items made of bamboo can be easily seen in any of our bazaars. But we do not easily notice the countless ways this modest material comes to be used by rural people. One can see it being used in the backsmith's bellows, or as bamboo pins in carpentry joints or in the fabrication of toys in village markets. But to the British foresters the multitude of uses that "the forest weed" played in the local environment was of no account, as it did not figure in forest revenues. Bamboo also interfered with the growing of teak, an essential part of the revenue forest policy. It was only in the 1920s that the British realised that by mashing bamboo into mulch and shreds, cooking it in chemicals, pulping and flattening it, they could produce sheets of paper. This would bring the British increased forest revenue and 'development' (as defined by them) to the so-called backward regions of India. However, they chose to ignore the consequences this activity would have on the health of the forest. So while bamboo was sold at high prices to basket weavers, it was heavily subsidised for the paper industry. Even after independence, supplying bamboo at extremely low prices to Indian paper mills became a 'patron's' duty of the government, and bamboo supplies were assured for decades at unchanged prices. The disaster that this would cause to the forests, and to the craftspeople, still remained unforeseen.

Colonialism affected forests across India and marginalised the inhabitants and the traditional occupations they practised. As late as the 1970s, the World Bank proposed that 4,600 hectares of natural forest should be replaced by tropical pine to provide pulp for the paper industry. It was only after protests by local environmentalists that the project was stopped. Colonialism was therefore not only about repression, it was also a story of displacement, impoverishment and ecological crises.

SubQuestion No : 46

Q.46 The varied uses of bamboo were disregarded by the British till the 1920s because:

- Ans
- 1 they did not use bamboo products at all
 - 2 it did not increase the forest revenue
 - 3 the bamboo products were cheaply available
 - 4 it was used in the backward regions only

Question ID: 6549782450

Status: Answered

Chosen Option: 2

Comprehension:

Read the given passage and answer the questions that follow

From traps, baskets, cradles, bridges, rainproof hats and umbrellas, mats, musical instruments, water pipes and fans have a ways used the bamboo in numerous ways. It is used for house construction, fencing and in the making of bullock carts. Low-cost domestic furniture and a vast range of domestic utility items made of bamboo can be easily seen in any of our bazaars. But we do not easily notice the countless ways this modest material comes to be used by rural people. One can see it being used in the backstreets, be it for bamboo poles in carpentry joints or in the fabrication of toys in village markets. But to the British foresters the multitude of uses that "the forest weed" played in the local environment was of no account, as it did not figure in forest revenues. Bamboo also interfered with the growing of teak, an essential part of the revenue forest policy. It was only in the 1920s that the British realised that by mashing bamboo into mulch, shredding, cooking in chemicals, pulping and flattening it, they could produce sheets of paper. This would bring the British increased forest revenue and 'development' (as defined by them) to the so-called backward regions of India. However, they chose to ignore the consequences this activity would have on the health of the forest. So while bamboo was sold at high prices to basket weavers, it was heavily subsidised for the paper industry. Even after independence, supplying bamboo at extremely low prices to run a paper mill became a 'patron's' duty of the government, and bamboo supplies were assured for decades at unchanged prices. The disaster that this would cause to the forests, and to the craftspeople, still remained unforeseen.

Colonialism affected forests all across India and marginalised the inhabitants and the traditional occupations they practised. As late as the 1970s, the World Bank proposed that 4,600 hectares of natural forest should be replaced by tropical pine to provide pulp for the paper industry. It was only after protests by local environmentalists that the project was stopped. Colonialism was therefore not only about repression, it was also a story of displacement, impoverishment and ecological crises.

SubQuestion No : 47

Q.47 What does the 'forest weed' refer to?

- Ans
- 1. Sa
 - 2. Bamboo
 - 3. Pine
 - 4. Teak

Question ID: 6549782448

Status: Answered

Chosen Option: 2

Comprehension:

Read the given passage and answer the questions that follow

Fishing traps, baskets, cradles, bridges, rainproof hats and umbrellas, mats, musical instruments, water pipes and fans have always used the bamboo in numerous ways. It is used for house construction, fencing and in the making of bullock carts. Low-cost domestic furniture and a vast range of domestic utility items made of bamboo can be easily seen in any of our bazaars. But we do not easily notice the countless ways this modest material comes to be used by rural people. One can see it being used in the backsmith's bellows, or as bamboo pins in carpentry joints or in the fabrication of toys in village markets. But to the British foresters the multitude of uses that "the forest weed" played in the local environment was of no account, as it did not figure in forest revenues. Bamboo also interfered with the growing of teak, an essential part of the revenue forest policy. It was only in the 1920s that the British realised that by milling bamboo into mulmetre shreds, cooking them in chemicals, pulping and flattening them, they could produce sheets of paper. This would bring the British increased forest revenue and 'development' (as defined by them) to the so-called backward regions of India. However, they chose to ignore the consequences this activity would have on the health of the forest. So while bamboo was sold at high prices to basket weavers, it was heavily subsidised for the paper industry. Even after independence, supplying bamboo at extremely low prices to Indian paper mills became a 'patron's' duty of the government, and bamboo supplies were assured for decades at unchanged prices. The disaster that this would cause to the forests, and to the craftspeople, still remained unforeseen.

Colonialism affected forests across India and marginalised the inhabitants and the traditional occupations they practised. As late as the 1970s, the World Bank proposed that 4,600 hectares of natural forest should be replaced by tropical pine to provide pulp for the paper industry. It was only after protests by local environmentalists that the project was stopped. Colonialism was therefore not only about repression, it was also a story of displacement, impoverishment and ecological crises.

SubQuestion No : 48

Q.48 Which of these is NOT a step in the production of paper?

- Ans
- 1 Milling
 - 2 Pulping
 - 3 Weaving
 - 4 Flattening

Question ID: 6549782449

Status: Answered

Chosen Option: 3

Comprehension:

Read the given passage and answer the questions that follow

Fishing traps, baskets, cradles, bridges, rainproof hats and umbrellas, mats, musical instruments, water pipes and fans have always used the bamboo in numerous ways. It is used for house construction, fencing and in the making of bullock carts. Low-cost domestic furniture and a vast range of domestic utility items made of bamboo can be easily seen in any of our bazaars. But we do not easily notice the countless ways this modest material comes to be used by rural people. One can see it being used in the backsmith's bellows, or as bamboo pins in carpentry joints or in the fabrication of toys in village markets. But to the British foresters the multitude of uses that "the forest weed" played in the local environment was of no account, as it did not figure in forest revenues. Bamboo also interfered with the growing of teak, an essential part of the revenue forest policy. It was only in the 1920s that the British realised that by mashing bamboo into mulch, shredding, cooking in chemicals, pulping and flattening it, they could produce sheets of paper. This would bring the British increased forest revenue and 'development' (as defined by them) to the so-called backward regions of India. However, they chose to ignore the consequences this activity would have on the health of the forest. So while bamboo was sold at high prices to basket weavers, it was heavily subsidised for the paper industry. Even after independence, supplying bamboo at extremely low prices to Indian paper mills became a 'patron's' duty of the government, and bamboo supplies were assured for decades at unchanged prices. The disaster that this would cause to the forests, and to the craftspeople, still remained unforeseen.

Commercial activities affected forests across India and marginalised the inhabitants and traditional occupations they practised. As late as the 1970s, the World Bank proposed that 4,600 hectares of natural forest should be replaced by tropical pine to provide pulp for the paper industry. It was only after protests by local environmentalists that the project was stopped. Commercialism was therefore not only about repression, it was also a story of displacement, impoverishment and ecological crises.

SubQuestion No : 49

Q.49 Bamboo is referred to as 'modest material' because:

- Ans
- 1 its availability in abundance in India
 - 2 the British believed it was worthless
 - 3 it can be easily shredded and reduced to a pulp
 - 4 it is inexpensive and not highly accommodated

Question ID: 6549782451

Status: Answered

Chosen Option: 1

Comprehension:

Read the given passage and answer the questions that follow

Fishing traps, baskets, cradles, bridges, rainproof hats and umbrellas, mats, musical instruments, water pipes and fans have always used the bamboo in numerous ways. It is used for house construction, fencing and in the making of bullock carts. Low-cost domestic furniture and a vast range of domestic utility items made of bamboo can be easily seen in any of our bazaars. But we do not easily notice the countless ways this modest material comes to be used by rural people. One can see it being used in the backsmith's bellows, or as bamboo pins in carpentry joints or in the fabrication of toys in village markets. But to the British foresters the multitude of uses that "the forest weed" played in the local environment was of no account, as it did not figure in forest revenues. Bamboo also interfered with the growing of teak, an essential part of the revenue forest policy. It was only in the 1920s that the British realised that by mashing bamboo into mulch, shredding, cooking in chemicals, pulping and flattening it, they could produce sheets of paper. This would bring the British increased forest revenue and 'development' (as defined by them) to the so-called backward regions of India. However, they chose to ignore the consequences this activity would have on the health of the forest. So while bamboo was sold at high prices to basket weavers, it was heavily subsidised for the paper industry. Even after independence, supplying bamboo at extremely low prices to India's paper mills became a 'patriotic' duty of the government, and bamboo supplies were assured for decades at unchanged prices. The disaster that this would cause to the forests, and to the craftspeople, still remained unforeseen.

Colonialism affected forests across India and marginalised the inhabitants and the traditional occupations they practised. As late as the 1970s, the World Bank proposed that 4,600 hectares of natural forest should be replaced by tropical pine to provide pulp for the paper industry. It was only after protests by local environmentalists that the project was stopped. Colonialism was therefore not only about repression, it was also a story of displacement, impoverishment and ecological crisis.

SubQuestion No : 50

Q.50 What was considered to be a patriotic duty of the government after independence?

Ans

- 1 Handling the ecological crisis in India
- 2 Replacing India's forests by tropical pines
- 3 Supplying bamboo at low prices to paper mills
- 4 Preventing the displacement of foresters

Question ID **6549782452**

Status **Answered**

Chosen Option **3**



JK Chrome

JK Chrome | Employment Portal



Rated No.1 Job Application of India

Sarkari Naukri
Private Jobs
Employment News
Study Material
Notifications



JOBS



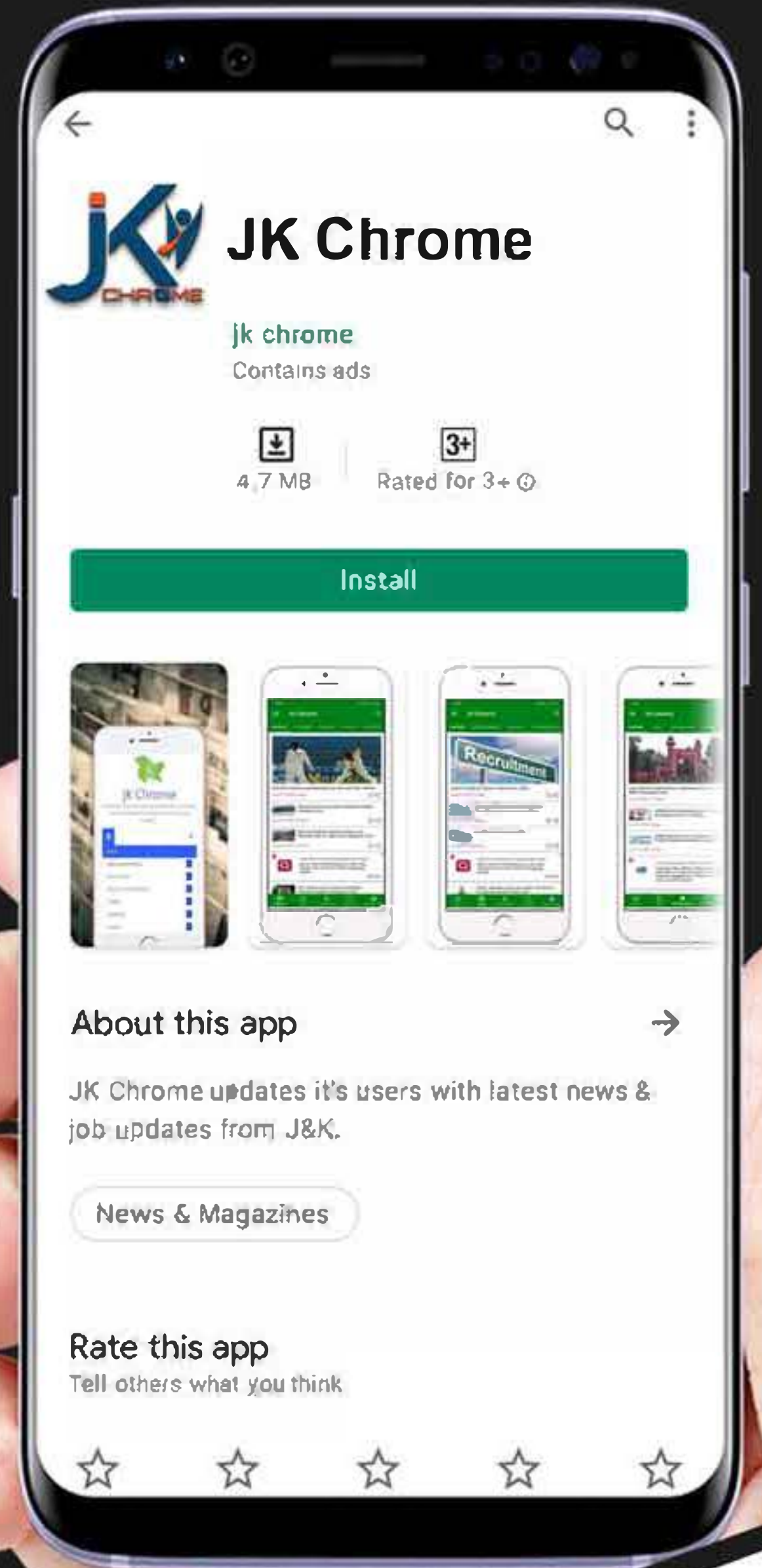
NOTIFICATIONS



G.K



STUDY MATERIAL



JK Chrome

jk chrome
Contains ads



www.jkchrome.com | Email : contact@jkchrome.com