



JK Chrome

JK Chrome | Employment Portal



Rated No.1 Job Application of India

Sarkari Naukri
Private Jobs
Employment News
Study Material
Notifications



JOBS



NOTIFICATIONS



G.K



STUDY MATERIAL



JK Chrome

jk chrome
Contains ads



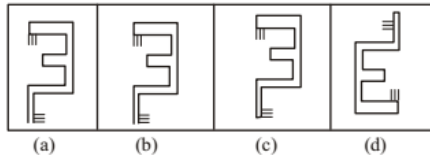
www.jkchrome.com | Email : contact@jkchrome.com

1. Which answer figure is the exact mirror image of the given question figure when the mirror is held from the right at PQ?
(SSC CGL 1st Sit. 2010)

Question Figure:

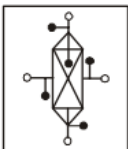


Answer Figures:

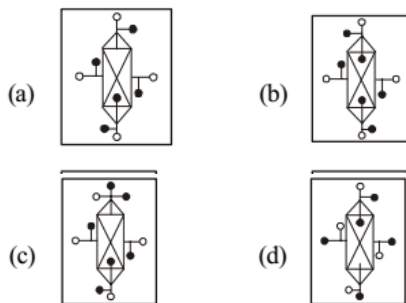


2. If the mirror is placed on the line LM, then which of the answer figures is the right image of the given question figure?
(SSC CGL 2nd Sit. 2010)

Questions Figure :



Answer Figures :



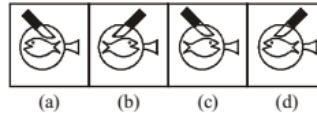
DIRECTION (Q. 3) : If a mirror is placed on the line MN, then which of the answer figures is the correct image of the given question figure ?

(SSC CGL 1st Sit. 2011)

3. Question Figure:



Answer Figures:



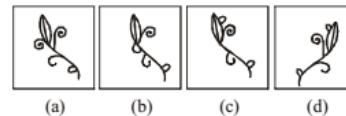
DIRECTIONS (Q. 4) : If a mirror is placed on the line MN, then which of the answer figures is the right image of the given figure ?

(SSC CGL 2nd Sit. 2011)

4. Question Figure :

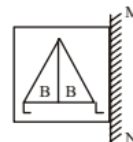


Answer Figures :

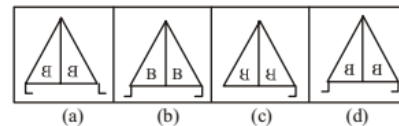


5. Which of the answer figure is exactly the mirror image of the question figure if a mirror is placed on the line MN?
(SSC CGL 1st Sit. 2012)

Question Figure :

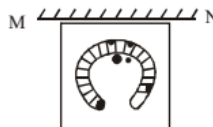


Answer Figures :

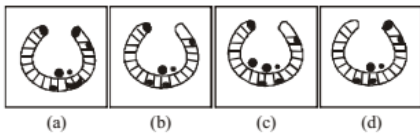


6. In question, if a mirror is placed on the line MN, then which of the answer figures is the right image of the given figure?
(SSC CGL 2nd Sit. 2012)

Question Figure :



Answer Figures :

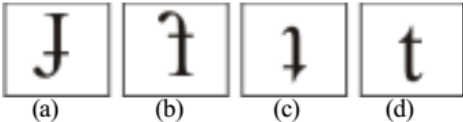


7. Select the correct option that will be the mirror reflection of the problem figure. (SSC CGL 1st Sit. 2012)

Question Figure :

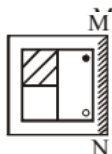


Answer Figures :

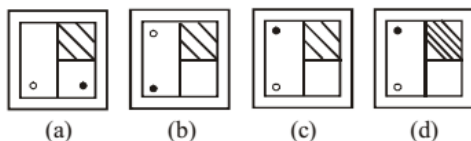


8. In the question if a mirror is placed on the line MN, then which of the answer figures is the right image of the given figure? (SSC CGL 2nd Sit. 2012)

Question figure

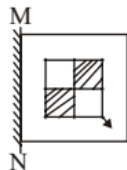


Answer figures

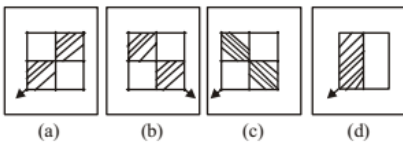


9. If a mirror is placed on the MN, then which of the answer figures is the right image of the given figure? (SSC CGL 1st Sit. 2013)

Question Figure :



Answer Figures :

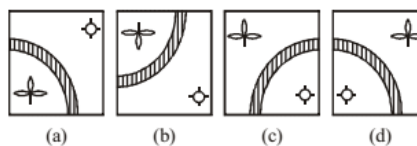


10. If a mirror is placed on the line AB, then which of the answer figures is the correct image of the given question figure? (SSC Sub. Ins. 2012)

Question Figure :




Answer Figures :

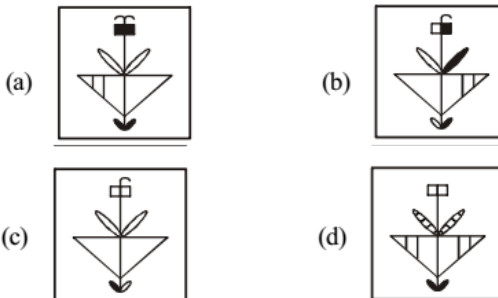


11. Find out the mirror image of the given figure. (SSC CHSL 2012)

Question Figure :

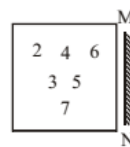


Answer Figures :

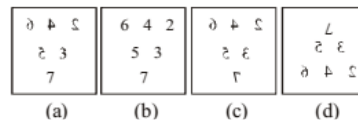


12. Which of the answer figures is exactly the mirror image of the given pattern of numbers when the mirror is held at MN? (SSC CGL 2nd Sit. 2013)

Question Figure :




Answer Figures :

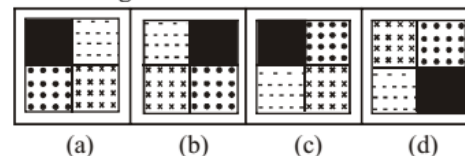


13. Choose the right water-image of the question figure from the given answer figures. (SSC CGL 1st Sit. 2013)

Question Figure :

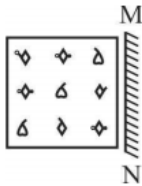


Answer Figure :

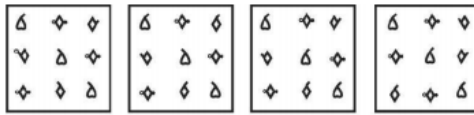


14. Which of the answer figures is exactly the mirror image of the given figure when the mirror is held at MN?
(SSC CGL 1st Sit. 2013)

Question Figures :




Answer Figures :



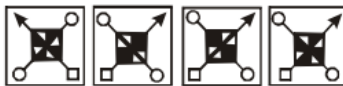
(a) (b) (c) (d)

15. From the answer figures, find out the figure which is the exact mirror image of the question figure, when the mirror is placed on the line MN.
(SSC CGL 1st Sit. 2013)

Question Figure :



Answer Figures :



(a) (b) (c) (d)

DIRECTIONS (Qs. 16 - 17) : A mirror is placed on line MN. Then which of the answer figures is the correct image of the given figure?

(SSC Multitasking 2013)

16. **Question Figure :**



Answer Figures :




(a) (b) (c) (d)

17. **Question Figure :**



Answer Figures :



(a) (b) (c) (d)

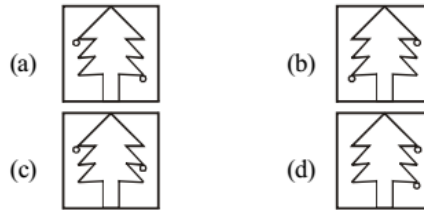
DIRECTIONS (Qs. 18 - 19) : In each of the following questions, if a mirror is placed on the line AB, then which of the answer figures is the right image of the given figure?

(SSC Sub. Ins. 2013)

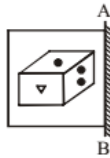
18. **Question Figure :**



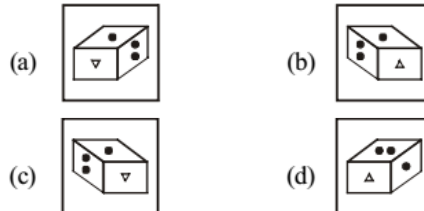
Answer Figures :



19. **Question Figure :**

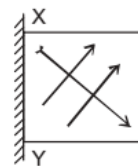


Answer Figures :

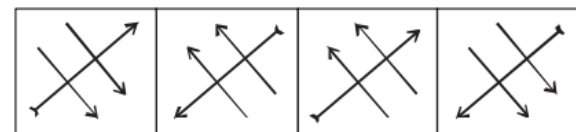


20. If a mirror is placed on the line XY, then which of the answer figures is the correct image of the given question figure?
(SSC Steno. 2013)

Question Figure :



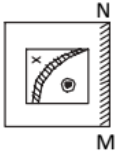
Answer Figures :



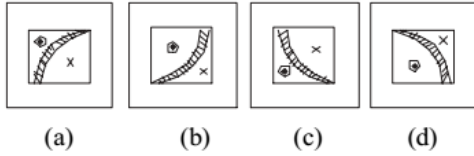
(a) (b) (c) (d)

21. If a mirror is placed on the line MN, then which of the answer figures is the right image of the given figure?
(SSC Steno. 2014)

Question figure



Answer Figures :

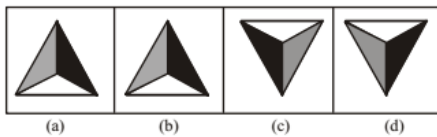


22. If a mirror is placed on the line MN, then which of the answer figures is the right image of the given figure?
(SSC Multitasking 2014)

Question Figure :

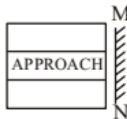


Answer Figures :

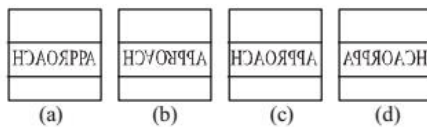


23. If a mirror is placed on the line MN, then which of the answer figures is the right image of the given figure?
(SSC Sub. Ins. 2014)

Question figure:

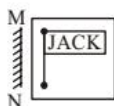


Answer figures:

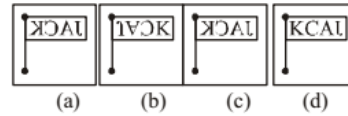


24. If a mirror is placed on the line MN, then which of the answer figures is the right image of the given figure?
(SSC CGL 2014)

Question Figure :

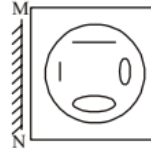


Answer Figures :

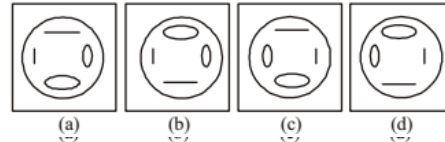


25. If a mirror is placed on the line MN, then which of the answer figures is the right image of the given figure?
(SSC CHSL 2014)

Question Figure :

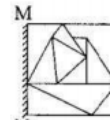


Answer Figures :

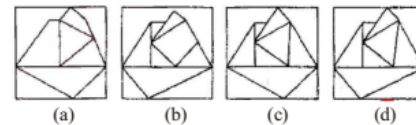


26. If a mirror is placed on the line MN, then which of the answer figures is the right image of the given figure.
(SSC Sub. Ins. 2015)

Question Figure :

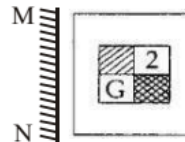


Answer figures:

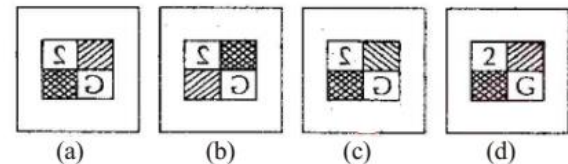


27. Which is the correct image if the picture is held in front of a mirror?
(SSC Sub. Ins. 2015)

Question figure:



Answer figures:



28. Which one of the following is water image of "COMMISSION"?

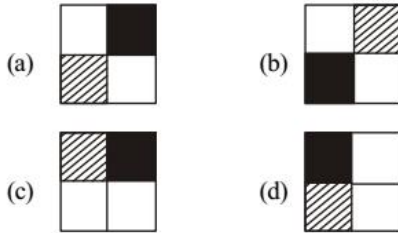
- (a) NOISSIMWOC (b) COMMI22ION
(c) COMMI22ION (d) NOISSIMWOC

29. If a mirror is placed on the line MN, then which of the answer figures is the right image of the given figure?
(SSC CGL 1st Sit. 2015)

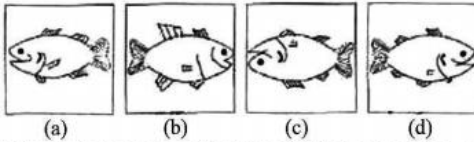

Question figure:



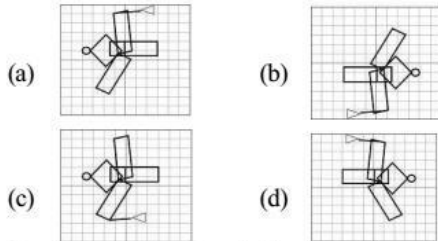
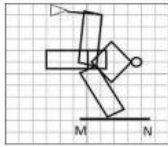
Answer Figures :



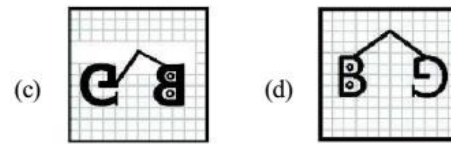

30. If a mirror is placed on the line MN, then which of the answer figures is the right image of the given figure?
(SSC CGL 1st Sit. 2015)



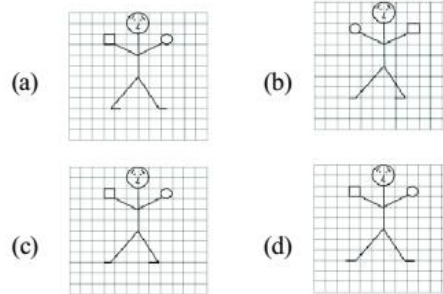
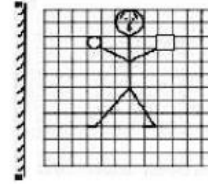
31. Mirror is placed on the line MN, then which of the answer figures is the right image?
(SSC CGL 1st Sit. 2016)



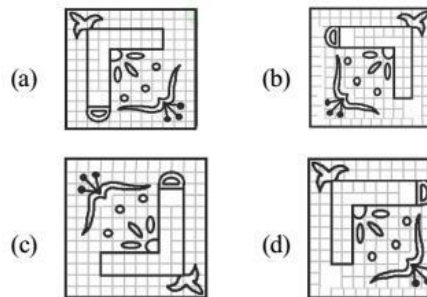
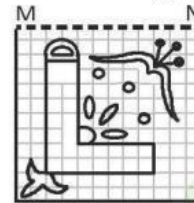
32. If a mirror is placed on the line MN, then which of the answer figures is the right image of the given figure?
(SSC CGL 1st Sit. 2016)



33. If a mirror is placed on the line MN, then which of the answer figures is the right image of the given figure?
(SSC CGL 1st Sit. 2016)

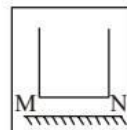


34. If a mirror is placed on the line MN, then which of the answer figures is the right image of the figure?
(SSC CGL 1st Sit. 2016)

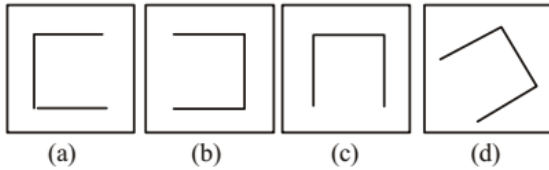


35. If a mirror is placed on the line MN, then which of the answer figures is the right image of the given figure?
(SSC Steno. 2016)

Question Figure :



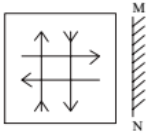
Answer Figures:



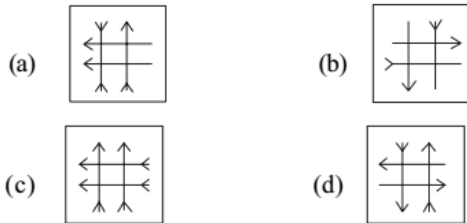
DIRECTIONS (Qs. 36-37): In the following questions, if a mirror is placed on the line MN, then which of the answer figures is the right image of the given figure?

(SSC Sub. Ins. 2016)

36. **Question Figure:**

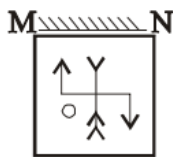


Answer Figure:

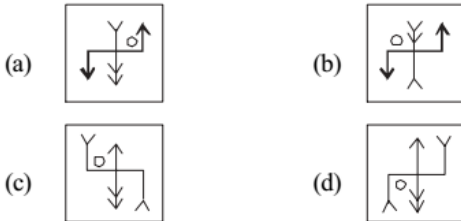


37. **Question Figure:**

(SSC Sub. Ins. 2016)



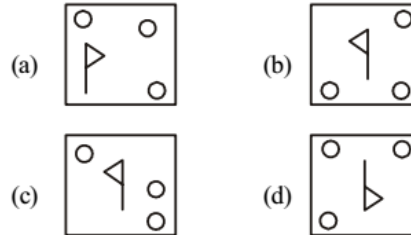
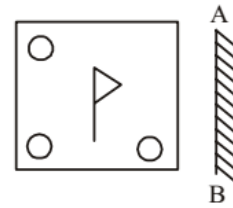
Answer Figure:



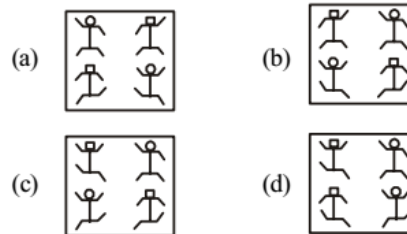
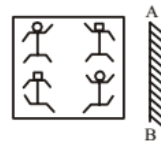
38. If a mirror is placed on the line AB, then which of the answer figures is the right image of the given figure?



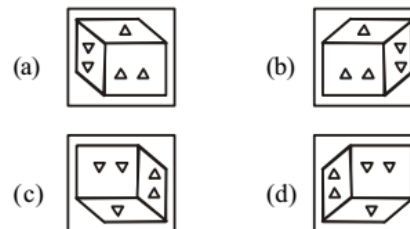
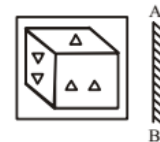
39. If a mirror is on the line AB, then which of the answer figures the right image of the given figure?



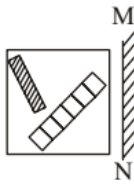
40. If a mirror is placed on the line AB, then which of the answer figure is the right image of the given figure?



41. If a mirror placed on the line AB, then which of the answer is the right image of the given figure?

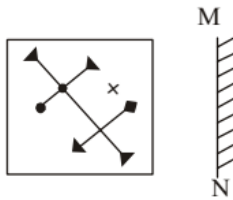


42. If a mirror is placed on the line MN, then which of the answer figure is the right image of the given figure?



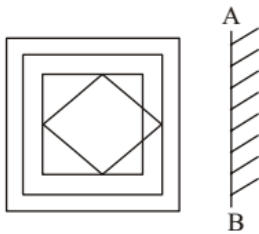
- (a) (b) (c) (d)

43. If a mirror is placed on the MN, then which of the answer figures is the right image of the given figure?
Question Figure:



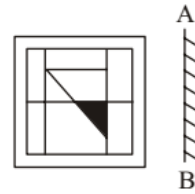
- Answer Figure :
(a) (b) (c) (d)

44. If a mirror is placed on the line AB, then which of the answer figures is the right image of the given figure?



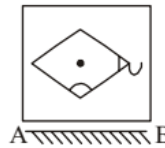
- (a) (b) (c) (d)

45. If a mirror is placed on the line AB, then which of the answer figures is the right image of the given figure?



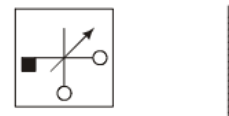
- (a) (b) (c) (d)

46. If a mirror is placed on the line AB, then which of the answer figures is the right image of the given figure?



- (a) (b) (c) (d)

47. Select the correct mirror image of the given figure when the mirror is placed to the right of the figure. (SSC CGL 2018)



- (a) (b) (c) (d)

48. Select the correct mirror image of the given figure when the mirror is placed to the right of the figure. (SSC CGL 2018)



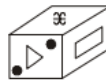
- (a) (b) (c) (d)

49. Select the correct mirror image of the given figure when the mirror is placed to the right of the figure. (SSC CHSL 2018)



- (a) (b) (c) (d)

50. Select the correct mirror image of the given figure when the mirror is placed on the right of the figure (SSC Sub. Ins. 2018)



- (a) (b) (c) (d)

51. Select the correct mirror image of the given figure when the mirror is placed on the right of the figure. (SSC Sub. Ins. 2018)



- (a) (b) (c) (d)

52. Choose the alternative which most closely resembles the mirror image of the given word when mirror is placed at XY line. (SSC Stenographer 2018)



- (a) (b) (c) (d)

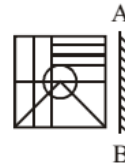
53. Which of the option figures is the exact mirror image of the given figure when the mirror is held at the right side?

RST2PK9LOX

(SSC CGL 2019-20)

- (a) (b) (c) (d)

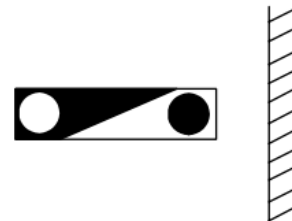
54. Select the correct mirror of the given figure when the mirror is placed at line AB. (SSC MTS 2019-20)



- (a) (b) (c) (d)

55. Select the correct mirror image of the given figure.

(SSC CHSL 2019-20)



- (a) (b) (c) (d)

56. Select the correct mirror image of the given combination when the mirror is placed at MN as shown.

(SSC CGL 2020-21)

4 9 X d v g P



- (a) d p v p X e 4
- (b) 9 6 v b X 6 4
- (c) 9 p v b X e 4
- (d) 9 p ^ b X e 7

57. Select the correct mirror image of the given figure when a mirror is placed on the right side of the figure.
(SSC CHSL 2020-21)



- (a)
- (b)
- (c)
- (d)

58. Select the mirror image of the figure marked 'X', when the mirror is placed on the right side of the figure.
(SSC MTS 2020-21)



- (a)
- (b)
- (c)
- (d)

59. Select the correct mirror image of the given figure when the mirror is placed at MN as shown below.
(SSC Stenographer 2020-21)



- (a) 254PZR
- (b) 254PZR
- (c) 254PZR
- (d) 254PZR

60. Select the correct mirror image of the given combination when the mirror is placed at 'PQ' as shown below.
(SSC Sub-Inspector 2020-21)



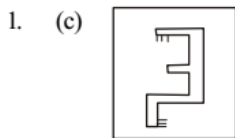
- (a) 1254200
- (b) 1254200
- (c) 1254200
- (d) 1254200

61. Select the correct mirror image of the given combination when the mirror is placed at 'PQ' as shown below.
(SSC Sub-Inspector 2020-21)

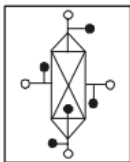


- (a) n z e g k i h
- (b) n z e g k i h
- (c) h i k g e z n
- (d) h i k g e z n

Hints & Solutions



2. (a) In water image upside becomes downside.

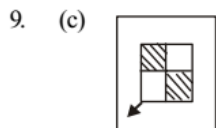


3. (c) 4. (b)

5. (d) Option (d) is the right mirror image.

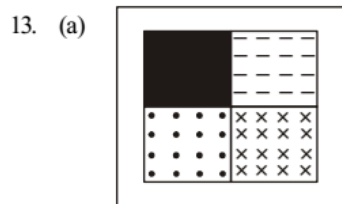
6. (b) Option (b) is the right image of the given figure.

7. (b) 8. (c)

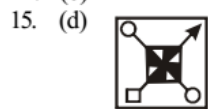


10. (a) Option (a) is the correct mirror image of given question figure.

11. (b) 12. (c)



14. (b)



16. (d) 17. (d) 18. (a)

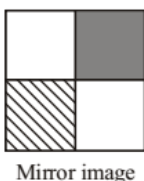
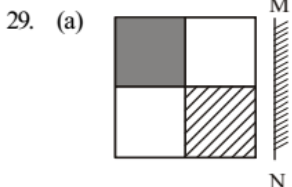
19. (c) 20. (b) 21. (d)

22. (b) 23. (c) 24. (c)

25. (c) 26. (d) 27. (c)

28. (c) Water image of

C	O	M	M	I	S	S	I	O	N
↓	↓	↓	↓	↓	↓	↓	↓	↓	↓
C	O	W	W	I	z	z	I	O	И



30. (d) 31. (b) 32. (b) 33. (a)

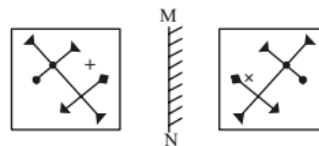
34. (a) 35. (c) 36. (d)

37. (b) option (b) is correct

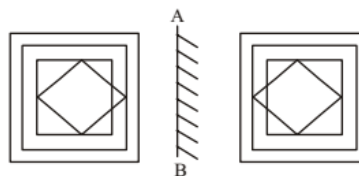
38. (c) 39. (b) 40. (b) 41. (b)

42. (c)

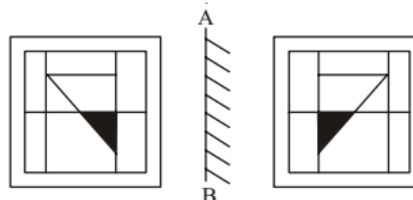
43. (d) According to question,



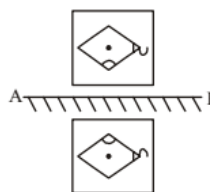
44. (b)



45. (d)



46. (c)



47. (a) 48. (d) 49. (d) 50. (d) 51. (b) 52. (b)

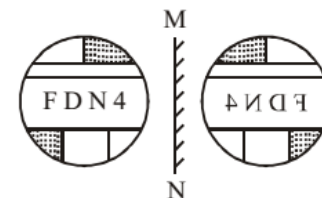
53. (c)

54. (a) When the mirror is placed at line AB, the figure of option (a) will appear.

55. (b)

56. (c)

57. (b)



58. (b) Mirror image of figure (x) is in option (b).

59. (a)

R	Z	4	P	5	2	∫	z	q	†	∑	Я
M											
N											

60. (a)

9	6	5	4	2	1	I	∫	†	z	∂	e
P											
Q											

61. (d) Mirror image is option (d)



JK Chrome

JK Chrome | Employment Portal



Rated No.1 Job Application of India

Sarkari Naukri
Private Jobs
Employment News
Study Material
Notifications



JOBS



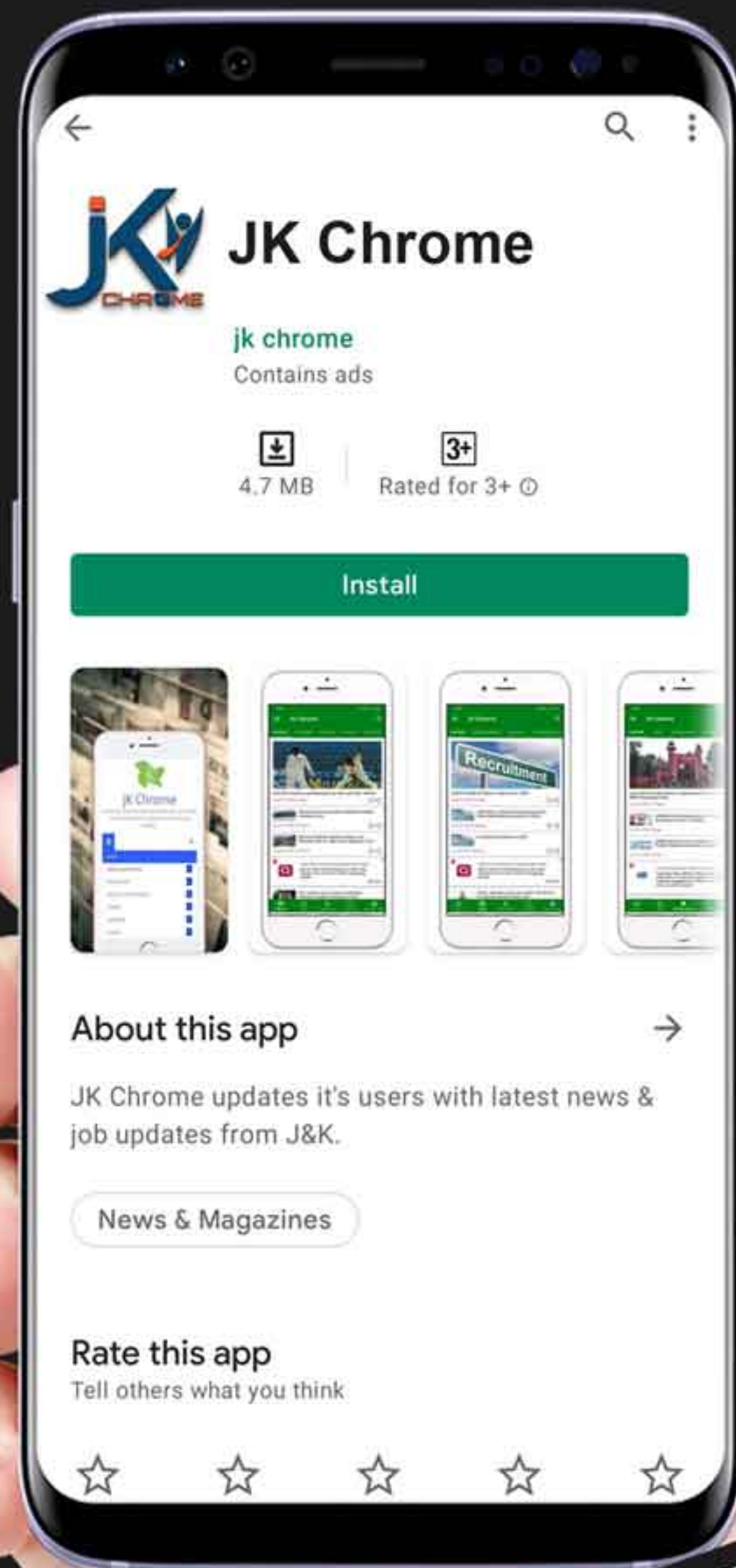
NOTIFICATIONS



G.K



STUDY MATERIAL



JK Chrome

jk chrome
Contains ads



www.jkchrome.com | Email : contact@jkchrome.com