


NCERT Solution for Class 1 Mathematics

Chapter 9

Data Handling

Q1: Count the shapes in the picture




Count the shapes in the above picture




Name the shapes
that occurs the most

that occurs the least

Answer:



Count the shapes in the above picture.



Name the shapes
that occurs the most

Triangle

that occurs the least

Rectangle

Q2: Count the number of letters in each name-word.

Names	Number of letters
S A L M A	<input type="text"/>
J O S E P H	<input type="text"/>
A R U N	<input type="text"/>
C H I N T U	<input type="text"/>
G E E T A	<input type="text"/>
A S H A	<input type="text"/>
S U B B U	<input type="text"/>
A H M A D	<input type="text"/>
R A V I	<input type="text"/>

How many names have four letters

How many names have five letters

How many names have six letters

How many times S comes in all the names taken together	<input type="text"/>
How many times A comes in all the names taken together	<input type="text"/>

Answer

Names	Number of letters
S A L M A	5
J O S E P H	6
A R U N	4
C H I N T U	6
G E E T A	5
A S H A	4
S U B B U	5
A H M A D	5
R A V I	4

How many names have four letters

How many names have five letters

How many names have six letters

How many times S comes in all the names taken together	<input type="text" value="4"/>
How many times A comes in all the names taken together	<input type="text" value="9"/>